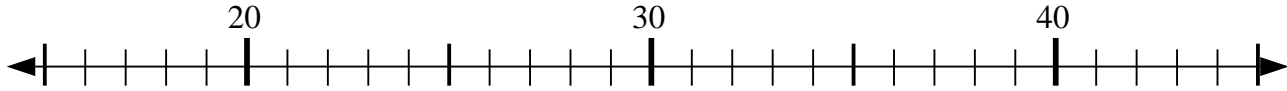




Usar las líneas de números para resolver cada problema.

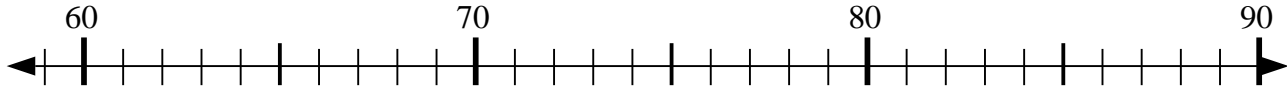
Respuestas

1) $27 - 0 = ?$



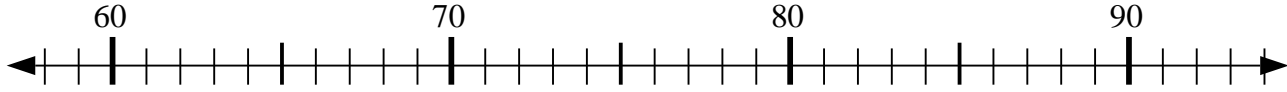
1. _____

2) $67 + 2 = ?$



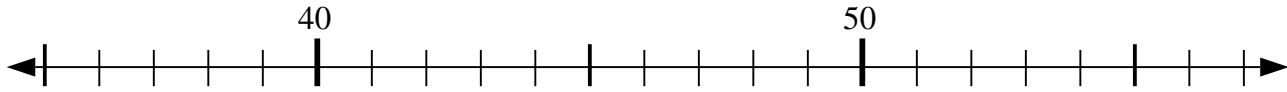
2. _____

3) $59 + 8 = ?$



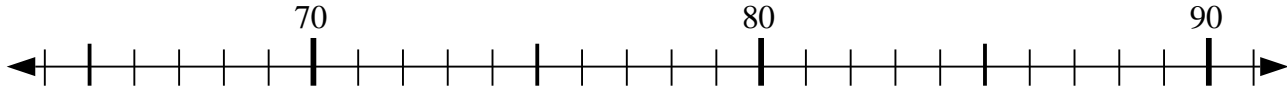
3. _____

4) $48 - 6 = ?$



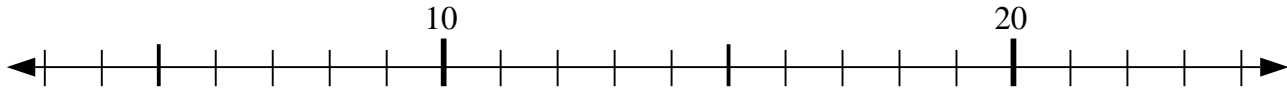
4. _____

5) $83 - 14 = ?$



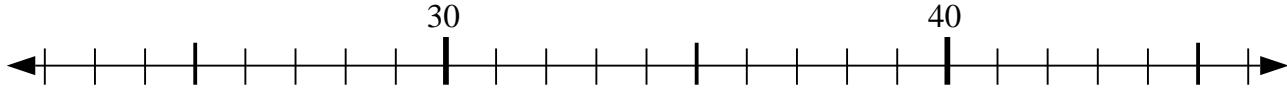
5. _____

6) $17 + 4 = ?$



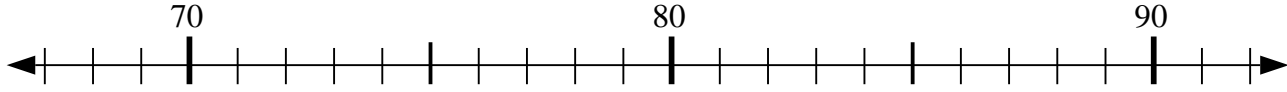
6. _____

7) $28 - 6 = ?$



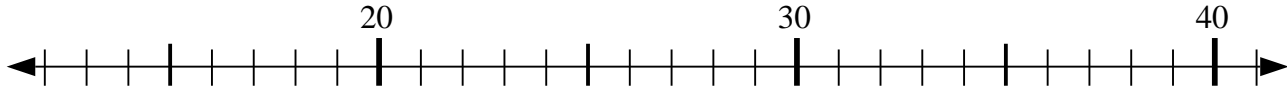
7. _____

8) $69 + 3 = ?$



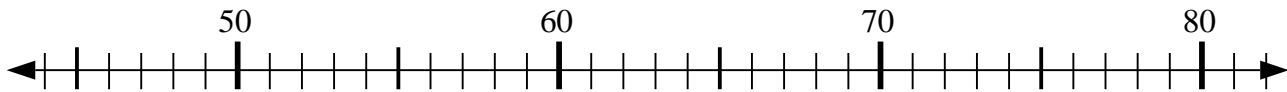
8. _____

9) $34 - 4 = ?$



9. _____

10) $49 - 3 = ?$

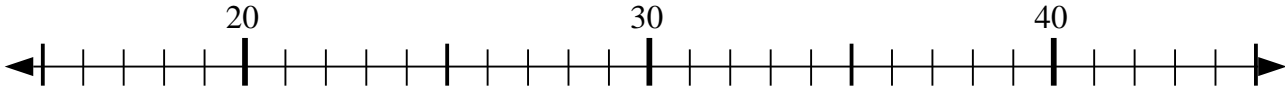


10. _____

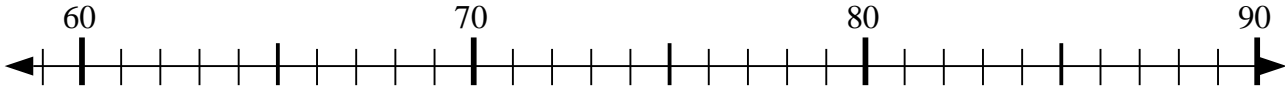


Usar las líneas de números para resolver cada problema.

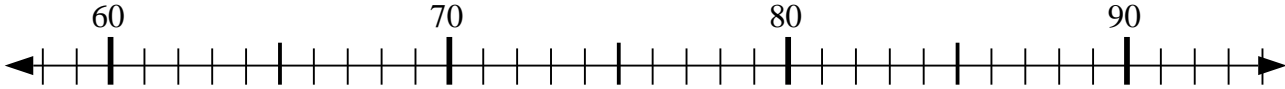
1) $27 - 0 = ?$



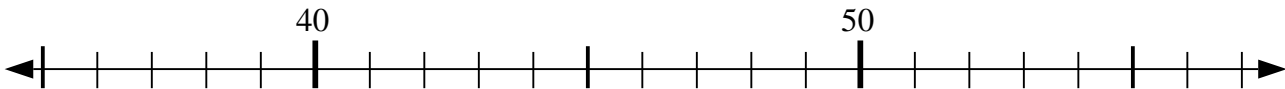
2) $67 + 2 = ?$



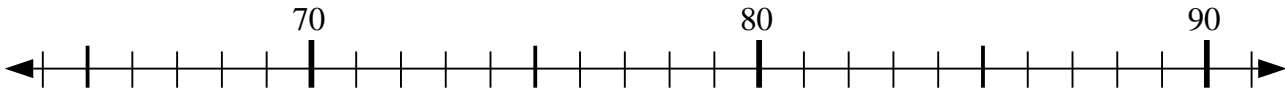
3) $59 + 8 = ?$



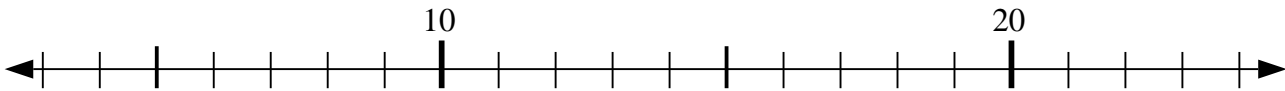
4) $48 - 6 = ?$



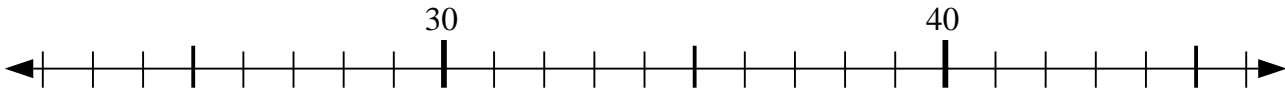
5) $83 - 14 = ?$



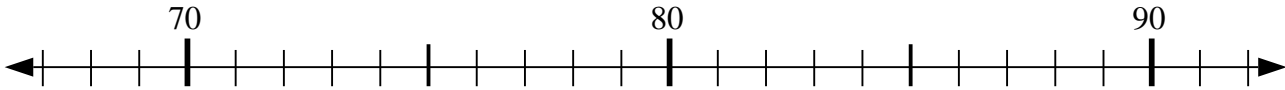
6) $17 + 4 = ?$



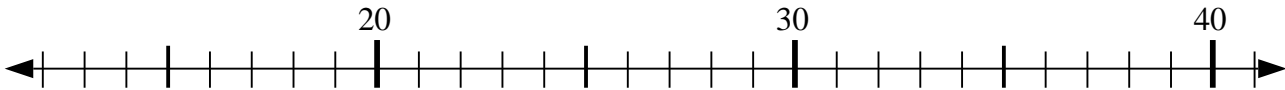
7) $28 - 6 = ?$



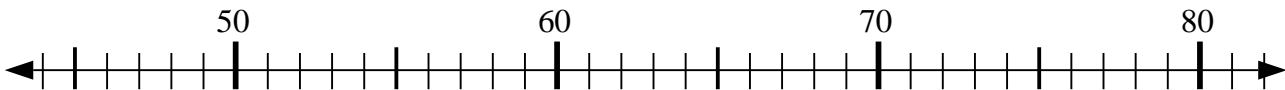
8) $69 + 3 = ?$



9) $34 - 4 = ?$



10) $49 - 3 = ?$



Respuestas

1. 27

2. 69

3. 67

4. 42

5. 69

6. 21

7. 22

8. 72

9. 30

10. 46