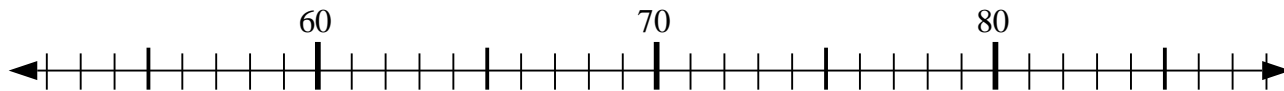




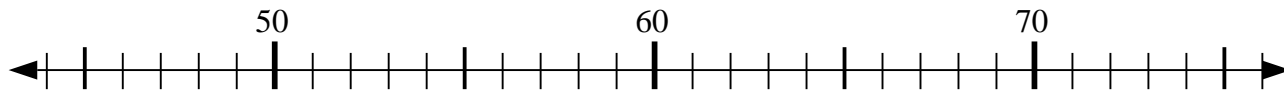
Usar las líneas de números para resolver cada problema.

Respuestas

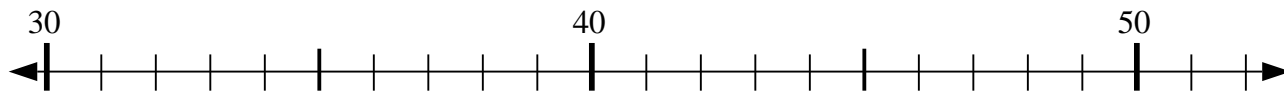
1) $70 - 10 = ?$



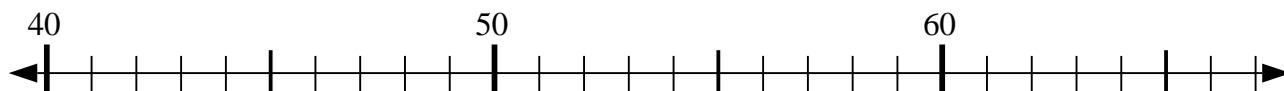
2) $75 - 25 = ?$



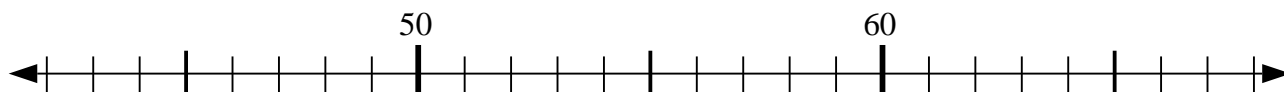
3) $48 - 13 = ?$



4) $54 + 4 = ?$



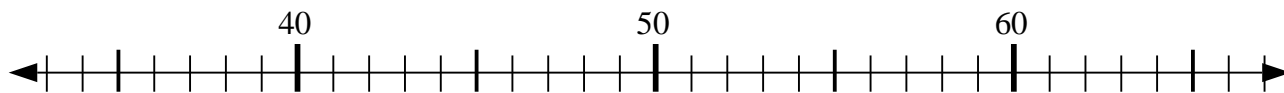
5) $55 + 5 = ?$



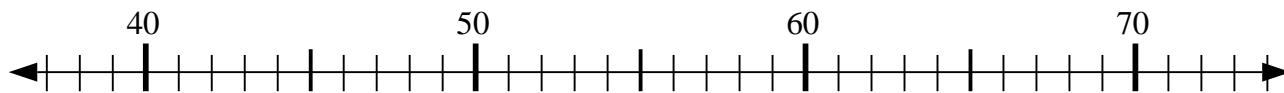
6) $35 - 29 = ?$



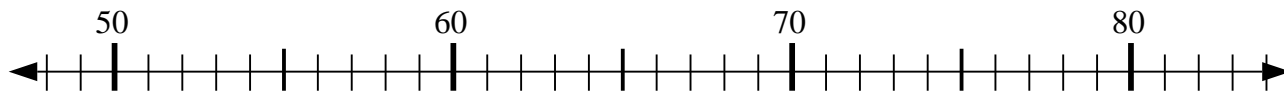
7) $35 + 6 = ?$



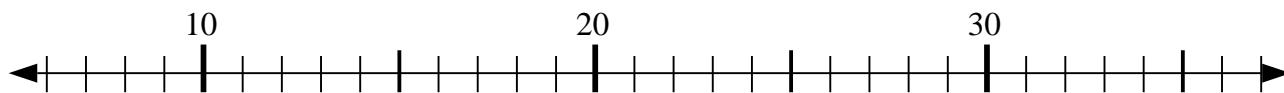
8) $74 - 12 = ?$



9) $71 - 22 = ?$



10) $32 - 12 = ?$

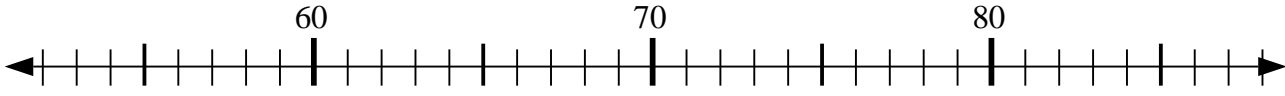


1. _____
2. _____
3. _____
4. _____
5. _____
6. _____
7. _____
8. _____
9. _____
10. _____

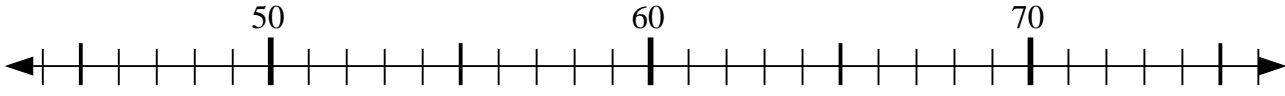


Usar las líneas de números para resolver cada problema.

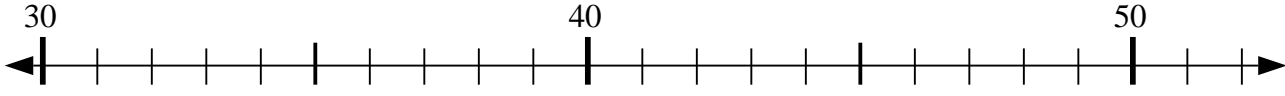
1) $70 - 10 = ?$



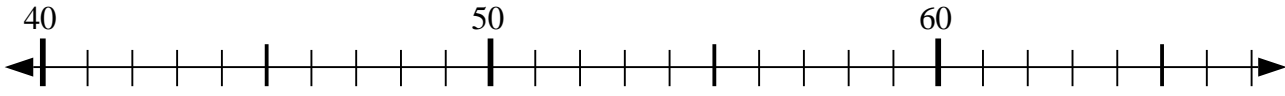
2) $75 - 25 = ?$



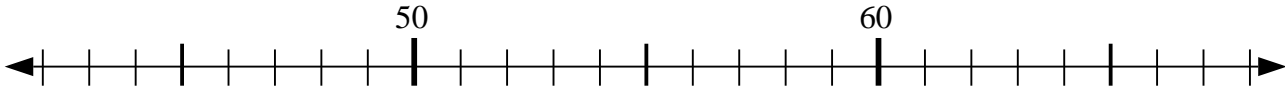
3) $48 - 13 = ?$



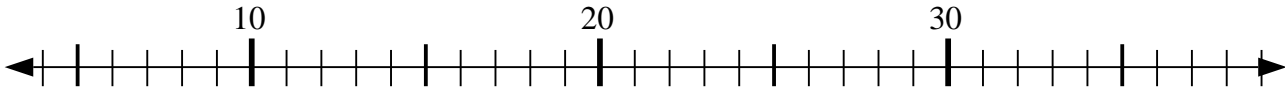
4) $54 + 4 = ?$



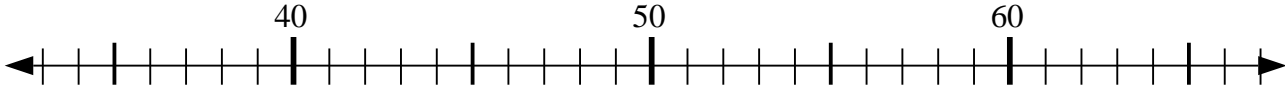
5) $55 + 5 = ?$



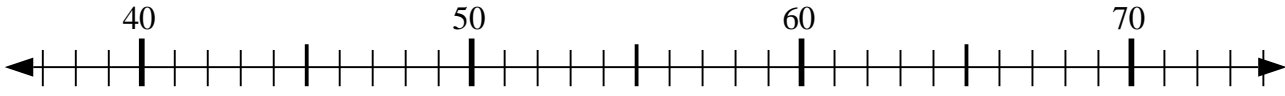
6) $35 - 29 = ?$



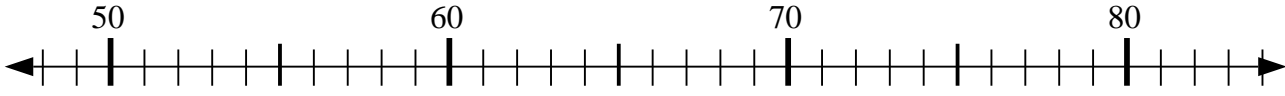
7) $35 + 6 = ?$



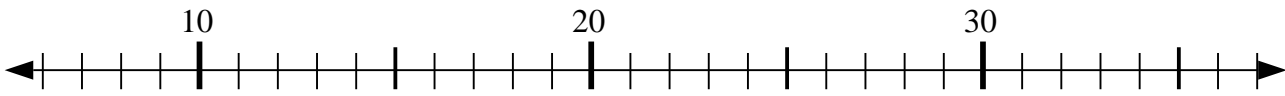
8) $74 - 12 = ?$



9) $71 - 22 = ?$



10) $32 - 12 = ?$



Respuestas

1. 60

2. 50

3. 35

4. 58

5. 60

6. 6

7. 41

8. 62

9. 49

10. 20