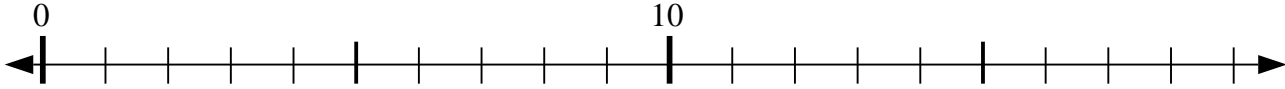




Usar las líneas de números para resolver cada problema.

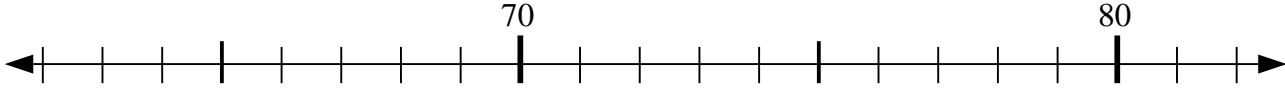
Respuestas

1) $13 - 6 = ?$



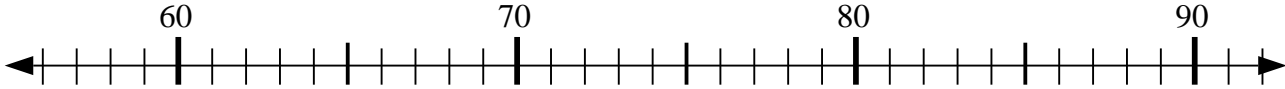
1. _____

2) $69 - 3 = ?$



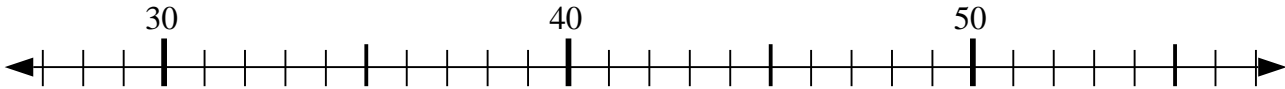
2. _____

3) $66 + 6 = ?$



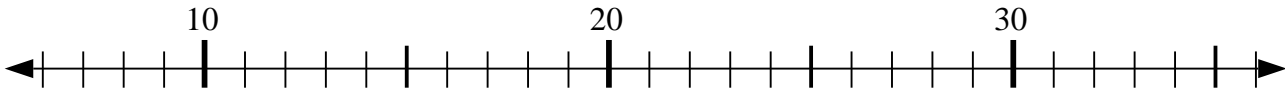
3. _____

4) $31 + 16 = ?$



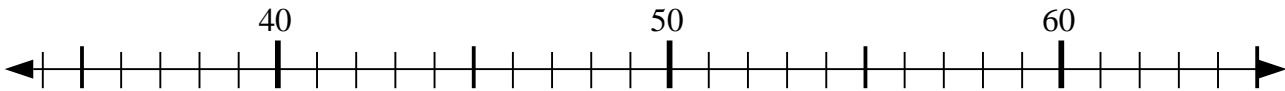
4. _____

5) $6 + 11 = ?$



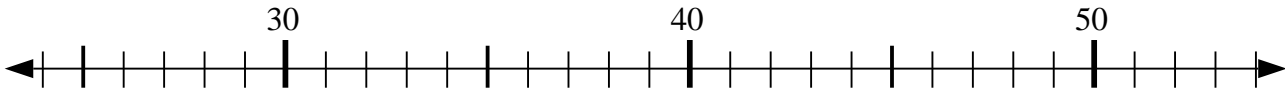
5. _____

6) $35 + 25 = ?$



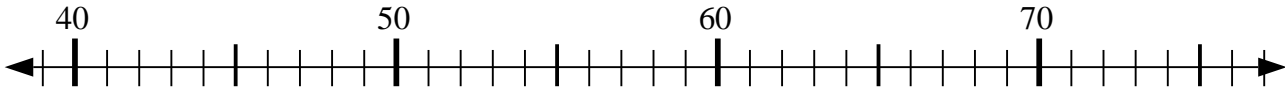
6. _____

7) $26 + 18 = ?$



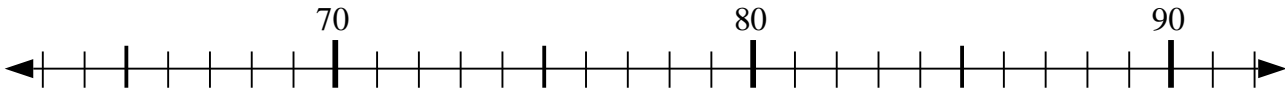
7. _____

8) $59 + 4 = ?$



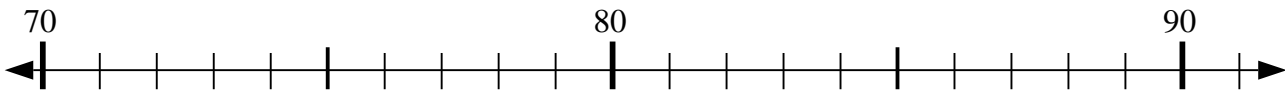
8. _____

9) $74 + 13 = ?$



9. _____

10) $77 + 4 = ?$

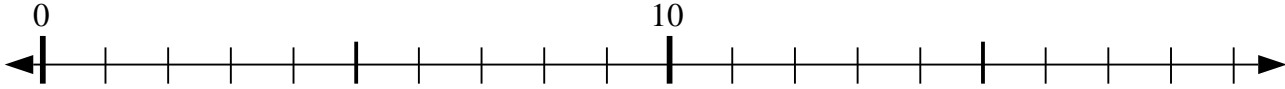


10. _____



Usar las líneas de números para resolver cada problema.

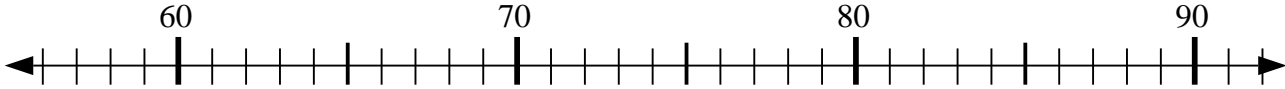
1) $13 - 6 = ?$



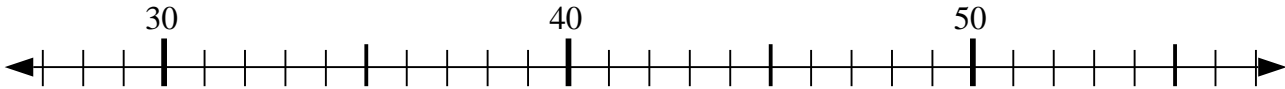
2) $69 - 3 = ?$



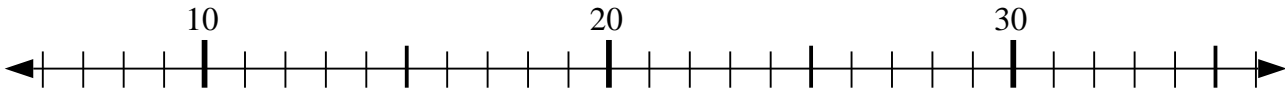
3) $66 + 6 = ?$



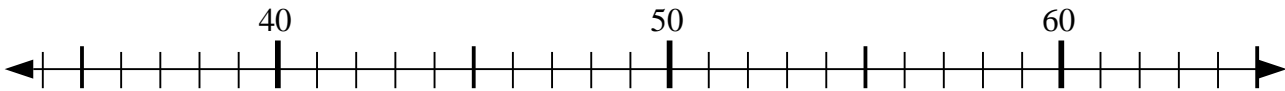
4) $31 + 16 = ?$



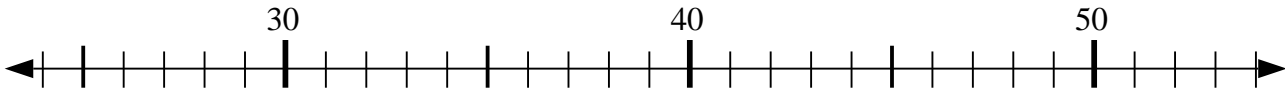
5) $6 + 11 = ?$



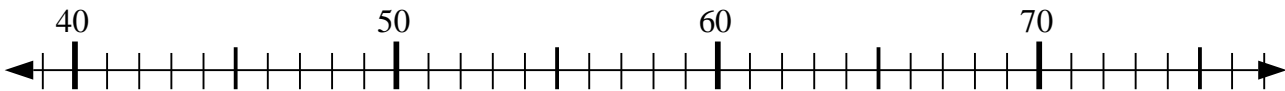
6) $35 + 25 = ?$



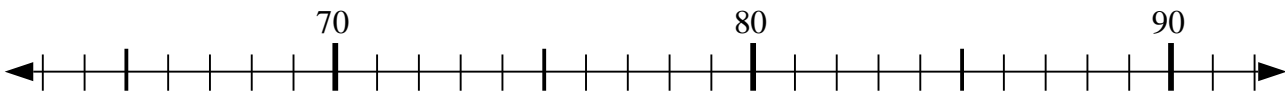
7) $26 + 18 = ?$



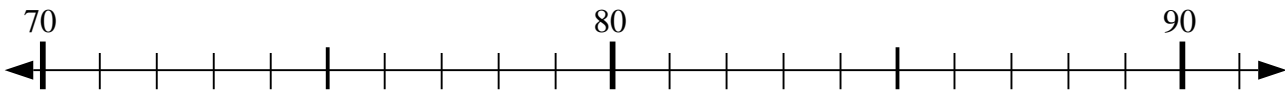
8) $59 + 4 = ?$



9) $74 + 13 = ?$



10) $77 + 4 = ?$



Respuestas

1. 7

2. 66

3. 72

4. 47

5. 17

6. 60

7. 44

8. 63

9. 87

10. 81