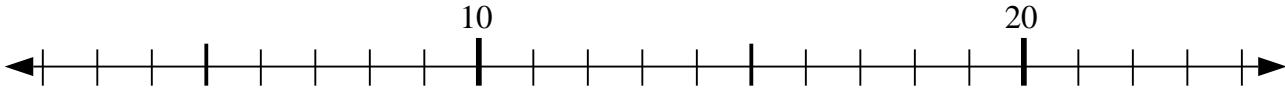




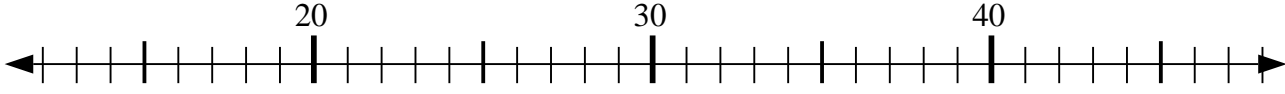
Usar las líneas de números para resolver cada problema.

Respuestas

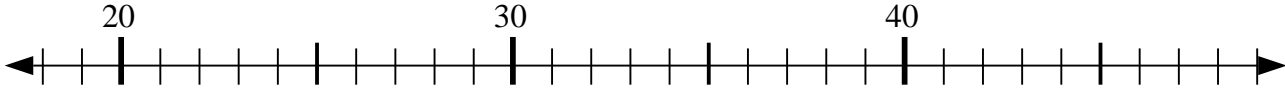
1) $12 + 12 = ?$



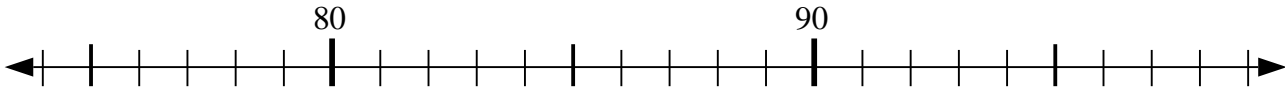
2) $36 - 8 = ?$



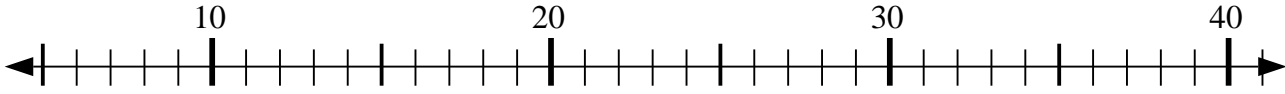
3) $26 + 8 = ?$



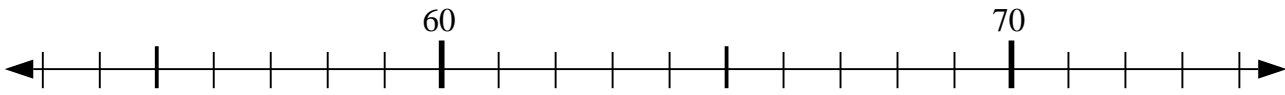
4) $75 + 5 = ?$



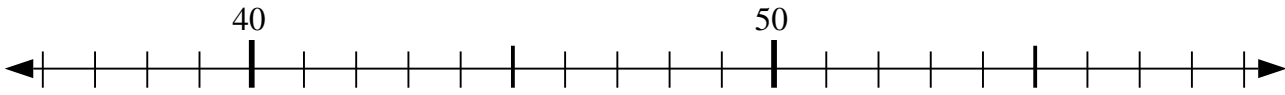
5) $11 + 12 = ?$



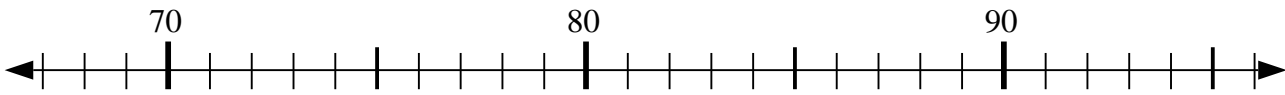
6) $67 - 3 = ?$



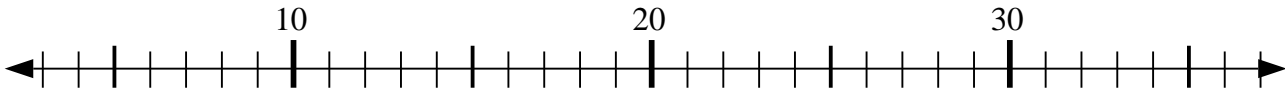
7) $38 + 8 = ?$



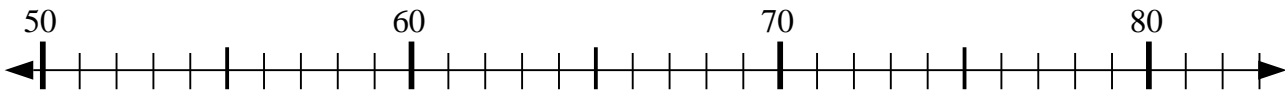
8) $95 - 17 = ?$



9) $25 + 12 = ?$



10) $51 + 32 = ?$



1. _____

2. _____

3. _____

4. _____

5. _____

6. _____

7. _____

8. _____

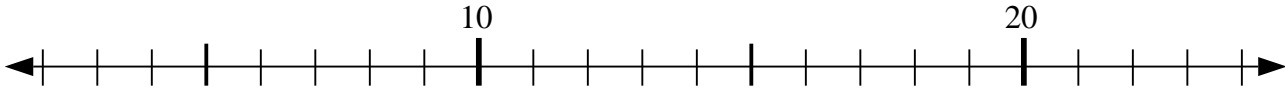
9. _____

10. _____

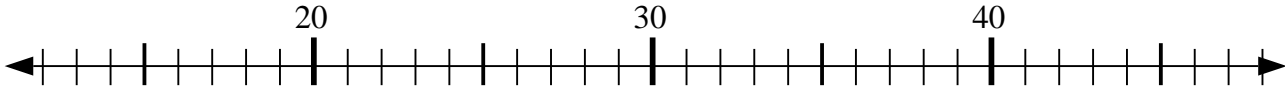


Usar las líneas de números para resolver cada problema.

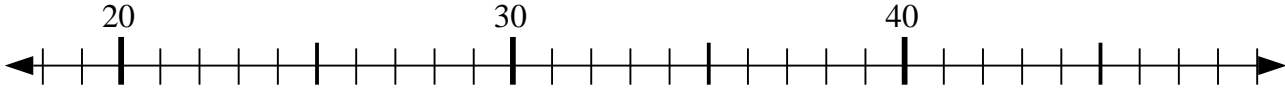
1) $12 + 12 = ?$



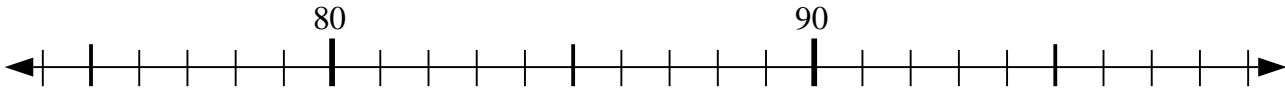
2) $36 - 8 = ?$



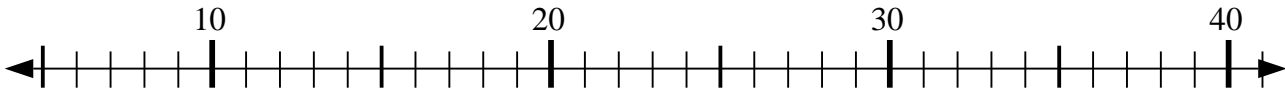
3) $26 + 8 = ?$



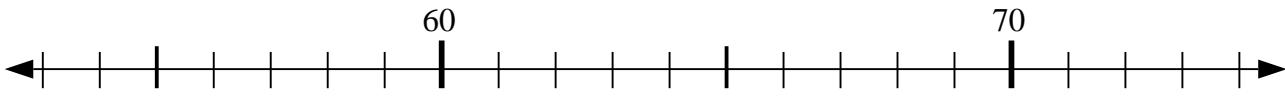
4) $75 + 5 = ?$



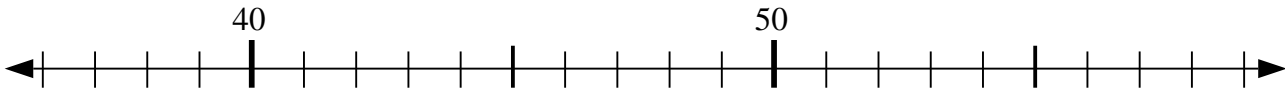
5) $11 + 12 = ?$



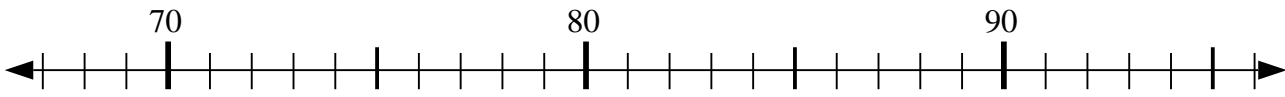
6) $67 - 3 = ?$



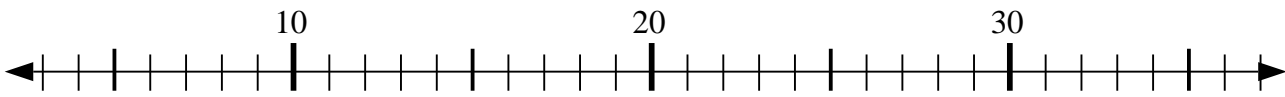
7) $38 + 8 = ?$



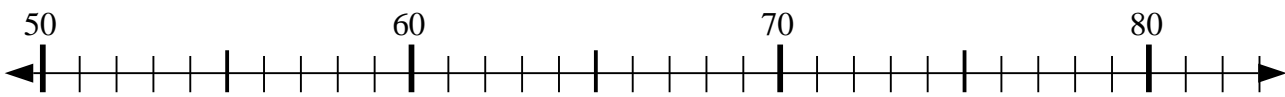
8) $95 - 17 = ?$



9) $25 + 12 = ?$



10) $51 + 32 = ?$



Respuestas

1. 24

2. 28

3. 34

4. 80

5. 23

6. 64

7. 46

8. 78

9. 37

10. 83