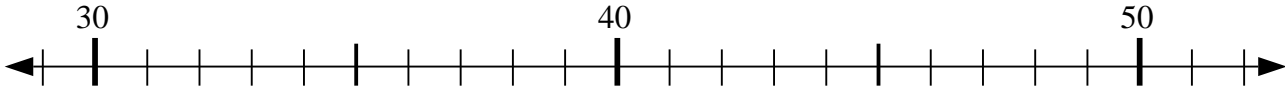




Usar las líneas de números para resolver cada problema.

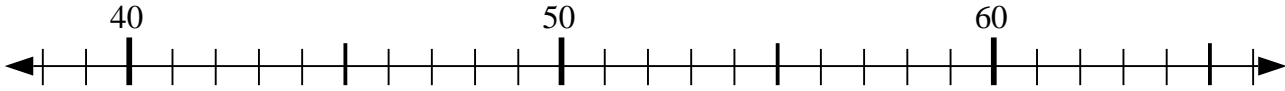
**Respuestas**

1)  $34 + 4 = ?$



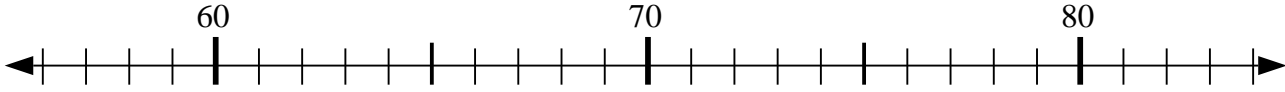
1. \_\_\_\_\_

2)  $46 - 7 = ?$



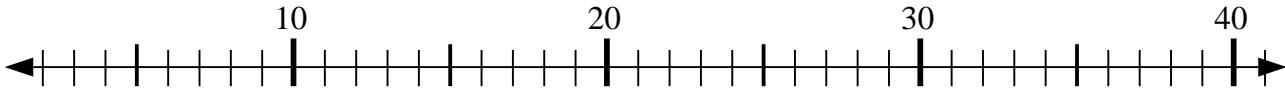
2. \_\_\_\_\_

3)  $59 + 8 = ?$



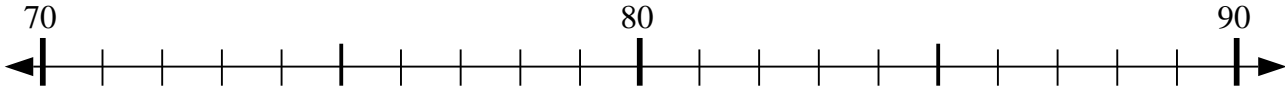
3. \_\_\_\_\_

4)  $3 + 36 = ?$



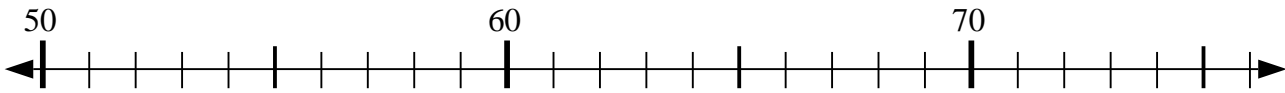
4. \_\_\_\_\_

5)  $88 - 13 = ?$



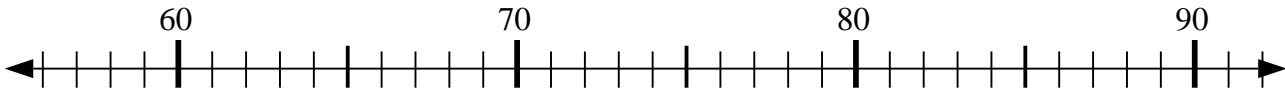
5. \_\_\_\_\_

6)  $74 - 1 = ?$



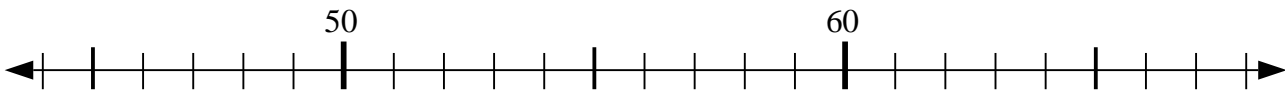
6. \_\_\_\_\_

7)  $59 + 16 = ?$



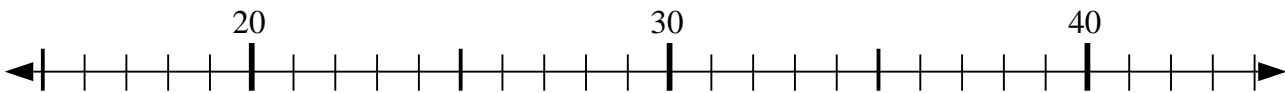
7. \_\_\_\_\_

8)  $44 + 15 = ?$



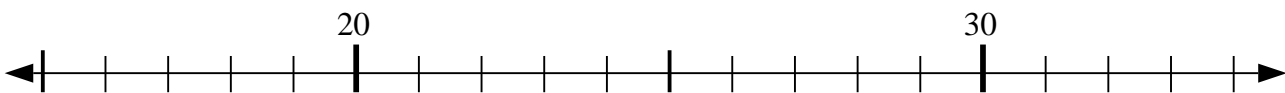
8. \_\_\_\_\_

9)  $20 + 6 = ?$



9. \_\_\_\_\_

10)  $31 - 9 = ?$

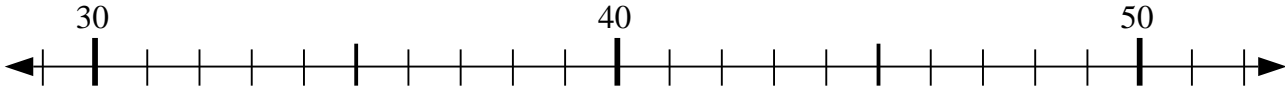


10. \_\_\_\_\_

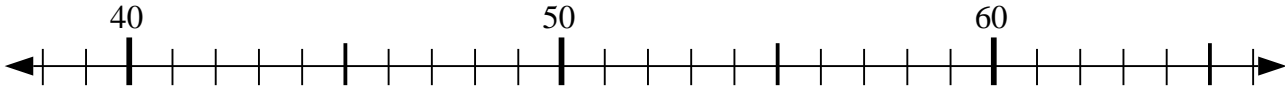


Usar las líneas de números para resolver cada problema.

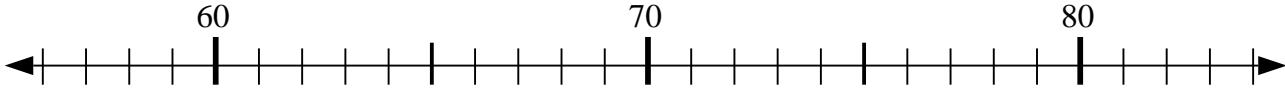
1)  $34 + 4 = ?$



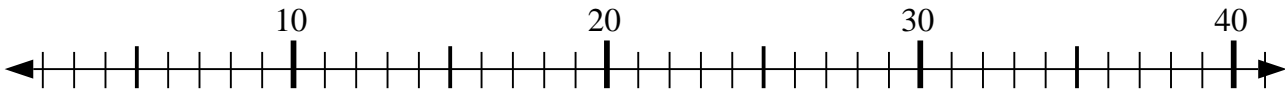
2)  $46 - 7 = ?$



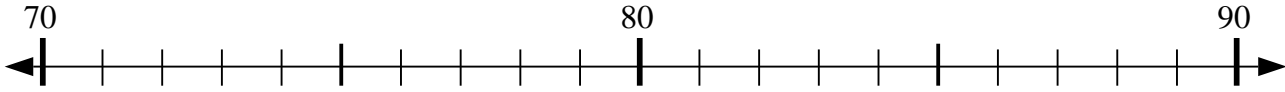
3)  $59 + 8 = ?$



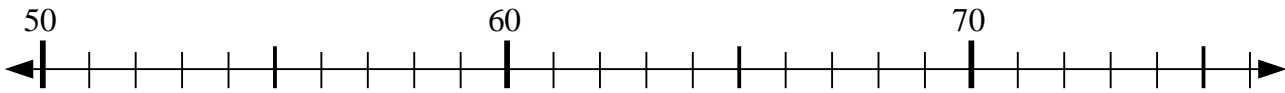
4)  $3 + 36 = ?$



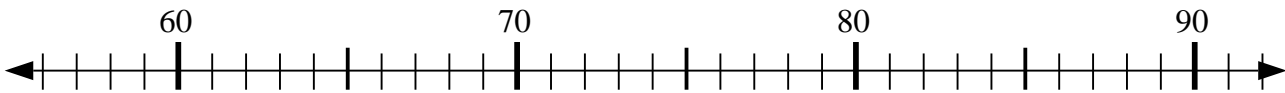
5)  $88 - 13 = ?$



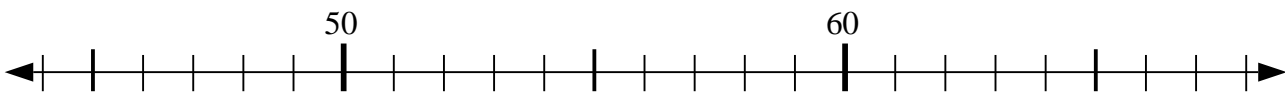
6)  $74 - 1 = ?$



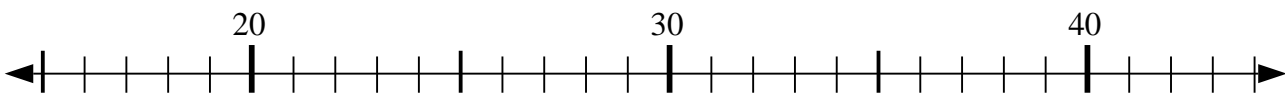
7)  $59 + 16 = ?$



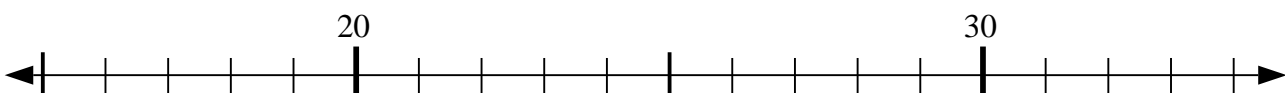
8)  $44 + 15 = ?$



9)  $20 + 6 = ?$



10)  $31 - 9 = ?$



**Respuestas**

1. 38

2. 39

3. 67

4. 39

5. 75

6. 73

7. 75

8. 59

9. 26

10. 22