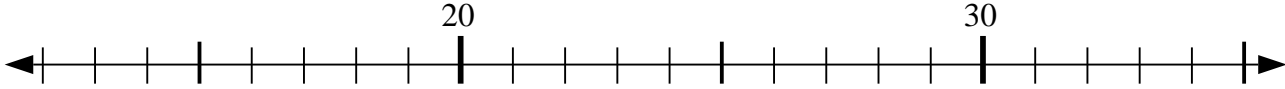




Usar las líneas de números para resolver cada problema.

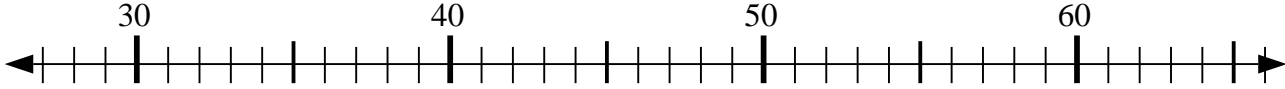
**Respuestas**

1)  $16 + 14 = ?$



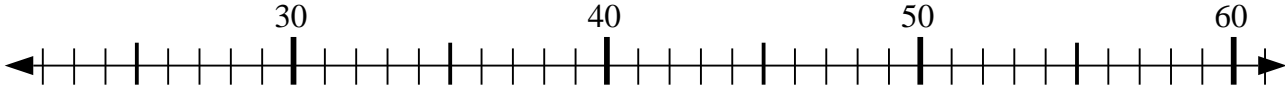
1. \_\_\_\_\_

2)  $60 - 27 = ?$



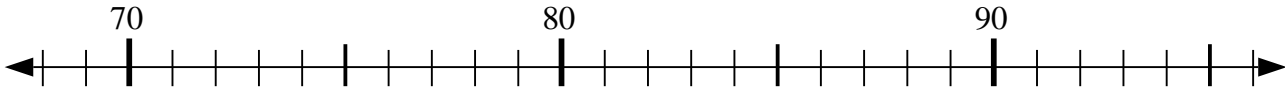
2. \_\_\_\_\_

3)  $23 + 14 = ?$



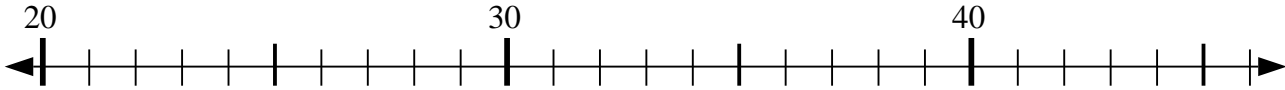
3. \_\_\_\_\_

4)  $81 + 5 = ?$



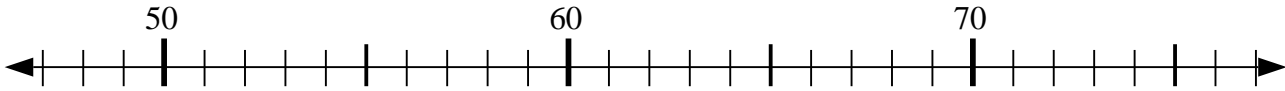
4. \_\_\_\_\_

5)  $21 + 11 = ?$



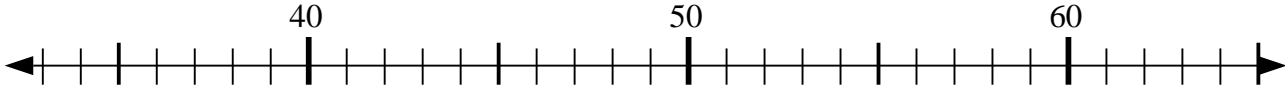
5. \_\_\_\_\_

6)  $59 + 1 = ?$



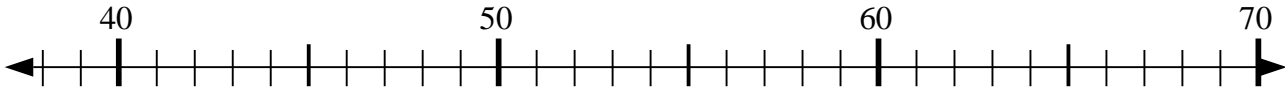
6. \_\_\_\_\_

7)  $57 + 6 = ?$



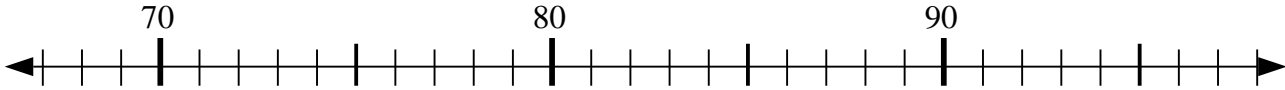
7. \_\_\_\_\_

8)  $68 - 7 = ?$



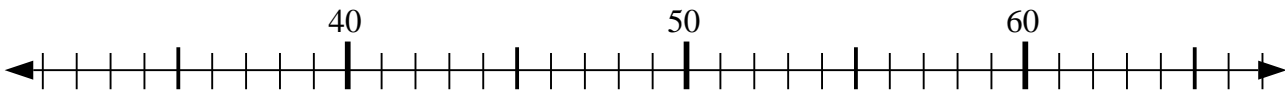
8. \_\_\_\_\_

9)  $81 + 1 = ?$



9. \_\_\_\_\_

10)  $32 + 24 = ?$

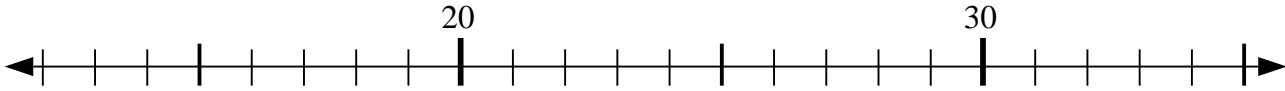


10. \_\_\_\_\_

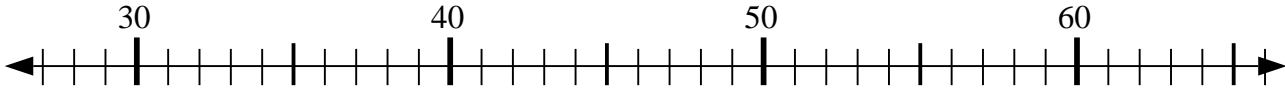


Usar las líneas de números para resolver cada problema.

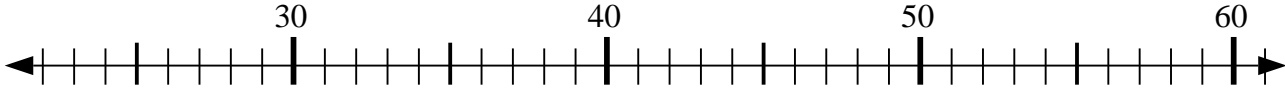
1)  $16 + 14 = ?$



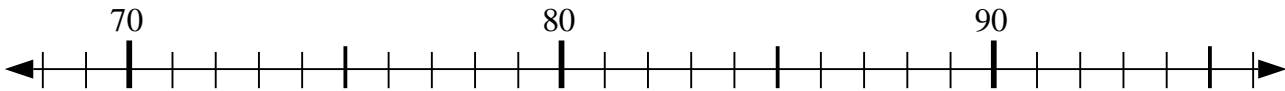
2)  $60 - 27 = ?$



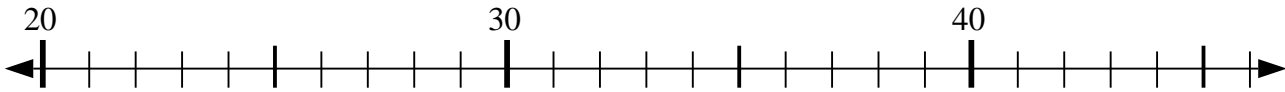
3)  $23 + 14 = ?$



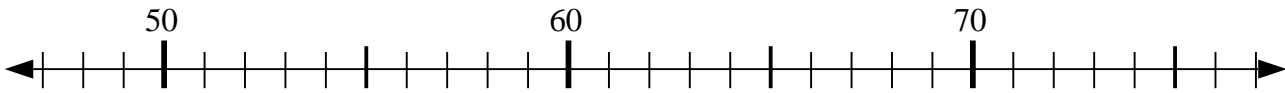
4)  $81 + 5 = ?$



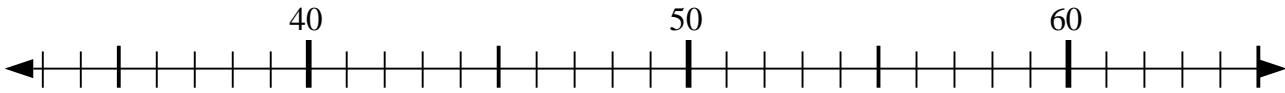
5)  $21 + 11 = ?$



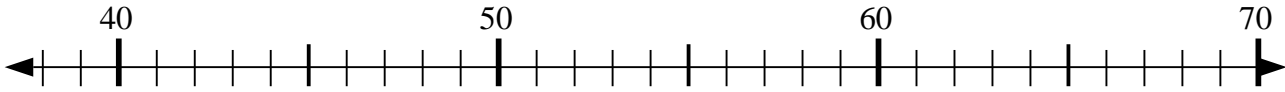
6)  $59 + 1 = ?$



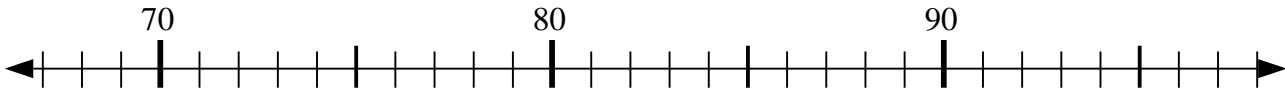
7)  $57 + 6 = ?$



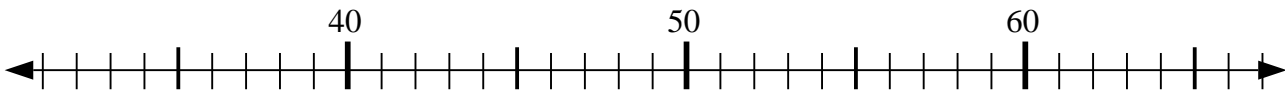
8)  $68 - 7 = ?$



9)  $81 + 1 = ?$



10)  $32 + 24 = ?$



**Respuestas**

1. 30

2. 33

3. 37

4. 86

5. 32

6. 60

7. 63

8. 61

9. 82

10. 56