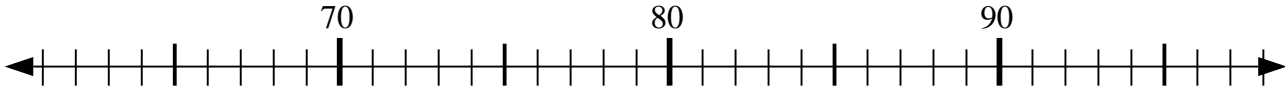




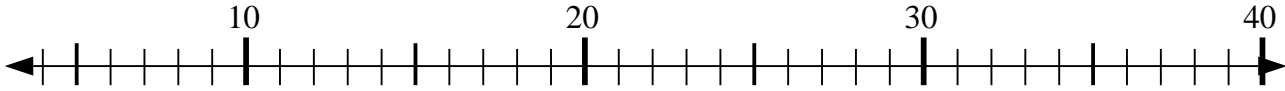
Usar las líneas de números para resolver cada problema.

Respuestas

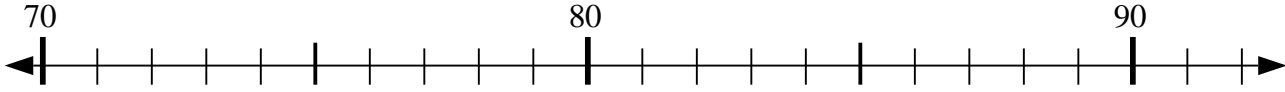
1) $91 + 0 = ?$



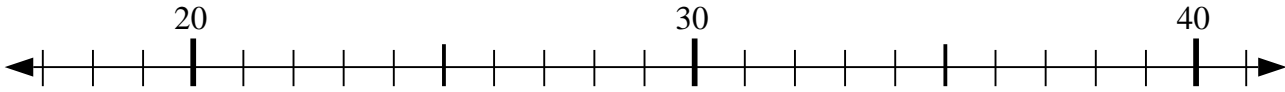
2) $15 + 11 = ?$



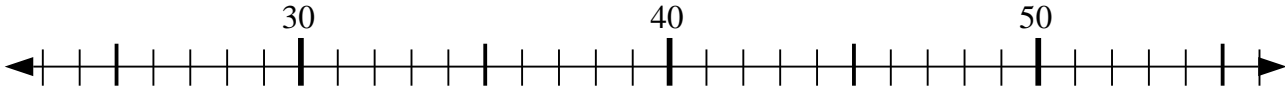
3) $86 - 0 = ?$



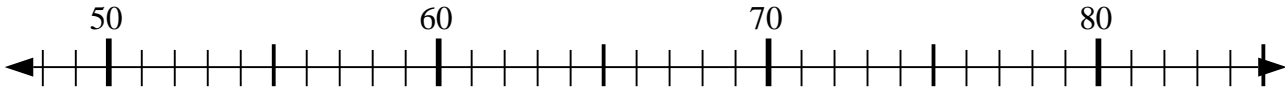
4) $28 + 8 = ?$



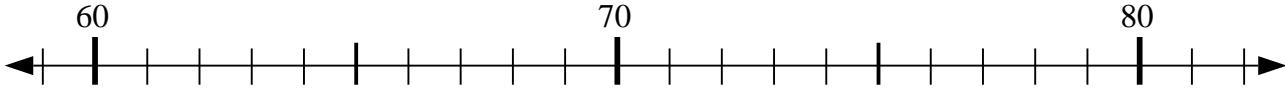
5) $33 + 12 = ?$



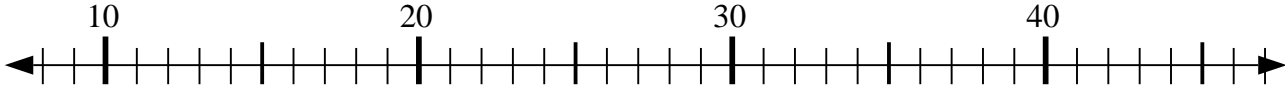
6) $58 - 0 = ?$



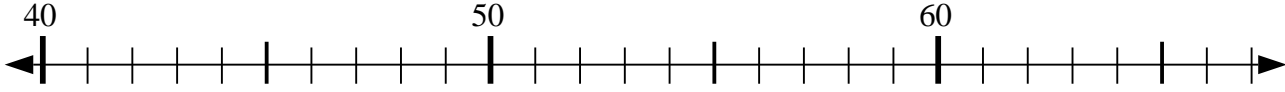
7) $81 - 2 = ?$



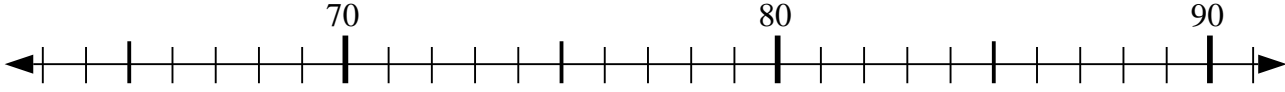
8) $33 + 10 = ?$



9) $50 + 6 = ?$



10) $91 + 0 = ?$



1. _____

2. _____

3. _____

4. _____

5. _____

6. _____

7. _____

8. _____

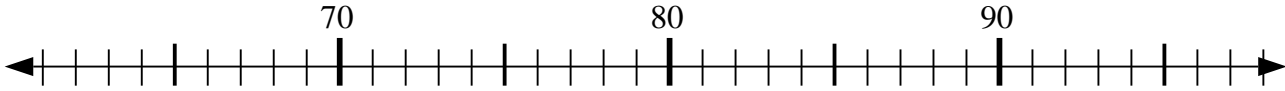
9. _____

10. _____

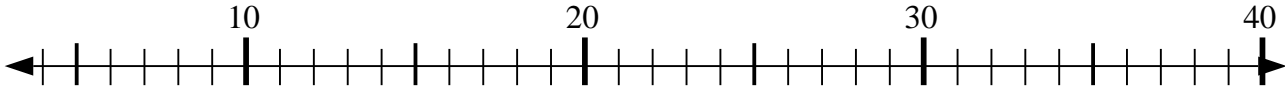


Usar las líneas de números para resolver cada problema.

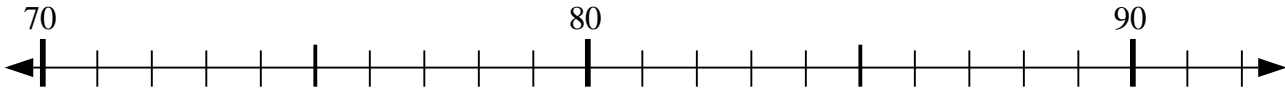
1) $91 + 0 = ?$



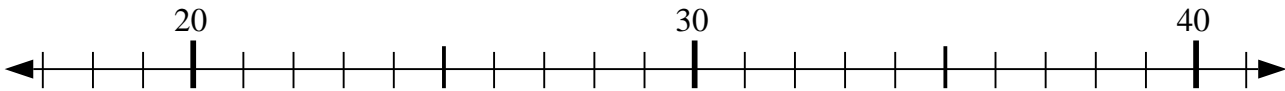
2) $15 + 11 = ?$



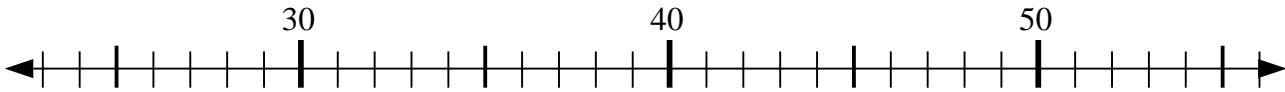
3) $86 - 0 = ?$



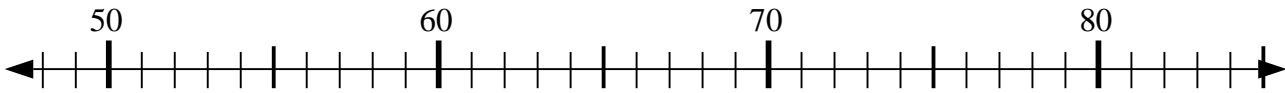
4) $28 + 8 = ?$



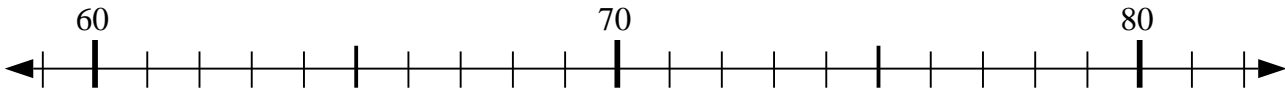
5) $33 + 12 = ?$



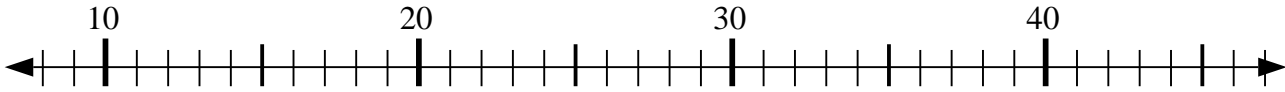
6) $58 - 0 = ?$



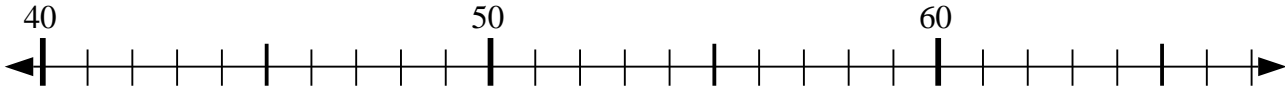
7) $81 - 2 = ?$



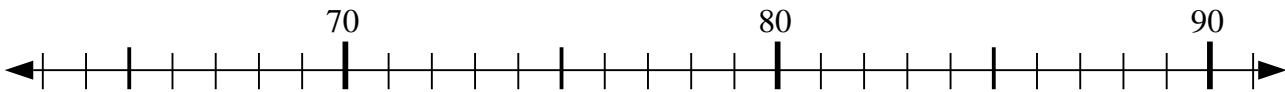
8) $33 + 10 = ?$



9) $50 + 6 = ?$



10) $91 + 0 = ?$



Respuestas

1. 91

2. 26

3. 86

4. 36

5. 45

6. 58

7. 79

8. 43

9. 56

10. 91