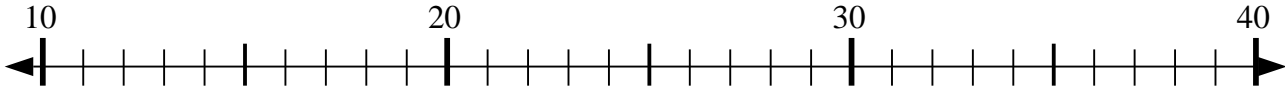




Usar las líneas de números para resolver cada problema.

Respuestas

1) $17 + 15 = ?$



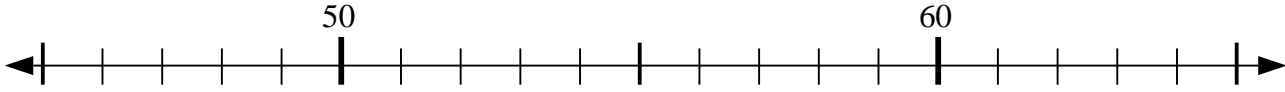
1. _____

2) $61 - 6 = ?$



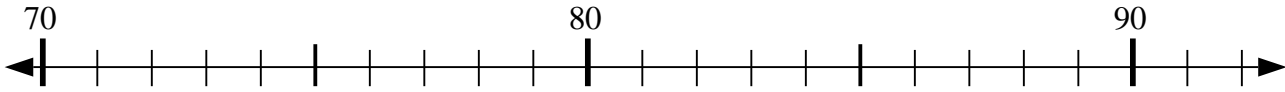
2. _____

3) $54 + 10 = ?$



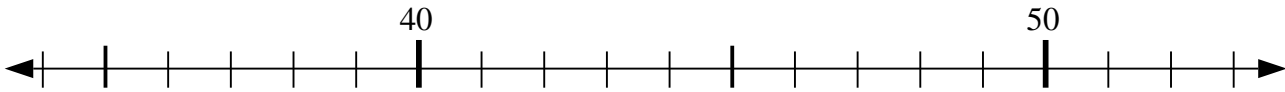
3. _____

4) $78 + 1 = ?$



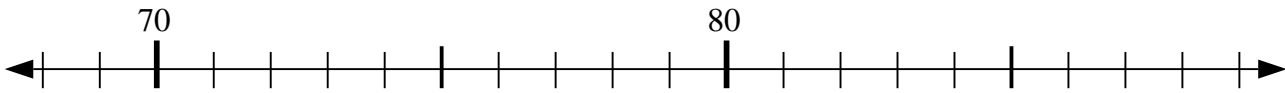
4. _____

5) $43 - 5 = ?$



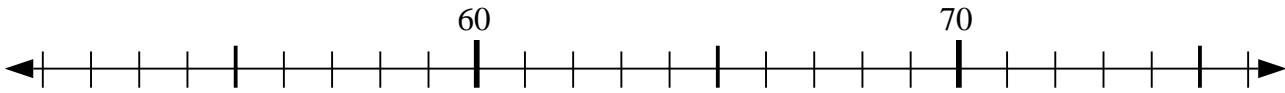
5. _____

6) $78 - 0 = ?$



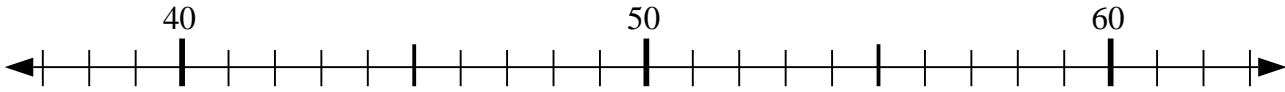
6. _____

7) $60 - 0 = ?$



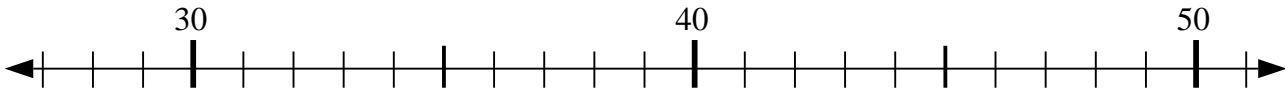
7. _____

8) $57 - 19 = ?$



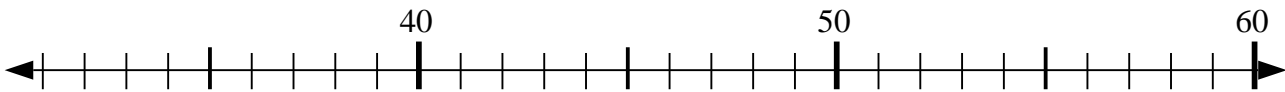
8. _____

9) $39 - 7 = ?$



9. _____

10) $34 + 3 = ?$

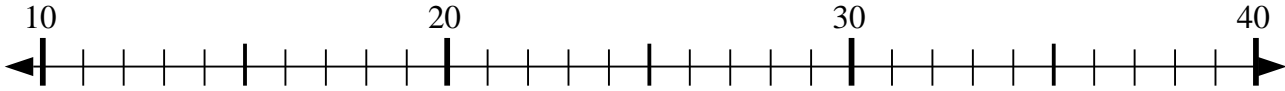


10. _____

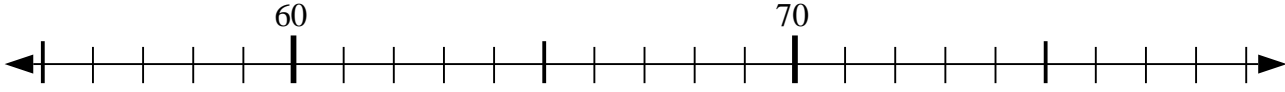


Usar las líneas de números para resolver cada problema.

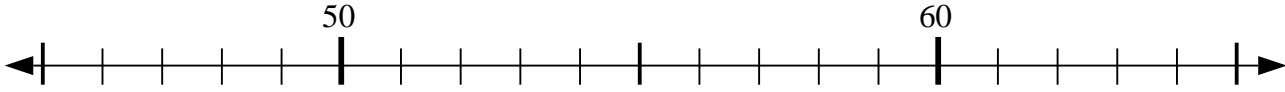
1) $17 + 15 = ?$



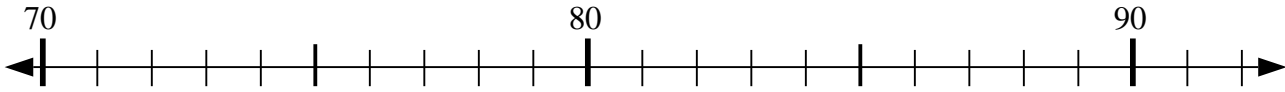
2) $61 - 6 = ?$



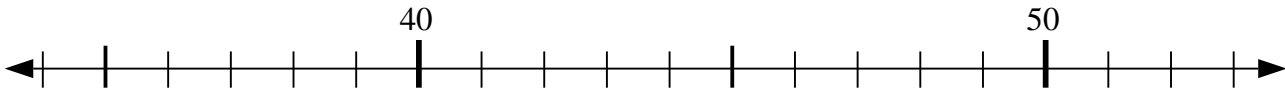
3) $54 + 10 = ?$



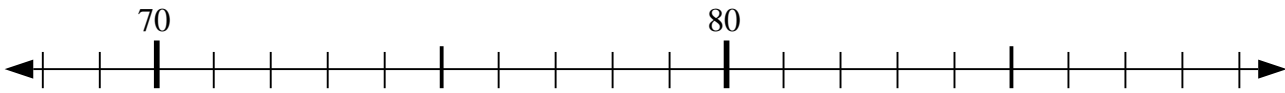
4) $78 + 1 = ?$



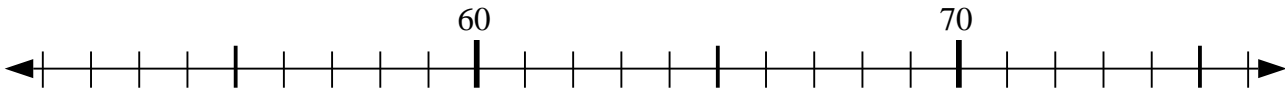
5) $43 - 5 = ?$



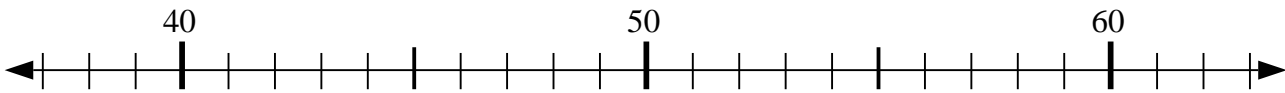
6) $78 - 0 = ?$



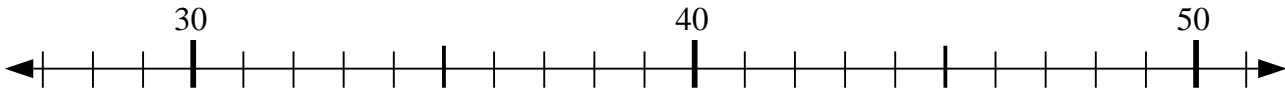
7) $60 - 0 = ?$



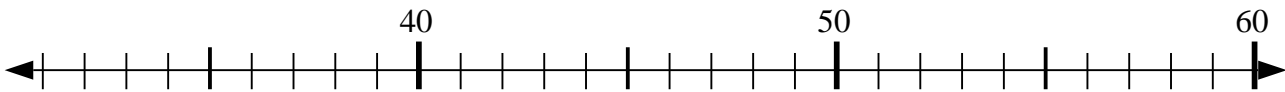
8) $57 - 19 = ?$



9) $39 - 7 = ?$



10) $34 + 3 = ?$



Respuestas

1. 32

2. 55

3. 64

4. 79

5. 38

6. 78

7. 60

8. 38

9. 32

10. 37