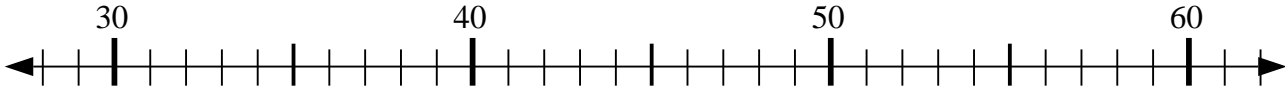




Usar las líneas de números para resolver cada problema.

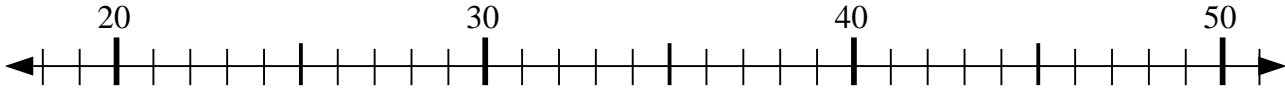
Respuestas

1) $32 + 27 = ?$



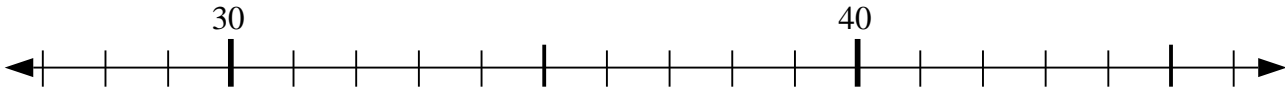
1. _____

2) $22 + 1 = ?$



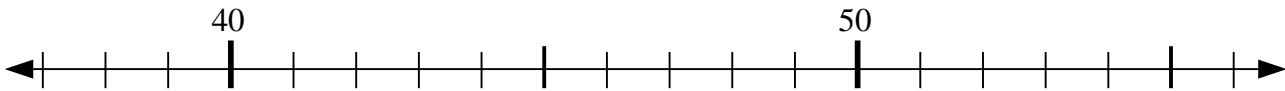
2. _____

3) $28 + 7 = ?$



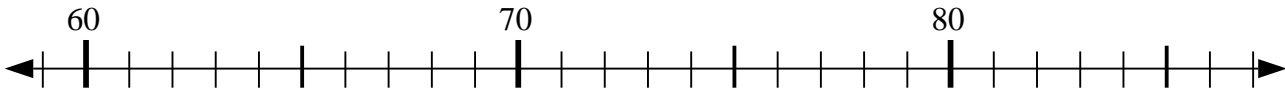
3. _____

4) $46 - 6 = ?$



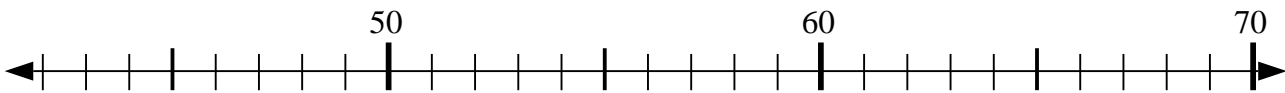
4. _____

5) $66 - 1 = ?$



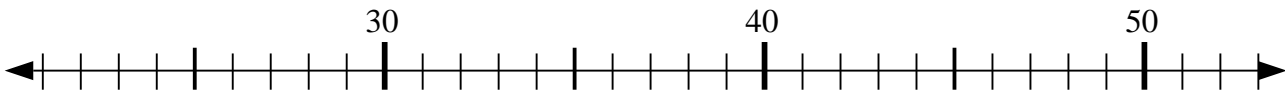
5. _____

6) $58 - 8 = ?$



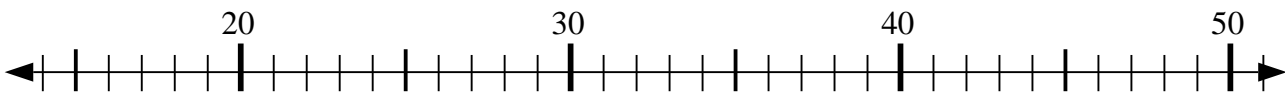
6. _____

7) $26 + 8 = ?$



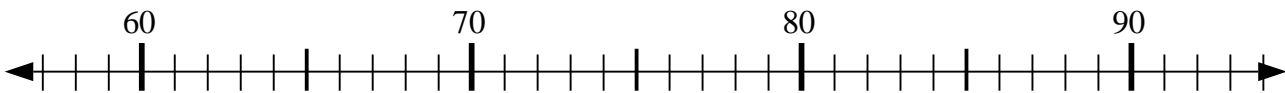
7. _____

8) $41 - 20 = ?$



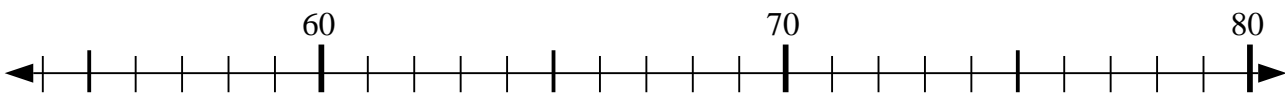
8. _____

9) $60 + 3 = ?$



9. _____

10) $55 + 6 = ?$

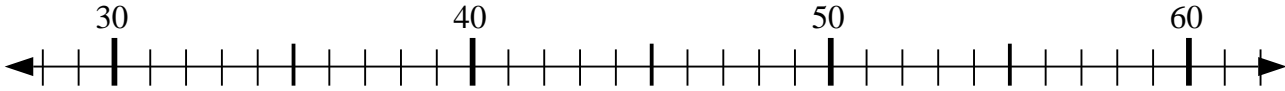


10. _____

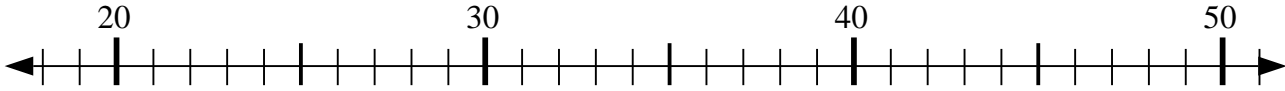


Usar las líneas de números para resolver cada problema.

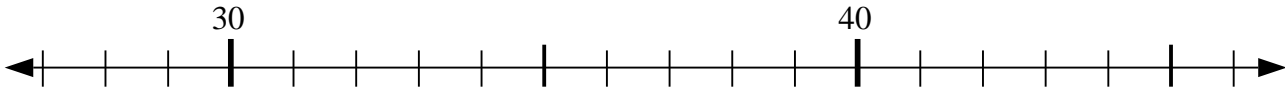
1) $32 + 27 = ?$



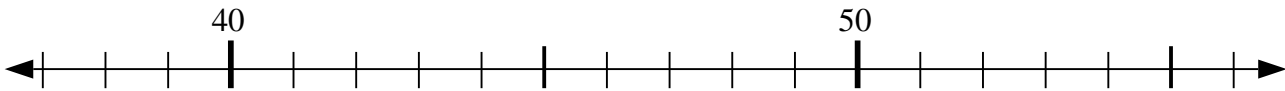
2) $22 + 1 = ?$



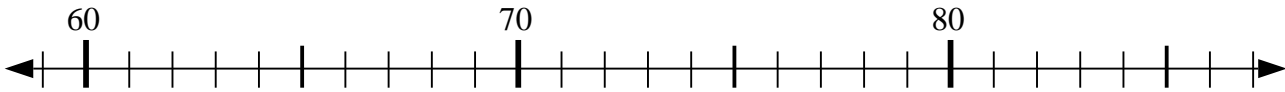
3) $28 + 7 = ?$



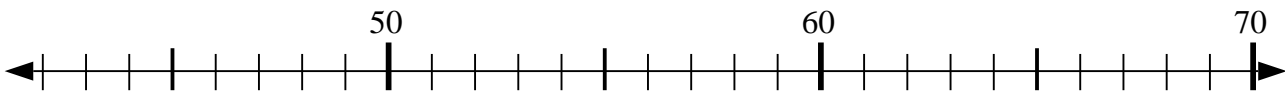
4) $46 - 6 = ?$



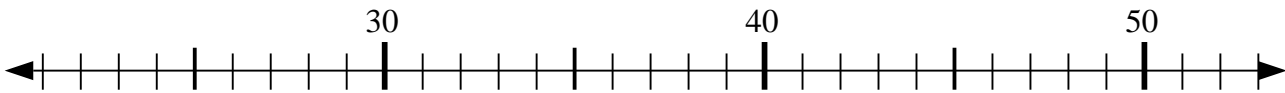
5) $66 - 1 = ?$



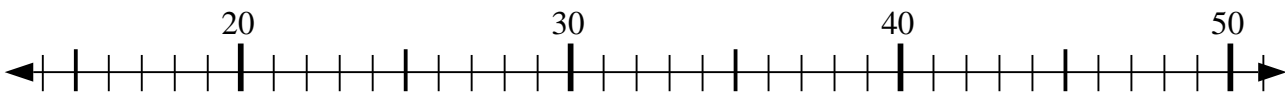
6) $58 - 8 = ?$



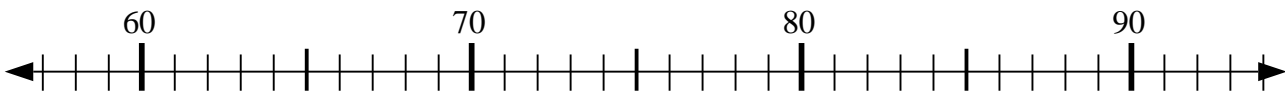
7) $26 + 8 = ?$



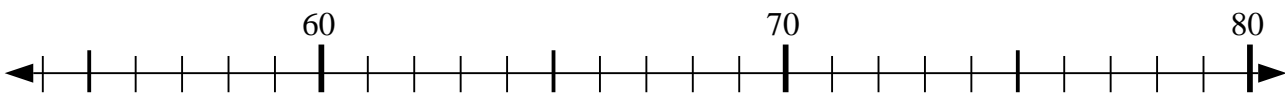
8) $41 - 20 = ?$



9) $60 + 3 = ?$



10) $55 + 6 = ?$



Respuestas

1. 59

2. 23

3. 35

4. 40

5. 65

6. 50

7. 34

8. 21

9. 63

10. 61