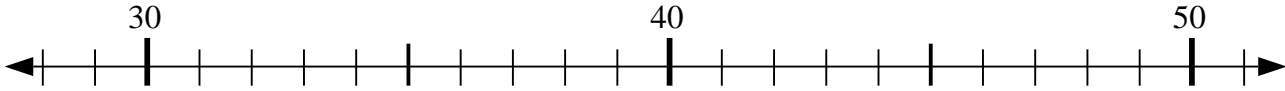




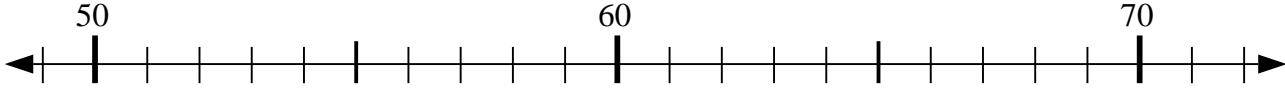
Usar las líneas de números para resolver cada problema.

**Respuestas**

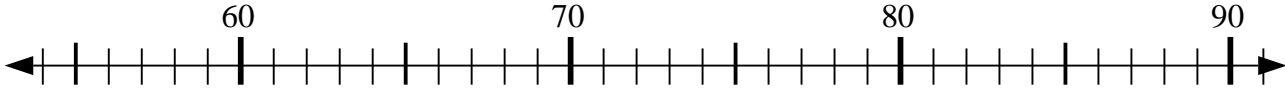
1)  $29 + 4 = ?$



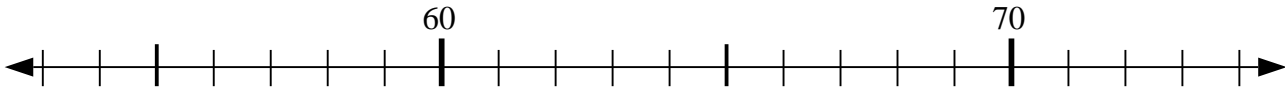
2)  $66 - 11 = ?$



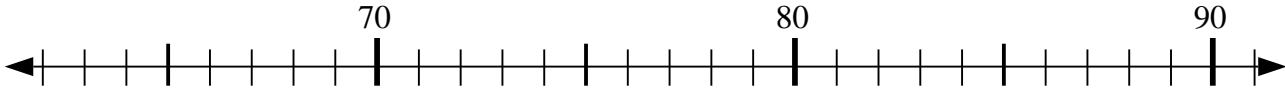
3)  $65 - 5 = ?$



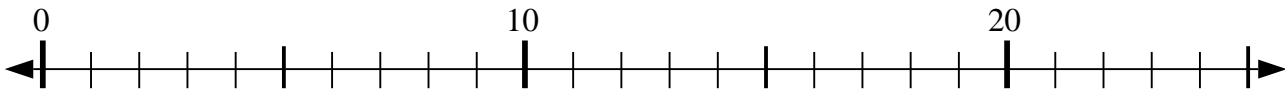
4)  $59 + 3 = ?$



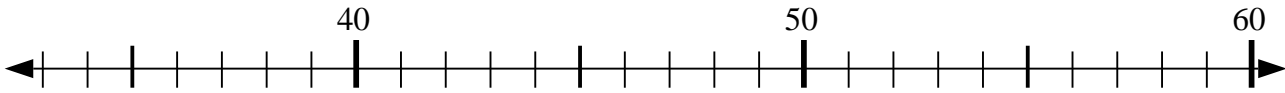
5)  $81 - 10 = ?$



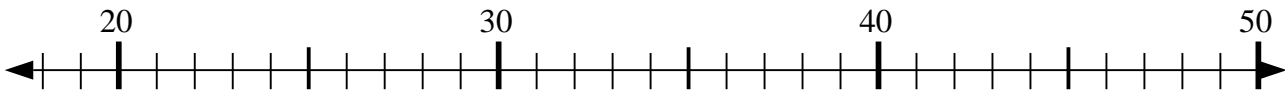
6)  $10 - 4 = ?$



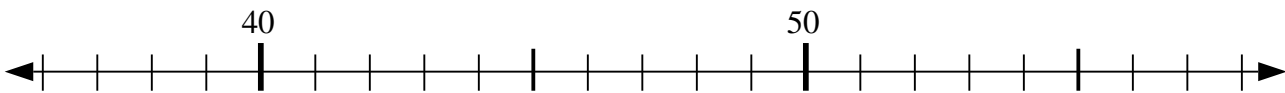
7)  $57 - 12 = ?$



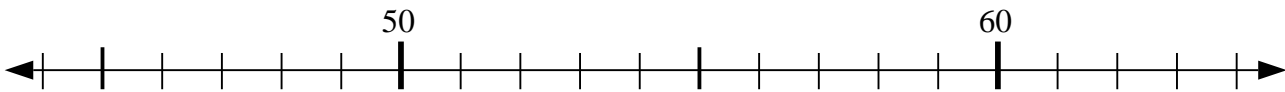
8)  $33 - 8 = ?$



9)  $51 - 3 = ?$



10)  $52 + 3 = ?$



1. \_\_\_\_\_

2. \_\_\_\_\_

3. \_\_\_\_\_

4. \_\_\_\_\_

5. \_\_\_\_\_

6. \_\_\_\_\_

7. \_\_\_\_\_

8. \_\_\_\_\_

9. \_\_\_\_\_

10. \_\_\_\_\_



Usar las líneas de números para resolver cada problema.

1)  $29 + 4 = ?$




2)  $66 - 11 = ?$



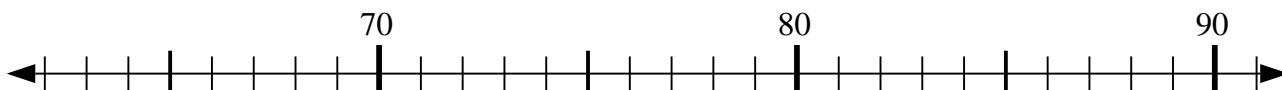
3)  $65 - 5 = ?$




4)  $59 + 3 = ?$



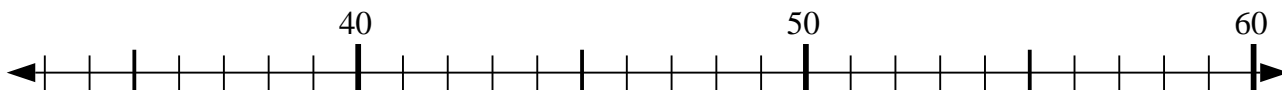
5)  $81 - 10 = ?$



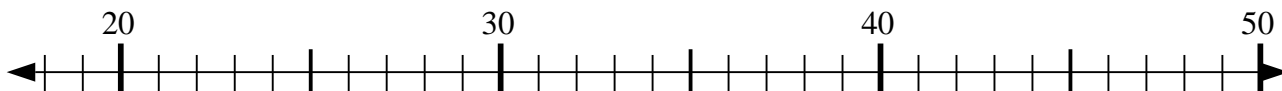
6)  $10 - 4 = ?$



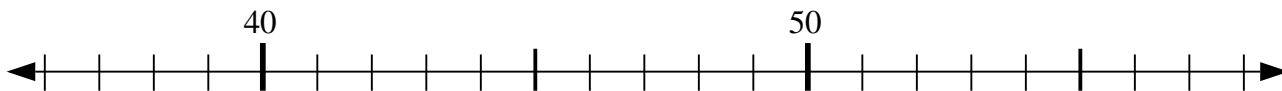
7)  $57 - 12 = ?$



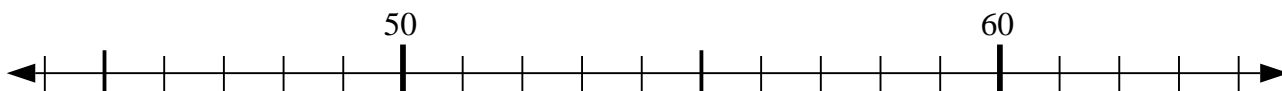
8)  $33 - 8 = ?$



9)  $51 - 3 = ?$



10)  $52 + 3 = ?$



**Respuestas**

1. 33

2. 55

3. 60

4. 62

5. 71

6. 6

7. 45

8. 25

9. 48

10. 55