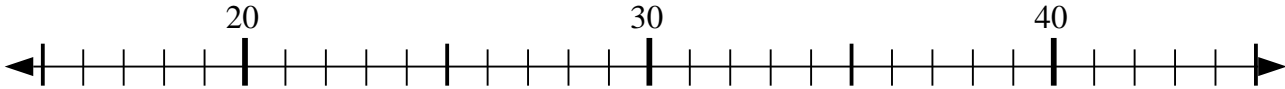




Usar las líneas de números para resolver cada problema.

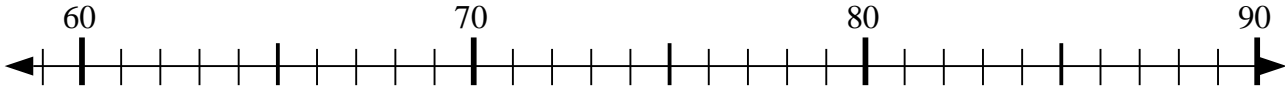
Respuestas

1) $27 - 0 = ?$



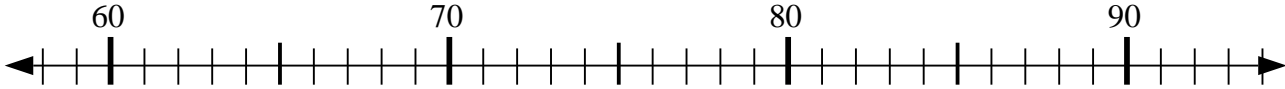
1. _____

2) $67 + 2 = ?$



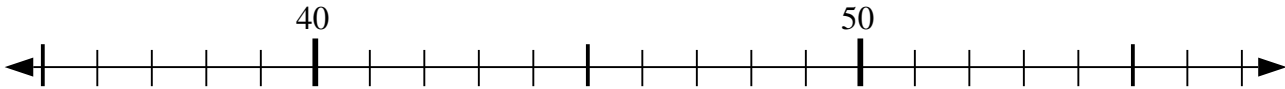
2. _____

3) $59 + 8 = ?$



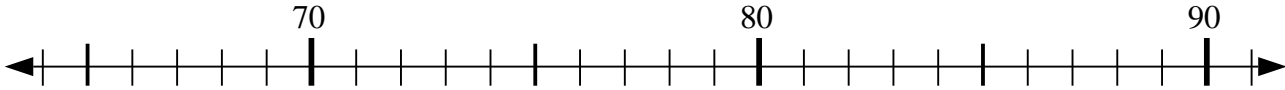
3. _____

4) $48 - 6 = ?$



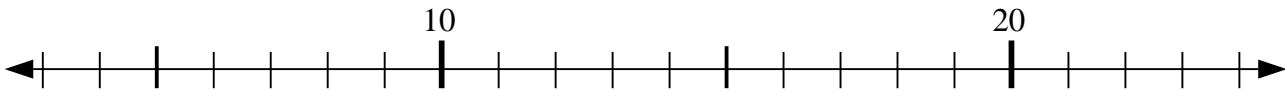
4. _____

5) $83 - 14 = ?$



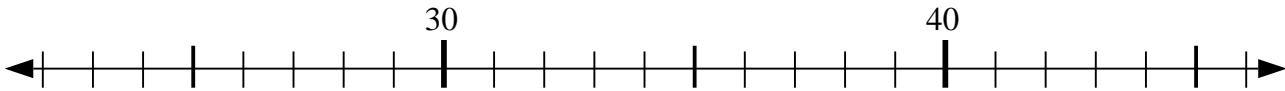
5. _____

6) $17 + 4 = ?$



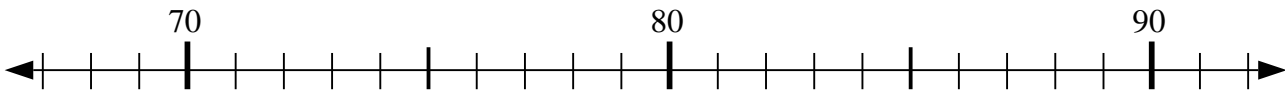
6. _____

7) $28 - 6 = ?$



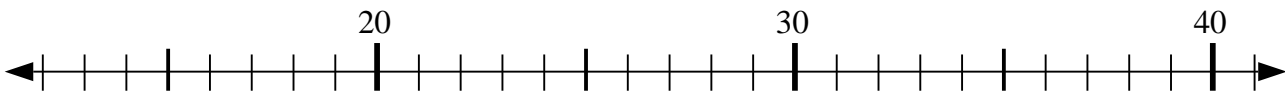
7. _____

8) $69 + 3 = ?$



8. _____

9) $34 - 4 = ?$



9. _____

10) $49 - 3 = ?$

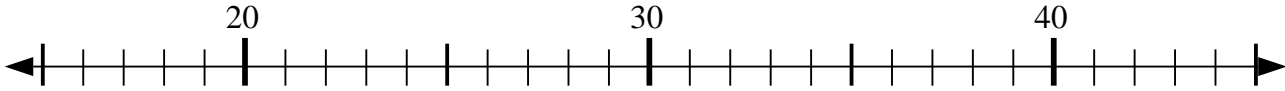


10. _____

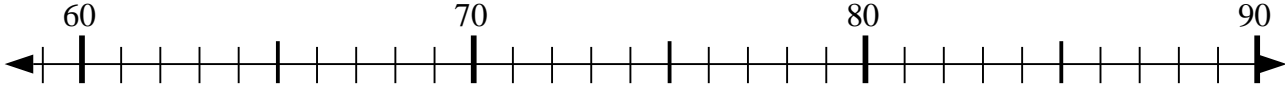


Usar las líneas de números para resolver cada problema.

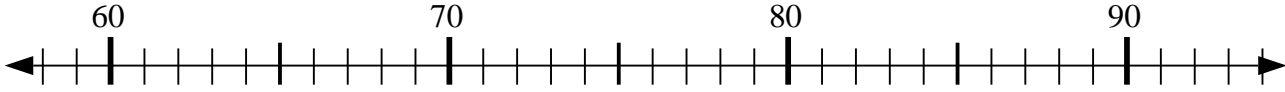
1) $27 - 0 = ?$



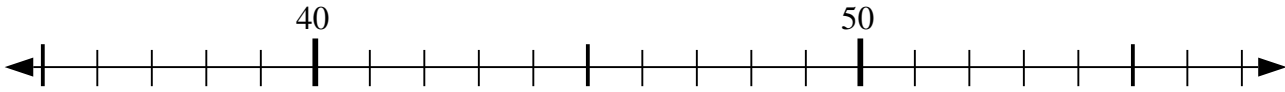
2) $67 + 2 = ?$



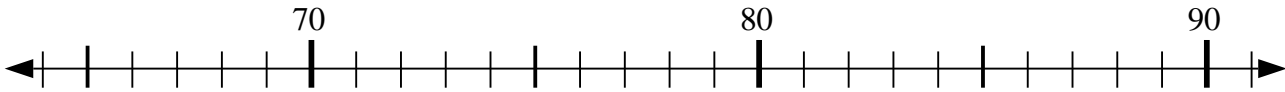
3) $59 + 8 = ?$



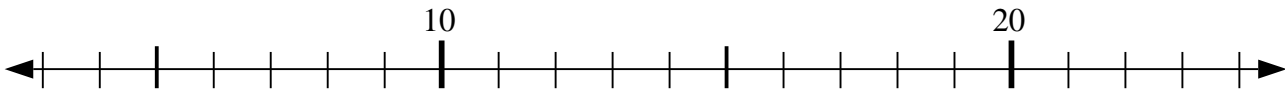
4) $48 - 6 = ?$



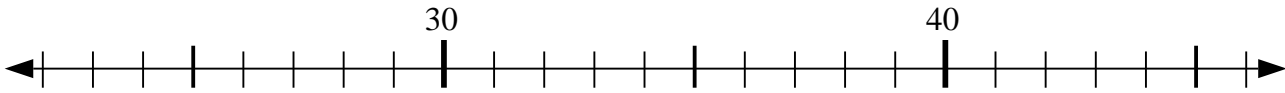
5) $83 - 14 = ?$



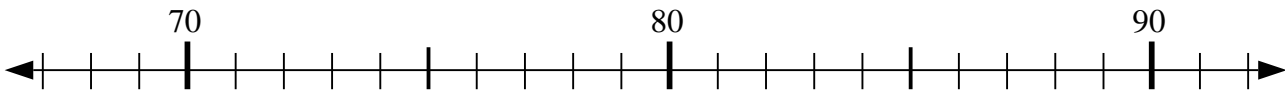
6) $17 + 4 = ?$



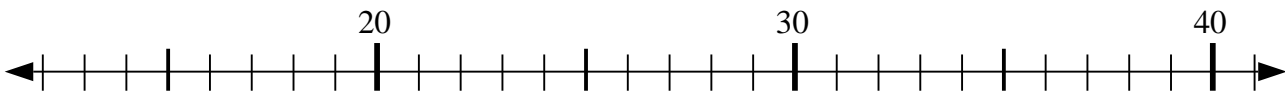
7) $28 - 6 = ?$



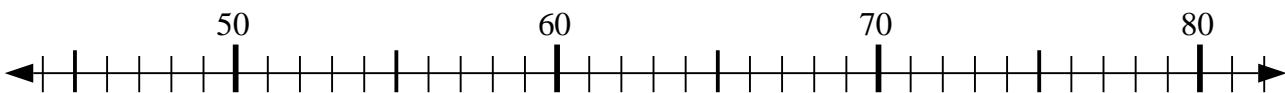
8) $69 + 3 = ?$



9) $34 - 4 = ?$



10) $49 - 3 = ?$



Respuestas

1. 27

2. 69

3. 67

4. 42

5. 69

6. 21

7. 22

8. 72

9. 30

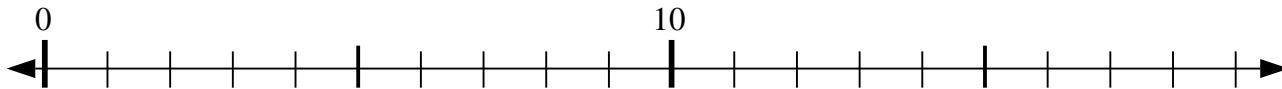
10. 46



Usar las líneas de números para resolver cada problema.

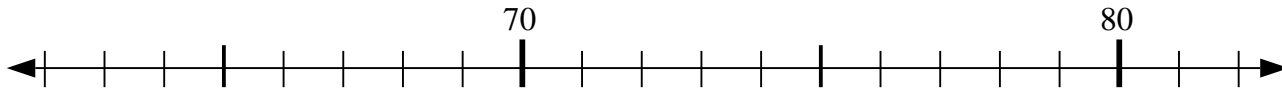
Respuestas

1) $13 - 6 = ?$



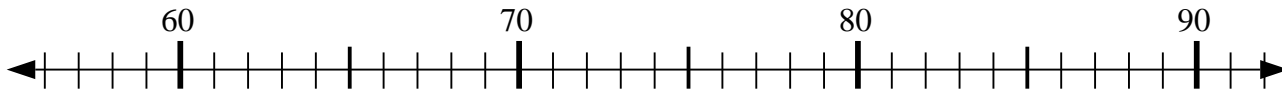
1. _____

2) $69 - 3 = ?$



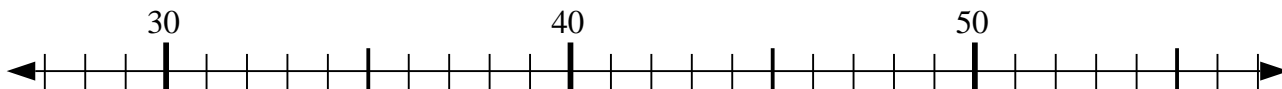
2. _____

3) $66 + 6 = ?$



3. _____

4) $31 + 16 = ?$



4. _____

5) $6 + 11 = ?$



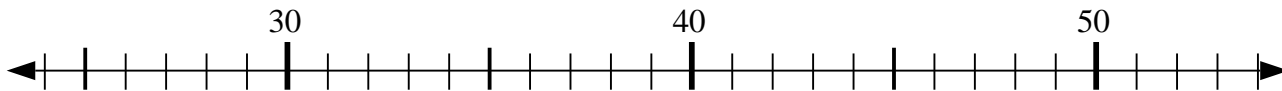
5. _____

6) $35 + 25 = ?$



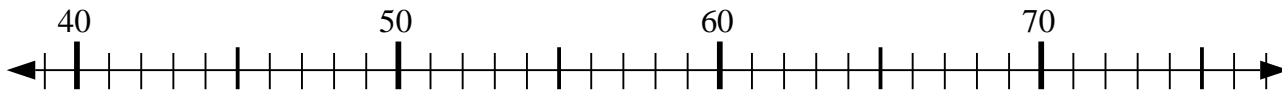
6. _____

7) $26 + 18 = ?$



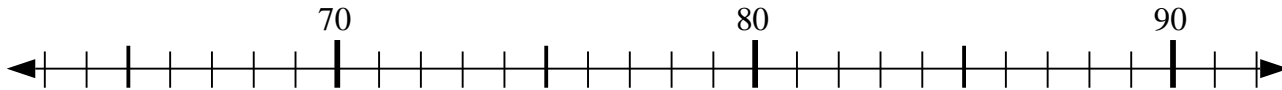
7. _____

8) $59 + 4 = ?$



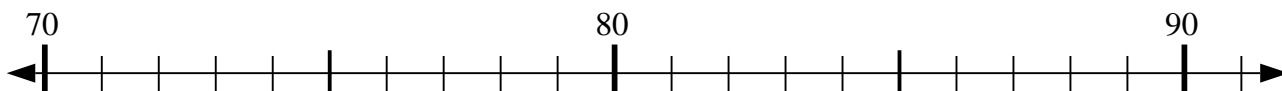
8. _____

9) $74 + 13 = ?$



9. _____

10) $77 + 4 = ?$

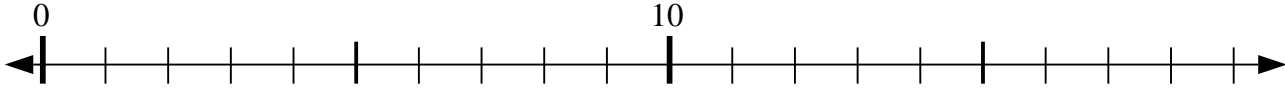


10. _____



Usar las líneas de números para resolver cada problema.

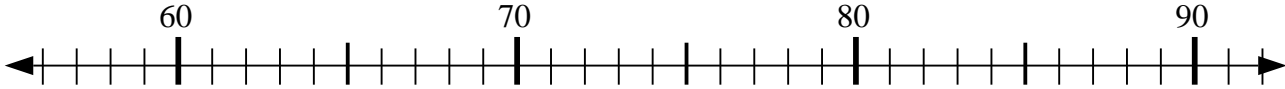
1) $13 - 6 = ?$



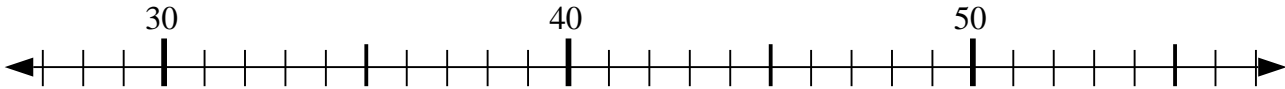
2) $69 - 3 = ?$



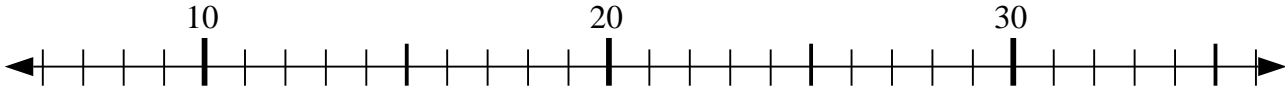
3) $66 + 6 = ?$



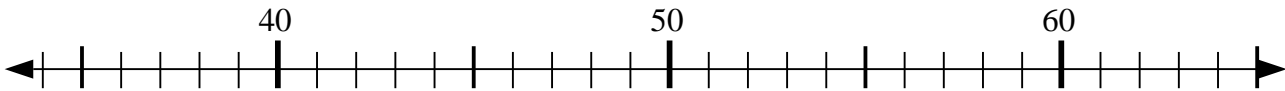
4) $31 + 16 = ?$



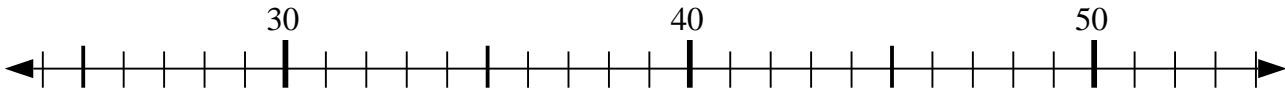
5) $6 + 11 = ?$



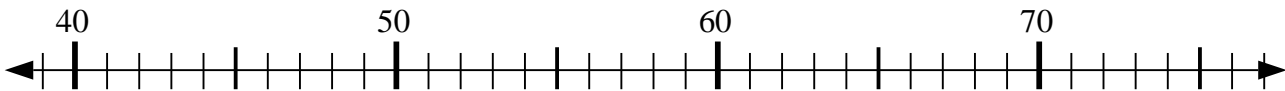
6) $35 + 25 = ?$



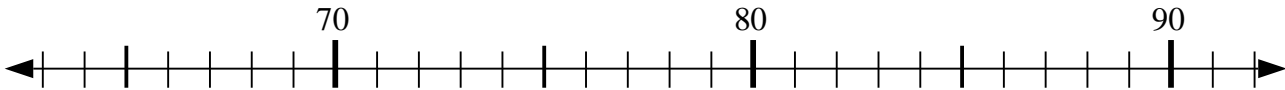
7) $26 + 18 = ?$



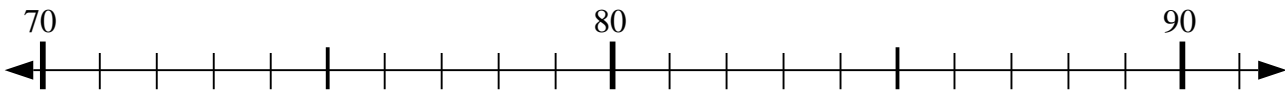
8) $59 + 4 = ?$



9) $74 + 13 = ?$



10) $77 + 4 = ?$



Respuestas

1. 7

2. 66

3. 72

4. 47

5. 17

6. 60

7. 44

8. 63

9. 87

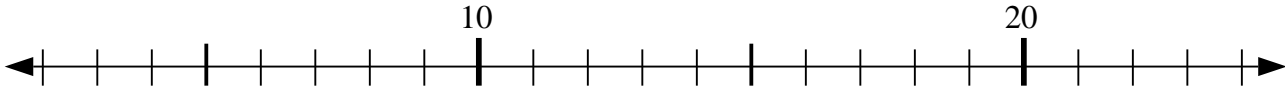
10. 81



Usar las líneas de números para resolver cada problema.

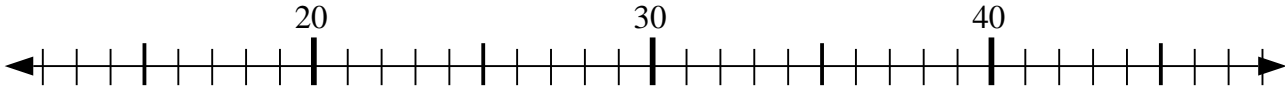
Respuestas

1) $12 + 12 = ?$



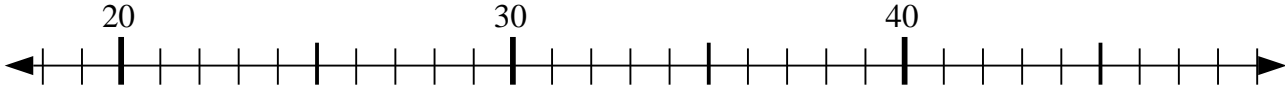
1. _____

2) $36 - 8 = ?$



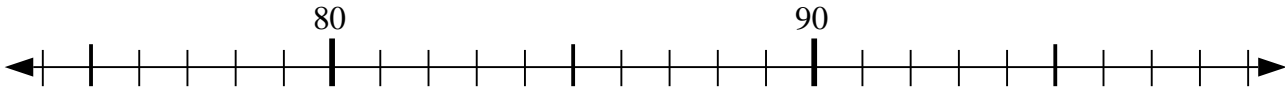
2. _____

3) $26 + 8 = ?$



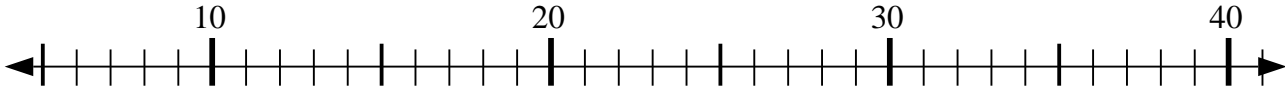
3. _____

4) $75 + 5 = ?$



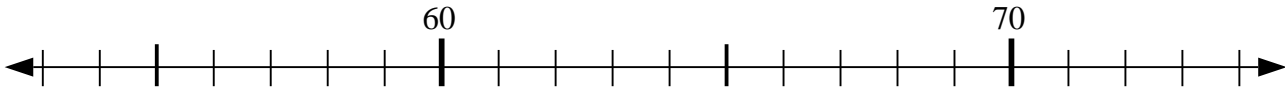
4. _____

5) $11 + 12 = ?$



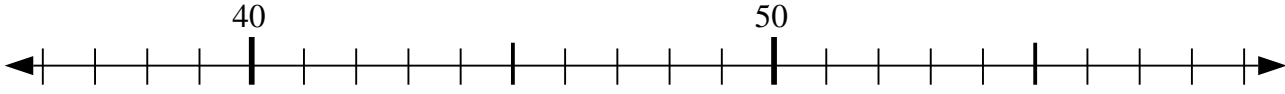
5. _____

6) $67 - 3 = ?$



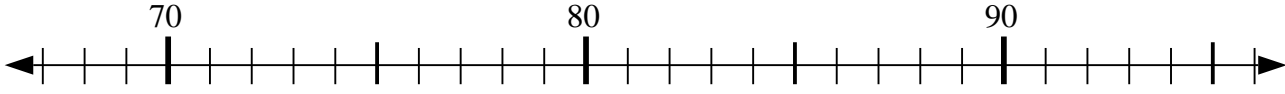
6. _____

7) $38 + 8 = ?$



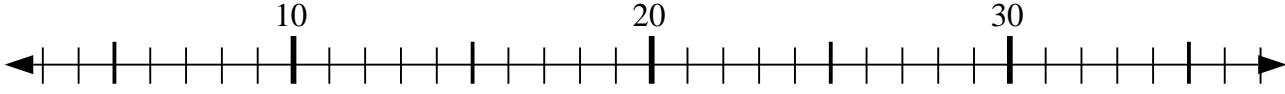
7. _____

8) $95 - 17 = ?$



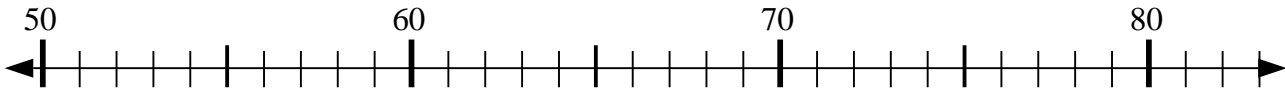
8. _____

9) $25 + 12 = ?$



9. _____

10) $51 + 32 = ?$

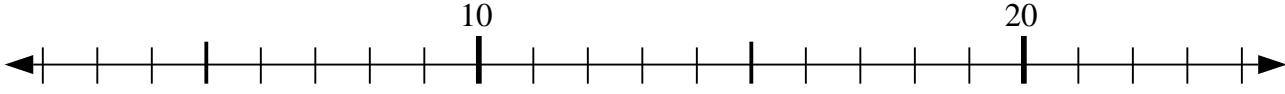


10. _____

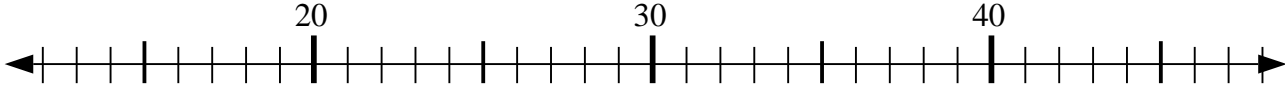


Usar las líneas de números para resolver cada problema.

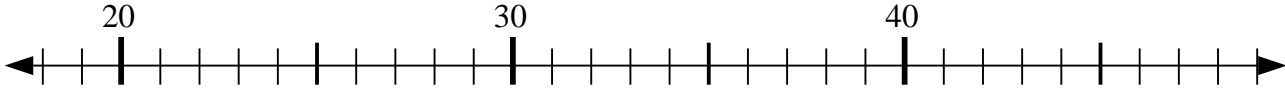
1) $12 + 12 = ?$



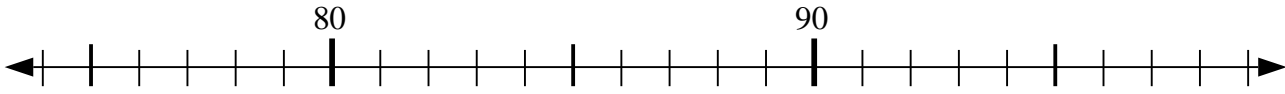
2) $36 - 8 = ?$



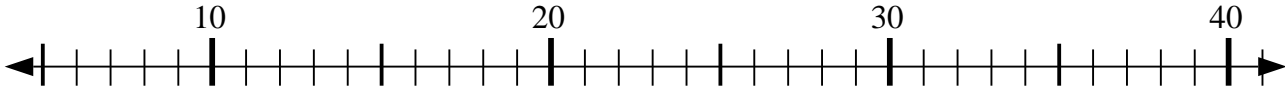
3) $26 + 8 = ?$



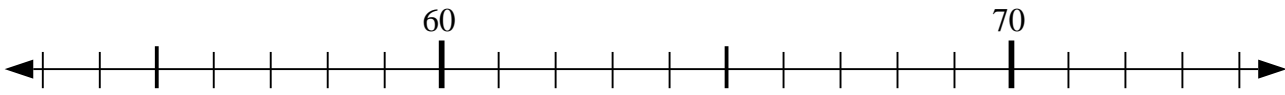
4) $75 + 5 = ?$



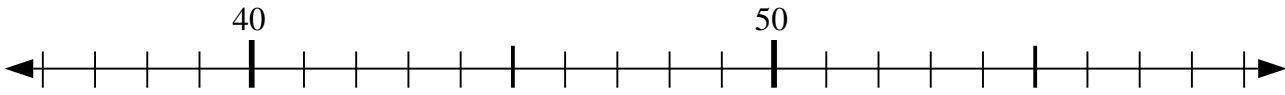
5) $11 + 12 = ?$



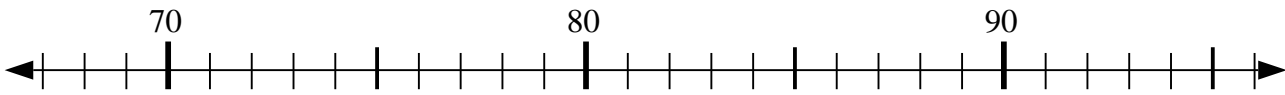
6) $67 - 3 = ?$



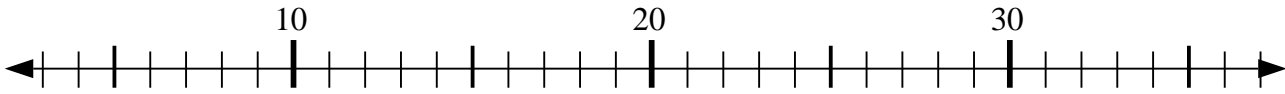
7) $38 + 8 = ?$



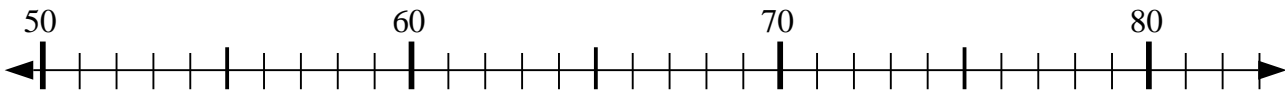
8) $95 - 17 = ?$



9) $25 + 12 = ?$



10) $51 + 32 = ?$



Respuestas

1. 24

2. 28

3. 34

4. 80

5. 23

6. 64

7. 46

8. 78

9. 37

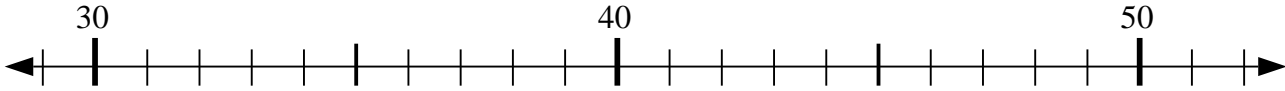
10. 83



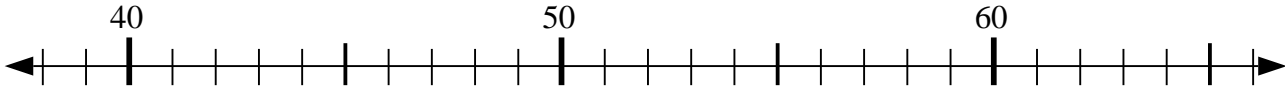
Usar las líneas de números para resolver cada problema.

Respuestas

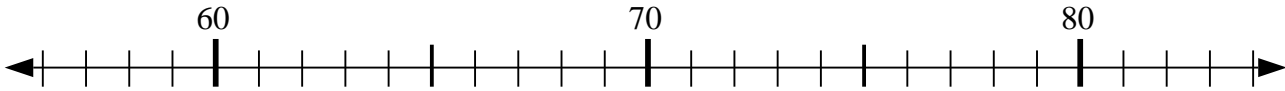
1) $34 + 4 = ?$



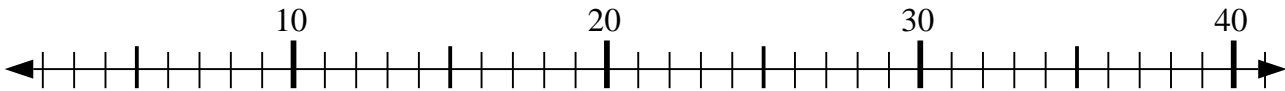
2) $46 - 7 = ?$



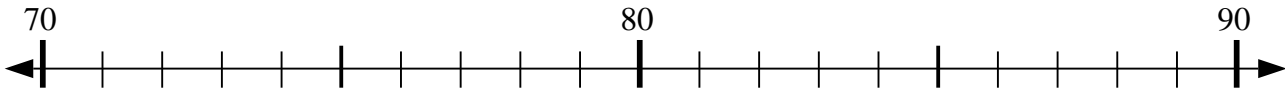
3) $59 + 8 = ?$



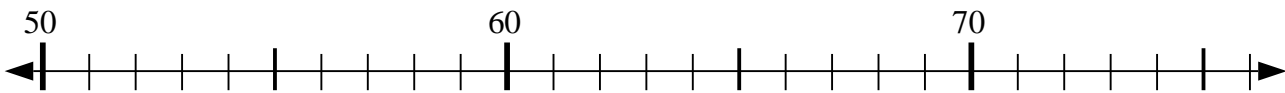
4) $3 + 36 = ?$



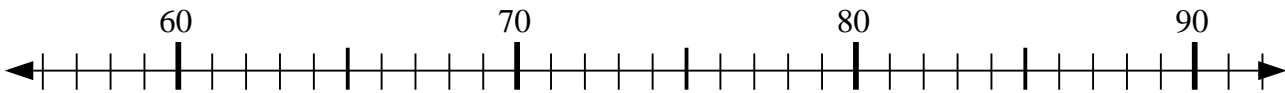
5) $88 - 13 = ?$



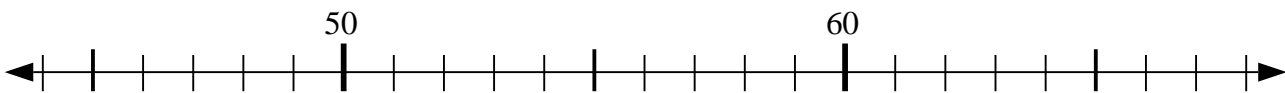
6) $74 - 1 = ?$



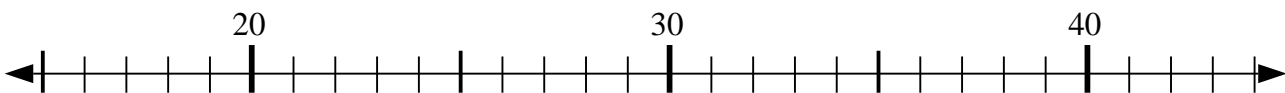
7) $59 + 16 = ?$



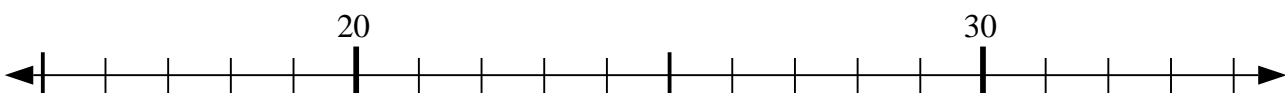
8) $44 + 15 = ?$



9) $20 + 6 = ?$



10) $31 - 9 = ?$



1. _____

2. _____

3. _____

4. _____

5. _____

6. _____

7. _____

8. _____

9. _____

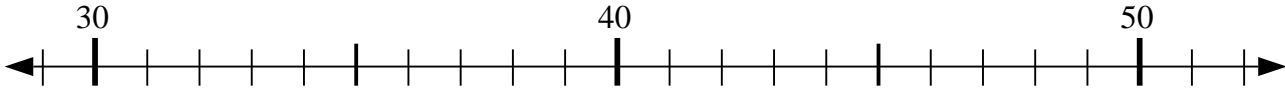
10. _____



Usar las líneas de números para resolver cada problema.

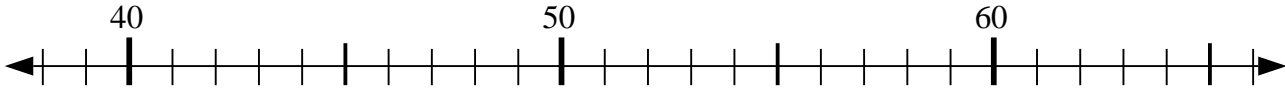
Respuestas

1) $34 + 4 = ?$



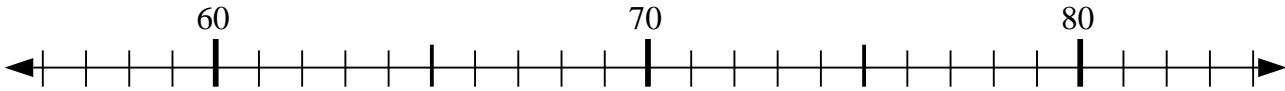
1. 38

2) $46 - 7 = ?$



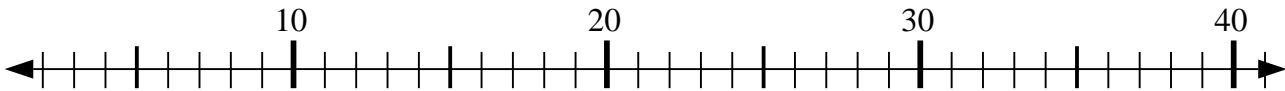
2. 39

3) $59 + 8 = ?$



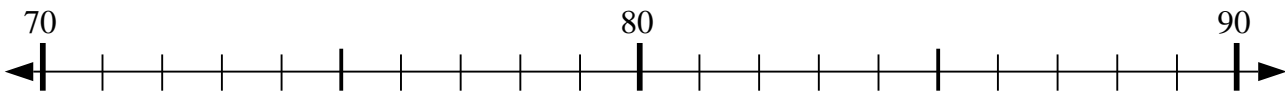
3. 67

4) $3 + 36 = ?$



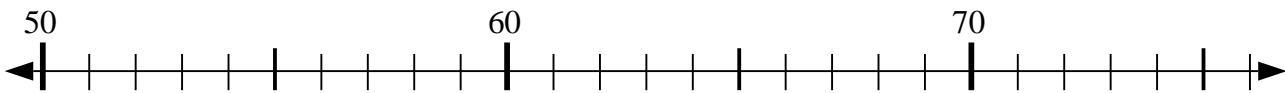
4. 39

5) $88 - 13 = ?$



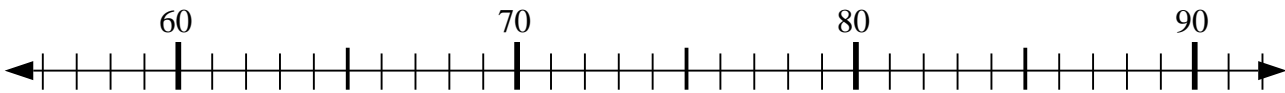
5. 75

6) $74 - 1 = ?$



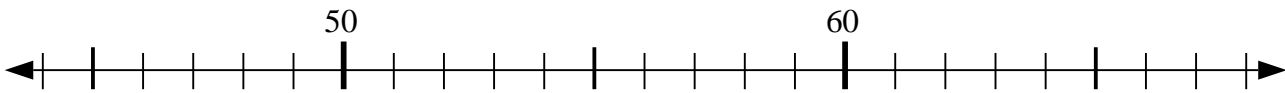
6. 73

7) $59 + 16 = ?$



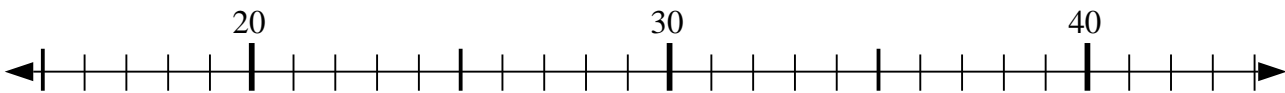
7. 75

8) $44 + 15 = ?$



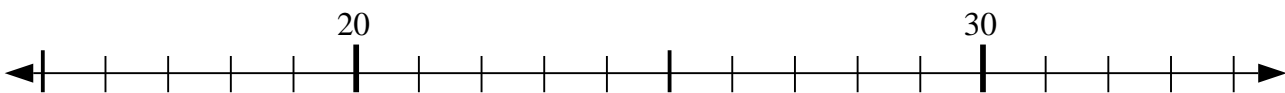
8. 59

9) $20 + 6 = ?$



9. 26

10) $31 - 9 = ?$



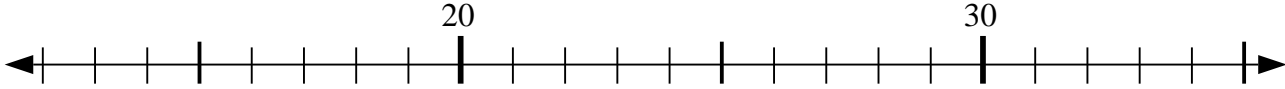
10. 22



Usar las líneas de números para resolver cada problema.

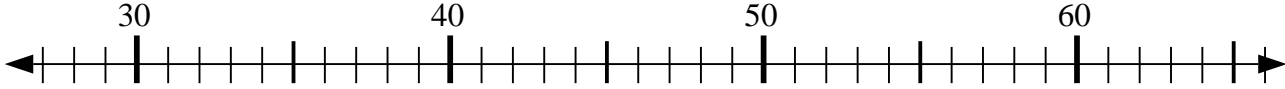
Respuestas

1) $16 + 14 = ?$



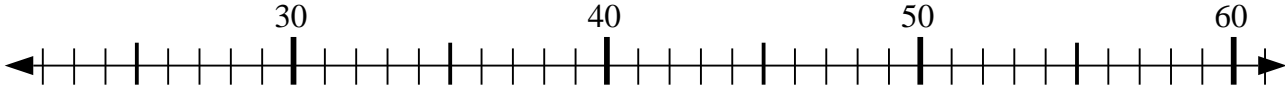
1. _____

2) $60 - 27 = ?$



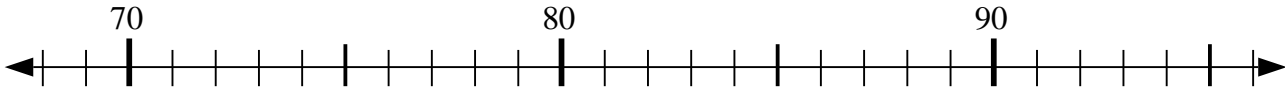
2. _____

3) $23 + 14 = ?$



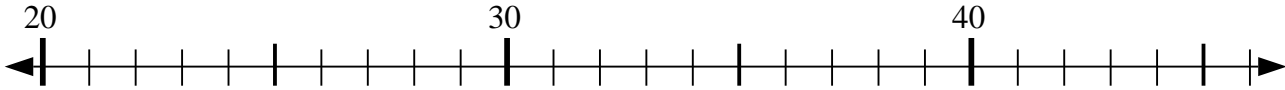
3. _____

4) $81 + 5 = ?$



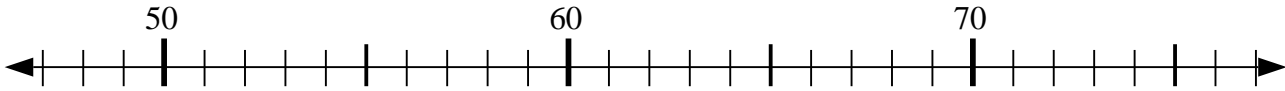
4. _____

5) $21 + 11 = ?$



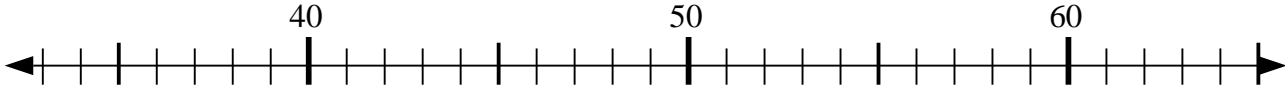
5. _____

6) $59 + 1 = ?$



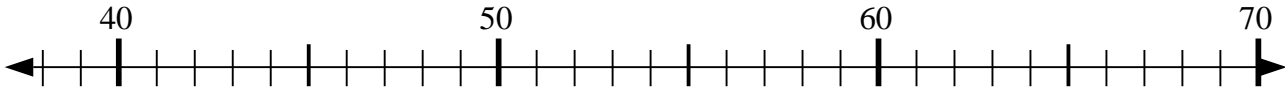
6. _____

7) $57 + 6 = ?$



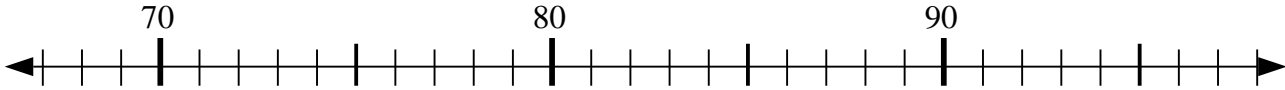
7. _____

8) $68 - 7 = ?$



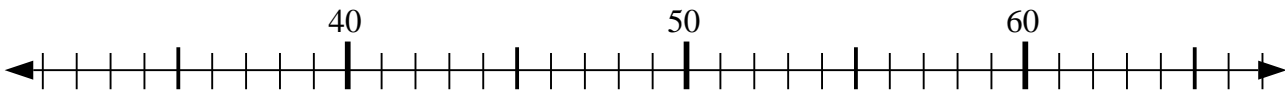
8. _____

9) $81 + 1 = ?$



9. _____

10) $32 + 24 = ?$

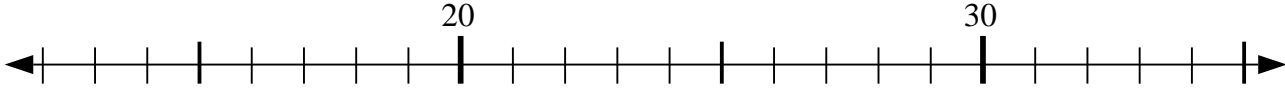


10. _____

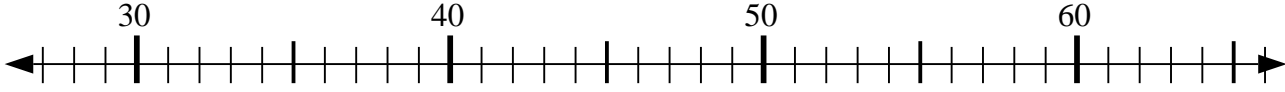


Usar las líneas de números para resolver cada problema.

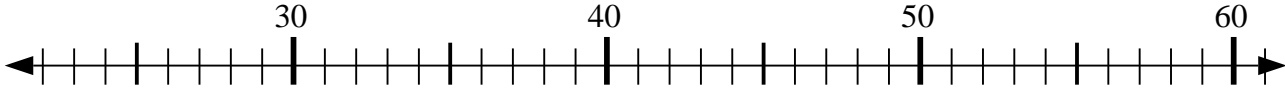
1) $16 + 14 = ?$



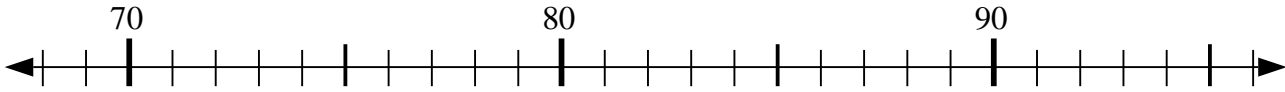
2) $60 - 27 = ?$



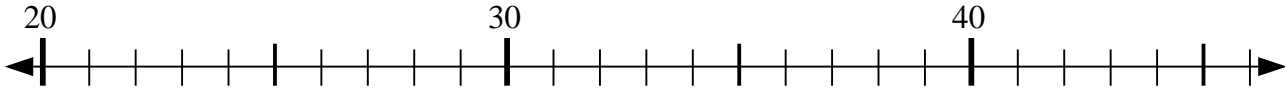
3) $23 + 14 = ?$



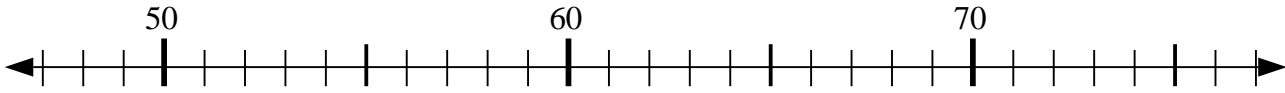
4) $81 + 5 = ?$



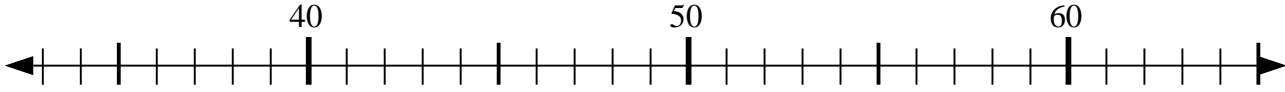
5) $21 + 11 = ?$



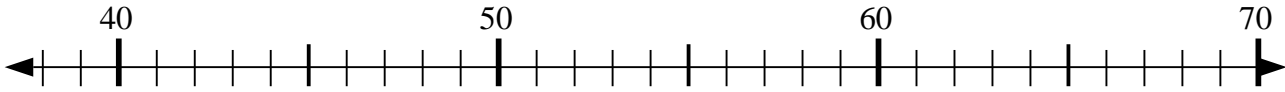
6) $59 + 1 = ?$



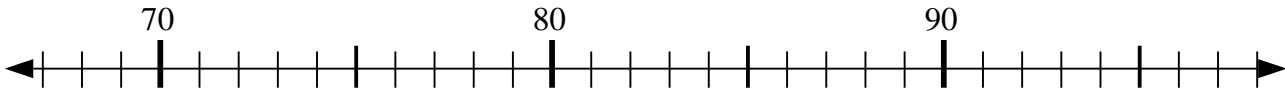
7) $57 + 6 = ?$



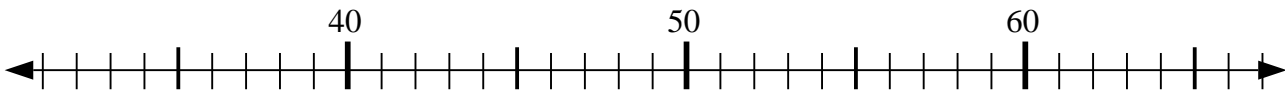
8) $68 - 7 = ?$



9) $81 + 1 = ?$



10) $32 + 24 = ?$



Respuestas

1. 30

2. 33

3. 37

4. 86

5. 32

6. 60

7. 63

8. 61

9. 82

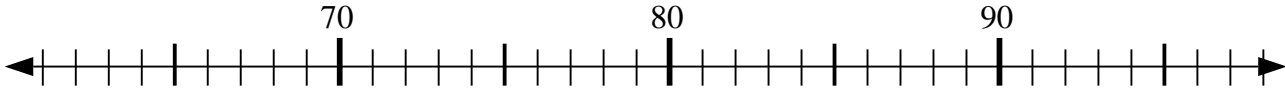
10. 56



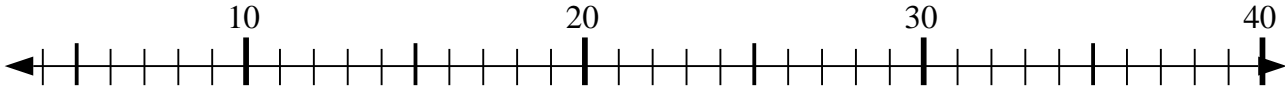
Usar las líneas de números para resolver cada problema.

Respuestas

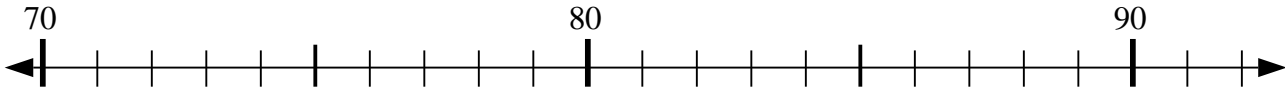
1) $91 + 0 = ?$



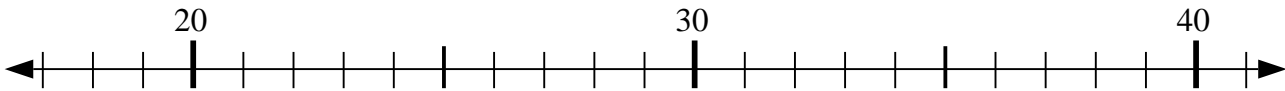
2) $15 + 11 = ?$



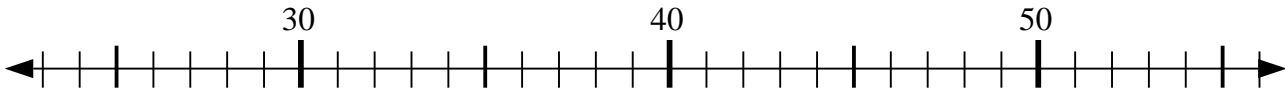
3) $86 - 0 = ?$



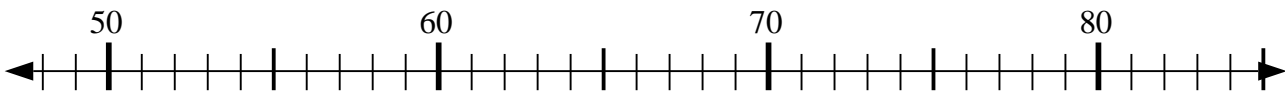
4) $28 + 8 = ?$



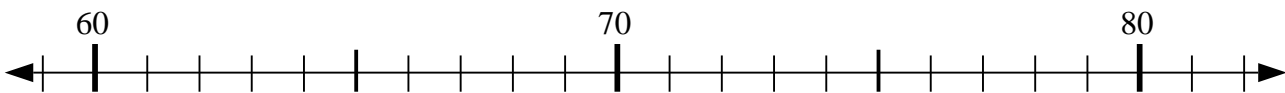
5) $33 + 12 = ?$



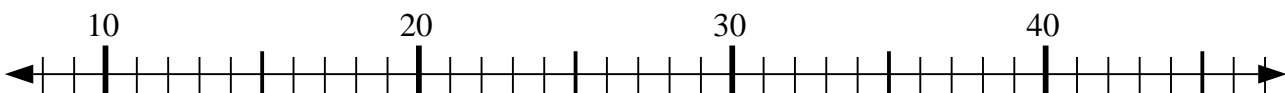
6) $58 - 0 = ?$



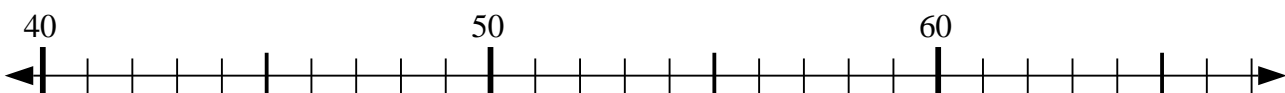
7) $81 - 2 = ?$



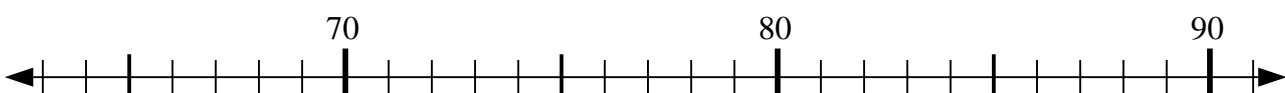
8) $33 + 10 = ?$



9) $50 + 6 = ?$



10) $91 + 0 = ?$



1. _____

2. _____

3. _____

4. _____

5. _____

6. _____

7. _____

8. _____

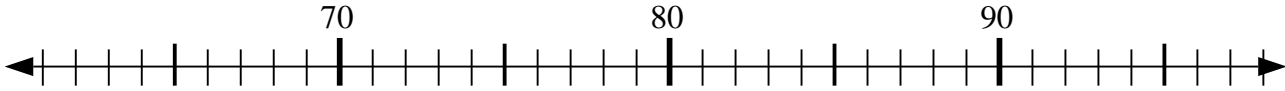
9. _____

10. _____

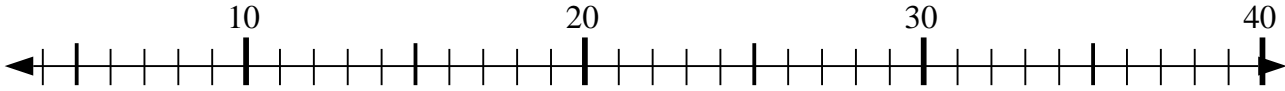


Usar las líneas de números para resolver cada problema.

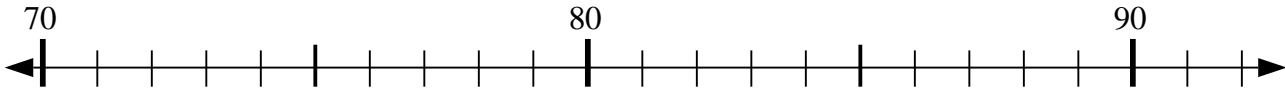
1) $91 + 0 = ?$



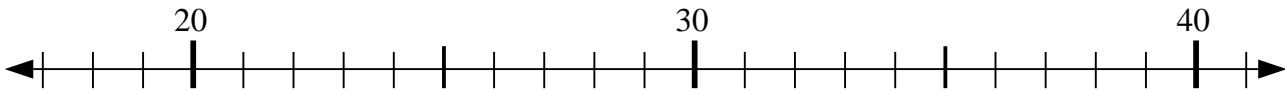
2) $15 + 11 = ?$



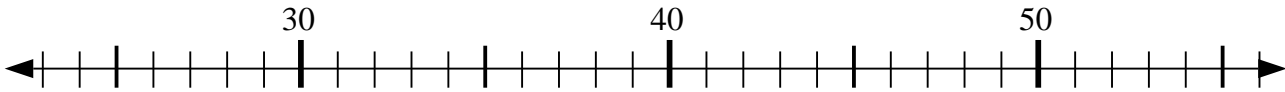
3) $86 - 0 = ?$



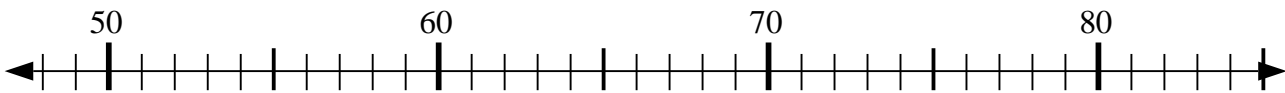
4) $28 + 8 = ?$



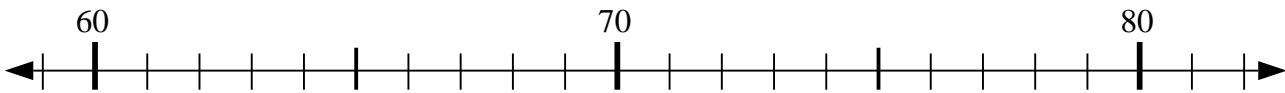
5) $33 + 12 = ?$



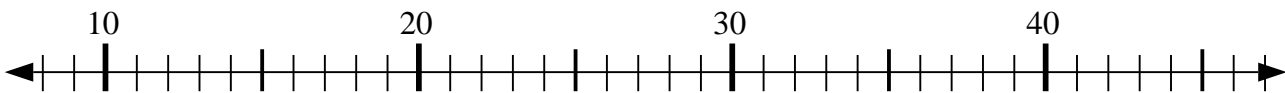
6) $58 - 0 = ?$



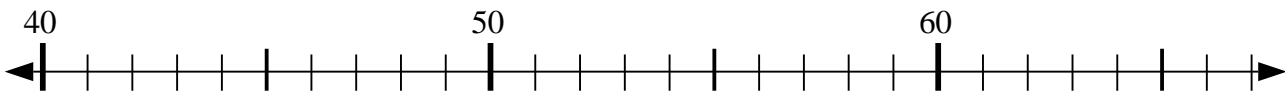
7) $81 - 2 = ?$



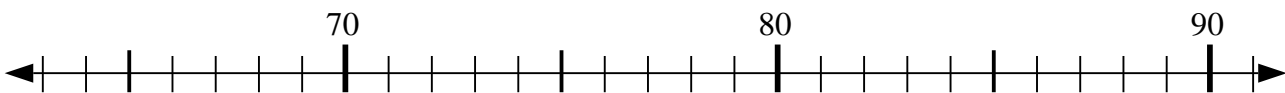
8) $33 + 10 = ?$



9) $50 + 6 = ?$



10) $91 + 0 = ?$



Respuestas

1. 91

2. 26

3. 86

4. 36

5. 45

6. 58

7. 79

8. 43

9. 56

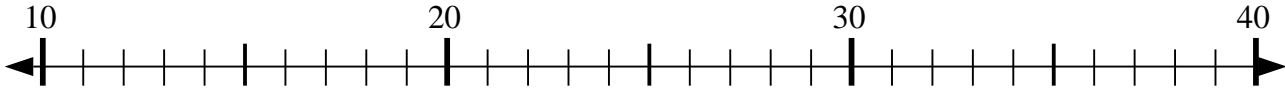
10. 91



Usar las líneas de números para resolver cada problema.

Respuestas

1) $17 + 15 = ?$



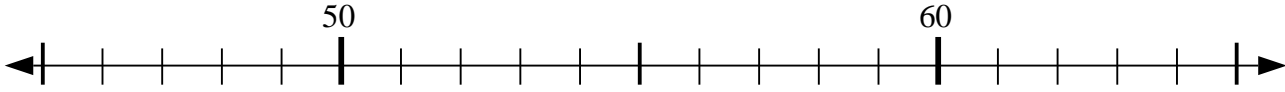
1. _____

2) $61 - 6 = ?$



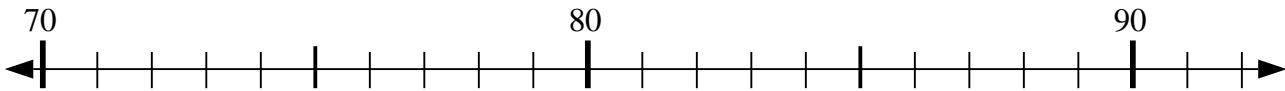
2. _____

3) $54 + 10 = ?$



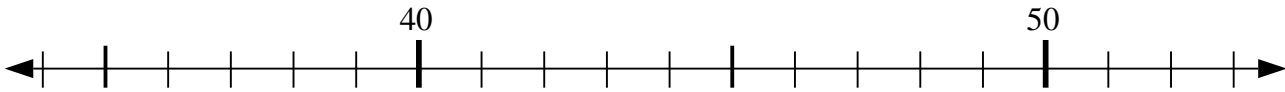
4. _____

4) $78 + 1 = ?$



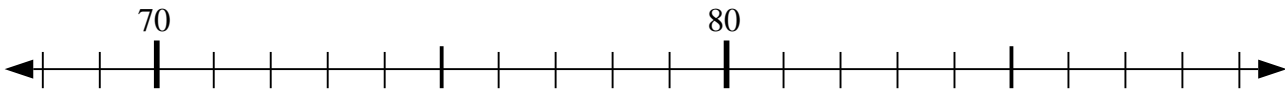
6. _____

5) $43 - 5 = ?$



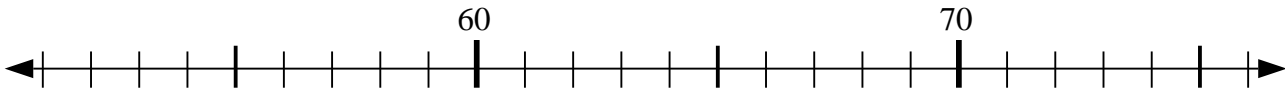
8. _____

6) $78 - 0 = ?$

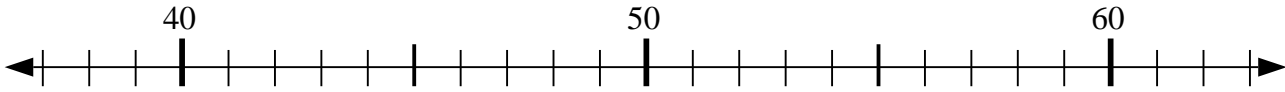


10. _____

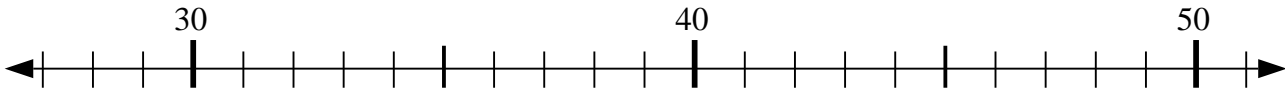
7) $60 - 0 = ?$



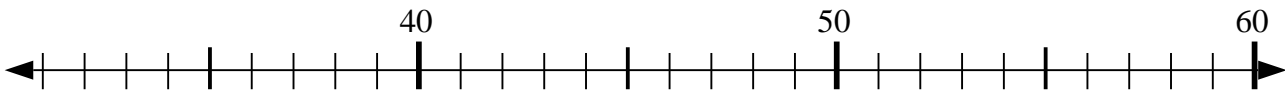
8) $57 - 19 = ?$



9) $39 - 7 = ?$



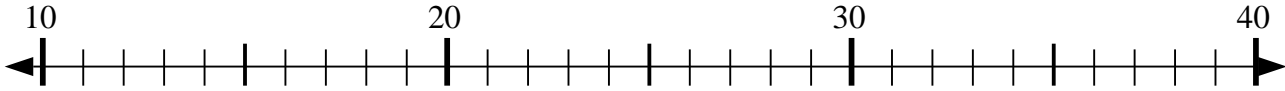
10) $34 + 3 = ?$



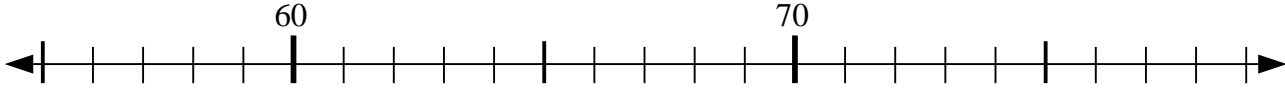


Usar las líneas de números para resolver cada problema.

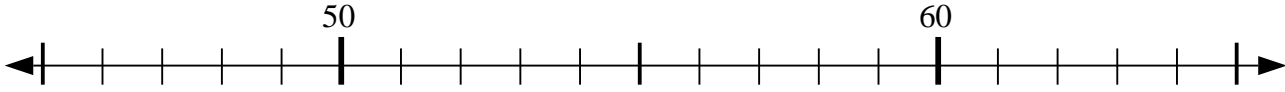
1) $17 + 15 = ?$



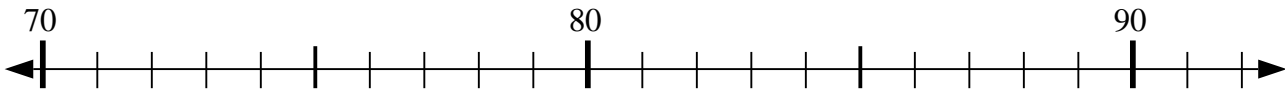
2) $61 - 6 = ?$



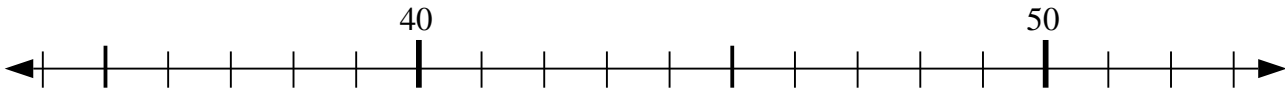
3) $54 + 10 = ?$



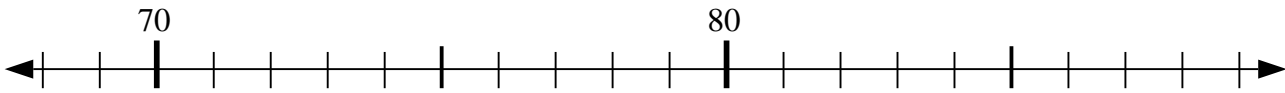
4) $78 + 1 = ?$



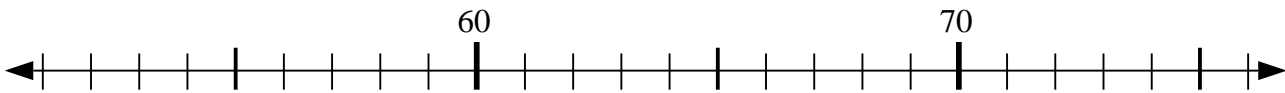
5) $43 - 5 = ?$



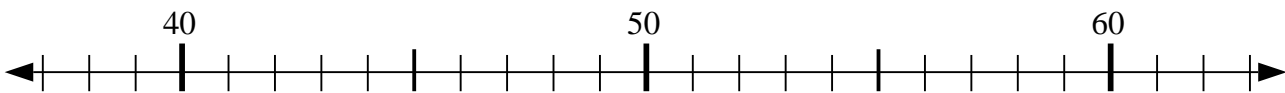
6) $78 - 0 = ?$



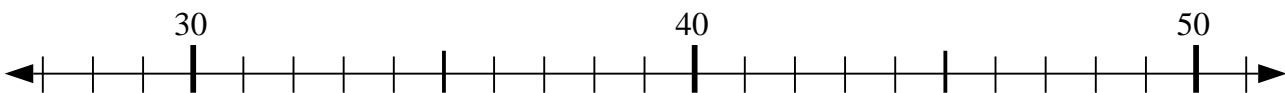
7) $60 - 0 = ?$



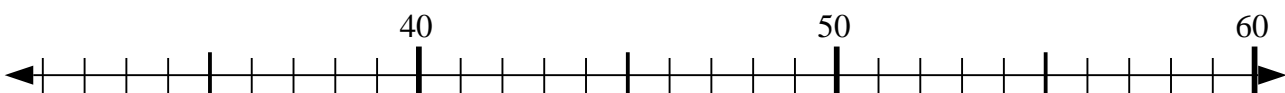
8) $57 - 19 = ?$



9) $39 - 7 = ?$



10) $34 + 3 = ?$



Respuestas

1. 32

2. 55

3. 64

4. 79

5. 38

6. 78

7. 60

8. 38

9. 32

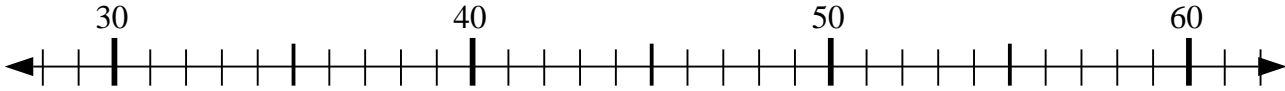
10. 37



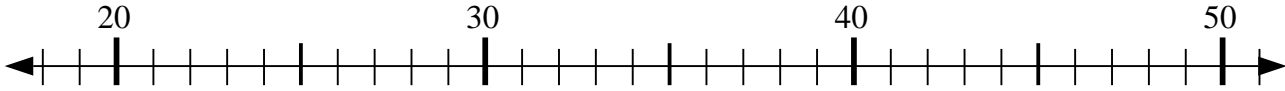
Usar las líneas de números para resolver cada problema.

Respuestas

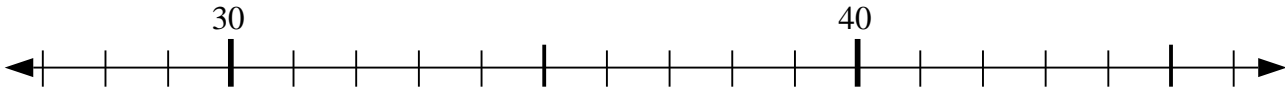
1) $32 + 27 = ?$



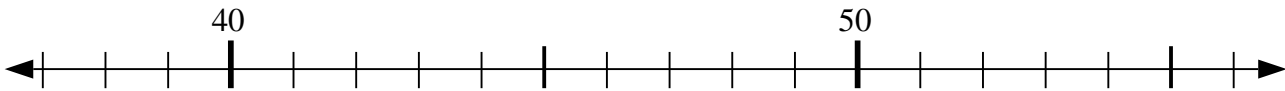
2) $22 + 1 = ?$



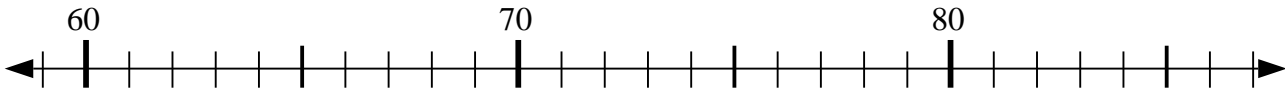
3) $28 + 7 = ?$



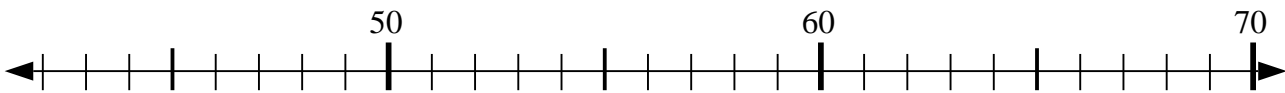
4) $46 - 6 = ?$



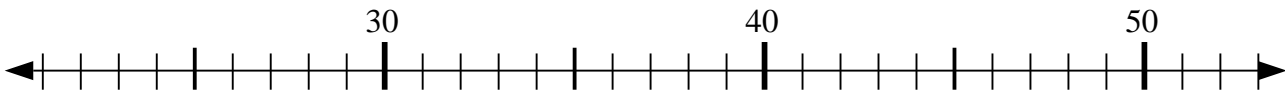
5) $66 - 1 = ?$



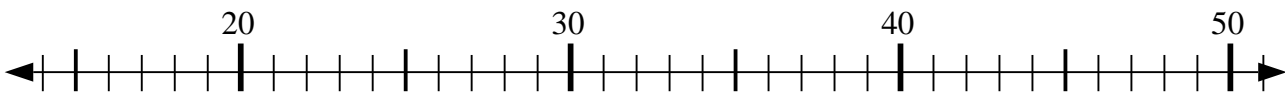
6) $58 - 8 = ?$



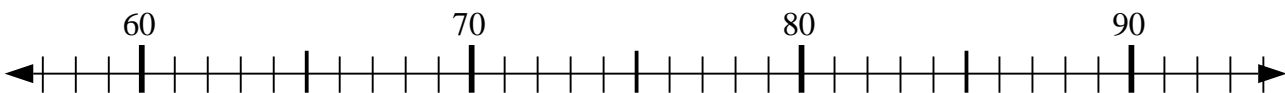
7) $26 + 8 = ?$



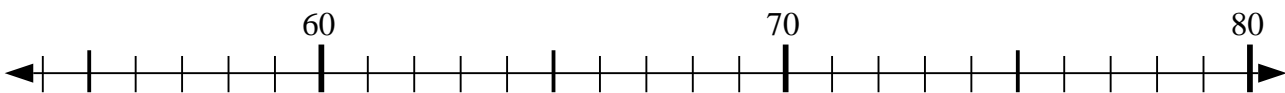
8) $41 - 20 = ?$



9) $60 + 3 = ?$



10) $55 + 6 = ?$



1. _____

2. _____

3. _____

4. _____

5. _____

6. _____

7. _____

8. _____

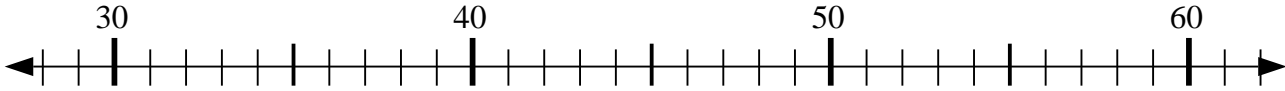
9. _____

10. _____

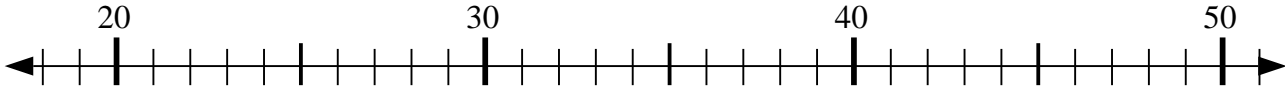


Usar las líneas de números para resolver cada problema.

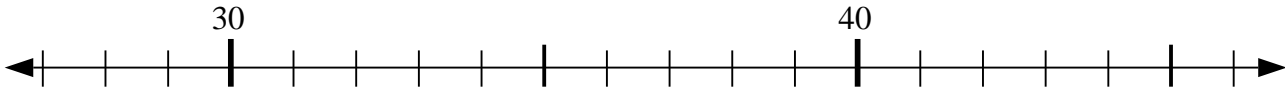
1) $32 + 27 = ?$



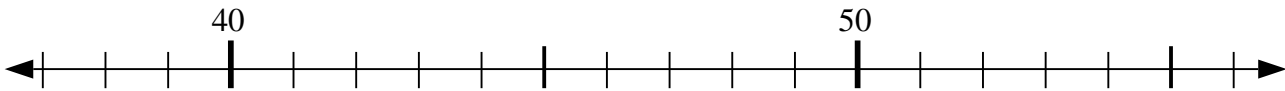
2) $22 + 1 = ?$



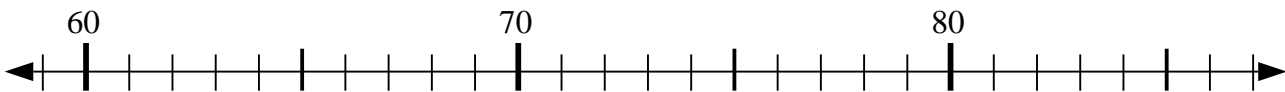
3) $28 + 7 = ?$



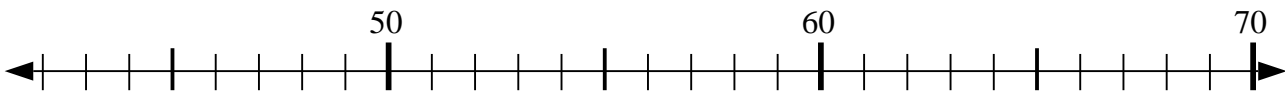
4) $46 - 6 = ?$



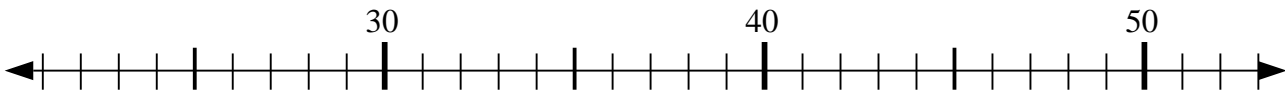
5) $66 - 1 = ?$



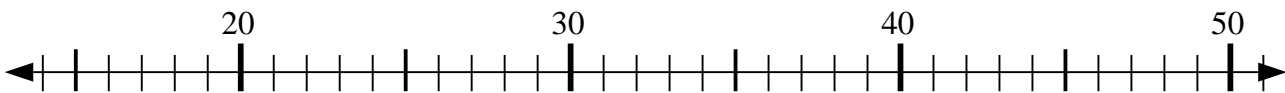
6) $58 - 8 = ?$



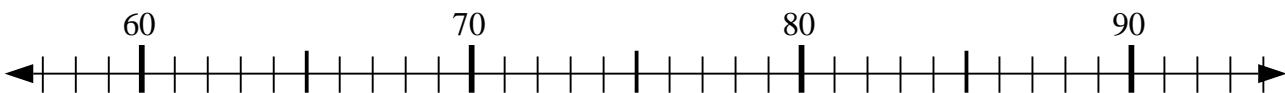
7) $26 + 8 = ?$



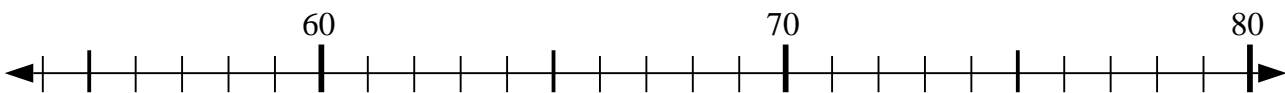
8) $41 - 20 = ?$



9) $60 + 3 = ?$



10) $55 + 6 = ?$



Respuestas

1. 59

2. 23

3. 35

4. 40

5. 65

6. 50

7. 34

8. 21

9. 63

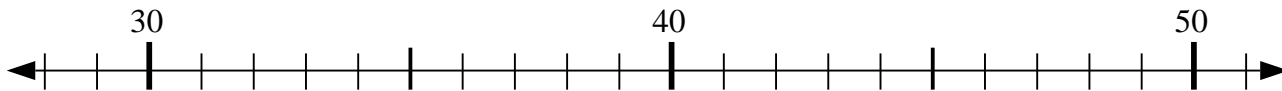
10. 61



Usar las líneas de números para resolver cada problema.

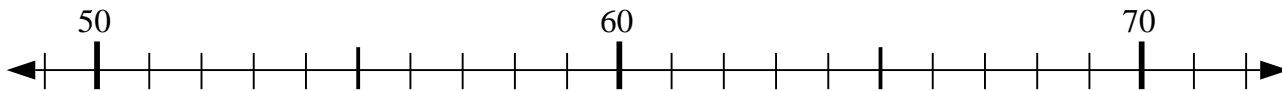
Respuestas

1) $29 + 4 = ?$



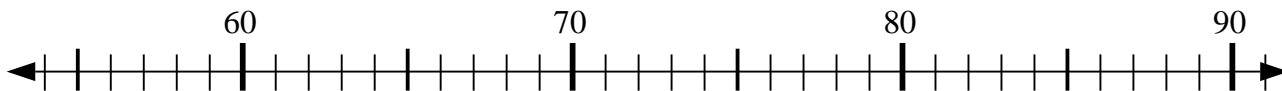
1. _____

2) $66 - 11 = ?$



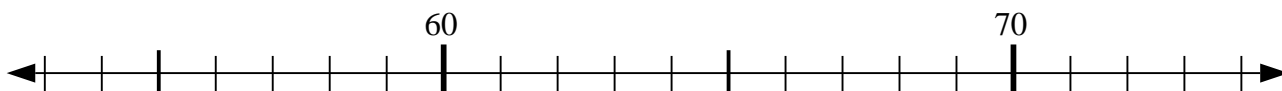
2. _____

3) $65 - 5 = ?$



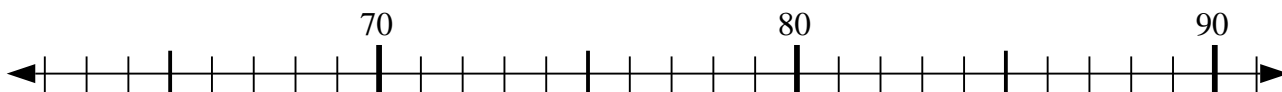
3. _____

4) $59 + 3 = ?$



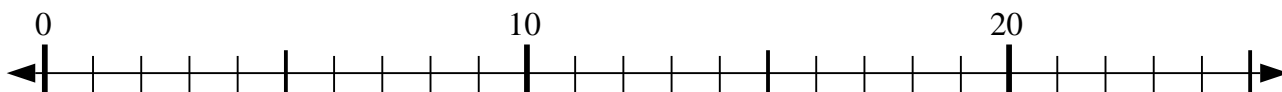
4. _____

5) $81 - 10 = ?$



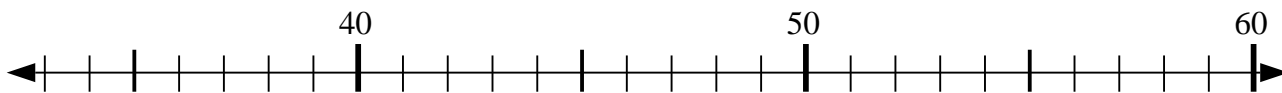
5. _____

6) $10 - 4 = ?$



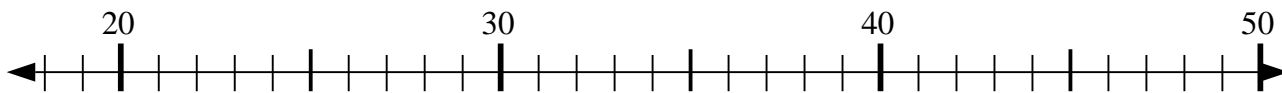
6. _____

7) $57 - 12 = ?$



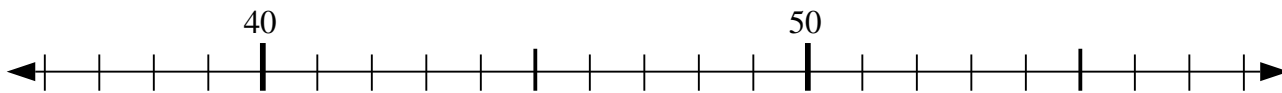
7. _____

8) $33 - 8 = ?$



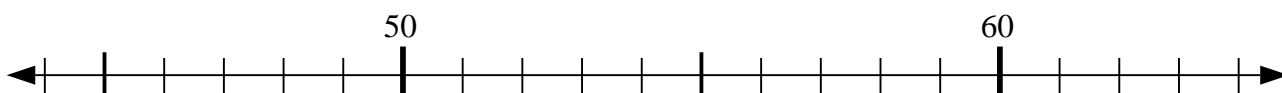
8. _____

9) $51 - 3 = ?$



9. _____

10) $52 + 3 = ?$

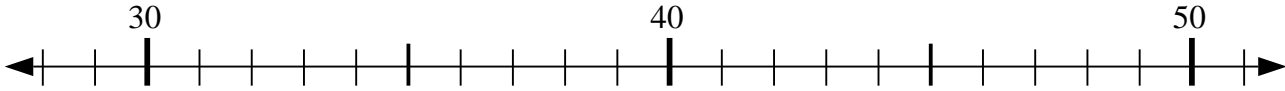


10. _____



Usar las líneas de números para resolver cada problema.

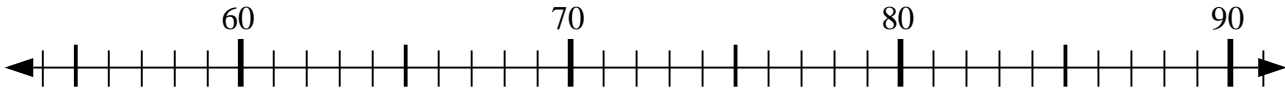
1) $29 + 4 = ?$



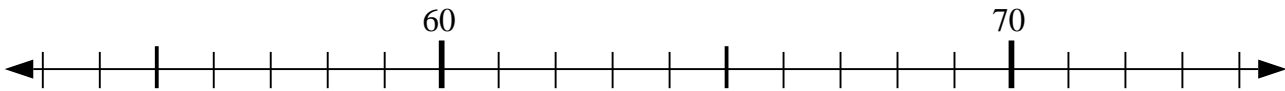
2) $66 - 11 = ?$



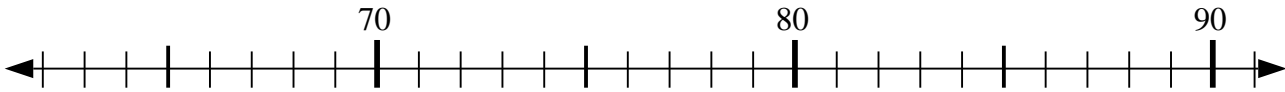
3) $65 - 5 = ?$



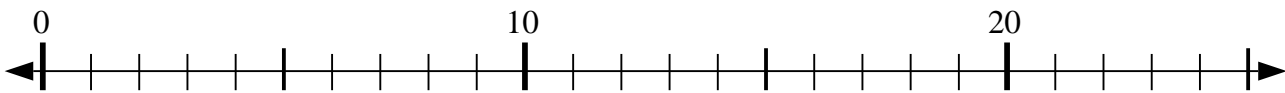
4) $59 + 3 = ?$



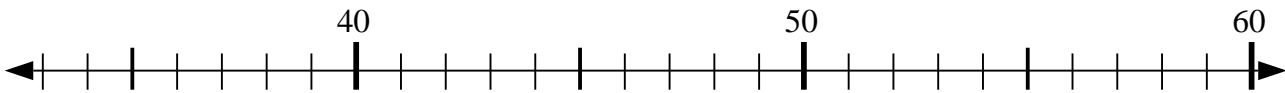
5) $81 - 10 = ?$



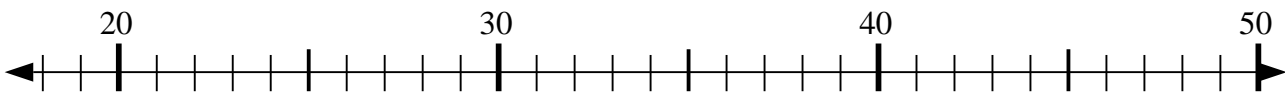
6) $10 - 4 = ?$



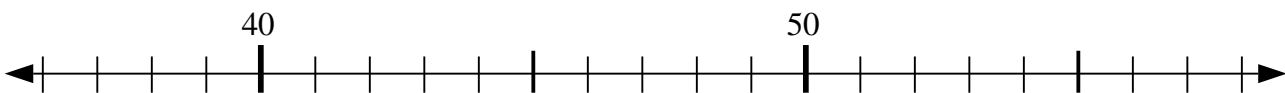
7) $57 - 12 = ?$



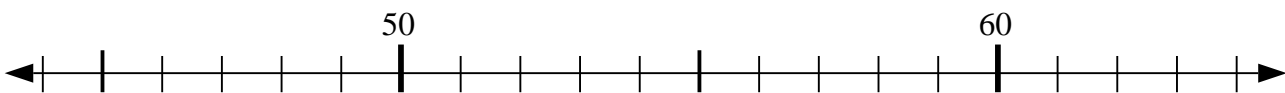
8) $33 - 8 = ?$



9) $51 - 3 = ?$



10) $52 + 3 = ?$



Respuestas

1. 33

2. 55

3. 60

4. 62

5. 71

6. 6

7. 45

8. 25

9. 48

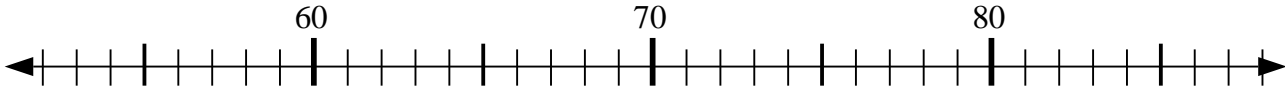
10. 55



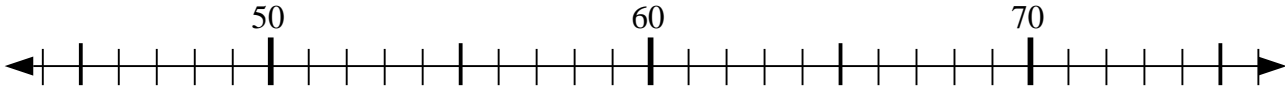
Usar las líneas de números para resolver cada problema.

Respuestas

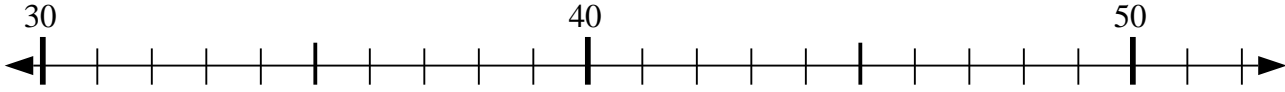
1) $70 - 10 = ?$



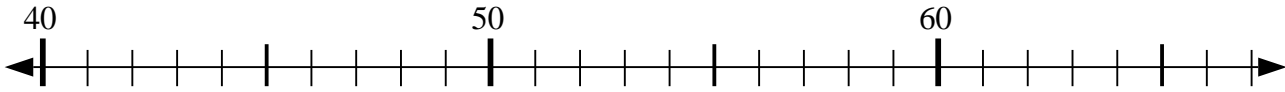
2) $75 - 25 = ?$



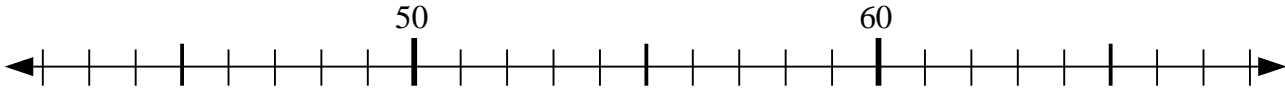
3) $48 - 13 = ?$



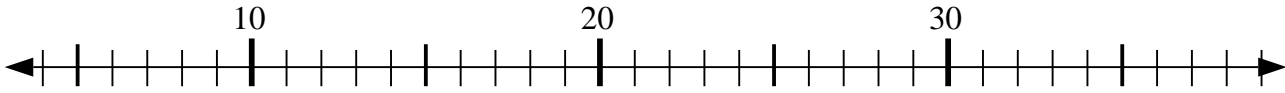
4) $54 + 4 = ?$



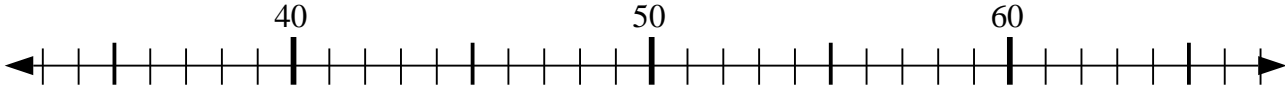
5) $55 + 5 = ?$



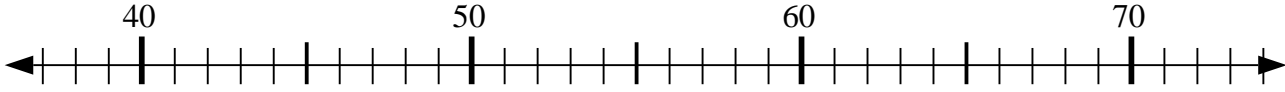
6) $35 - 29 = ?$



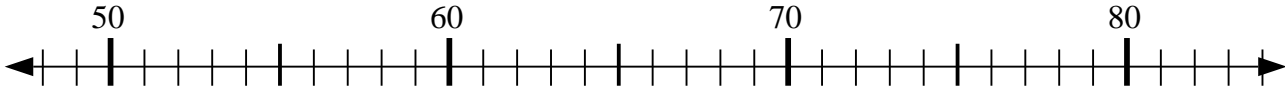
7) $35 + 6 = ?$



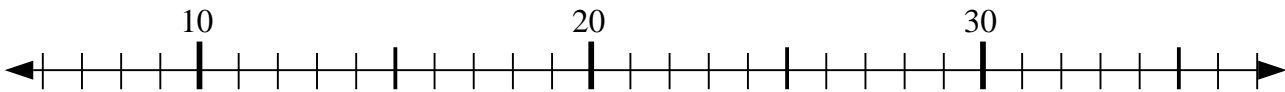
8) $74 - 12 = ?$



9) $71 - 22 = ?$



10) $32 - 12 = ?$



1. _____

2. _____

3. _____

4. _____

5. _____

6. _____

7. _____

8. _____

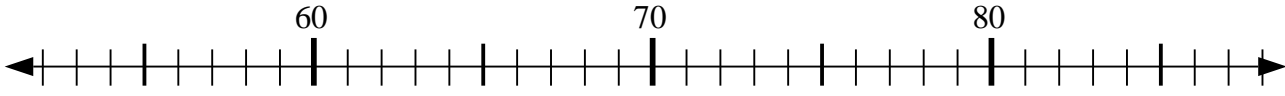
9. _____

10. _____

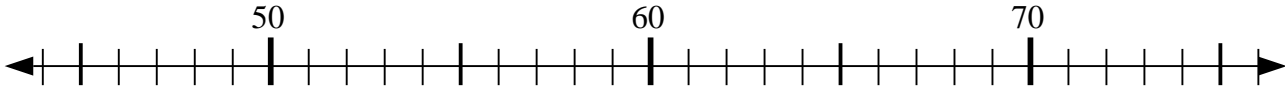


Usar las líneas de números para resolver cada problema.

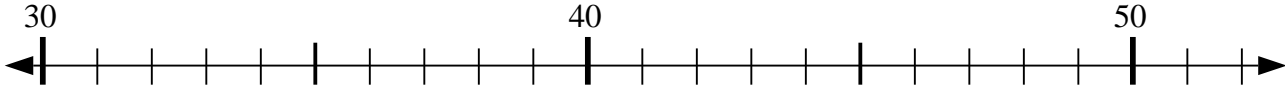
1) $70 - 10 = ?$



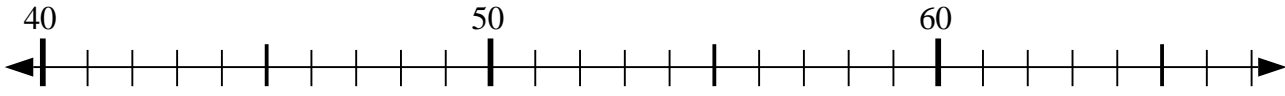
2) $75 - 25 = ?$



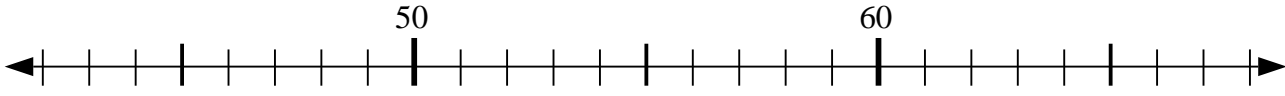
3) $48 - 13 = ?$



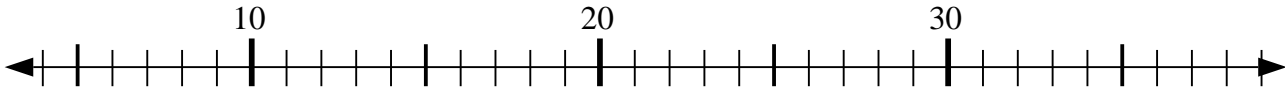
4) $54 + 4 = ?$



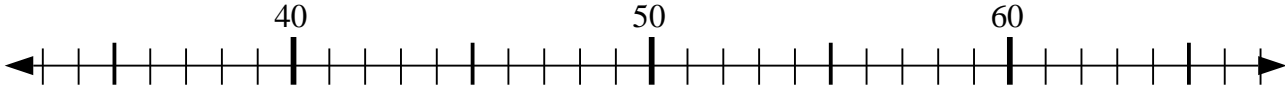
5) $55 + 5 = ?$



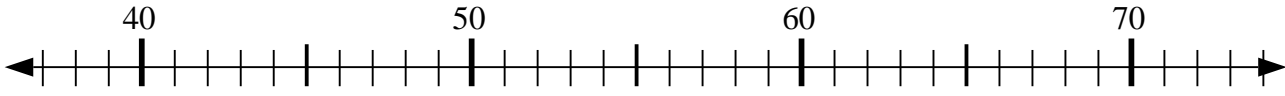
6) $35 - 29 = ?$



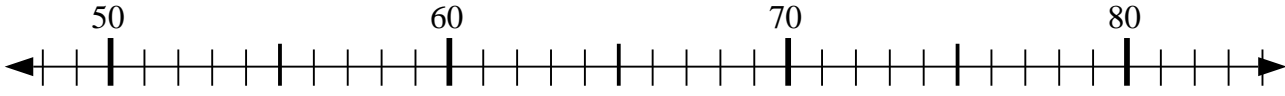
7) $35 + 6 = ?$



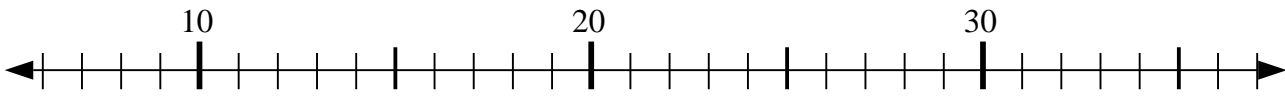
8) $74 - 12 = ?$



9) $71 - 22 = ?$



10) $32 - 12 = ?$



Respuestas

1. 60

2. 50

3. 35

4. 58

5. 60

6. 6

7. 41

8. 62

9. 49

10. 20