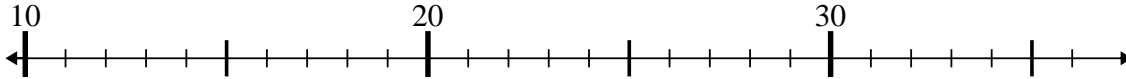




Usar las líneas de números para resolver cada problema.

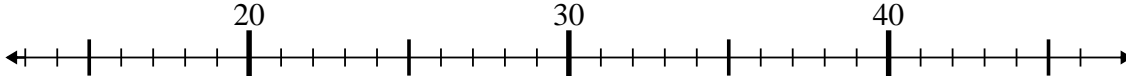
**Respuestas**

1)  $20 - 0 = ?$



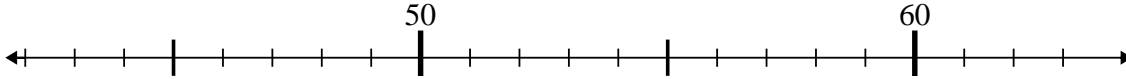
1. \_\_\_\_\_

2)  $37 - 13 = ?$



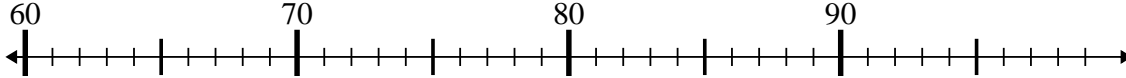
2. \_\_\_\_\_

3)  $54 + 2 = ?$



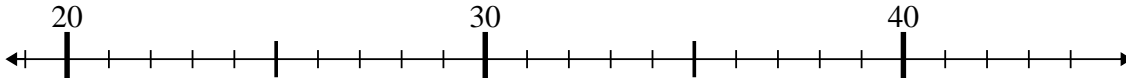
3. \_\_\_\_\_

4)  $66 - 2 = ?$



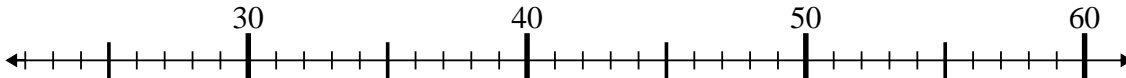
4. \_\_\_\_\_

5)  $29 - 1 = ?$



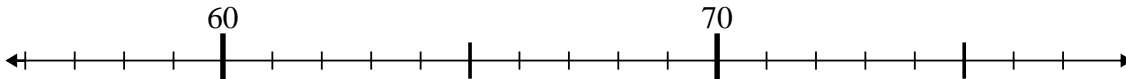
5. \_\_\_\_\_

6)  $30 + 16 = ?$



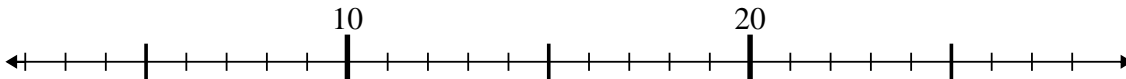
6. \_\_\_\_\_

7)  $60 + 7 = ?$



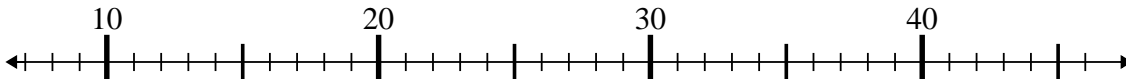
7. \_\_\_\_\_

8)  $25 - 23 = ?$



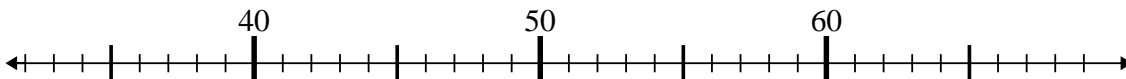
8. \_\_\_\_\_

9)  $13 - 3 = ?$



9. \_\_\_\_\_

10)  $68 - 3 = ?$

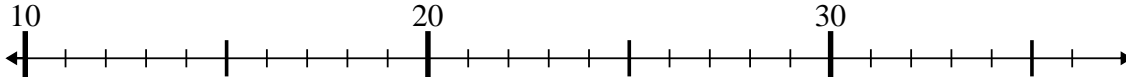


10. \_\_\_\_\_

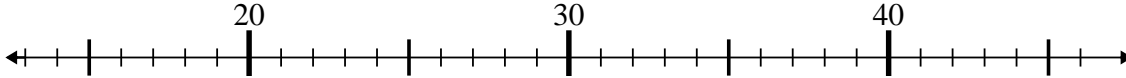


Usar las líneas de números para resolver cada problema.

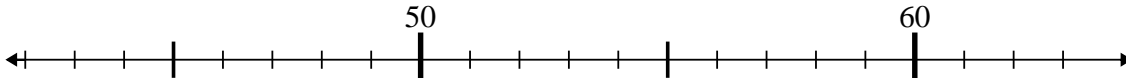
1)  $20 - 0 = ?$



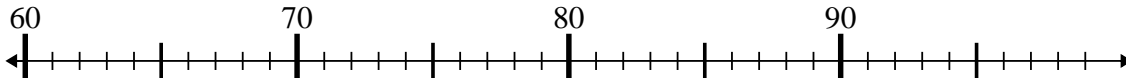
2)  $37 - 13 = ?$



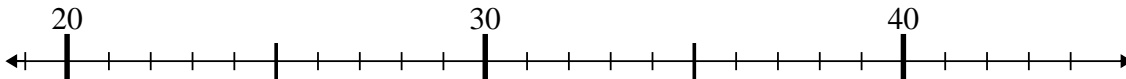
3)  $54 + 2 = ?$



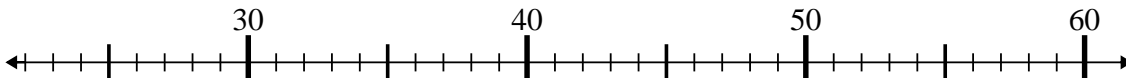
4)  $66 - 2 = ?$



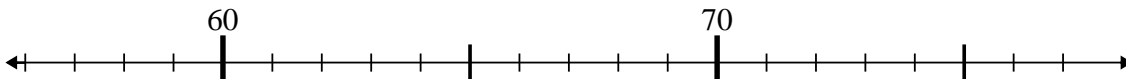
5)  $29 - 1 = ?$



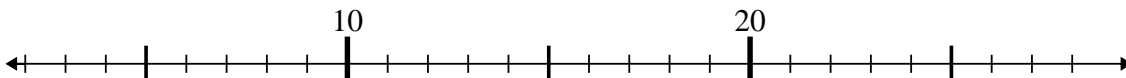
6)  $30 + 16 = ?$



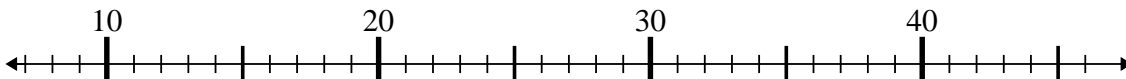
7)  $60 + 7 = ?$



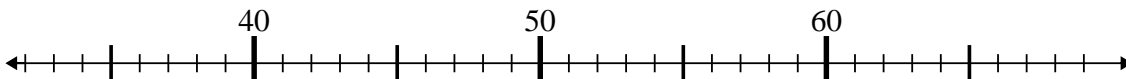
8)  $25 - 23 = ?$



9)  $13 - 3 = ?$



10)  $68 - 3 = ?$



**Respuestas**

1. 20
2. 24
3. 56
4. 64
5. 28
6. 46
7. 67
8. 2
9. 10
10. 65