



Resuelve cada problema

1) $1 + 2 = \underline{\quad}$

2) $2 + 3 = \underline{\quad}$

3) $1 + 0 = \underline{\quad}$

4) $4 + 0 = \underline{\quad}$

5) $2 + 1 = \underline{\quad}$

6) $1 + 1 = \underline{\quad}$

7) $4 + 1 = \underline{\quad}$

8) $2 + 0 = \underline{\quad}$

9) $5 - 1 = \underline{\quad}$

10) $4 - 4 = \underline{\quad}$

11) $4 - 2 = \underline{\quad}$

12) $3 - 3 = \underline{\quad}$

13) $5 - 5 = \underline{\quad}$

14) $2 - 1 = \underline{\quad}$

15) $5 - 3 = \underline{\quad}$

16) $1 - 0 = \underline{\quad}$

Respuestas

1. _____

2. _____

3. _____

4. _____

5. _____

6. _____

7. _____

8. _____

9. _____

10. _____

11. _____

12. _____

13. _____

14. _____

15. _____

16. _____



Resuelve cada problema

1) $1 + 2 = \underline{3}$

2) $2 + 3 = \underline{5}$

3) $1 + 0 = \underline{1}$

4) $4 + 0 = \underline{4}$

5) $2 + 1 = \underline{3}$

6) $1 + 1 = \underline{2}$

7) $4 + 1 = \underline{5}$

8) $2 + 0 = \underline{2}$

9) $5 - 1 = \underline{4}$

10) $4 - 4 = \underline{0}$

11) $4 - 2 = \underline{2}$

12) $3 - 3 = \underline{0}$

13) $5 - 5 = \underline{0}$

14) $2 - 1 = \underline{1}$



15) $5 - 3 = \underline{2}$



16) $1 - 0 = \underline{1}$


Respuestas1. 32. 53. 14. 45. 36. 27. 58. 29. 410. 011. 212. 013. 014. 115. 216. 1






Resuelve cada problema



1) 1 + 2 = ____
 + 



2) 2 + 3 = ____
 + 


3) 1 + 0 = ____




4) 4 + 0 = ____



5) 2 + 1 = ____
 + 



6) 1 + 1 = ____
 + 



7) 4 + 1 = ____
 + 



8) 2 + 0 = ____


9) 5 - 1 = ____
 - 



10) 4 - 4 = ____
 - 


11) 4 - 2 = ____
 - 

12) 3 - 3 = ____
 - 

13) 5 - 5 = ____
 - 

14) 2 - 1 = ____
 - 

15) 5 - 3 = ____
 - 

16) 1 - 0 = ____


Respuestas

1. _____

2. _____

3. _____

4. _____

5. _____

6. _____

7. _____

8. _____

9. _____

10. _____

11. _____

12. _____

13. _____

14. _____

15. _____

16. _____