



Resuelve cada problema

1) $4 + 0 = \underline{\quad}$

2) $1 + 4 = \underline{\quad}$

3) $1 + 0 = \underline{\quad}$

4) $2 + 1 = \underline{\quad}$

5) $2 + 0 = \underline{\quad}$

6) $4 + 1 = \underline{\quad}$

7) $3 + 2 = \underline{\quad}$

8) $5 + 0 = \underline{\quad}$

9) $1 - 0 = \underline{\quad}$

10) $4 - 1 = \underline{\quad}$

11) $4 - 4 = \underline{\quad}$

12) $5 - 3 = \underline{\quad}$

13) $5 - 5 = \underline{\quad}$

14) $3 - 2 = \underline{\quad}$

15) $3 - 3 = \underline{\quad}$

16) $5 - 1 = \underline{\quad}$

Respuestas

1. _____

2. _____

3. _____

4. _____

5. _____

6. _____

7. _____

8. _____

9. _____

10. _____

11. _____

12. _____

13. _____

14. _____

15. _____

16. _____



Resuelve cada problema

1) $4 + 0 = \underline{4}$

2) $1 + 4 = \underline{5}$

3) $1 + 0 = \underline{1}$

4) $2 + 1 = \underline{3}$

5) $2 + 0 = \underline{2}$

6) $4 + 1 = \underline{5}$

7) $3 + 2 = \underline{5}$

8) $5 + 0 = \underline{5}$

9) $1 - 0 = \underline{1}$

10) $4 - 1 = \underline{3}$

11) $4 - 4 = \underline{0}$

12) $5 - 3 = \underline{2}$

13) $5 - 5 = \underline{0}$

14) $3 - 2 = \underline{1}$


15) $3 - 3 = \underline{0}$


16) $5 - 1 = \underline{4}$


Respuestas1. 42. 53. 14. 35. 26. 57. 58. 59. 110. 311. 012. 213. 014. 115. 016. 4





Resuelve cada problema


1) $4 + 0 = \underline{\quad}$



2) $1 + 4 = \underline{\quad}$


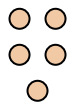
3) $1 + 0 = \underline{\quad}$



4) $2 + 1 = \underline{\quad}$



5) $2 + 0 = \underline{\quad}$


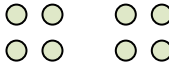
6) $4 + 1 = \underline{\quad}$


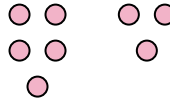
7) $3 + 2 = \underline{\quad}$


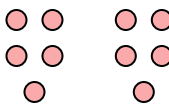
8) $5 + 0 = \underline{\quad}$


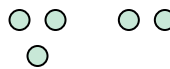
9) $1 - 0 = \underline{\quad}$



10) $4 - 1 = \underline{\quad}$


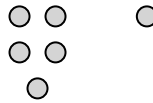
11) $4 - 4 = \underline{\quad}$


12) $5 - 3 = \underline{\quad}$


13) $5 - 5 = \underline{\quad}$


14) $3 - 2 = \underline{\quad}$


15) $3 - 3 = \underline{\quad}$


16) $5 - 1 = \underline{\quad}$


Respuestas

1. _____

2. _____

3. _____

4. _____

5. _____

6. _____

7. _____

8. _____

9. _____

10. _____

11. _____

12. _____

13. _____

14. _____

15. _____

16. _____