



Resuelve cada problema

1) $2 + 2 = \underline{\quad}$

2) $2 + 0 = \underline{\quad}$

3) $4 + 1 = \underline{\quad}$

4) $3 + 1 = \underline{\quad}$

5) $1 + 4 = \underline{\quad}$

6) $1 + 0 = \underline{\quad}$

7) $1 + 1 = \underline{\quad}$

8) $2 + 1 = \underline{\quad}$

9) $1 - 1 = \underline{\quad}$

10) $3 - 1 = \underline{\quad}$

11) $5 - 4 = \underline{\quad}$

12) $4 - 3 = \underline{\quad}$

13) $4 - 1 = \underline{\quad}$

14) $3 - 3 = \underline{\quad}$

15) $2 - 2 = \underline{\quad}$

16) $5 - 5 = \underline{\quad}$

Respuestas

1. _____

2. _____

3. _____

4. _____

5. _____

6. _____

7. _____

8. _____

9. _____

10. _____

11. _____

12. _____

13. _____

14. _____

15. _____

16. _____



Resuelve cada problema

1) $2 + 2 = \underline{4}$

2) $2 + 0 = \underline{2}$

3) $4 + 1 = \underline{5}$

4) $3 + 1 = \underline{4}$

5) $1 + 4 = \underline{5}$

6) $1 + 0 = \underline{1}$

7) $1 + 1 = \underline{2}$

8) $2 + 1 = \underline{3}$

9) $1 - 1 = \underline{0}$

10) $3 - 1 = \underline{2}$

11) $5 - 4 = \underline{1}$

12) $4 - 3 = \underline{1}$

13) $4 - 1 = \underline{3}$

14) $3 - 3 = \underline{0}$

15) $2 - 2 = \underline{0}$

16) $5 - 5 = \underline{0}$

Respuestas1. 42. 23. 54. 45. 56. 17. 28. 39. 010. 211. 112. 113. 314. 015. 016. 0



Resuelve cada problema

1) $2 + 2 = \underline{\quad}$

2) $2 + 0 = \underline{\quad}$

3) $4 + 1 = \underline{\quad}$

4) $3 + 1 = \underline{\quad}$

5) $1 + 4 = \underline{\quad}$

6) $1 + 0 = \underline{\quad}$

7) $1 + 1 = \underline{\quad}$

8) $2 + 1 = \underline{\quad}$

9) $1 - 1 = \underline{\quad}$

10) $3 - 1 = \underline{\quad}$

11) $5 - 4 = \underline{\quad}$

12) $4 - 3 = \underline{\quad}$

13) $4 - 1 = \underline{\quad}$

14) $3 - 3 = \underline{\quad}$

15) $2 - 2 = \underline{\quad}$

16) $5 - 5 = \underline{\quad}$

Respuestas

1. _____

2. _____

3. _____

4. _____

5. _____

6. _____

7. _____

8. _____

9. _____

10. _____

11. _____

12. _____

13. _____

14. _____

15. _____

16. _____



Resuelve cada problema

1) $4 + 0 = \underline{\quad}$

2) $3 + 2 = \underline{\quad}$

3) $2 + 1 = \underline{\quad}$

4) $1 + 0 = \underline{\quad}$

5) $2 + 3 = \underline{\quad}$

6) $3 + 0 = \underline{\quad}$

7) $2 + 2 = \underline{\quad}$

8) $4 + 1 = \underline{\quad}$

9) $2 - 2 = \underline{\quad}$

10) $4 - 2 = \underline{\quad}$

11) $5 - 3 = \underline{\quad}$

12) $3 - 2 = \underline{\quad}$

13) $3 - 1 = \underline{\quad}$

14) $4 - 4 = \underline{\quad}$

15) $1 - 1 = \underline{\quad}$

16) $3 - 3 = \underline{\quad}$

Respuestas

1. _____

2. _____

3. _____

4. _____

5. _____

6. _____

7. _____

8. _____

9. _____

10. _____

11. _____

12. _____

13. _____

14. _____

15. _____

16. _____



Resuelve cada problema

1) $4 + 0 = \underline{4}$

2) $3 + 2 = \underline{5}$

3) $2 + 1 = \underline{3}$

4) $1 + 0 = \underline{1}$

5) $2 + 3 = \underline{5}$

6) $3 + 0 = \underline{3}$

7) $2 + 2 = \underline{4}$

8) $4 + 1 = \underline{5}$

9) $2 - 2 = \underline{0}$

10) $4 - 2 = \underline{2}$

11) $5 - 3 = \underline{2}$

12) $3 - 2 = \underline{1}$

13) $3 - 1 = \underline{2}$

14) $4 - 4 = \underline{0}$

15) $1 - 1 = \underline{0}$

16) $3 - 3 = \underline{0}$


Respuestas1. 42. 53. 34. 15. 56. 37. 48. 59. 010. 211. 212. 113. 214. 015. 016. 0





Resuelve cada problema

Respuestas

1) $4 + 0 = \underline{\quad}$





2) $3 + 2 = \underline{\quad}$





1. _____

3) $2 + 1 = \underline{\quad}$






4) $1 + 0 = \underline{\quad}$




2. _____

5) $2 + 3 = \underline{\quad}$






6) $3 + 0 = \underline{\quad}$





3. _____

7) $2 + 2 = \underline{\quad}$






8) $4 + 1 = \underline{\quad}$






4. _____

9) $2 - 2 = \underline{\quad}$






10) $4 - 2 = \underline{\quad}$






5. _____

11) $5 - 3 = \underline{\quad}$






12) $3 - 2 = \underline{\quad}$






6. _____

13) $3 - 1 = \underline{\quad}$






14) $4 - 4 = \underline{\quad}$






7. _____

15) $1 - 1 = \underline{\quad}$

16) $3 - 3 = \underline{\quad}$

8. _____

9. _____

10. _____

11. _____

12. _____

13. _____

14. _____

15. _____

16. _____



Resuelve cada problema

1) $3 + 0 = \underline{\quad}$

2) $2 + 0 = \underline{\quad}$

3) $1 + 4 = \underline{\quad}$

4) $4 + 0 = \underline{\quad}$

5) $3 + 2 = \underline{\quad}$

6) $5 + 0 = \underline{\quad}$

7) $1 + 1 = \underline{\quad}$

8) $2 + 2 = \underline{\quad}$

9) $2 - 1 = \underline{\quad}$

10) $4 - 4 = \underline{\quad}$

11) $4 - 2 = \underline{\quad}$

12) $5 - 2 = \underline{\quad}$

13) $3 - 1 = \underline{\quad}$

14) $5 - 3 = \underline{\quad}$

15) $2 - 2 = \underline{\quad}$

16) $1 - 1 = \underline{\quad}$

Respuestas

1. _____

2. _____

3. _____

4. _____

5. _____

6. _____

7. _____

8. _____

9. _____

10. _____

11. _____

12. _____

13. _____

14. _____

15. _____

16. _____



Resuelve cada problema

1) $3 + 0 = \underline{3}$

2) $2 + 0 = \underline{2}$

3) $1 + 4 = \underline{5}$

4) $4 + 0 = \underline{4}$

5) $3 + 2 = \underline{5}$

6) $5 + 0 = \underline{5}$

7) $1 + 1 = \underline{2}$

8) $2 + 2 = \underline{4}$

9) $2 - 1 = \underline{1}$

10) $4 - 4 = \underline{0}$

11) $4 - 2 = \underline{2}$

12) $5 - 2 = \underline{3}$

13) $3 - 1 = \underline{2}$

14) $5 - 3 = \underline{2}$

15) $2 - 2 = \underline{0}$


16) $1 - 1 = \underline{0}$

Respuestas1. 32. 23. 54. 45. 56. 57. 28. 49. 110. 011. 212. 313. 214. 215. 016. 0




Resuelve cada problema


1) $3 + 0 = \underline{\quad}$




2) $2 + 0 = \underline{\quad}$




3) $1 + 4 = \underline{\quad}$




4) $4 + 0 = \underline{\quad}$




5) $3 + 2 = \underline{\quad}$




6) $5 + 0 = \underline{\quad}$




7) $1 + 1 = \underline{\quad}$



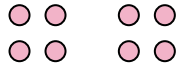
8) $2 + 2 = \underline{\quad}$



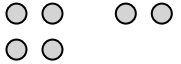
9) $2 - 1 = \underline{\quad}$



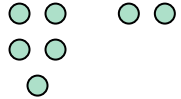
10) $4 - 4 = \underline{\quad}$



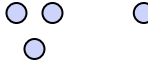
11) $4 - 2 = \underline{\quad}$



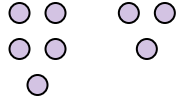
12) $5 - 2 = \underline{\quad}$




13) $3 - 1 = \underline{\quad}$




14) $5 - 3 = \underline{\quad}$



15) $2 - 2 = \underline{\quad}$



16) $1 - 1 = \underline{\quad}$



Respuestas

1. _____

2. _____

3. _____

4. _____

5. _____

6. _____

7. _____

8. _____

9. _____

10. _____

11. _____

12. _____

13. _____

14. _____

15. _____

16. _____



Resuelve cada problema

1) $1 + 4 = \underline{\quad}$

2) $1 + 0 = \underline{\quad}$

3) $2 + 1 = \underline{\quad}$

4) $3 + 2 = \underline{\quad}$

5) $1 + 2 = \underline{\quad}$

6) $5 + 0 = \underline{\quad}$

7) $3 + 1 = \underline{\quad}$

8) $4 + 0 = \underline{\quad}$

9) $1 - 1 = \underline{\quad}$

10) $4 - 4 = \underline{\quad}$

11) $2 - 2 = \underline{\quad}$

12) $3 - 1 = \underline{\quad}$

13) $2 - 1 = \underline{\quad}$

14) $5 - 1 = \underline{\quad}$

15) $5 - 4 = \underline{\quad}$

16) $3 - 2 = \underline{\quad}$

Respuestas

1. _____

2. _____

3. _____

4. _____

5. _____

6. _____

7. _____

8. _____

9. _____

10. _____

11. _____

12. _____

13. _____

14. _____

15. _____

16. _____



Resuelve cada problema

1) $1 + 4 = \underline{5}$

2) $1 + 0 = \underline{1}$

3) $2 + 1 = \underline{3}$

4) $3 + 2 = \underline{5}$

5) $1 + 2 = \underline{3}$

6) $5 + 0 = \underline{5}$

7) $3 + 1 = \underline{4}$

8) $4 + 0 = \underline{4}$

9) $1 - 1 = \underline{0}$

10) $4 - 4 = \underline{0}$

11) $2 - 2 = \underline{0}$

12) $3 - 1 = \underline{2}$

13) $2 - 1 = \underline{1}$

14) $5 - 1 = \underline{4}$

15) $5 - 4 = \underline{1}$

16) $3 - 2 = \underline{1}$

Respuestas1. 52. 13. 34. 55. 36. 57. 48. 49. 010. 011. 012. 213. 114. 415. 116. 1



Resuelve cada problema

1) 1 + 4 = ____
○ ○ ○ ○ ○

2) 1 + 0 = ____
○

3) 2 + 1 = ____
○ ○ ○

4) 3 + 2 = ____
○ ○ ○ ○ ○
○

5) 1 + 2 = ____
○ ○ ○

6) 5 + 0 = ____
○ ○ ○ ○ ○

7) 3 + 1 = ____
○ ○ ○ ○

8) 4 + 0 = ____
○ ○ ○ ○

9) 1 - 1 = ____
○ ○

10) 4 - 4 = ____
○ ○ ○ ○ ○ ○ ○ ○

11) 2 - 2 = ____
○ ○ ○ ○

12) 3 - 1 = ____
○ ○ ○ ○

13) 2 - 1 = ____
○ ○ ○

14) 5 - 1 = ____
○ ○ ○ ○ ○ ○

15) 5 - 4 = ____
○ ○ ○ ○ ○ ○ ○ ○ ○
○

16) 3 - 2 = ____
○ ○ ○ ○ ○

Respuestas

1. _____

2. _____

3. _____

4. _____

5. _____

6. _____

7. _____

8. _____

9. _____

10. _____

11. _____

12. _____

13. _____

14. _____

15. _____

16. _____



Resuelve cada problema

1) $3 + 1 = \underline{\quad}$

2) $3 + 0 = \underline{\quad}$

3) $2 + 1 = \underline{\quad}$

4) $1 + 4 = \underline{\quad}$

5) $3 + 2 = \underline{\quad}$

6) $2 + 3 = \underline{\quad}$

7) $1 + 2 = \underline{\quad}$

8) $4 + 1 = \underline{\quad}$

9) $4 - 1 = \underline{\quad}$

10) $3 - 3 = \underline{\quad}$

11) $5 - 2 = \underline{\quad}$

12) $3 - 2 = \underline{\quad}$

13) $2 - 2 = \underline{\quad}$

14) $3 - 1 = \underline{\quad}$

15) $1 - 0 = \underline{\quad}$

16) $5 - 3 = \underline{\quad}$

Respuestas

1. _____

2. _____

3. _____

4. _____

5. _____

6. _____

7. _____

8. _____

9. _____

10. _____

11. _____

12. _____

13. _____

14. _____

15. _____

16. _____



Resuelve cada problema

1) $3 + 1 = \underline{4}$

2) $3 + 0 = \underline{3}$

3) $2 + 1 = \underline{3}$

4) $1 + 4 = \underline{5}$

5) $3 + 2 = \underline{5}$

6) $2 + 3 = \underline{5}$

7) $1 + 2 = \underline{3}$

8) $4 + 1 = \underline{5}$

9) $4 - 1 = \underline{3}$

10) $3 - 3 = \underline{0}$

11) $5 - 2 = \underline{3}$

12) $3 - 2 = \underline{1}$

13) $2 - 2 = \underline{0}$

14) $3 - 1 = \underline{2}$

15) $1 - 0 = \underline{1}$

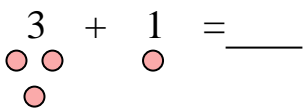
16) $5 - 3 = \underline{2}$

Respuestas1. 42. 33. 34. 55. 56. 57. 38. 59. 310. 011. 312. 113. 014. 215. 116. 2

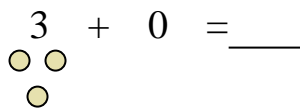


Resuelve cada problema

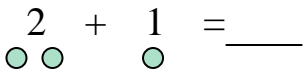
1) $3 + 1 = \underline{\quad}$



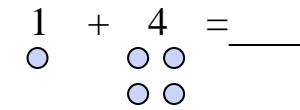
2) $3 + 0 = \underline{\quad}$



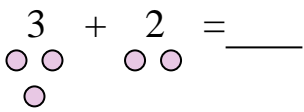
3) $2 + 1 = \underline{\quad}$



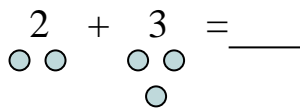
4) $1 + 4 = \underline{\quad}$



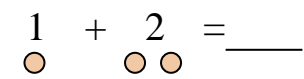
5) $3 + 2 = \underline{\quad}$



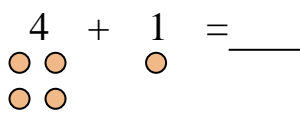
6) $2 + 3 = \underline{\quad}$



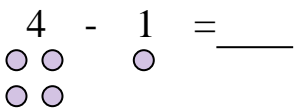
7) $1 + 2 = \underline{\quad}$



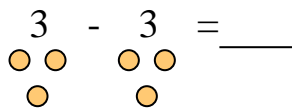
8) $4 + 1 = \underline{\quad}$



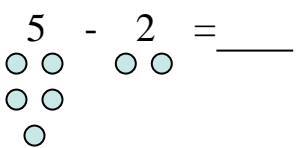
9) $4 - 1 = \underline{\quad}$



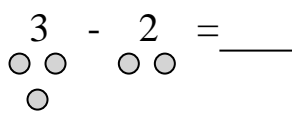
10) $3 - 3 = \underline{\quad}$



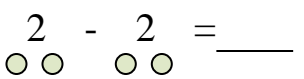
11) $5 - 2 = \underline{\quad}$



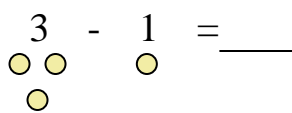
12) $3 - 2 = \underline{\quad}$



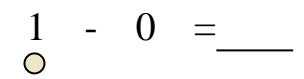
13) $2 - 2 = \underline{\quad}$



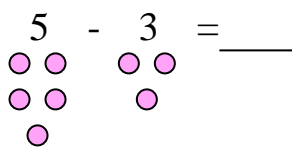
14) $3 - 1 = \underline{\quad}$



15) $1 - 0 = \underline{\quad}$



16) $5 - 3 = \underline{\quad}$



Respuestas

1. _____

2. _____

3. _____

4. _____

5. _____

6. _____

7. _____

8. _____

9. _____

10. _____

11. _____

12. _____

13. _____

14. _____

15. _____

16. _____



Resuelve cada problema

1) $3 + 0 = \underline{\quad}$

2) $3 + 1 = \underline{\quad}$

3) $2 + 1 = \underline{\quad}$

4) $2 + 3 = \underline{\quad}$

5) $1 + 4 = \underline{\quad}$

6) $4 + 0 = \underline{\quad}$

7) $2 + 2 = \underline{\quad}$

8) $1 + 3 = \underline{\quad}$

9) $5 - 3 = \underline{\quad}$

10) $3 - 1 = \underline{\quad}$

11) $2 - 2 = \underline{\quad}$

12) $4 - 4 = \underline{\quad}$

13) $1 - 0 = \underline{\quad}$

14) $5 - 4 = \underline{\quad}$

15) $3 - 2 = \underline{\quad}$

16) $4 - 1 = \underline{\quad}$

Respuestas

1. _____

2. _____

3. _____

4. _____

5. _____

6. _____

7. _____

8. _____

9. _____

10. _____

11. _____

12. _____

13. _____

14. _____

15. _____

16. _____



Resuelve cada problema

1) $3 + 0 = \underline{3}$

2) $3 + 1 = \underline{4}$

3) $2 + 1 = \underline{3}$

4) $2 + 3 = \underline{5}$

5) $1 + 4 = \underline{5}$

6) $4 + 0 = \underline{4}$

7) $2 + 2 = \underline{4}$

8) $1 + 3 = \underline{4}$

9) $5 - 3 = \underline{2}$

10) $3 - 1 = \underline{2}$

11) $2 - 2 = \underline{0}$

12) $4 - 4 = \underline{0}$

13) $1 - 0 = \underline{1}$

14) $5 - 4 = \underline{1}$

15) $3 - 2 = \underline{1}$

16) $4 - 1 = \underline{3}$

Respuestas1. 32. 43. 34. 55. 56. 47. 48. 49. 210. 211. 012. 013. 114. 115. 116. 3



Resuelve cada problema

1) $3 + 0 = \underline{\quad}$

2) $3 + 1 = \underline{\quad}$

3) $2 + 1 = \underline{\quad}$

4) $2 + 3 = \underline{\quad}$

5) $1 + 4 = \underline{\quad}$

6) $4 + 0 = \underline{\quad}$

7) $2 + 2 = \underline{\quad}$

8) $1 + 3 = \underline{\quad}$

9) $5 - 3 = \underline{\quad}$

10) $3 - 1 = \underline{\quad}$

11) $2 - 2 = \underline{\quad}$

12) $4 - 4 = \underline{\quad}$

13) $1 - 0 = \underline{\quad}$

14) $5 - 4 = \underline{\quad}$

15) $3 - 2 = \underline{\quad}$

16) $4 - 1 = \underline{\quad}$

Respuestas

1. _____

2. _____

3. _____

4. _____

5. _____

6. _____

7. _____

8. _____

9. _____

10. _____

11. _____

12. _____

13. _____

14. _____

15. _____

16. _____



Resuelve cada problema

1) $1 + 2 = \underline{\quad}$

2) $2 + 3 = \underline{\quad}$

3) $1 + 0 = \underline{\quad}$

4) $4 + 0 = \underline{\quad}$

5) $2 + 1 = \underline{\quad}$

6) $1 + 1 = \underline{\quad}$

7) $4 + 1 = \underline{\quad}$

8) $2 + 0 = \underline{\quad}$

9) $5 - 1 = \underline{\quad}$

10) $4 - 4 = \underline{\quad}$

11) $4 - 2 = \underline{\quad}$

12) $3 - 3 = \underline{\quad}$

13) $5 - 5 = \underline{\quad}$

14) $2 - 1 = \underline{\quad}$

15) $5 - 3 = \underline{\quad}$

16) $1 - 0 = \underline{\quad}$

Respuestas

1. _____

2. _____

3. _____

4. _____

5. _____

6. _____

7. _____

8. _____

9. _____

10. _____

11. _____

12. _____

13. _____

14. _____

15. _____

16. _____



Resuelve cada problema

1) $1 + 2 = \underline{3}$

2) $2 + 3 = \underline{5}$

3) $1 + 0 = \underline{1}$

4) $4 + 0 = \underline{4}$

5) $2 + 1 = \underline{3}$

6) $1 + 1 = \underline{2}$

7) $4 + 1 = \underline{5}$

8) $2 + 0 = \underline{2}$

9) $5 - 1 = \underline{4}$

10) $4 - 4 = \underline{0}$

11) $4 - 2 = \underline{2}$

12) $3 - 3 = \underline{0}$

13) $5 - 5 = \underline{0}$

14) $2 - 1 = \underline{1}$



15) $5 - 3 = \underline{2}$



16) $1 - 0 = \underline{1}$


Respuestas1. 32. 53. 14. 45. 36. 27. 58. 29. 410. 011. 212. 013. 014. 115. 216. 1






Resuelve cada problema



1) 1 + 2 = _____
 + 



2) 2 + 3 = _____
 + 


3) 1 + 0 = _____




4) 4 + 0 = _____




5) 2 + 1 = _____
 + 



6) 1 + 1 = _____
 + 



7) 4 + 1 = _____
 + 



8) 2 + 0 = _____


9) 5 - 1 = _____
 - 



10) 4 - 4 = _____
 - 


11) 4 - 2 = _____
 - 

12) 3 - 3 = _____
 - 

13) 5 - 5 = _____
 - 

14) 2 - 1 = _____
 - 

15) 5 - 3 = _____
 - 

16) 1 - 0 = _____


Respuestas

1. _____

2. _____

3. _____

4. _____

5. _____

6. _____

7. _____

8. _____

9. _____

10. _____

11. _____

12. _____

13. _____

14. _____

15. _____

16. _____



Resuelve cada problema

1) $4 + 0 = \underline{\quad}$

2) $1 + 4 = \underline{\quad}$

3) $1 + 0 = \underline{\quad}$

4) $2 + 1 = \underline{\quad}$

5) $2 + 0 = \underline{\quad}$

6) $4 + 1 = \underline{\quad}$

7) $3 + 2 = \underline{\quad}$

8) $5 + 0 = \underline{\quad}$

9) $1 - 0 = \underline{\quad}$

10) $4 - 1 = \underline{\quad}$

11) $4 - 4 = \underline{\quad}$

12) $5 - 3 = \underline{\quad}$

13) $5 - 5 = \underline{\quad}$

14) $3 - 2 = \underline{\quad}$

15) $3 - 3 = \underline{\quad}$

16) $5 - 1 = \underline{\quad}$

Respuestas

1. _____

2. _____

3. _____

4. _____

5. _____

6. _____

7. _____

8. _____

9. _____

10. _____

11. _____

12. _____

13. _____

14. _____

15. _____

16. _____



Resuelve cada problema

1) $4 + 0 = \underline{4}$

2) $1 + 4 = \underline{5}$

3) $1 + 0 = \underline{1}$

4) $2 + 1 = \underline{3}$

5) $2 + 0 = \underline{2}$

6) $4 + 1 = \underline{5}$

7) $3 + 2 = \underline{5}$

8) $5 + 0 = \underline{5}$

9) $1 - 0 = \underline{1}$

10) $4 - 1 = \underline{3}$

11) $4 - 4 = \underline{0}$

12) $5 - 3 = \underline{2}$

13) $5 - 5 = \underline{0}$

14) $3 - 2 = \underline{1}$


15) $3 - 3 = \underline{0}$


16) $5 - 1 = \underline{4}$


Respuestas1. 42. 53. 14. 35. 26. 57. 58. 59. 110. 311. 012. 213. 014. 115. 016. 4





Resuelve cada problema


1) $4 + 0 = \underline{\quad}$



2) $1 + 4 = \underline{\quad}$


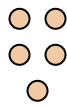
3) $1 + 0 = \underline{\quad}$



4) $2 + 1 = \underline{\quad}$



5) $2 + 0 = \underline{\quad}$


6) $4 + 1 = \underline{\quad}$


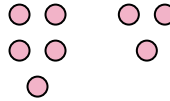
7) $3 + 2 = \underline{\quad}$


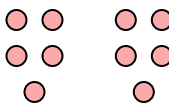
8) $5 + 0 = \underline{\quad}$


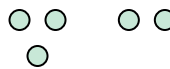
9) $1 - 0 = \underline{\quad}$



10) $4 - 1 = \underline{\quad}$


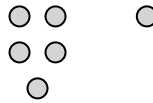
11) $4 - 4 = \underline{\quad}$


12) $5 - 3 = \underline{\quad}$


13) $5 - 5 = \underline{\quad}$


14) $3 - 2 = \underline{\quad}$


15) $3 - 3 = \underline{\quad}$


16) $5 - 1 = \underline{\quad}$


Respuestas

1. _____

2. _____

3. _____

4. _____

5. _____

6. _____

7. _____

8. _____

9. _____

10. _____

11. _____

12. _____

13. _____

14. _____

15. _____

16. _____



Resuelve cada problema

1) $4 + 1 = \underline{\quad}$

2) $1 + 1 = \underline{\quad}$

3) $2 + 0 = \underline{\quad}$

4) $2 + 3 = \underline{\quad}$

5) $3 + 1 = \underline{\quad}$

6) $5 + 0 = \underline{\quad}$

7) $2 + 1 = \underline{\quad}$

8) $4 + 0 = \underline{\quad}$

9) $4 - 2 = \underline{\quad}$

10) $4 - 4 = \underline{\quad}$

11) $3 - 2 = \underline{\quad}$

12) $5 - 1 = \underline{\quad}$

13) $2 - 2 = \underline{\quad}$

14) $4 - 3 = \underline{\quad}$

15) $3 - 1 = \underline{\quad}$

16) $1 - 1 = \underline{\quad}$

Respuestas

1. _____

2. _____

3. _____

4. _____

5. _____

6. _____

7. _____

8. _____

9. _____

10. _____

11. _____

12. _____

13. _____

14. _____

15. _____

16. _____



Resuelve cada problema

1) $4 + 1 = \underline{5}$

2) $1 + 1 = \underline{2}$

3) $2 + 0 = \underline{2}$

4) $2 + 3 = \underline{5}$

5) $3 + 1 = \underline{4}$

6) $5 + 0 = \underline{5}$

7) $2 + 1 = \underline{3}$

8) $4 + 0 = \underline{4}$

9) $4 - 2 = \underline{2}$

10) $4 - 4 = \underline{0}$

11) $3 - 2 = \underline{1}$

12) $5 - 1 = \underline{4}$

13) $2 - 2 = \underline{0}$

14) $4 - 3 = \underline{1}$


15) $3 - 1 = \underline{2}$


16) $1 - 1 = \underline{0}$


Respuestas1. 52. 23. 24. 55. 46. 57. 38. 49. 210. 011. 112. 413. 014. 115. 216. 0





Resuelve cada problema


1) $4 + 1 = \underline{\quad}$


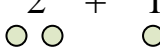
2) $1 + 1 = \underline{\quad}$



3) $2 + 0 = \underline{\quad}$



4) $2 + 3 = \underline{\quad}$


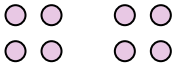
5) $3 + 1 = \underline{\quad}$



6) $5 + 0 = \underline{\quad}$


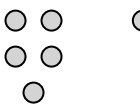
7) $2 + 1 = \underline{\quad}$



8) $4 + 0 = \underline{\quad}$



9) $4 - 2 = \underline{\quad}$



10) $4 - 4 = \underline{\quad}$


11) $3 - 2 = \underline{\quad}$


12) $5 - 1 = \underline{\quad}$


13) $2 - 2 = \underline{\quad}$


14) $4 - 3 = \underline{\quad}$


15) $3 - 1 = \underline{\quad}$


16) $1 - 1 = \underline{\quad}$


Respuestas

1. _____

2. _____

3. _____

4. _____

5. _____

6. _____

7. _____

8. _____

9. _____

10. _____

11. _____

12. _____

13. _____

14. _____

15. _____

16. _____



Resuelve cada problema

1) $4 + 0 = \underline{\quad}$

2) $3 + 0 = \underline{\quad}$

3) $3 + 2 = \underline{\quad}$

4) $2 + 0 = \underline{\quad}$

5) $2 + 2 = \underline{\quad}$

6) $1 + 3 = \underline{\quad}$

7) $2 + 3 = \underline{\quad}$

8) $5 + 0 = \underline{\quad}$

9) $4 - 4 = \underline{\quad}$

10) $5 - 2 = \underline{\quad}$

11) $2 - 1 = \underline{\quad}$

12) $5 - 5 = \underline{\quad}$

13) $1 - 1 = \underline{\quad}$

14) $3 - 1 = \underline{\quad}$

15) $5 - 3 = \underline{\quad}$

16) $3 - 2 = \underline{\quad}$

Respuestas

1. _____

2. _____

3. _____

4. _____

5. _____

6. _____

7. _____

8. _____

9. _____

10. _____

11. _____

12. _____

13. _____

14. _____

15. _____

16. _____



Resuelve cada problema

1) $4 + 0 = \underline{4}$

2) $3 + 0 = \underline{3}$

3) $3 + 2 = \underline{5}$

4) $2 + 0 = \underline{2}$

5) $2 + 2 = \underline{4}$

6) $1 + 3 = \underline{4}$

7) $2 + 3 = \underline{5}$

8) $5 + 0 = \underline{5}$

9) $4 - 4 = \underline{0}$

10) $5 - 2 = \underline{3}$

11) $2 - 1 = \underline{1}$

12) $5 - 5 = \underline{0}$

13) $1 - 1 = \underline{0}$

14) $3 - 1 = \underline{2}$


15) $5 - 3 = \underline{2}$


16) $3 - 2 = \underline{1}$



Respuestas1. 42. 33. 54. 25. 46. 47. 58. 59. 010. 311. 112. 013. 014. 215. 216. 1






Resuelve cada problema



1) $4 + 0 = \underline{\quad}$




2) $3 + 0 = \underline{\quad}$



3) $3 + 2 = \underline{\quad}$





4) $2 + 0 = \underline{\quad}$




5) $2 + 2 = \underline{\quad}$





6) $1 + 3 = \underline{\quad}$




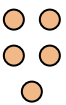
7) $2 + 3 = \underline{\quad}$





8) $5 + 0 = \underline{\quad}$




9) $4 - 4 = \underline{\quad}$





10) $5 - 2 = \underline{\quad}$





11) $2 - 1 = \underline{\quad}$



12) $5 - 5 = \underline{\quad}$



13) $1 - 1 = \underline{\quad}$



14) $3 - 1 = \underline{\quad}$



15) $5 - 3 = \underline{\quad}$



16) $3 - 2 = \underline{\quad}$



Respuestas

1. _____

2. _____

3. _____

4. _____

5. _____

6. _____

7. _____

8. _____

9. _____

10. _____

11. _____

12. _____

13. _____

14. _____

15. _____

16. _____