

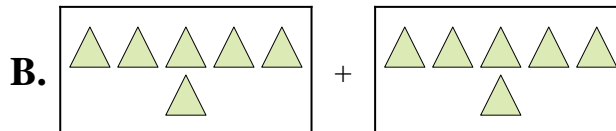


Iguala cada ecuación de suma a su equivalente visual.

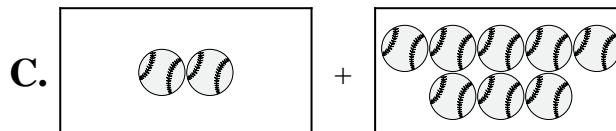
1) $3 + 3$



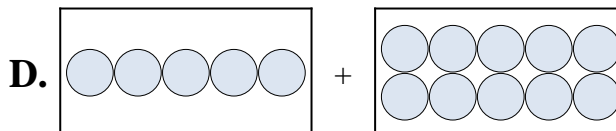
2) $6 + 6$



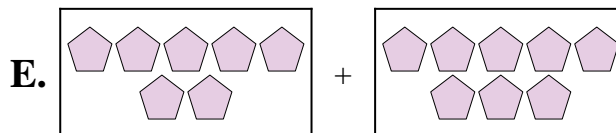
3) $5 + 10$



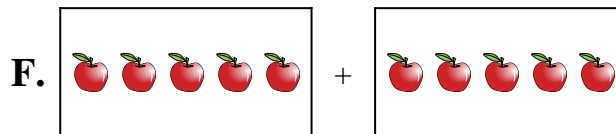
4) $5 + 5$



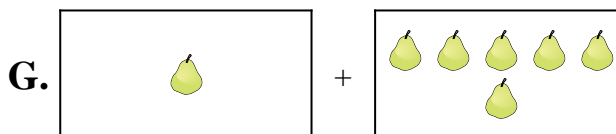
5) $1 + 6$



6) $1 + 2$



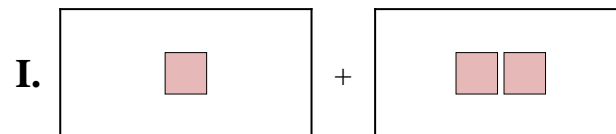
7) $2 + 8$



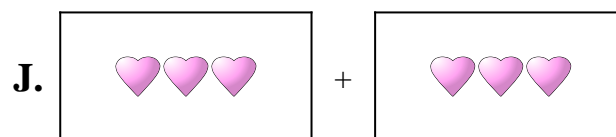
8) $7 + 8$



9) $9 + 3$



10) $7 + 3$



Respuestas

1. _____

2. _____

3. _____

4. _____

5. _____

6. _____

7. _____

8. _____

9. _____

10. _____

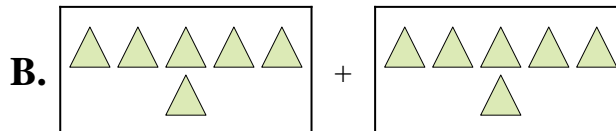


Iguala cada ecuación de suma a su equivalente visual.

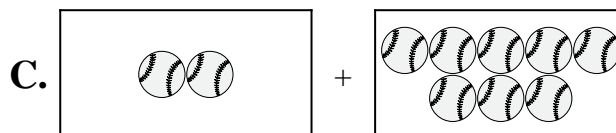
1) $3 + 3$



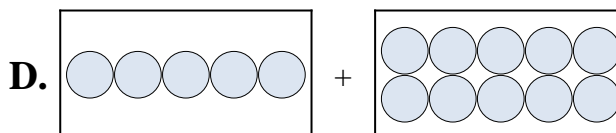
2) $6 + 6$



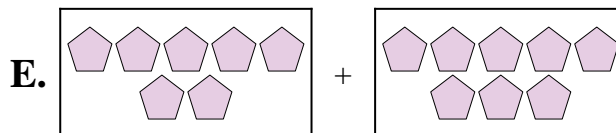
3) $5 + 10$



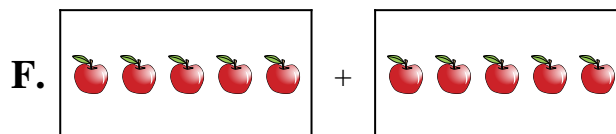
4) $5 + 5$



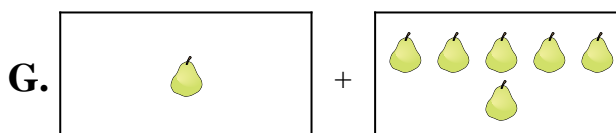
5) $1 + 6$




6) $1 + 2$



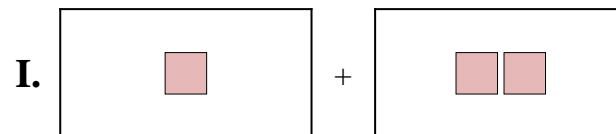
7) $2 + 8$



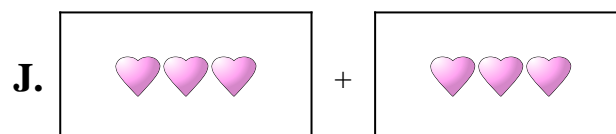
8) $7 + 8$



9) $9 + 3$



10) $7 + 3$



Respuestas

1. **J**

2. **B**

3. **D**

4. **F**

5. **G**

6. **I**

7. **C**

8. **E**

9. **H**

10. **A**