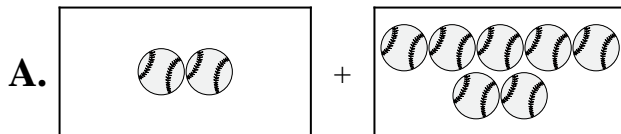


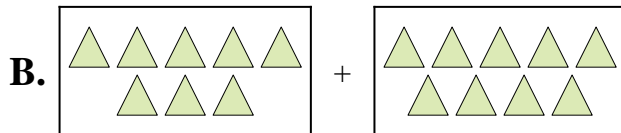


Iguala cada ecuación de suma a su equivalente visual.

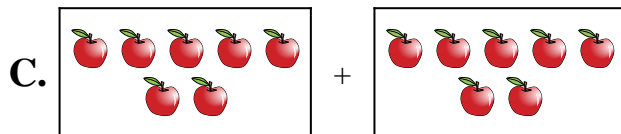
1) $3 + 7$



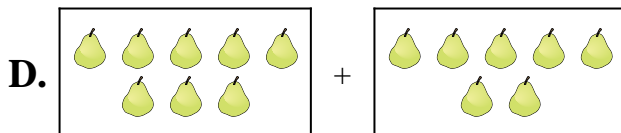
2) $8 + 9$



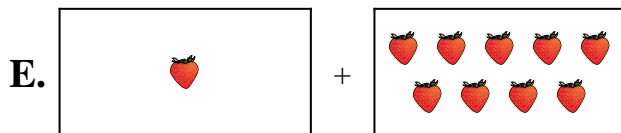
3) $7 + 7$



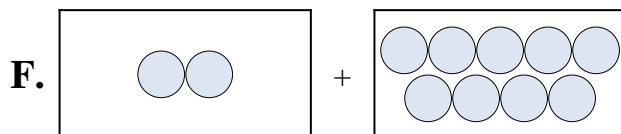
4) $1 + 1$



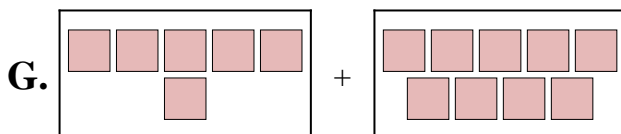
5) $1 + 9$



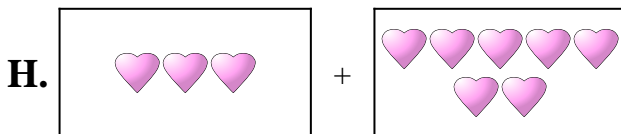
6) $2 + 9$



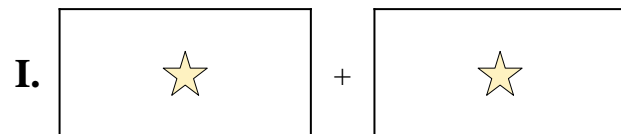
7) $6 + 9$



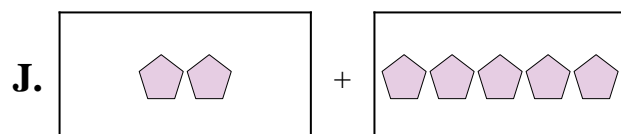
8) $2 + 5$



9) $2 + 7$



10) $8 + 7$



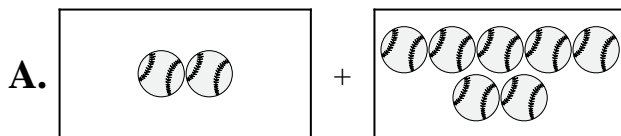
Respuestas

1. _____
2. _____
3. _____
4. _____
5. _____
6. _____
7. _____
8. _____
9. _____
10. _____

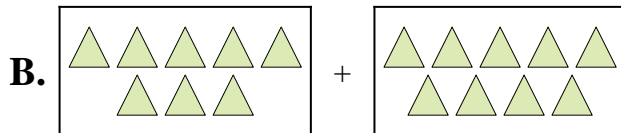


Iguala cada ecuación de suma a su equivalente visual.

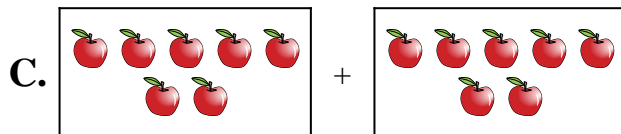
1) $3 + 7$



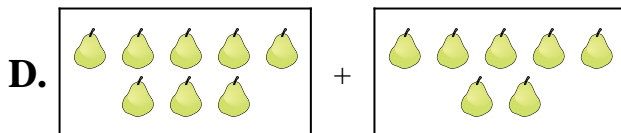
2) $8 + 9$



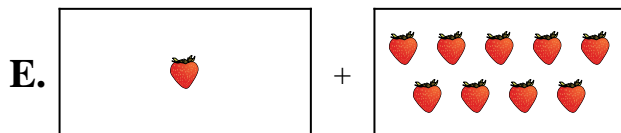
3) $7 + 7$



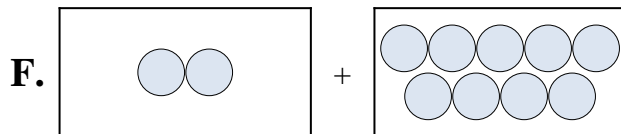
4) $1 + 1$



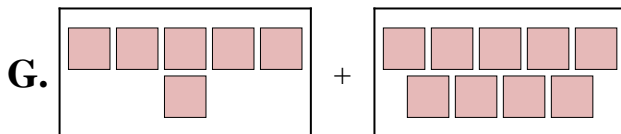
5) $1 + 9$



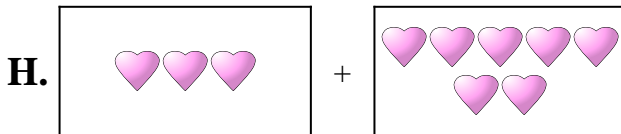
6) $2 + 9$



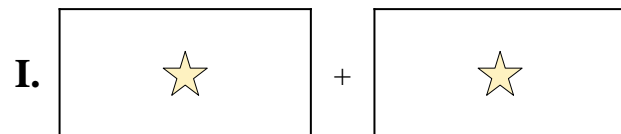
7) $6 + 9$



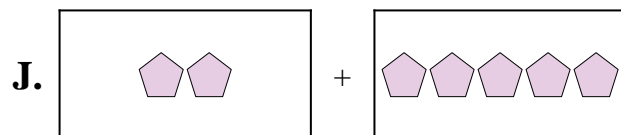
8) $2 + 5$



9) $2 + 7$



10) $8 + 7$



Respuestas

1. **H**

2. **B**

3. **C**

4. **I**

5. **E**

6. **F**

7. **G**

8. **J**

9. **A**

10. **D**