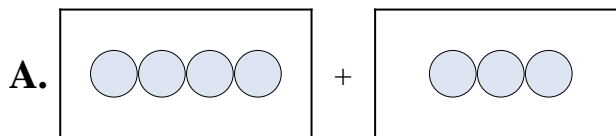




Iguala cada ecuación de suma a su equivalente visual.

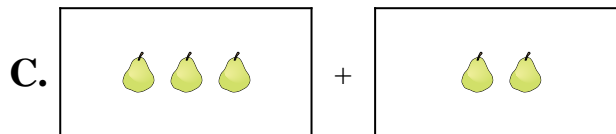
1) $10 + 9$



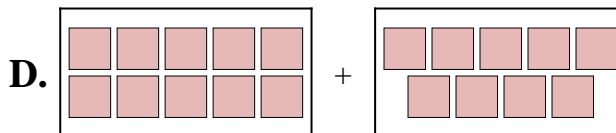
2) $4 + 8$



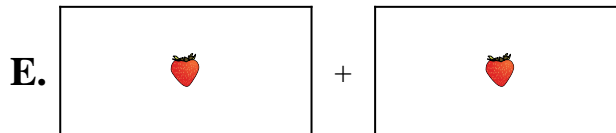
3) $3 + 2$



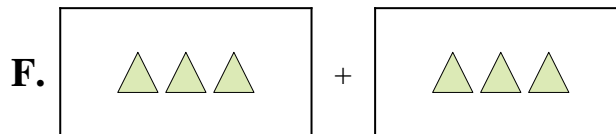
4) $2 + 4$



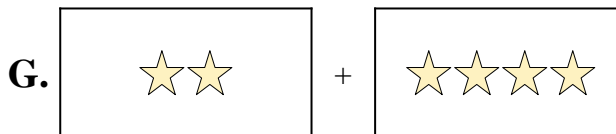
5) $4 + 3$



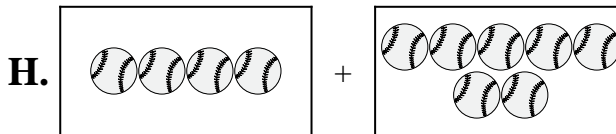
6) $3 + 3$



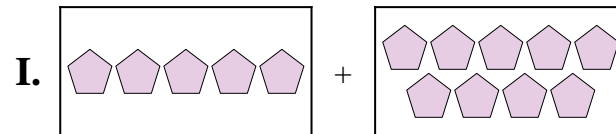
7) $4 + 7$



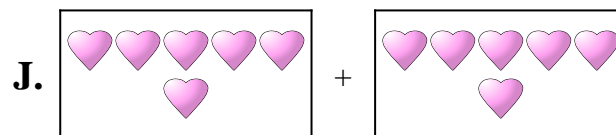
8) $5 + 9$



9) $6 + 6$



10) $1 + 1$



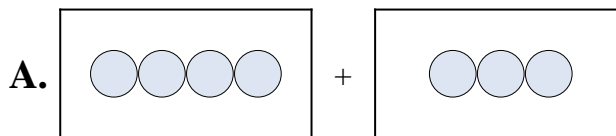
Respuestas

1. _____
2. _____
3. _____
4. _____
5. _____
6. _____
7. _____
8. _____
9. _____
10. _____



Iguala cada ecuación de suma a su equivalente visual.

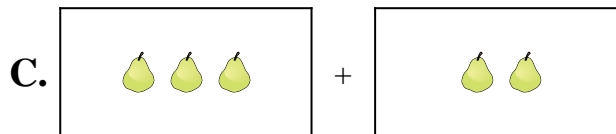
1) $10 + 9$



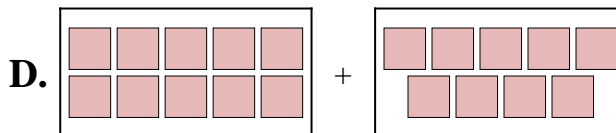
2) $4 + 8$



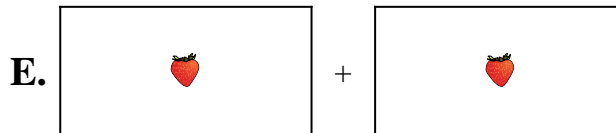
3) $3 + 2$



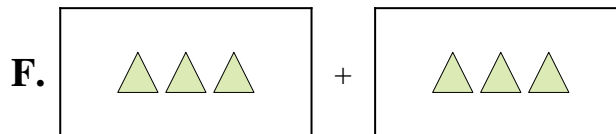
4) $2 + 4$



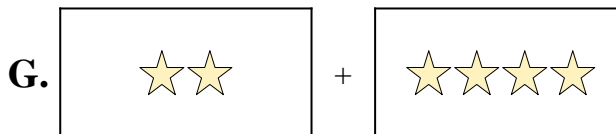
5) $4 + 3$



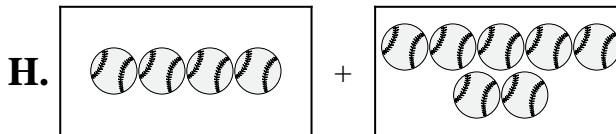
6) $3 + 3$



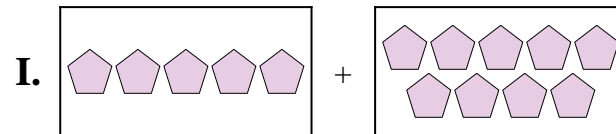
7) $4 + 7$



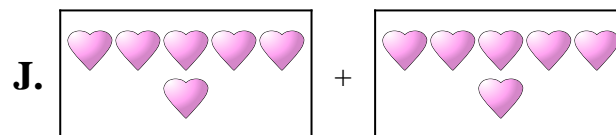
8) $5 + 9$



9) $6 + 6$



10) $1 + 1$



Respuestas

1. **D**

2. **B**

3. **C**

4. **G**

5. **A**

6. **F**

7. **H**

8. **I**

9. **J**

10. **E**