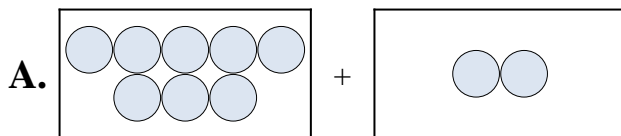


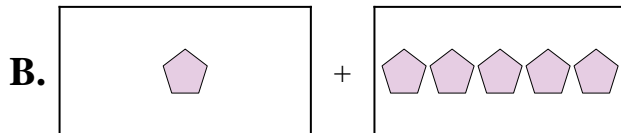


Iguala cada ecuación de suma a su equivalente visual.

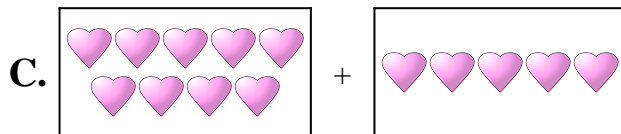
1) $8 + 2$



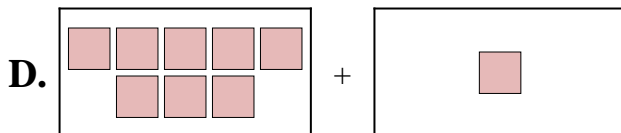
2) $8 + 1$



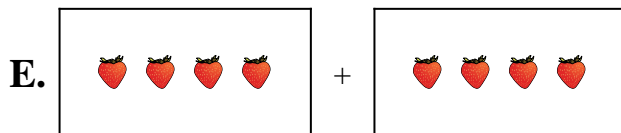
3) $9 + 2$



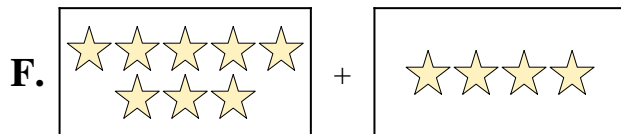
4) $1 + 5$




5) $4 + 4$



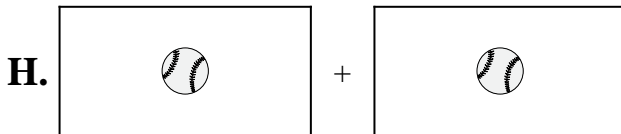
6) $9 + 5$



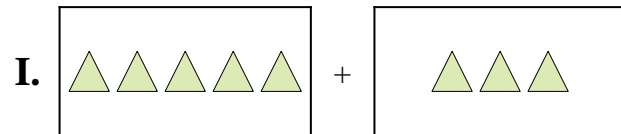
7) $1 + 1$



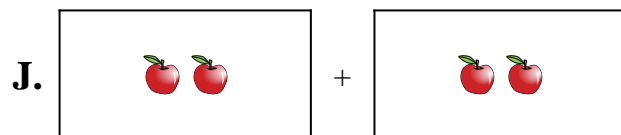
8) $5 + 3$



9) $2 + 2$



10) $8 + 4$



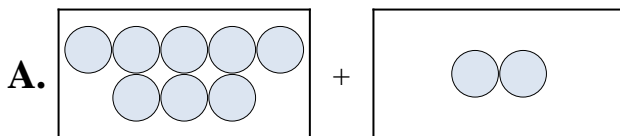
Respuestas

1. _____
2. _____
3. _____
4. _____
5. _____
6. _____
7. _____
8. _____
9. _____
10. _____

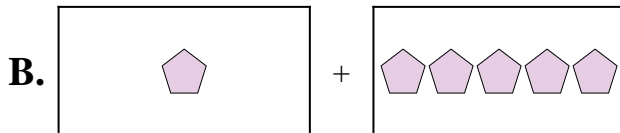


Iguala cada ecuación de suma a su equivalente visual.

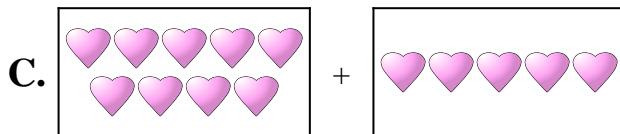
1) $8 + 2$



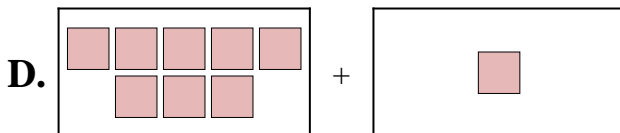
2) $8 + 1$



3) $9 + 2$



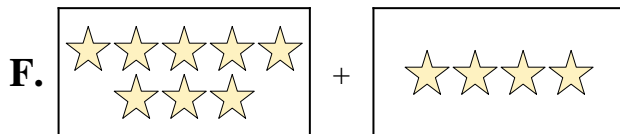
4) $1 + 5$




5) $4 + 4$



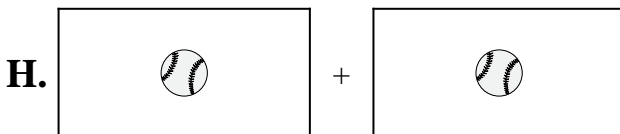
6) $9 + 5$



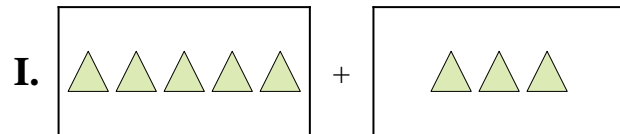
7) $1 + 1$



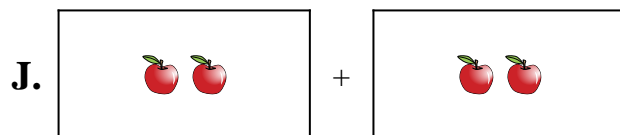
8) $5 + 3$



9) $2 + 2$



10) $8 + 4$



Respuestas

1. **A**

2. **D**

3. **G**

4. **B**

5. **E**

6. **C**

7. **H**

8. **I**

9. **J**

10. **F**