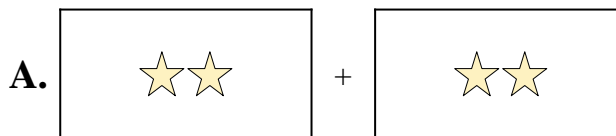


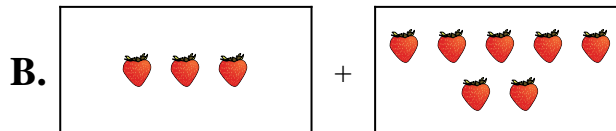


Iguala cada ecuación de suma a su equivalente visual.

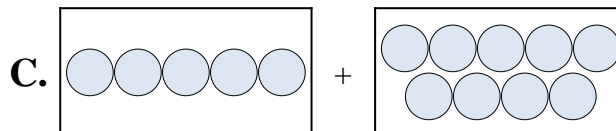
1) $2 + 2$



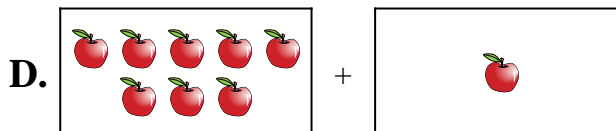
2) $2 + 6$



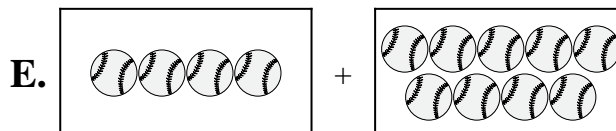
3) $5 + 9$




4) $8 + 1$



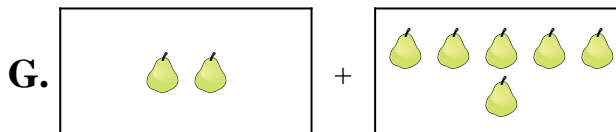
5) $6 + 5$



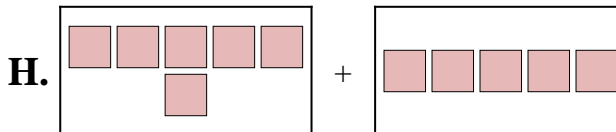
6) $10 + 6$



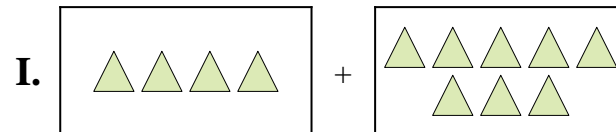
7) $4 + 9$



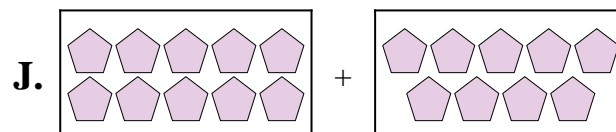
8) $4 + 8$



9) $3 + 7$



10) $10 + 9$



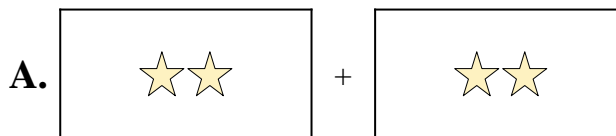
Respuestas

1. _____
2. _____
3. _____
4. _____
5. _____
6. _____
7. _____
8. _____
9. _____
10. _____

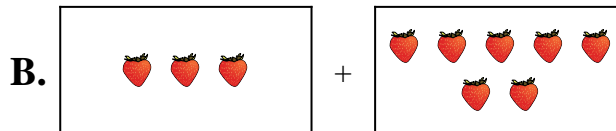


Iguala cada ecuación de suma a su equivalente visual.

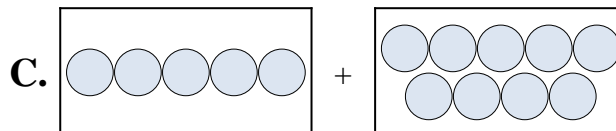
1) $2 + 2$



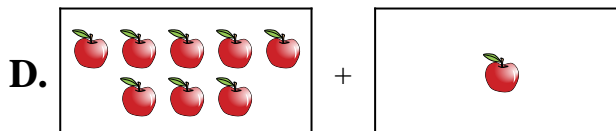
2) $2 + 6$



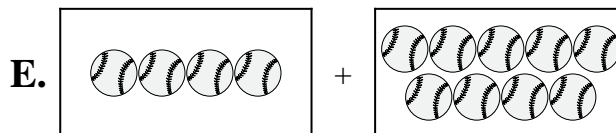
3) $5 + 9$




4) $8 + 1$



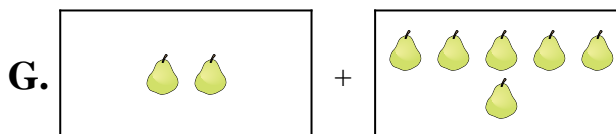
5) $6 + 5$



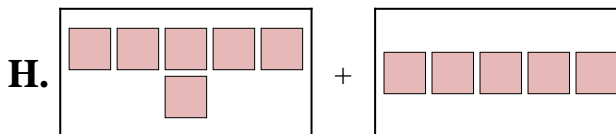
6) $10 + 6$



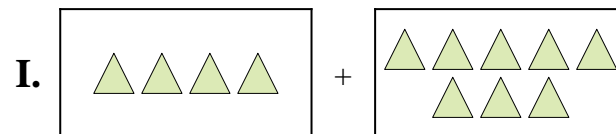
7) $4 + 9$



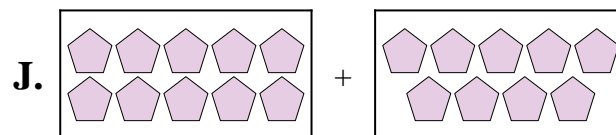
8) $4 + 8$



9) $3 + 7$



10) $10 + 9$



Respuestas

1. **A**

2. **G**

3. **C**

4. **D**

5. **H**

6. **F**

7. **E**

8. **I**

9. **B**

10. **J**