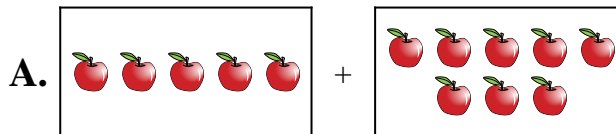


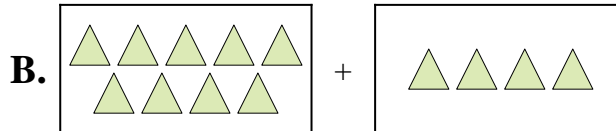


Iguala cada ecuación de suma a su equivalente visual.

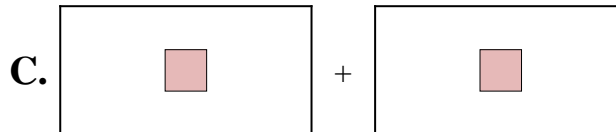
1) $6 + 1$



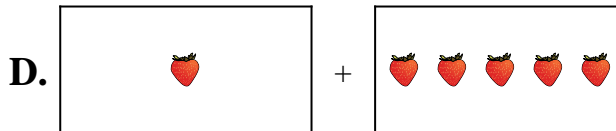
2) $1 + 5$



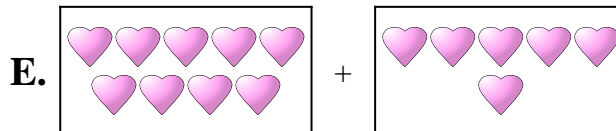
3) $1 + 1$



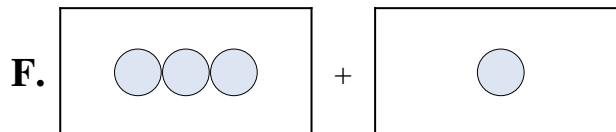
4) $9 + 4$



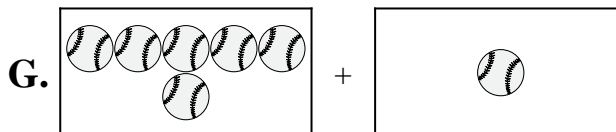
5) $5 + 10$



6) $9 + 6$



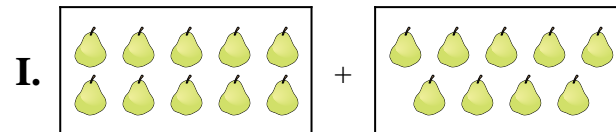
7) $3 + 1$



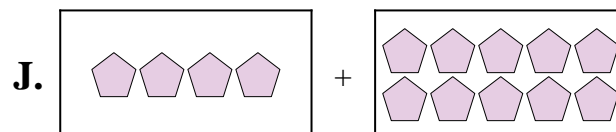
8) $4 + 10$



9) $5 + 8$



10) $10 + 9$



Respuestas

1. _____

2. _____

3. _____

4. _____

5. _____

6. _____

7. _____

8. _____

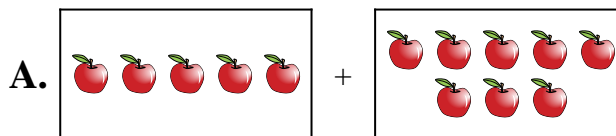
9. _____

10. _____

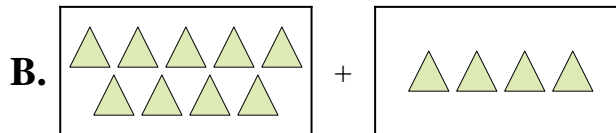


Iguala cada ecuación de suma a su equivalente visual.

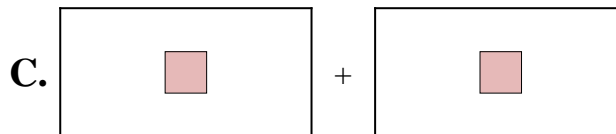
1) $6 + 1$



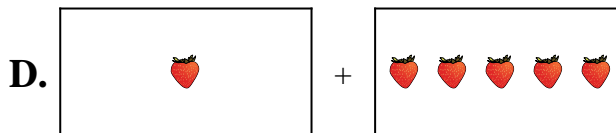
2) $1 + 5$



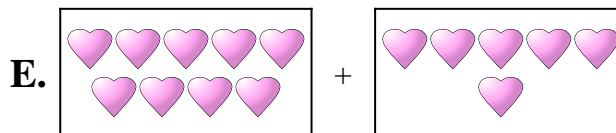
3) $1 + 1$



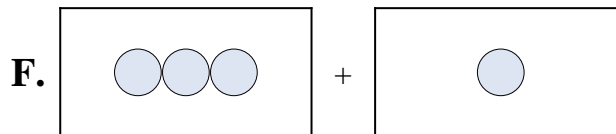
4) $9 + 4$



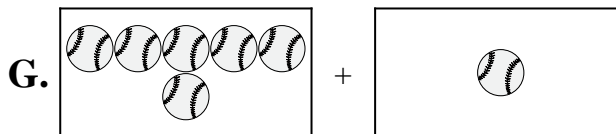
5) $5 + 10$



6) $9 + 6$



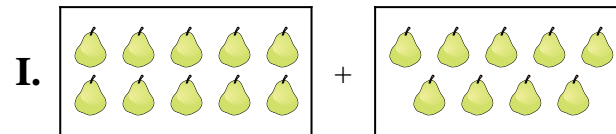
7) $3 + 1$



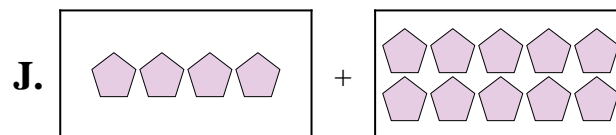
8) $4 + 10$



9) $5 + 8$



10) $10 + 9$



Respuestas

1. **G**

2. **D**

3. **C**

4. **B**

5. **H**

6. **E**

7. **F**

8. **J**

9. **A**

10. **I**