



Iguala cada ecuación de suma a su equivalente visual.

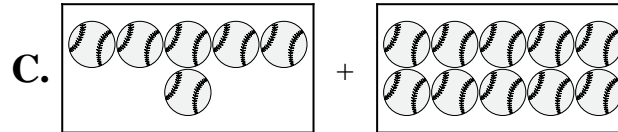
1) $6 + 2$



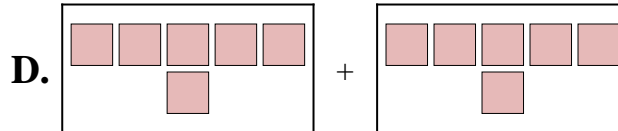
2) $2 + 8$



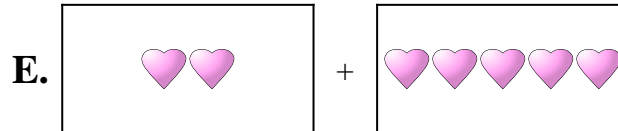
3) $6 + 10$



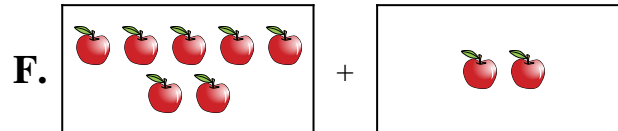
4) $2 + 5$



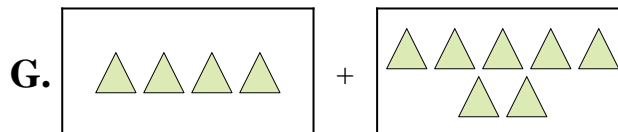
5) $4 + 7$



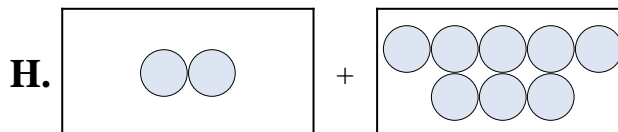
6) $7 + 6$



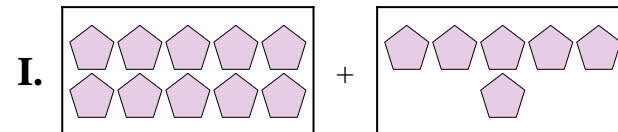
7) $7 + 2$



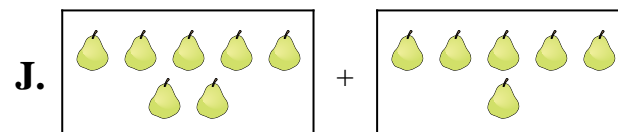
8) $10 + 6$



9) $6 + 6$



10) $10 + 5$



Respuestas

1. _____
2. _____
3. _____
4. _____
5. _____
6. _____
7. _____
8. _____
9. _____
10. _____

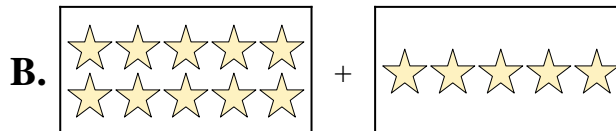


Iguala cada ecuación de suma a su equivalente visual.

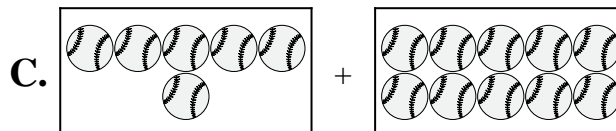
1) $6 + 2$



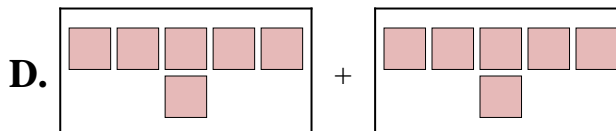
2) $2 + 8$



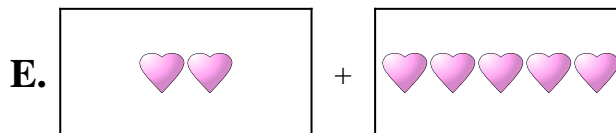
3) $6 + 10$



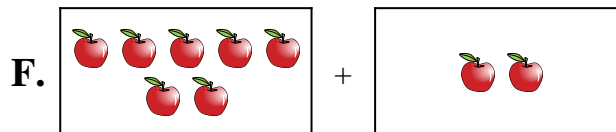
4) $2 + 5$



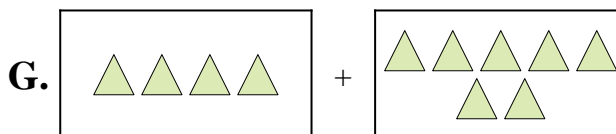
5) $4 + 7$



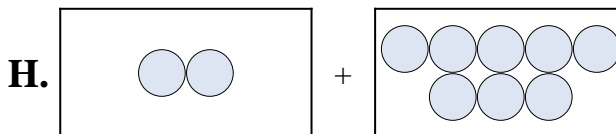
6) $7 + 6$



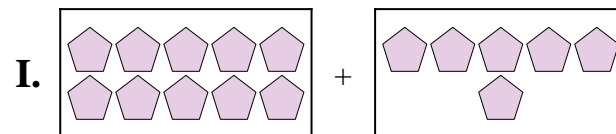
7) $7 + 2$



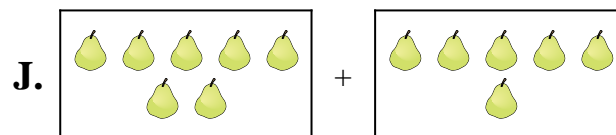
8) $10 + 6$



9) $6 + 6$



10) $10 + 5$



Respuestas

1. **A**

2. **H**

3. **C**

4. **E**

5. **G**

6. **J**

7. **F**

8. **I**

9. **D**

10. **B**