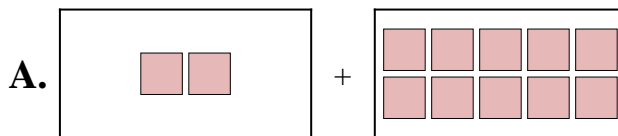


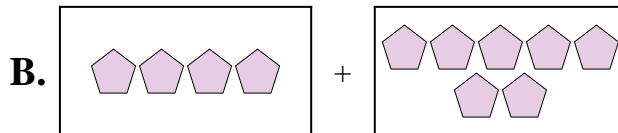


Iguala cada ecuación de suma a su equivalente visual.

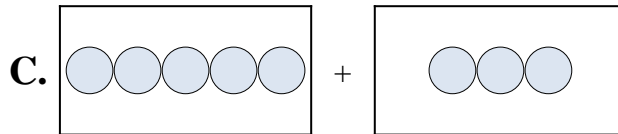
1) $2 + 5$



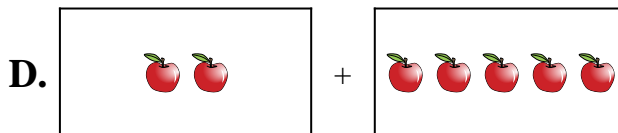
2) $5 + 3$



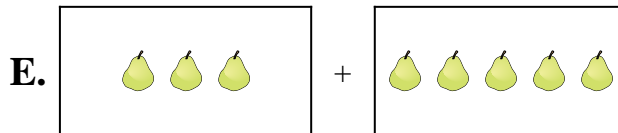
3) $1 + 4$



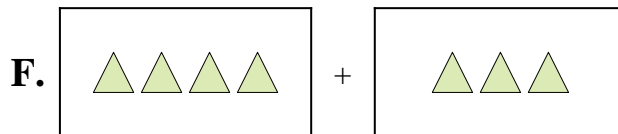
4) $5 + 6$



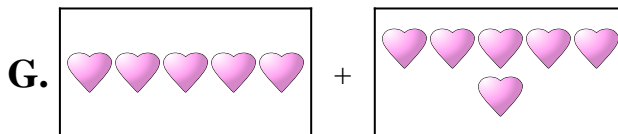
5) $3 + 5$




6) $4 + 3$



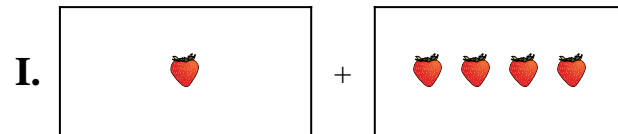
7) $10 + 6$



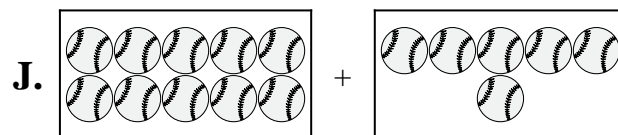
8) $2 + 10$



9) $10 + 10$



10) $4 + 7$



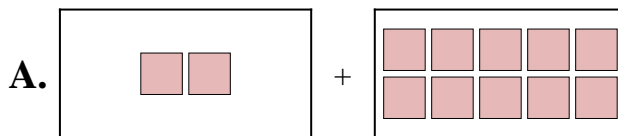
Respuestas

1. _____
2. _____
3. _____
4. _____
5. _____
6. _____
7. _____
8. _____
9. _____
10. _____

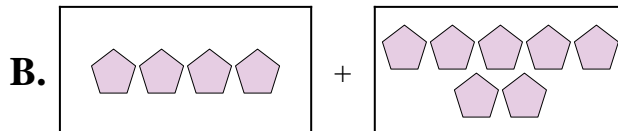


Iguala cada ecuación de suma a su equivalente visual.

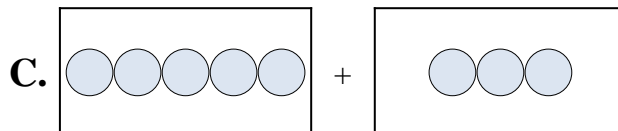
1) $2 + 5$



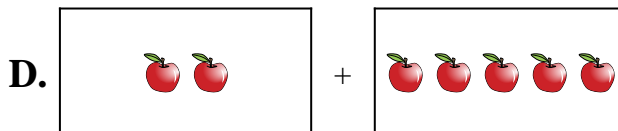
2) $5 + 3$



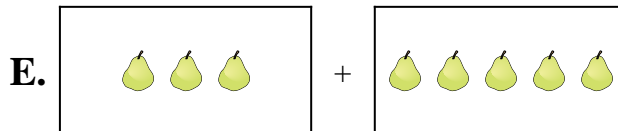
3) $1 + 4$



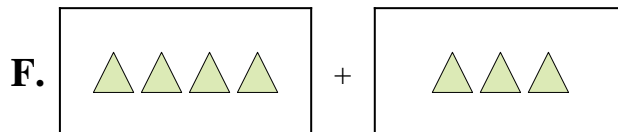
4) $5 + 6$



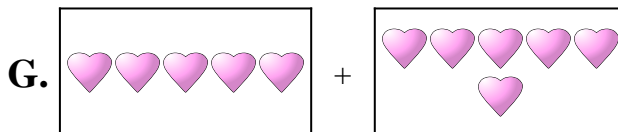
5) $3 + 5$




6) $4 + 3$



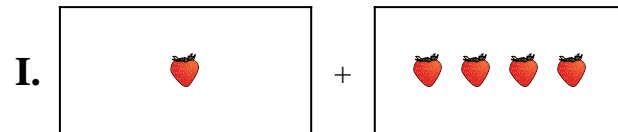
7) $10 + 6$



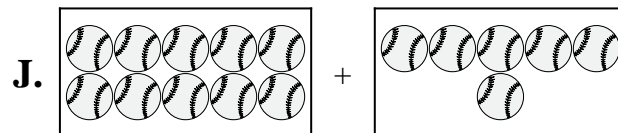
8) $2 + 10$



9) $10 + 10$



10) $4 + 7$



Respuestas

1. **D**

2. **C**

3. **I**

4. **G**

5. **E**

6. **F**

7. **J**

8. **A**

9. **H**

10. **B**