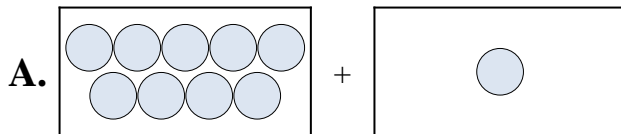


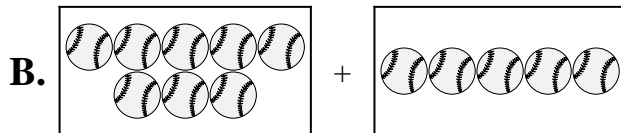


Iguala cada ecuación de suma a su equivalente visual.

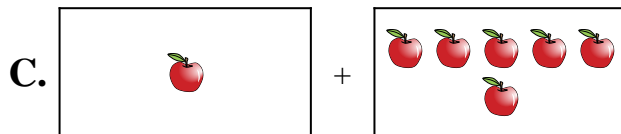
1) $7 + 9$



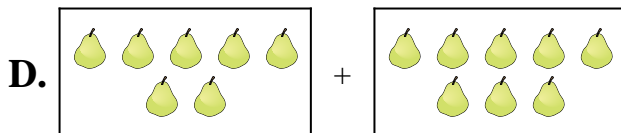
2) $2 + 6$




3) $4 + 3$



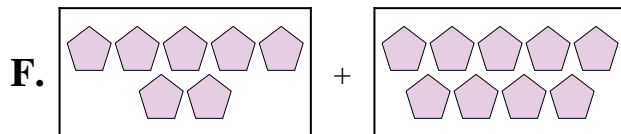
4) $9 + 1$



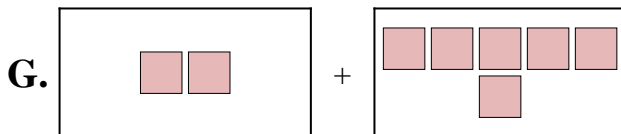
5) $7 + 8$



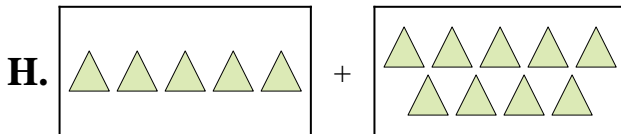
6) $7 + 3$



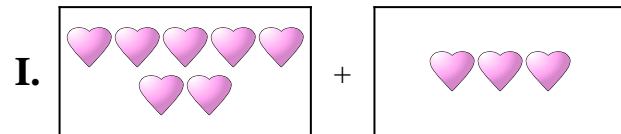
7) $4 + 8$



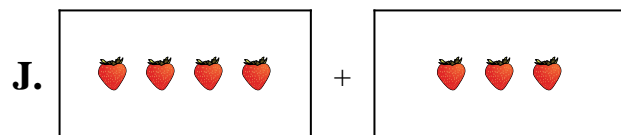
8) $8 + 5$



9) $1 + 6$



10) $5 + 9$



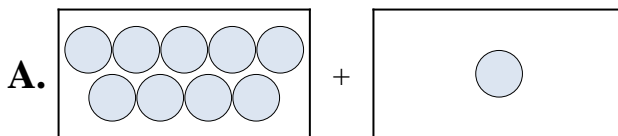
Respuestas

1. _____
2. _____
3. _____
4. _____
5. _____
6. _____
7. _____
8. _____
9. _____
10. _____

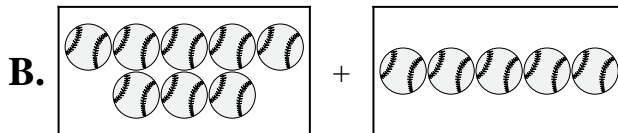


Iguala cada ecuación de suma a su equivalente visual.

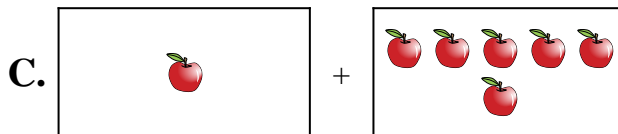
1) $7 + 9$



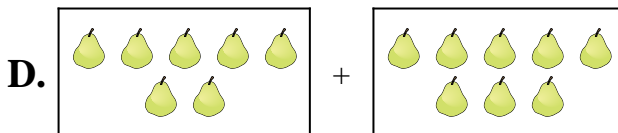
2) $2 + 6$




3) $4 + 3$



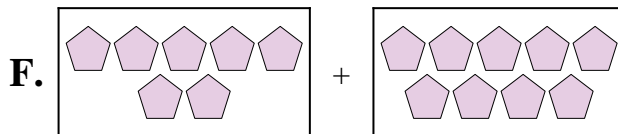
4) $9 + 1$



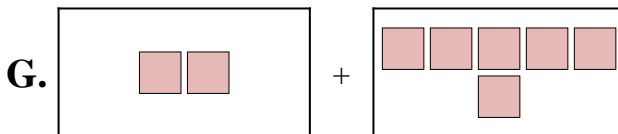
5) $7 + 8$



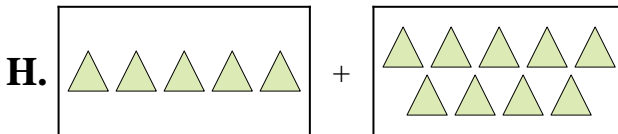
6) $7 + 3$



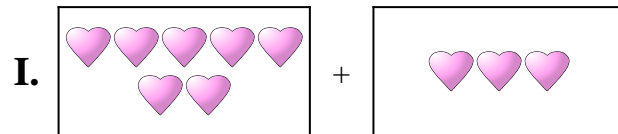
7) $4 + 8$



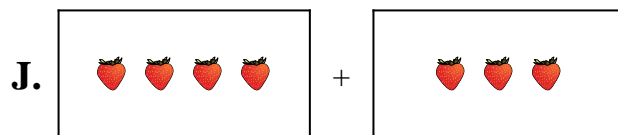
8) $8 + 5$



9) $1 + 6$



10) $5 + 9$



Respuestas

1. **F**

2. **G**

3. **J**

4. **A**

5. **D**

6. **I**

7. **E**

8. **B**

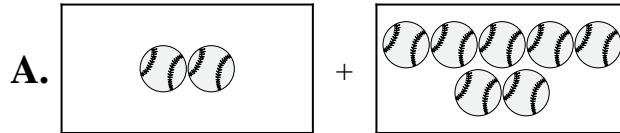
9. **C**

10. **H**

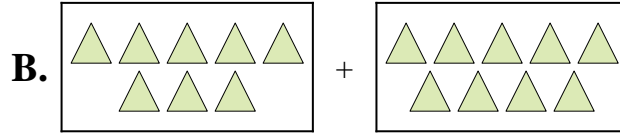


Iguala cada ecuación de suma a su equivalente visual.

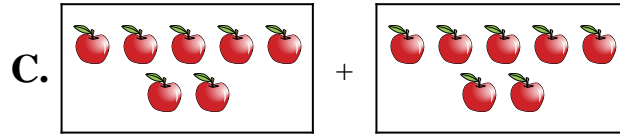
1) $3 + 7$



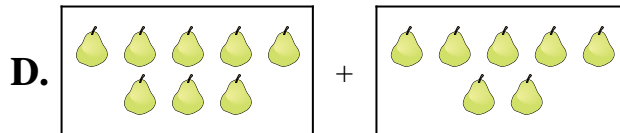
2) $8 + 9$



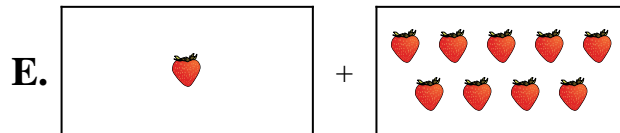
3) $7 + 7$



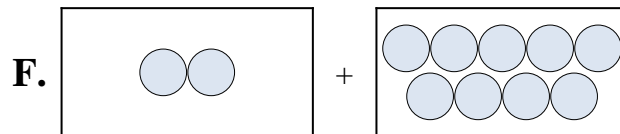
4) $1 + 1$



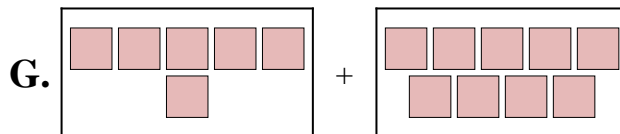
5) $1 + 9$



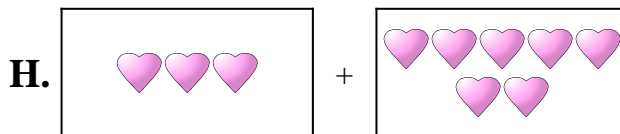
6) $2 + 9$



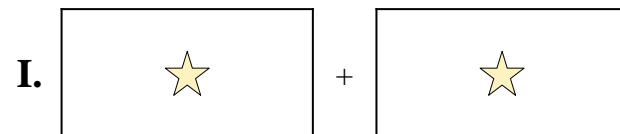
7) $6 + 9$



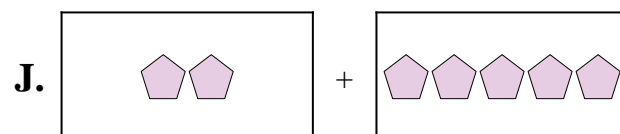
8) $2 + 5$



9) $2 + 7$



10) $8 + 7$



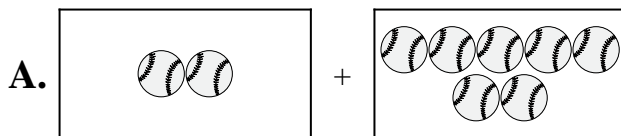
Respuestas

1. _____
2. _____
3. _____
4. _____
5. _____
6. _____
7. _____
8. _____
9. _____
10. _____

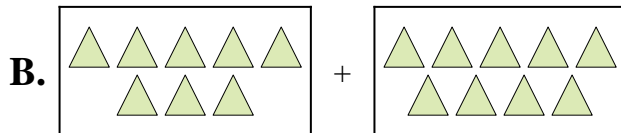


Iguala cada ecuación de suma a su equivalente visual.

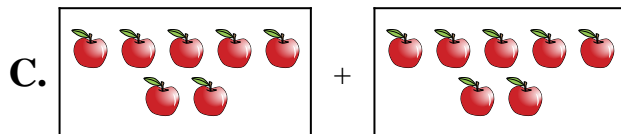
1) $3 + 7$



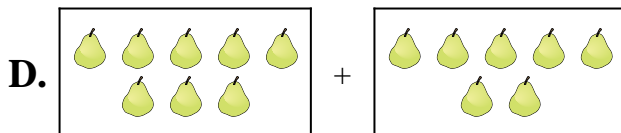
2) $8 + 9$



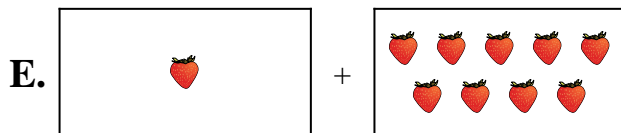
3) $7 + 7$



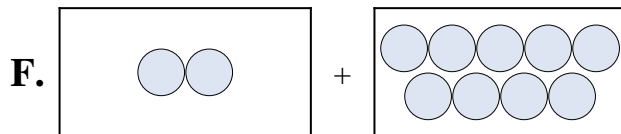
4) $1 + 1$



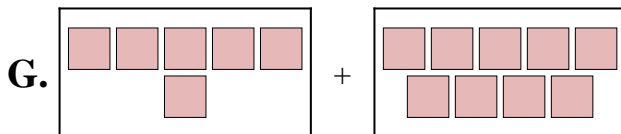
5) $1 + 9$



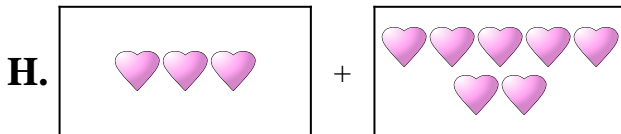
6) $2 + 9$



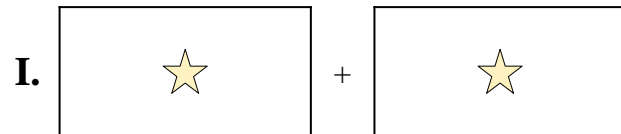
7) $6 + 9$



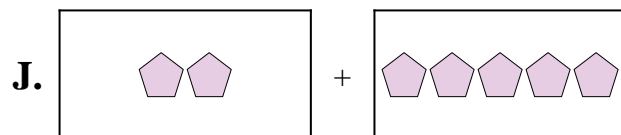
8) $2 + 5$



9) $2 + 7$



10) $8 + 7$



Respuestas

1. **H**

2. **B**

3. **C**

4. **I**

5. **E**

6. **F**

7. **G**

8. **J**

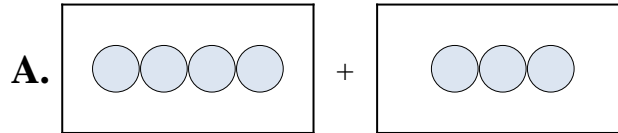
9. **A**

10. **D**




Iguala cada ecuación de suma a su equivalente visual.

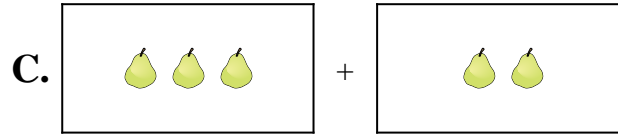
1) $10 + 9$



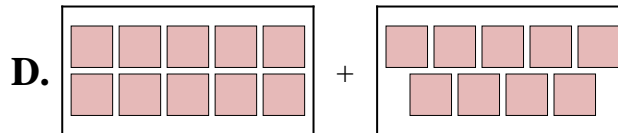
2) $4 + 8$



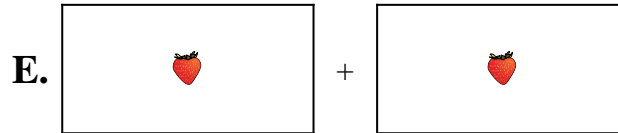
3) $3 + 2$



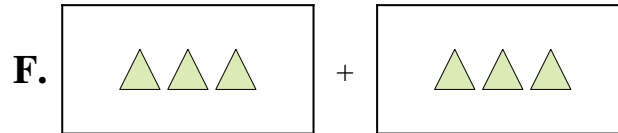
4) $2 + 4$



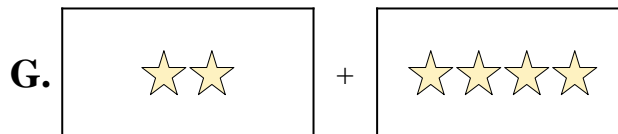
5) $4 + 3$



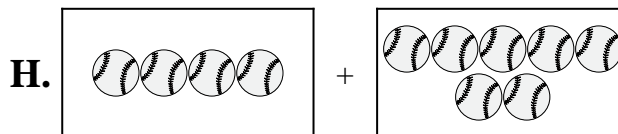
6) $3 + 3$



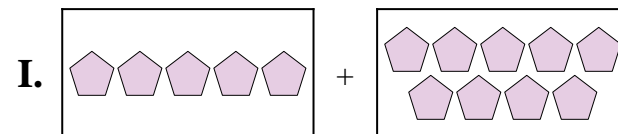
7) $4 + 7$



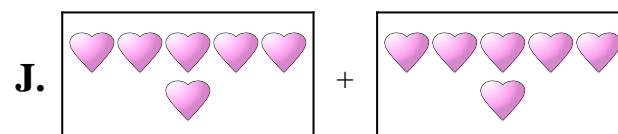
8) $5 + 9$



9) $6 + 6$



10) $1 + 1$



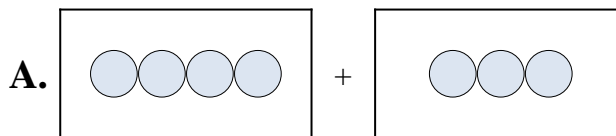
Respuestas

1. _____
2. _____
3. _____
4. _____
5. _____
6. _____
7. _____
8. _____
9. _____
10. _____



Iguala cada ecuación de suma a su equivalente visual.

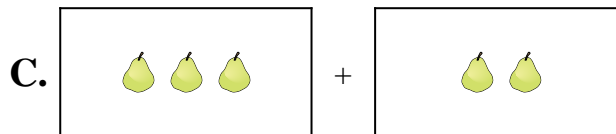
1) $10 + 9$



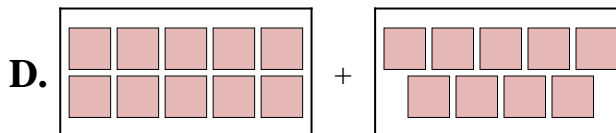
2) $4 + 8$



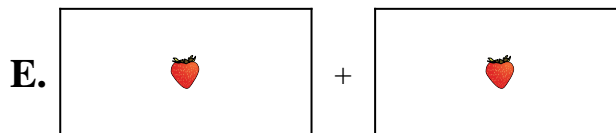
3) $3 + 2$



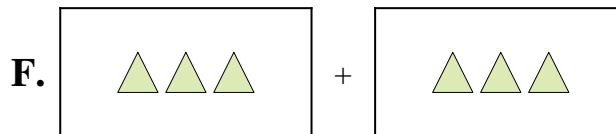
4) $2 + 4$



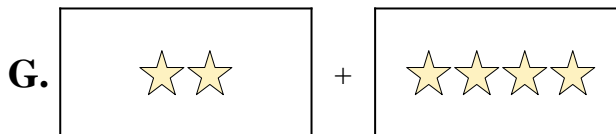
5) $4 + 3$



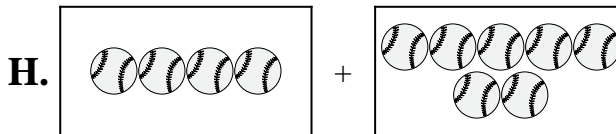
6) $3 + 3$



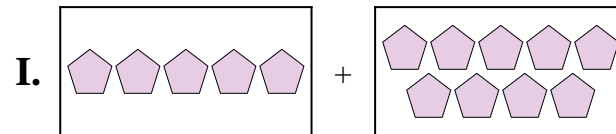
7) $4 + 7$



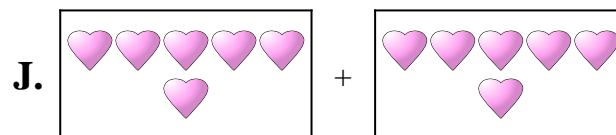
8) $5 + 9$



9) $6 + 6$



10) $1 + 1$



Respuestas

1. **D**

2. **B**

3. **C**

4. **G**

5. **A**

6. **F**

7. **H**

8. **I**

9. **J**

10. **E**

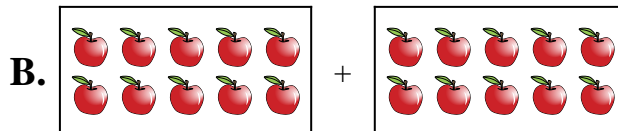


Iguala cada ecuación de suma a su equivalente visual.

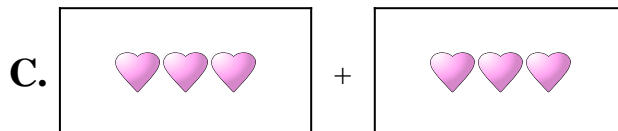
1) $9 + 1$



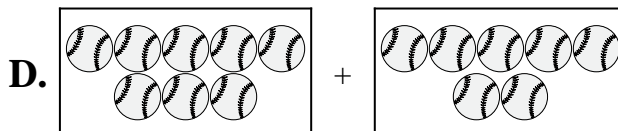
2) $3 + 3$



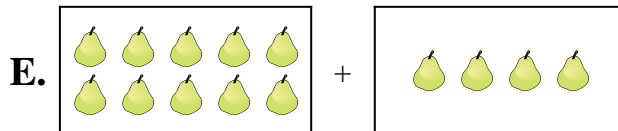
3) $4 + 6$



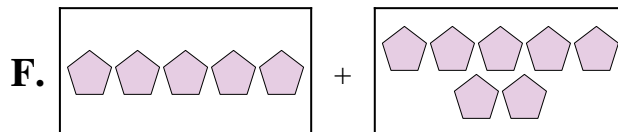
4) $9 + 3$



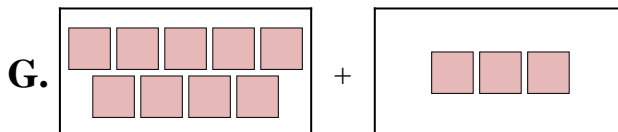
5) $1 + 9$



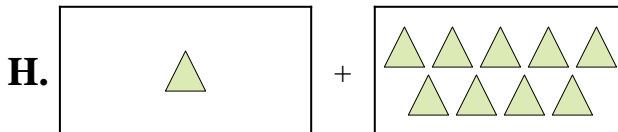
6) $5 + 7$



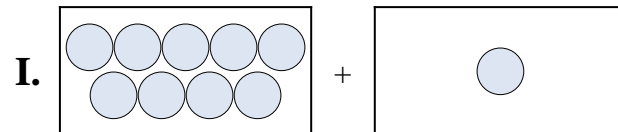
7) $10 + 10$



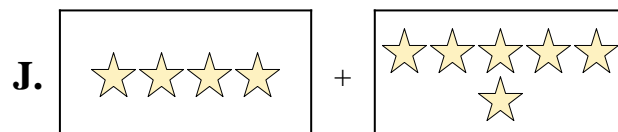
8) $10 + 4$



9) $8 + 7$



10) $7 + 8$



Respuestas

1. _____

2. _____

3. _____

4. _____

5. _____

6. _____

7. _____

8. _____

9. _____

10. _____

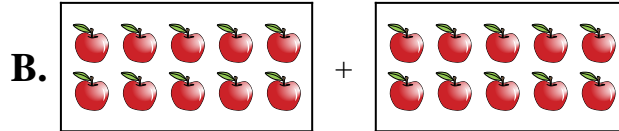


Iguala cada ecuación de suma a su equivalente visual.

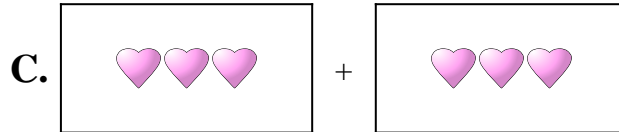
1) $9 + 1$



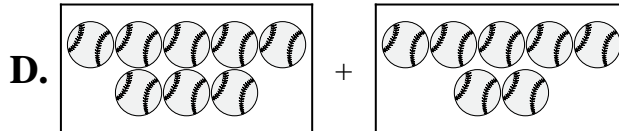
2) $3 + 3$



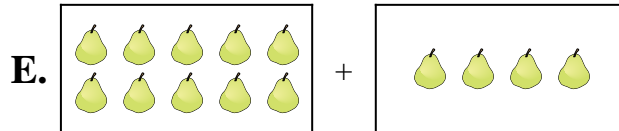
3) $4 + 6$



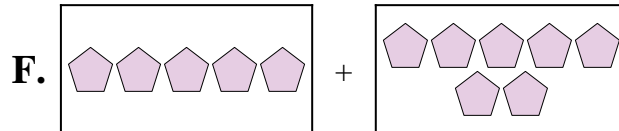
4) $9 + 3$



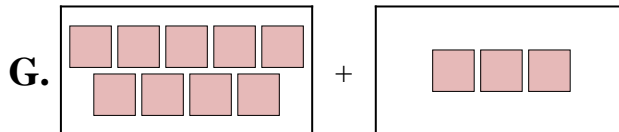
5) $1 + 9$



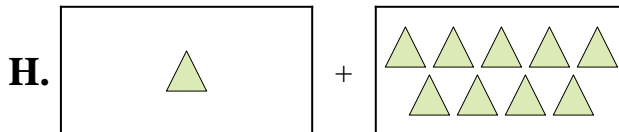
6) $5 + 7$



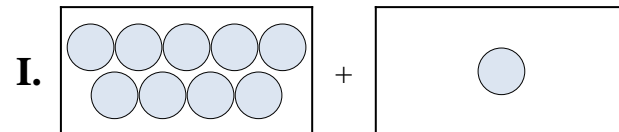
7) $10 + 10$



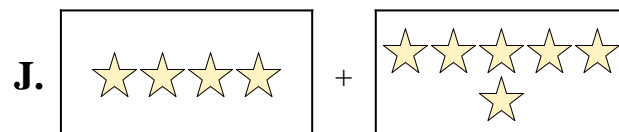
8) $10 + 4$



9) $8 + 7$



10) $7 + 8$



Respuestas

1. **I**

2. **C**

3. **J**

4. **G**

5. **H**

6. **F**

7. **B**

8. **E**

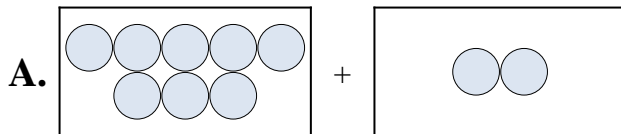
9. **D**

10. **A**

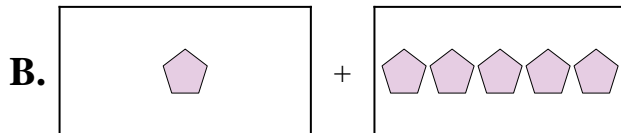


Iguala cada ecuación de suma a su equivalente visual.

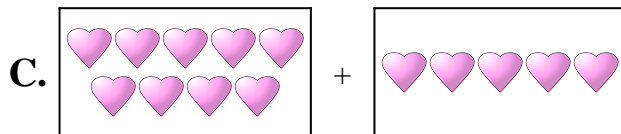
1) $8 + 2$



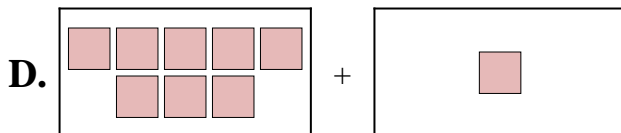
2) $8 + 1$



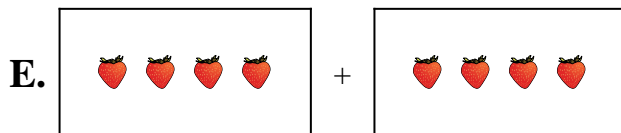
3) $9 + 2$



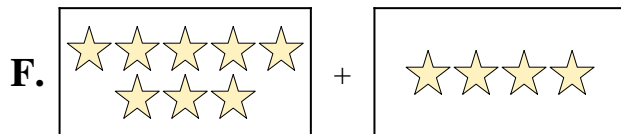
4) $1 + 5$




5) $4 + 4$



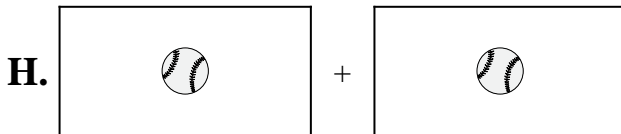
6) $9 + 5$



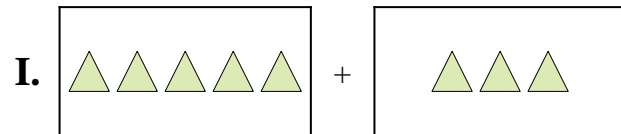
7) $1 + 1$



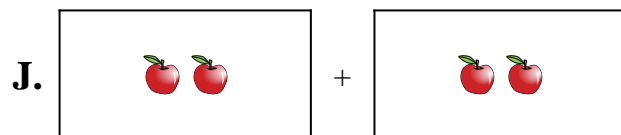
8) $5 + 3$



9) $2 + 2$



10) $8 + 4$



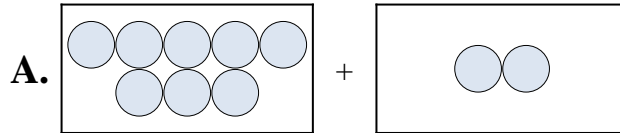
Respuestas

1. _____
2. _____
3. _____
4. _____
5. _____
6. _____
7. _____
8. _____
9. _____
10. _____

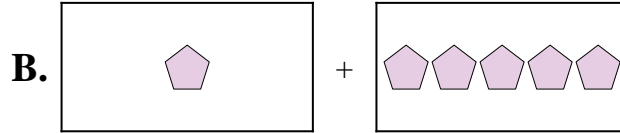


Iguala cada ecuación de suma a su equivalente visual.

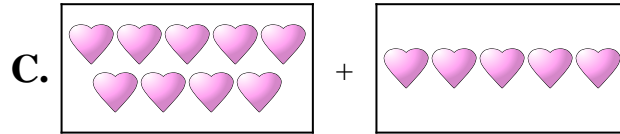
1) $8 + 2$



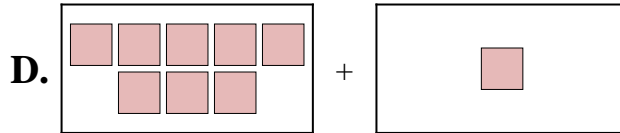
2) $8 + 1$



3) $9 + 2$



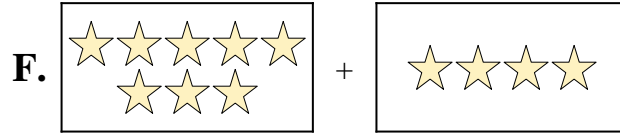
4) $1 + 5$




5) $4 + 4$



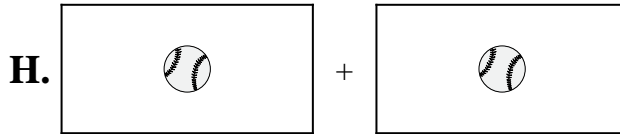
6) $9 + 5$



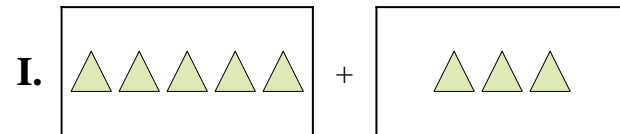
7) $1 + 1$



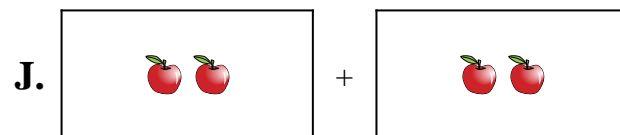
8) $5 + 3$



9) $2 + 2$



10) $8 + 4$



Respuestas

1. **A**

2. **D**

3. **G**

4. **B**

5. **E**

6. **C**

7. **H**

8. **I**

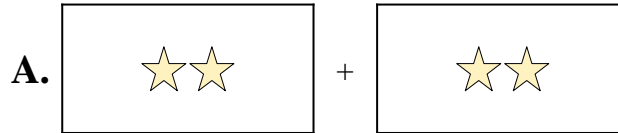
9. **J**

10. **F**

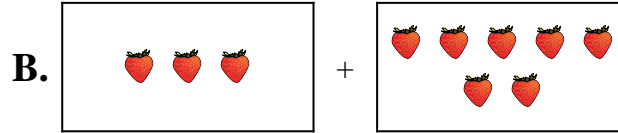


Iguala cada ecuación de suma a su equivalente visual.

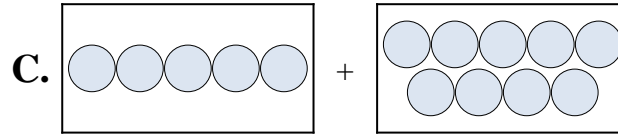
1) $2 + 2$



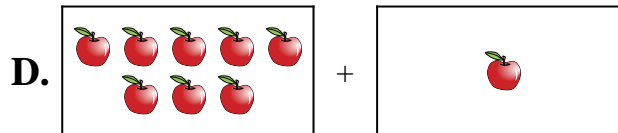
2) $2 + 6$



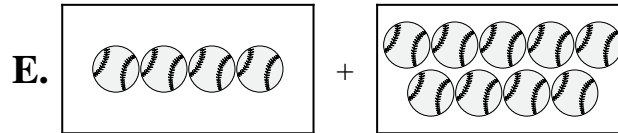
3) $5 + 9$




4) $8 + 1$



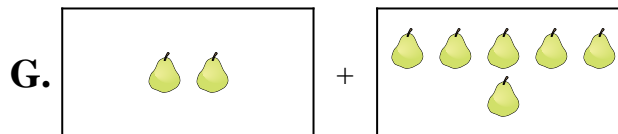
5) $6 + 5$



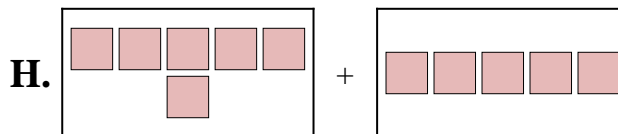
6) $10 + 6$



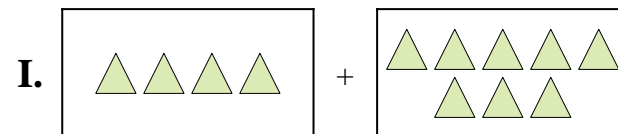
7) $4 + 9$



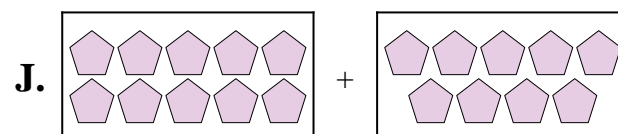
8) $4 + 8$



9) $3 + 7$



10) $10 + 9$



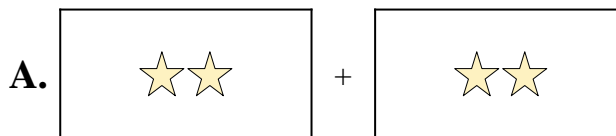
Respuestas

1. _____
2. _____
3. _____
4. _____
5. _____
6. _____
7. _____
8. _____
9. _____
10. _____

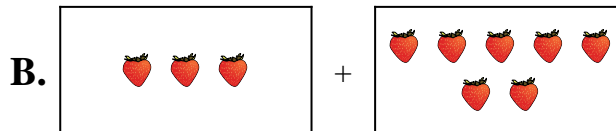


Iguala cada ecuación de suma a su equivalente visual.

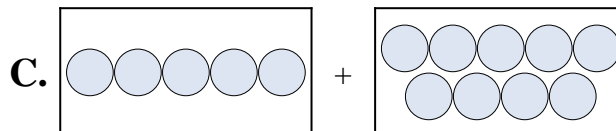
1) $2 + 2$



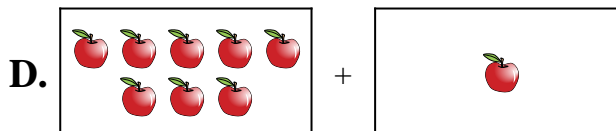
2) $2 + 6$



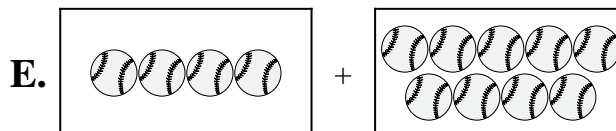
3) $5 + 9$




4) $8 + 1$



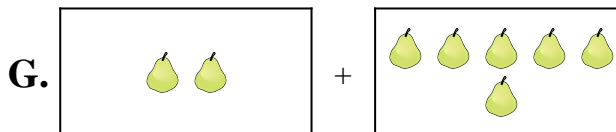
5) $6 + 5$



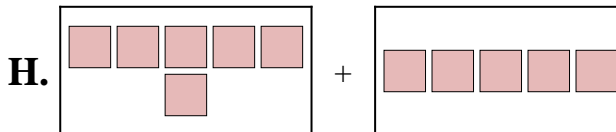
6) $10 + 6$



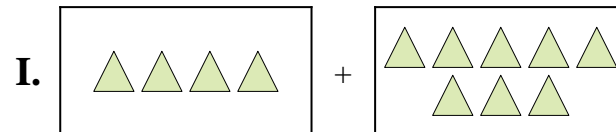
7) $4 + 9$



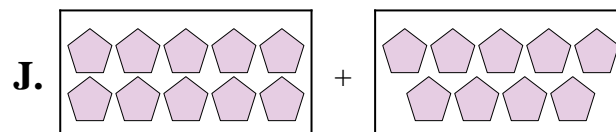
8) $4 + 8$



9) $3 + 7$



10) $10 + 9$



Respuestas

1. **A**

2. **G**

3. **C**

4. **D**

5. **H**

6. **F**

7. **E**

8. **I**

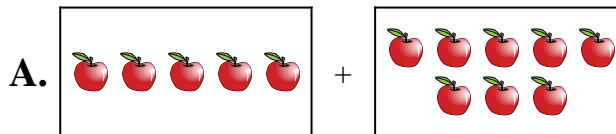
9. **B**

10. **J**

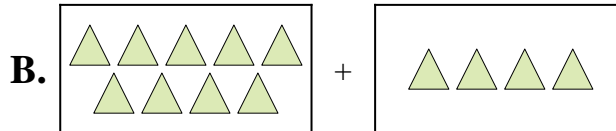


Iguala cada ecuación de suma a su equivalente visual.

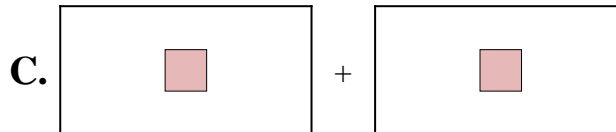
1) $6 + 1$



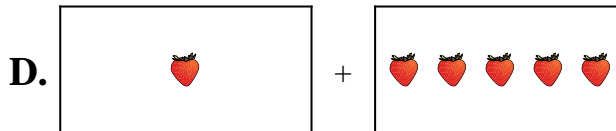
2) $1 + 5$



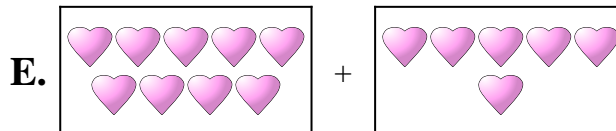
3) $1 + 1$



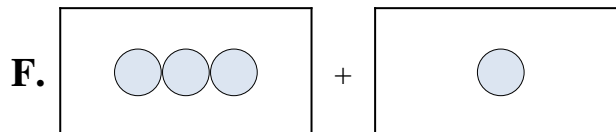
4) $9 + 4$



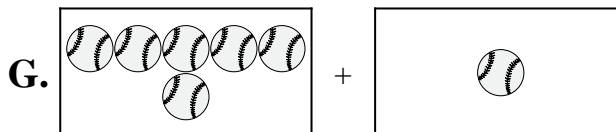
5) $5 + 10$



6) $9 + 6$



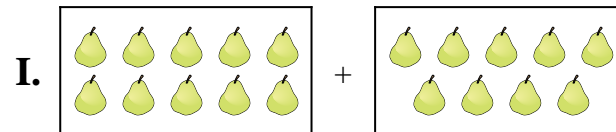
7) $3 + 1$



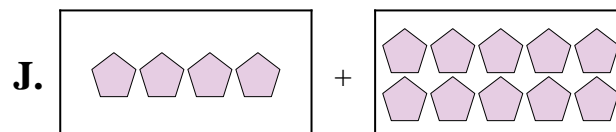
8) $4 + 10$



9) $5 + 8$



10) $10 + 9$



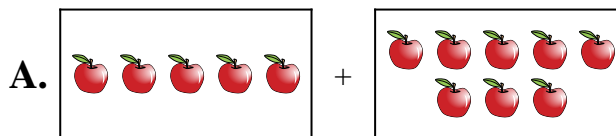
Respuestas

1. _____
2. _____
3. _____
4. _____
5. _____
6. _____
7. _____
8. _____
9. _____
10. _____

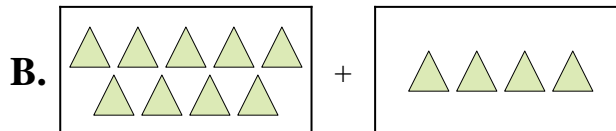


Iguala cada ecuación de suma a su equivalente visual.

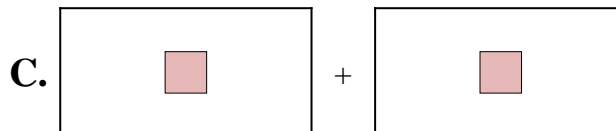
1) $6 + 1$



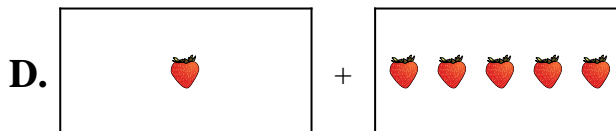
2) $1 + 5$



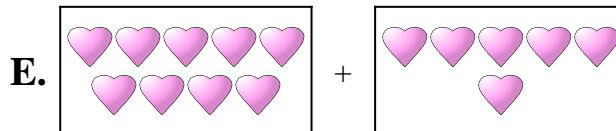
3) $1 + 1$



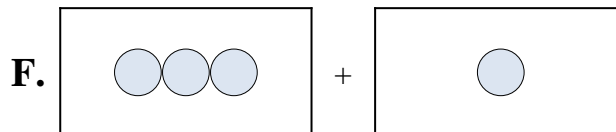
4) $9 + 4$



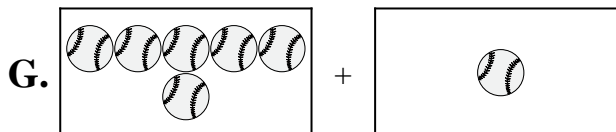
5) $5 + 10$



6) $9 + 6$



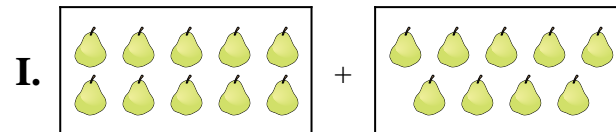
7) $3 + 1$



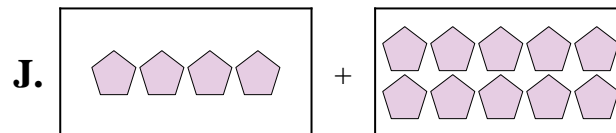
8) $4 + 10$



9) $5 + 8$



10) $10 + 9$



Respuestas

1. **G**

2. **D**

3. **C**

4. **B**

5. **H**

6. **E**

7. **F**

8. **J**

9. **A**

10. **I**

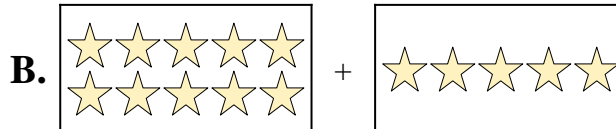


Iguala cada ecuación de suma a su equivalente visual.

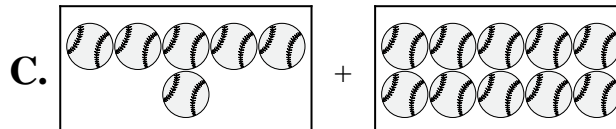
1) $6 + 2$



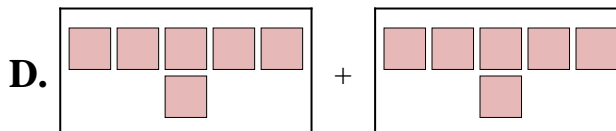
2) $2 + 8$



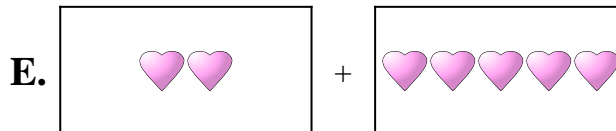
3) $6 + 10$



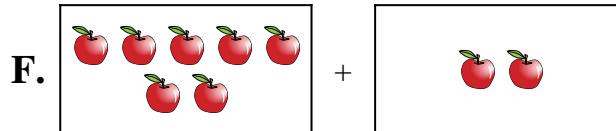
4) $2 + 5$



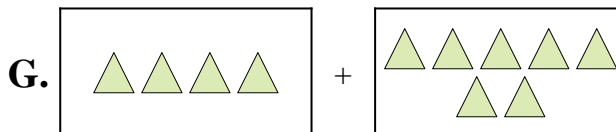
5) $4 + 7$



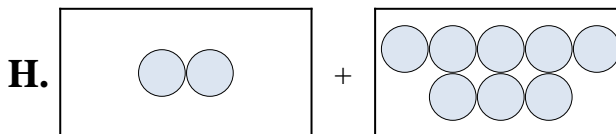
6) $7 + 6$



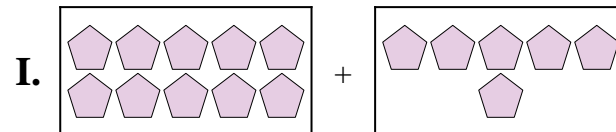
7) $7 + 2$



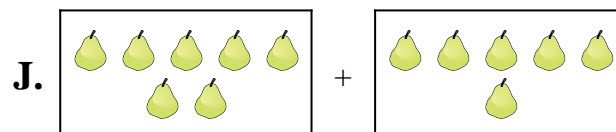
8) $10 + 6$



9) $6 + 6$



10) $10 + 5$



Respuestas

1. _____
2. _____
3. _____
4. _____
5. _____
6. _____
7. _____
8. _____
9. _____
10. _____



Iguala cada ecuación de suma a su equivalente visual.

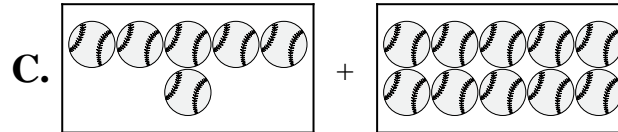
1) $6 + 2$



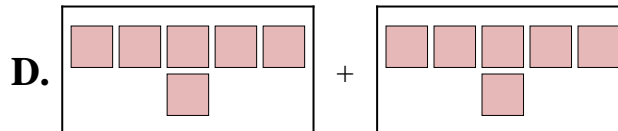
2) $2 + 8$



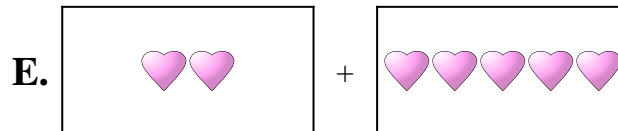
3) $6 + 10$



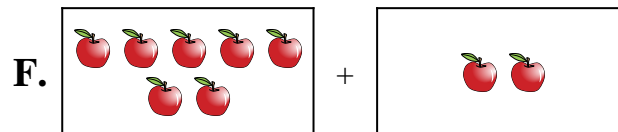
4) $2 + 5$



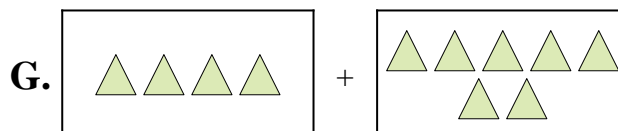
5) $4 + 7$



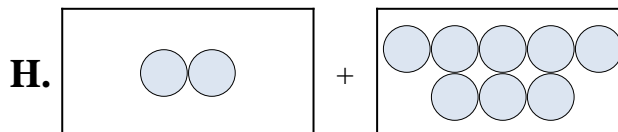
6) $7 + 6$



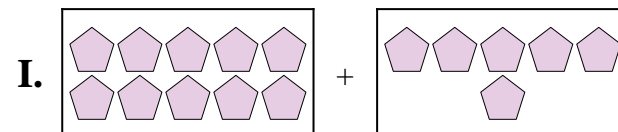
7) $7 + 2$



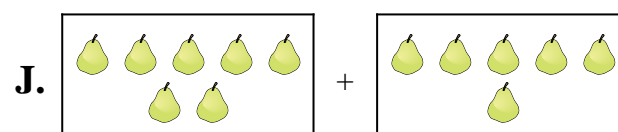
8) $10 + 6$



9) $6 + 6$



10) $10 + 5$



Respuestas

1. **A**

2. **H**

3. **C**

4. **E**

5. **G**

6. **J**

7. **F**

8. **I**

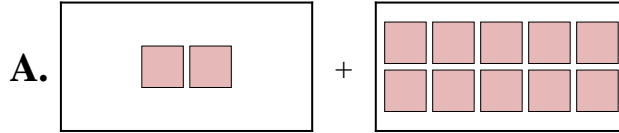
9. **D**

10. **B**

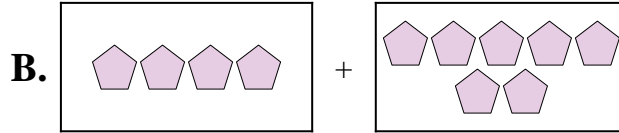


Iguala cada ecuación de suma a su equivalente visual.

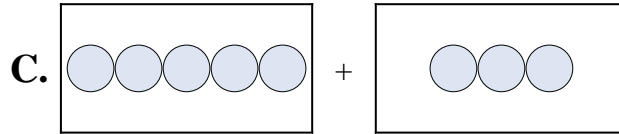
1) $2 + 5$



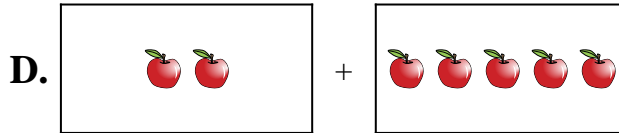
2) $5 + 3$



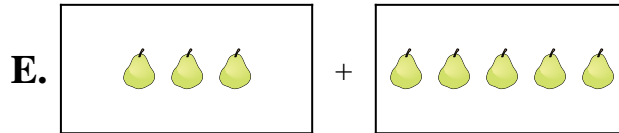
3) $1 + 4$



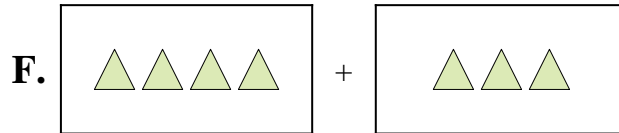
4) $5 + 6$




5) $3 + 5$




6) $4 + 3$



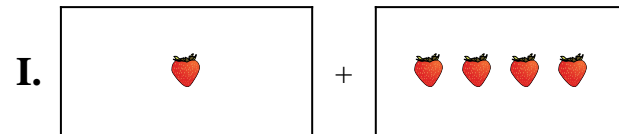
7) $10 + 6$



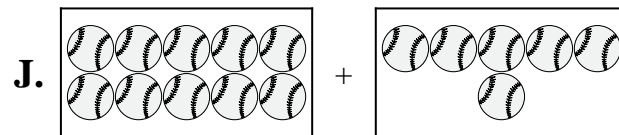
8) $2 + 10$



9) $10 + 10$



10) $4 + 7$



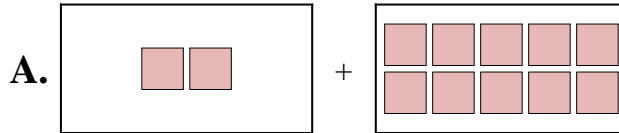
Respuestas

1. _____
2. _____
3. _____
4. _____
5. _____
6. _____
7. _____
8. _____
9. _____
10. _____

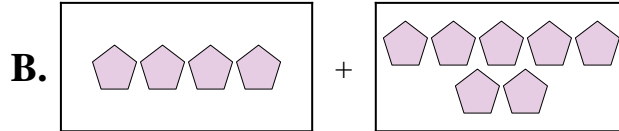


Iguala cada ecuación de suma a su equivalente visual.

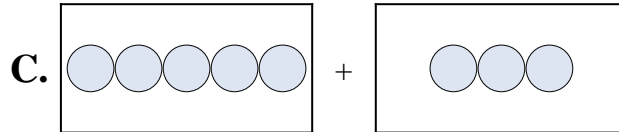
1) $2 + 5$



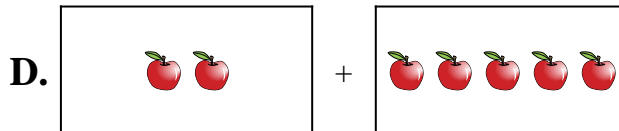
2) $5 + 3$



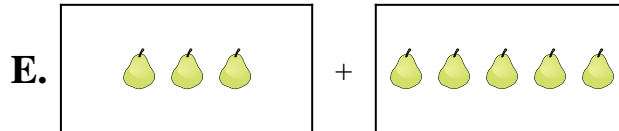
3) $1 + 4$



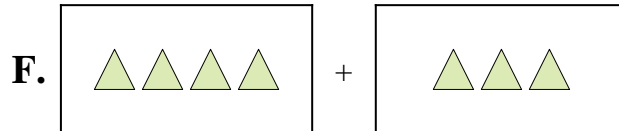
4) $5 + 6$



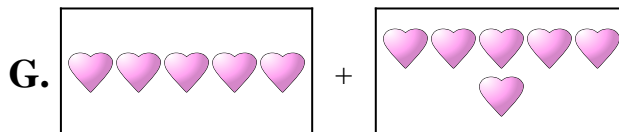
5) $3 + 5$




6) $4 + 3$



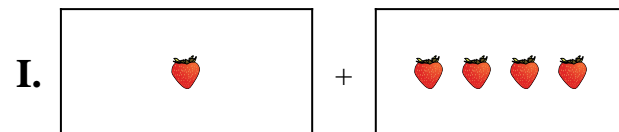
7) $10 + 6$



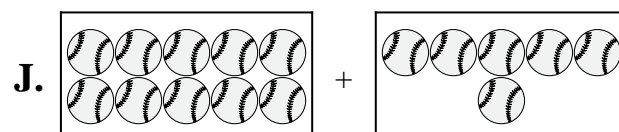
8) $2 + 10$



9) $10 + 10$



10) $4 + 7$



Respuestas

1. **D**

2. **C**

3. **I**

4. **G**

5. **E**

6. **F**

7. **J**

8. **A**

9. **H**

10. **B**

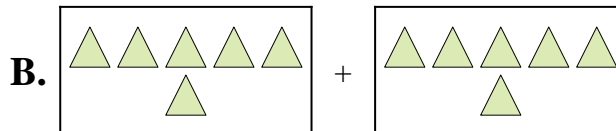


Iguala cada ecuación de suma a su equivalente visual.

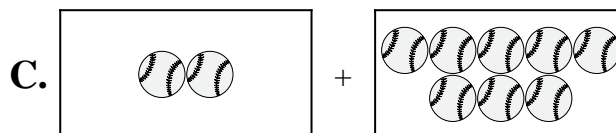
1) $3 + 3$



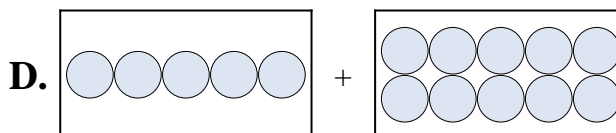
2) $6 + 6$



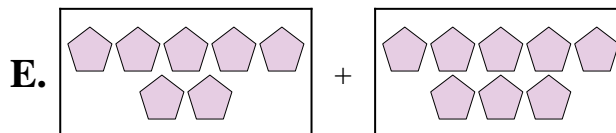
3) $5 + 10$



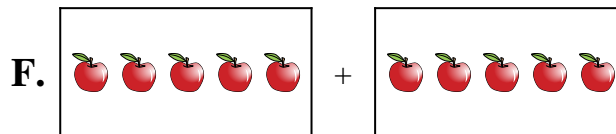
4) $5 + 5$



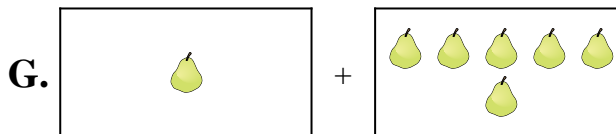
5) $1 + 6$




6) $1 + 2$



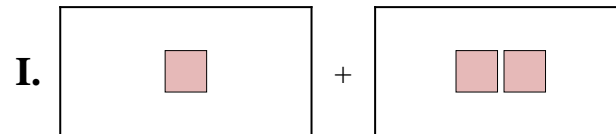
7) $2 + 8$



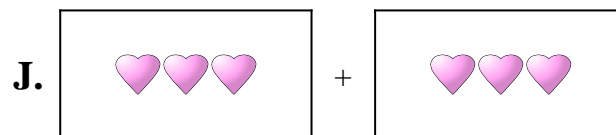
8) $7 + 8$



9) $9 + 3$



10) $7 + 3$



Respuestas

1. _____

2. _____

3. _____

4. _____

5. _____

6. _____

7. _____

8. _____

9. _____

10. _____

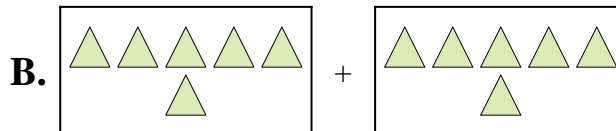


Iguala cada ecuación de suma a su equivalente visual.

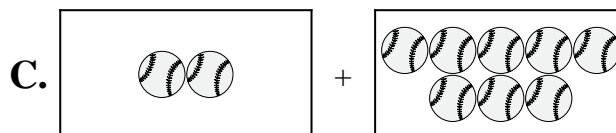
1) $3 + 3$



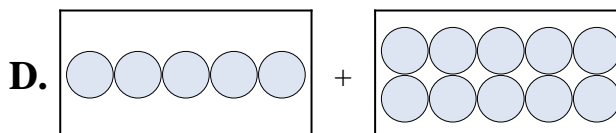
2) $6 + 6$



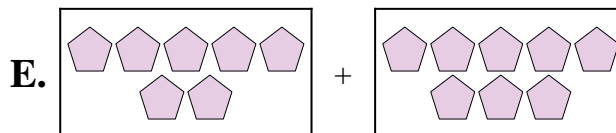
3) $5 + 10$



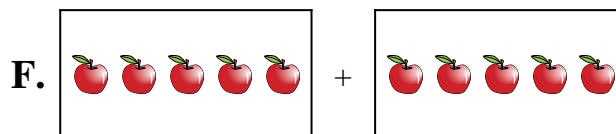
4) $5 + 5$



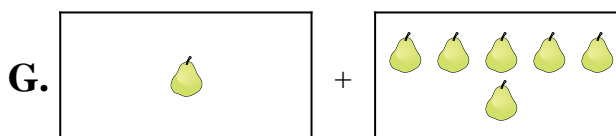
5) $1 + 6$




6) $1 + 2$



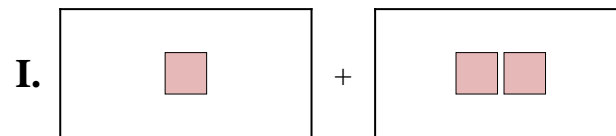
7) $2 + 8$



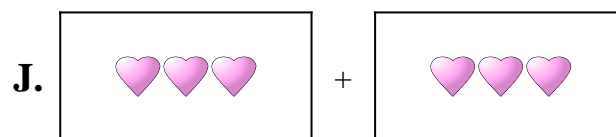
8) $7 + 8$



9) $9 + 3$



10) $7 + 3$



Respuestas

1. **J**

2. **B**

3. **D**

4. **F**

5. **G**

6. **I**

7. **C**

8. **E**

9. **H**

10. **A**