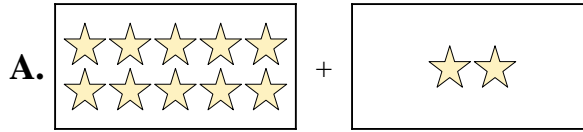




Iguala cada ecuación de suma a su equivalente visual.

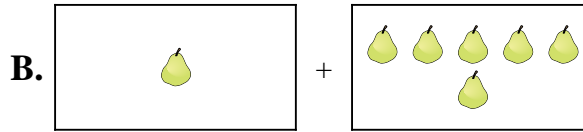
Respuestas

1) $4 + 10$



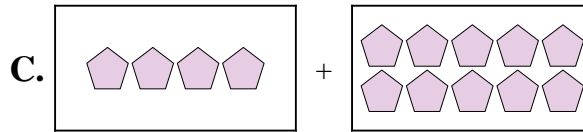
1. _____

2) $1 + 6$



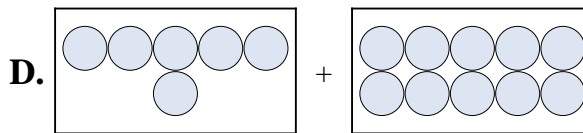
2. _____

3) $2 + 4$



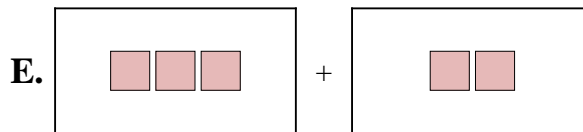
3. _____

4) $7 + 2$



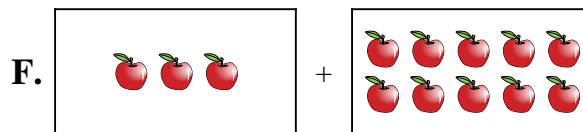
4. _____

5) $6 + 10$



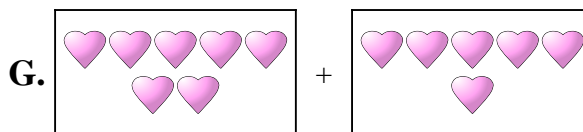
5. _____

6) $3 + 2$



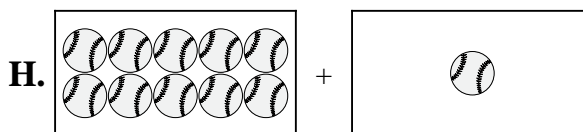
6. _____

7) $7 + 6$




7. _____

8) $10 + 1$



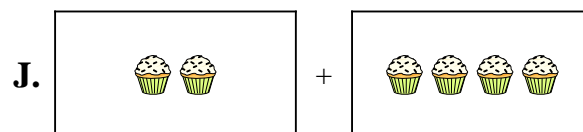
8. _____

9) $10 + 2$



9. _____

10) $3 + 10$



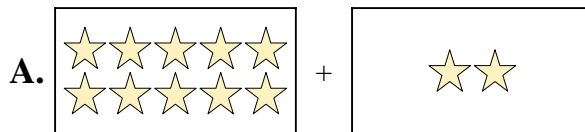
10. _____



Iguala cada ecuación de suma a su equivalente visual.

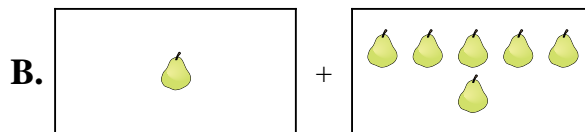
Respuestas

1) $4 + 10$



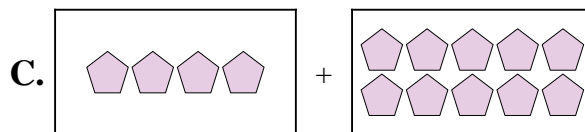
1. **C**

2) $1 + 6$



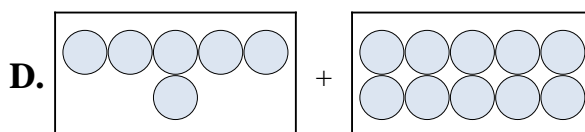
2. **B**

3) $2 + 4$



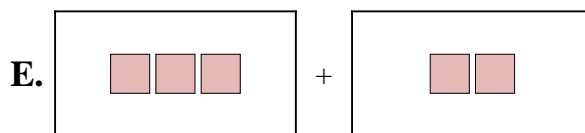
3. **J**

4) $7 + 2$



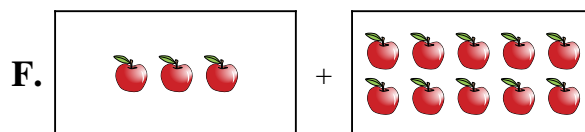
4. **I**

5) $6 + 10$



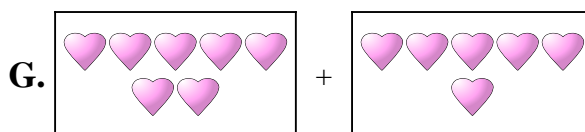
5. **D**

6) $3 + 2$



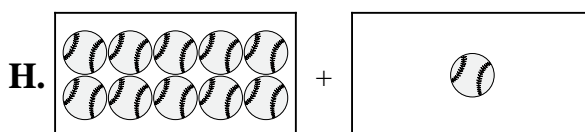
6. **E**

7) $7 + 6$




7. **G**

8) $10 + 1$



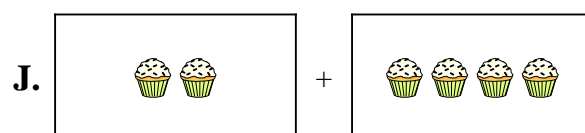
8. **H**

9) $10 + 2$



9. **A**

10) $3 + 10$



10. **F**