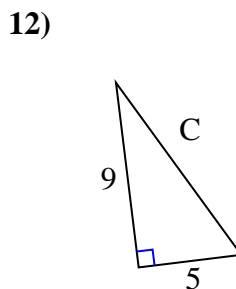
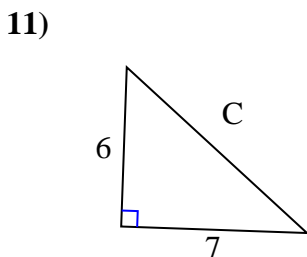
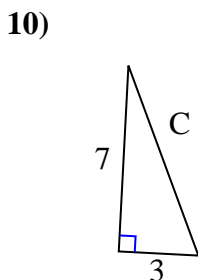
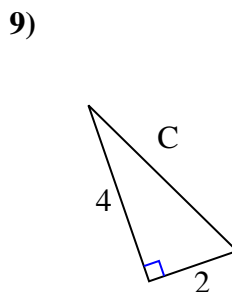
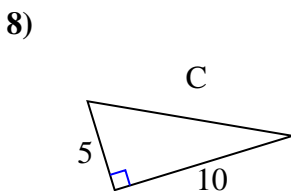
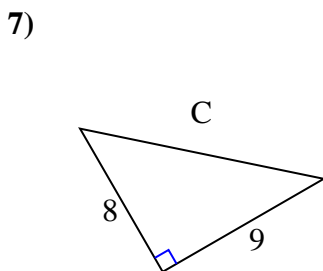
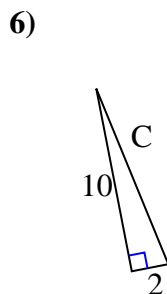
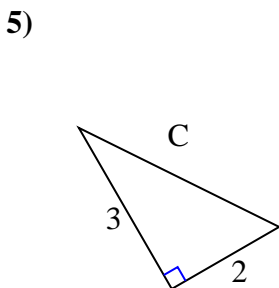
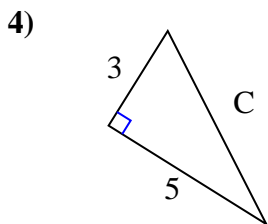
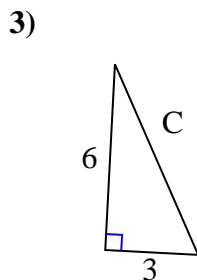
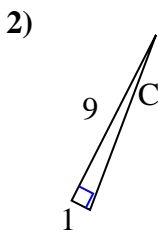
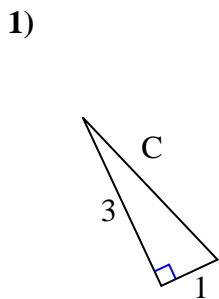




Encuentra el valor de "C" redondea tu respuesta al centésimo más cercano.

Respuestas

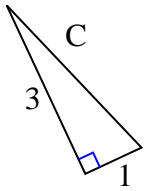


- 1. _____
- 2. _____
- 3. _____
- 4. _____
- 5. _____
- 6. _____
- 7. _____
- 8. _____
- 9. _____
- 10. _____
- 11. _____
- 12. _____



Encuentra el valor de "C" redondea tu respuesta al centésimo más cercano.

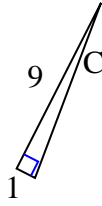
1)



$$9 + 1 = 10$$

$$\sqrt{10} = 3.16$$

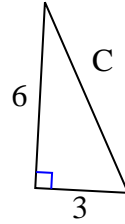
2)



$$81 + 1 = 82$$

$$\sqrt{82} = 9.06$$

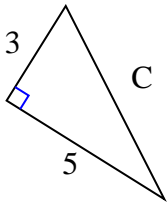
3)



$$36 + 9 = 45$$

$$\sqrt{45} = 6.71$$

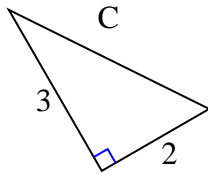
4)



$$9 + 25 = 34$$

$$\sqrt{34} = 5.83$$

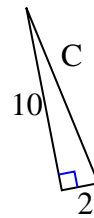
5)



$$9 + 4 = 13$$

$$\sqrt{13} = 3.61$$

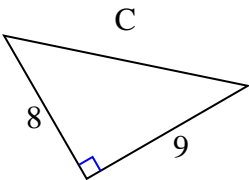
6)



$$100 + 4 = 104$$

$$\sqrt{104} = 10.2$$

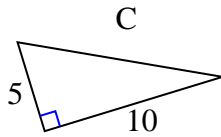
7)



$$64 + 81 = 145$$

$$\sqrt{145} = 12.04$$

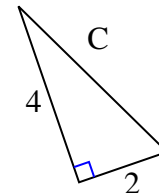
8)



$$25 + 100 = 125$$

$$\sqrt{125} = 11.18$$

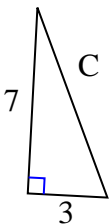
9)



$$16 + 4 = 20$$

$$\sqrt{20} = 4.47$$

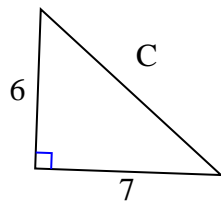
10)



$$49 + 9 = 58$$

$$\sqrt{58} = 7.62$$

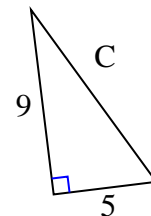
11)



$$36 + 49 = 85$$

$$\sqrt{85} = 9.22$$

12)



$$81 + 25 = 106$$

$$\sqrt{106} = 10.3$$

Respuestas

1. 3.16

2. 9.06

3. 6.71

4. 5.83

5. 3.61

6. 10.2

7. 12.04

8. 11.18

9. 4.47

10. 7.62

11. 9.22

12. 10.3