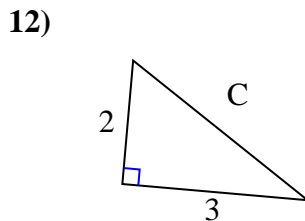
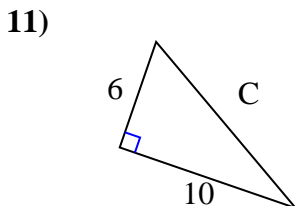
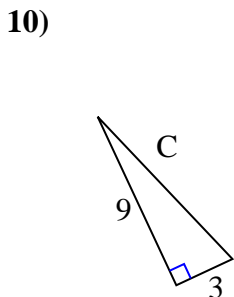
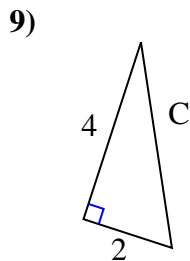
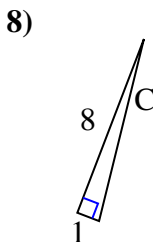
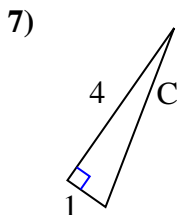
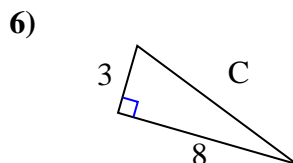
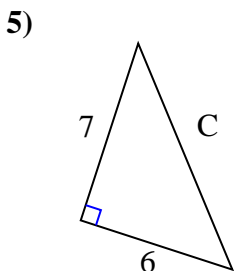
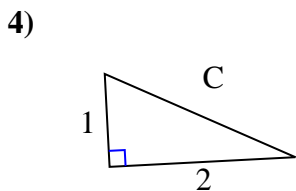
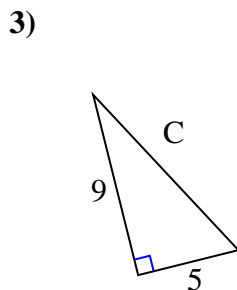
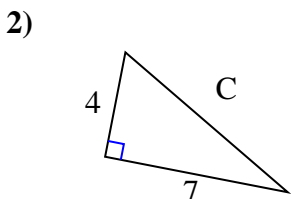
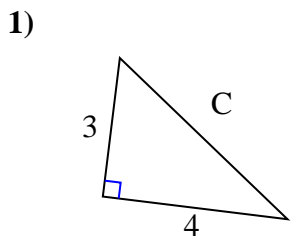




Encuentra el valor de "C" redondea tu respuesta al centésimo más cercano.



Respuestas

1. _____

2. _____

3. _____

4. _____

5. _____

6. _____

7. _____

8. _____

9. _____

10. _____

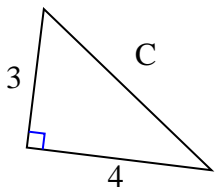
11. _____

12. _____



Encuentra el valor de "C" redondea tu respuesta al centésimo más cercano.

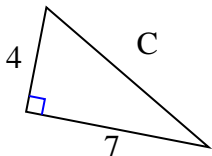
1)



$$9 + 16 = 25$$

$$\sqrt{25} = 5$$

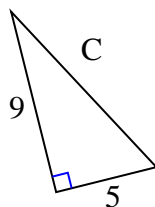
2)



$$16 + 49 = 65$$

$$\sqrt{65} = 8.06$$

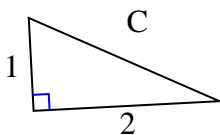
3)



$$81 + 25 = 106$$

$$\sqrt{106} = 10.3$$

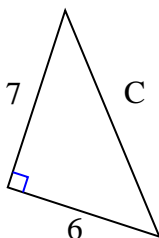
4)



$$1 + 4 = 5$$

$$\sqrt{5} = 2.24$$

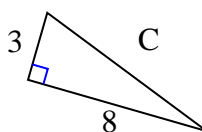
5)



$$49 + 36 = 85$$

$$\sqrt{85} = 9.22$$

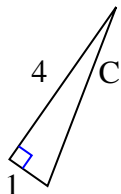
6)



$$9 + 64 = 73$$

$$\sqrt{73} = 8.54$$

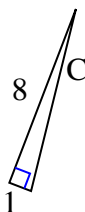
7)



$$16 + 1 = 17$$

$$\sqrt{17} = 4.12$$

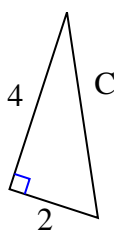
8)



$$64 + 1 = 65$$

$$\sqrt{65} = 8.06$$

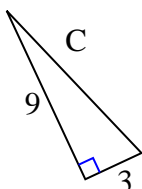
9)



$$16 + 4 = 20$$

$$\sqrt{20} = 4.47$$

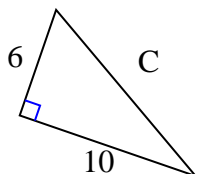
10)



$$81 + 9 = 90$$

$$\sqrt{90} = 9.49$$

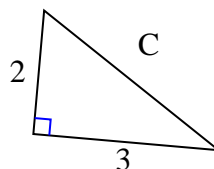
11)



$$36 + 100 = 136$$

$$\sqrt{136} = 11.66$$

12)



$$4 + 9 = 13$$

$$\sqrt{13} = 3.61$$

Respuestas1. 52. 8.063. 10.34. 2.245. 9.226. 8.547. 4.128. 8.069. 4.4710. 9.4911. 11.6612. 3.61