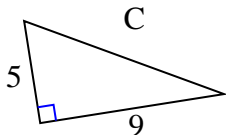


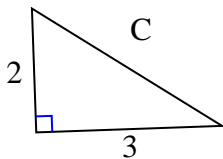


Encuentra el valor de "C" redondea tu respuesta al centésimo más cercano.

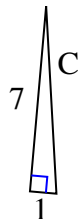
1)



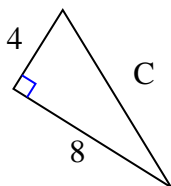
2)



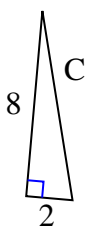
3)



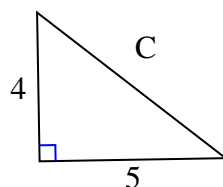
4)



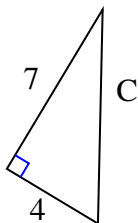
5)



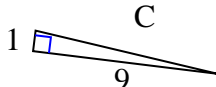
6)



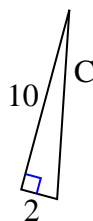
7)



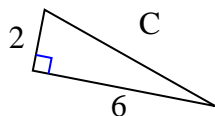
8)



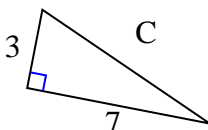
9)



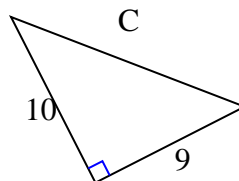
10)



11)



12)



Respuestas

1. _____

2. _____

3. _____

4. _____

5. _____

6. _____

7. _____

8. _____

9. _____

10. _____

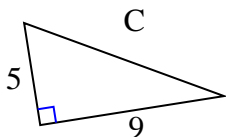
11. _____

12. _____



Encuentra el valor de "C" redondea tu respuesta al centésimo más cercano.

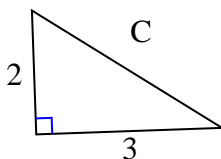
1)



$$25 + 81 = 106$$

$$\sqrt{106} = 10.3$$

2)



$$4 + 9 = 13$$

$$\sqrt{13} = 3.61$$

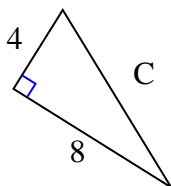
3)



$$49 + 1 = 50$$

$$\sqrt{50} = 7.07$$

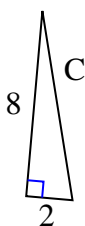
4)



$$16 + 64 = 80$$

$$\sqrt{80} = 8.94$$

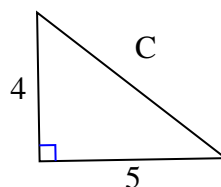
5)



$$64 + 4 = 68$$

$$\sqrt{68} = 8.25$$

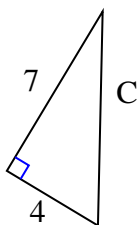
6)



$$16 + 25 = 41$$

$$\sqrt{41} = 6.4$$

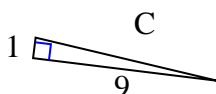
7)



$$49 + 16 = 65$$

$$\sqrt{65} = 8.06$$

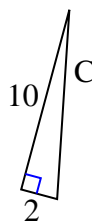
8)



$$1 + 81 = 82$$

$$\sqrt{82} = 9.06$$

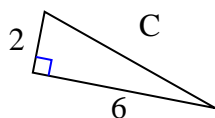
9)



$$100 + 4 = 104$$

$$\sqrt{104} = 10.2$$

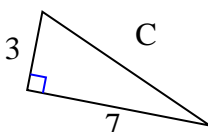
10)



$$4 + 36 = 40$$

$$\sqrt{40} = 6.32$$

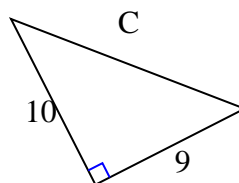
11)



$$9 + 49 = 58$$

$$\sqrt{58} = 7.62$$

12)



$$100 + 81 = 181$$

$$\sqrt{181} = 13.45$$

Respuestas1. 10.32. 3.613. 7.074. 8.945. 8.256. 6.47. 8.068. 9.069. 10.210. 6.3211. 7.6212. 13.45