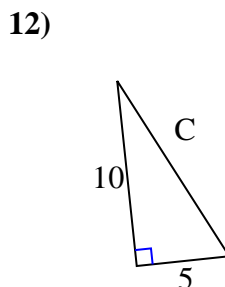
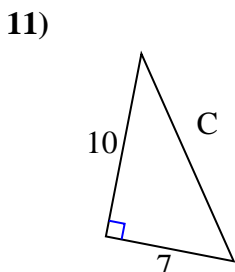
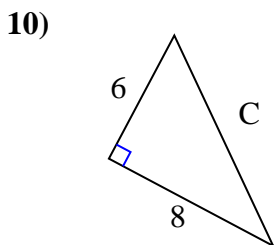
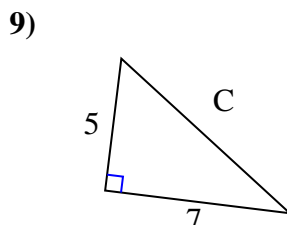
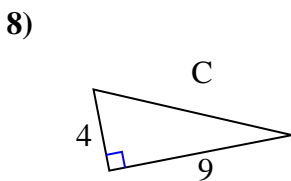
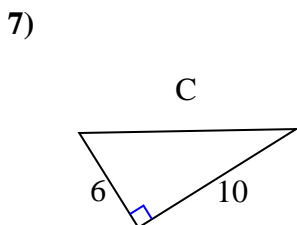
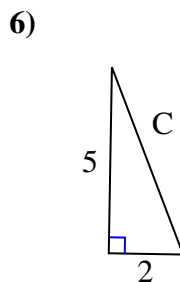
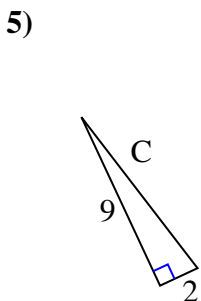
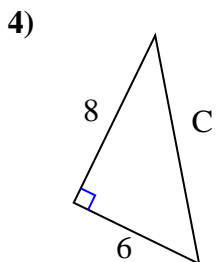
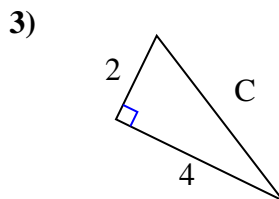
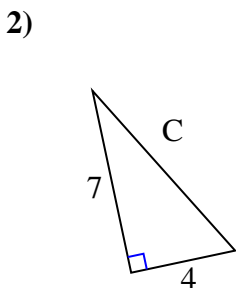
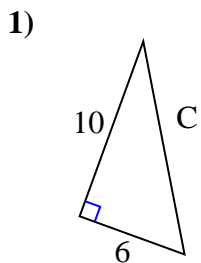




Encuentra el valor de "C" redondea tu respuesta al centésimo más cercano.



Respuestas

1. _____

2. _____

3. _____

4. _____

5. _____

6. _____

7. _____

8. _____

9. _____

10. _____

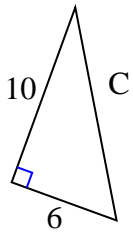
11. _____

12. _____



Encuentra el valor de "C" redondea tu respuesta al centésimo más cercano.

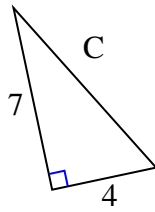
1)



$$100 + 36 = 136$$

$$\sqrt{136} = 11.66$$

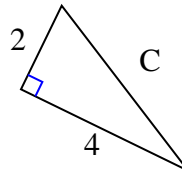
2)



$$49 + 16 = 65$$

$$\sqrt{65} = 8.06$$

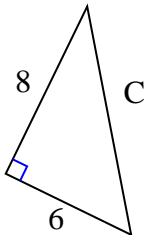
3)



$$4 + 16 = 20$$

$$\sqrt{20} = 4.47$$

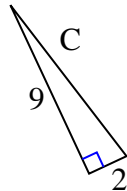
4)



$$64 + 36 = 100$$

$$\sqrt{100} = 10$$

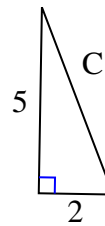
5)



$$81 + 4 = 85$$

$$\sqrt{85} = 9.22$$

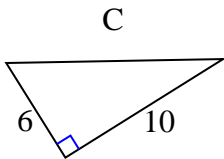
6)



$$25 + 4 = 29$$

$$\sqrt{29} = 5.39$$

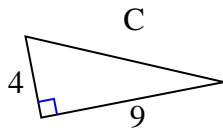
7)



$$36 + 100 = 136$$

$$\sqrt{136} = 11.66$$

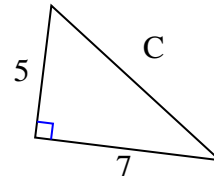
8)



$$16 + 81 = 97$$

$$\sqrt{97} = 9.85$$

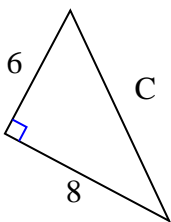
9)



$$25 + 49 = 74$$

$$\sqrt{74} = 8.6$$

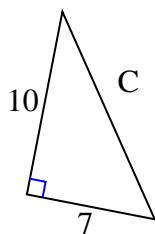
10)



$$36 + 64 = 100$$

$$\sqrt{100} = 10$$

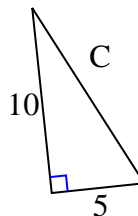
11)



$$100 + 49 = 149$$

$$\sqrt{149} = 12.21$$

12)



$$100 + 25 = 125$$

$$\sqrt{125} = 11.18$$

Respuestas

1. 11.66

2. 8.06

3. 4.47

4. 10

5. 9.22

6. 5.39

7. 11.66

8. 9.85

9. 8.6

10. 10

11. 12.21

12. 11.18