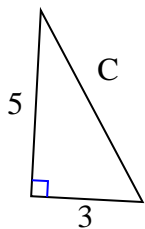




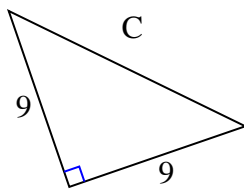
Encuentra el valor de 'C' redondea tu respuesta al centésimo más cercano.

Respuestas

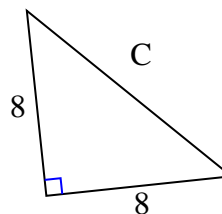
1)



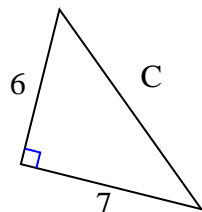
2)



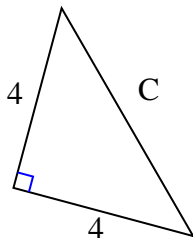
3)



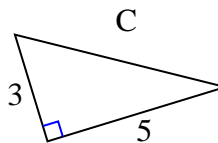
4)



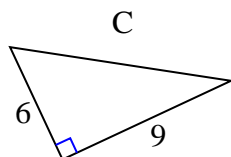
5)



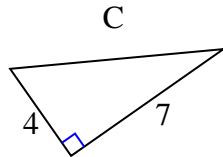
6)



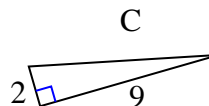
7)



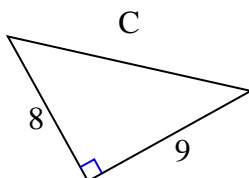
8)



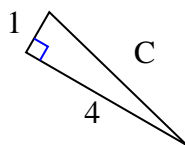
9)



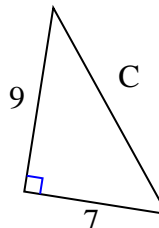
10)



11)



12)



1. _____

2. _____

3. _____

4. _____

5. _____

6. _____

7. _____

8. _____

9. _____

10. _____

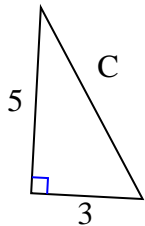
11. _____

12. _____



Encuentra el valor de 'C' redondea tu respuesta al centésimo más cercano.

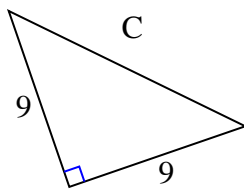
1)



$$25 + 9 = 34$$

$$\sqrt{34} = 5.83$$

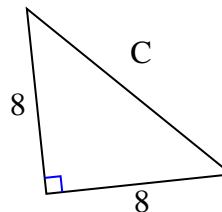
2)



$$81 + 81 = 162$$

$$\sqrt{162} = 12.73$$

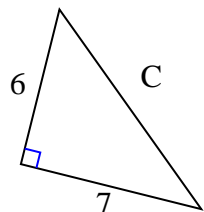
3)



$$64 + 64 = 128$$

$$\sqrt{128} = 11.31$$

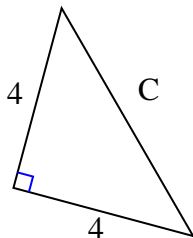
4)



$$36 + 49 = 85$$

$$\sqrt{85} = 9.22$$

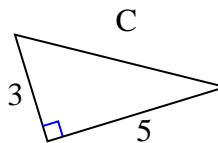
5)



$$16 + 16 = 32$$

$$\sqrt{32} = 5.66$$

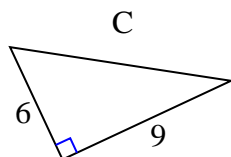
6)



$$9 + 25 = 34$$

$$\sqrt{34} = 5.83$$

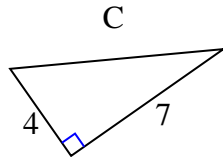
7)



$$36 + 81 = 117$$

$$\sqrt{117} = 10.82$$

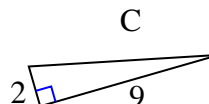
8)



$$16 + 49 = 65$$

$$\sqrt{65} = 8.06$$

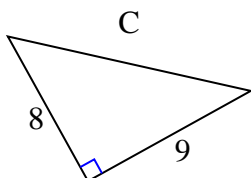
9)



$$4 + 81 = 85$$

$$\sqrt{85} = 9.22$$

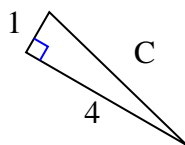
10)



$$64 + 81 = 145$$

$$\sqrt{145} = 12.04$$

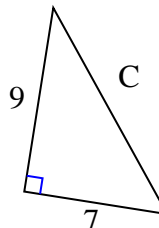
11)



$$1 + 16 = 17$$

$$\sqrt{17} = 4.12$$

12)



$$81 + 49 = 130$$

$$\sqrt{130} = 11.4$$

Respuestas

1. 5.83

2. 12.73

3. 11.31

4. 9.22

5. 5.66

6. 5.83

7. 10.82

8. 8.06

9. 9.22

10. 12.04

11. 4.12

12. 11.4