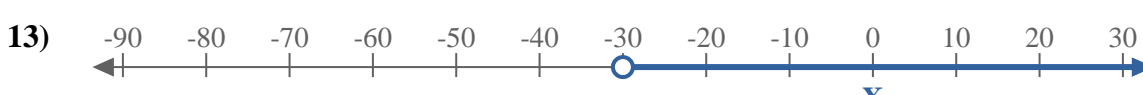
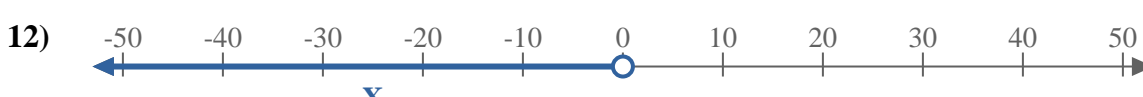

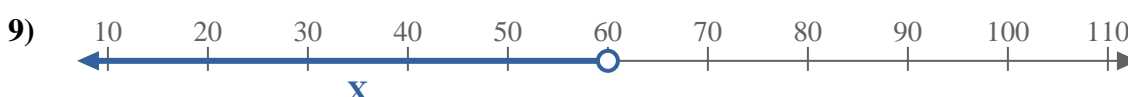
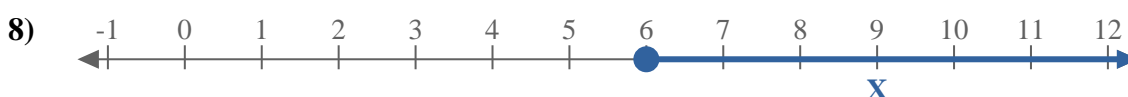
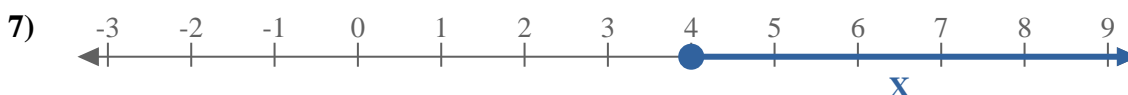
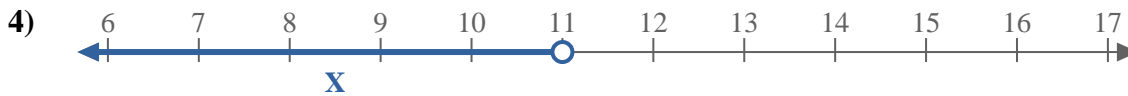
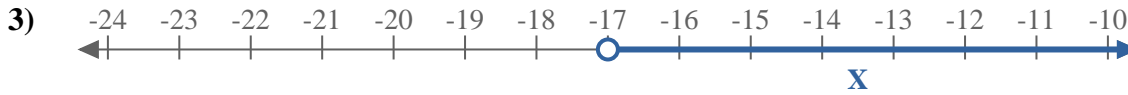
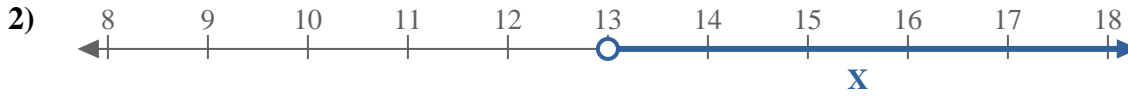
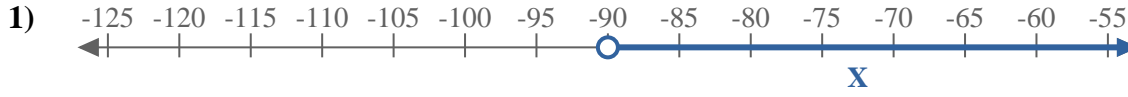
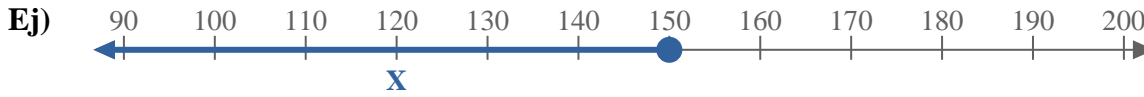




Escribe una inigualdad para expresar la línea de número.



**Respuestas**

Ej.  $X \leq 150$

1. \_\_\_\_\_

2. \_\_\_\_\_

3. \_\_\_\_\_

4. \_\_\_\_\_

5. \_\_\_\_\_

6. \_\_\_\_\_

7. \_\_\_\_\_

8. \_\_\_\_\_

9. \_\_\_\_\_

10. \_\_\_\_\_

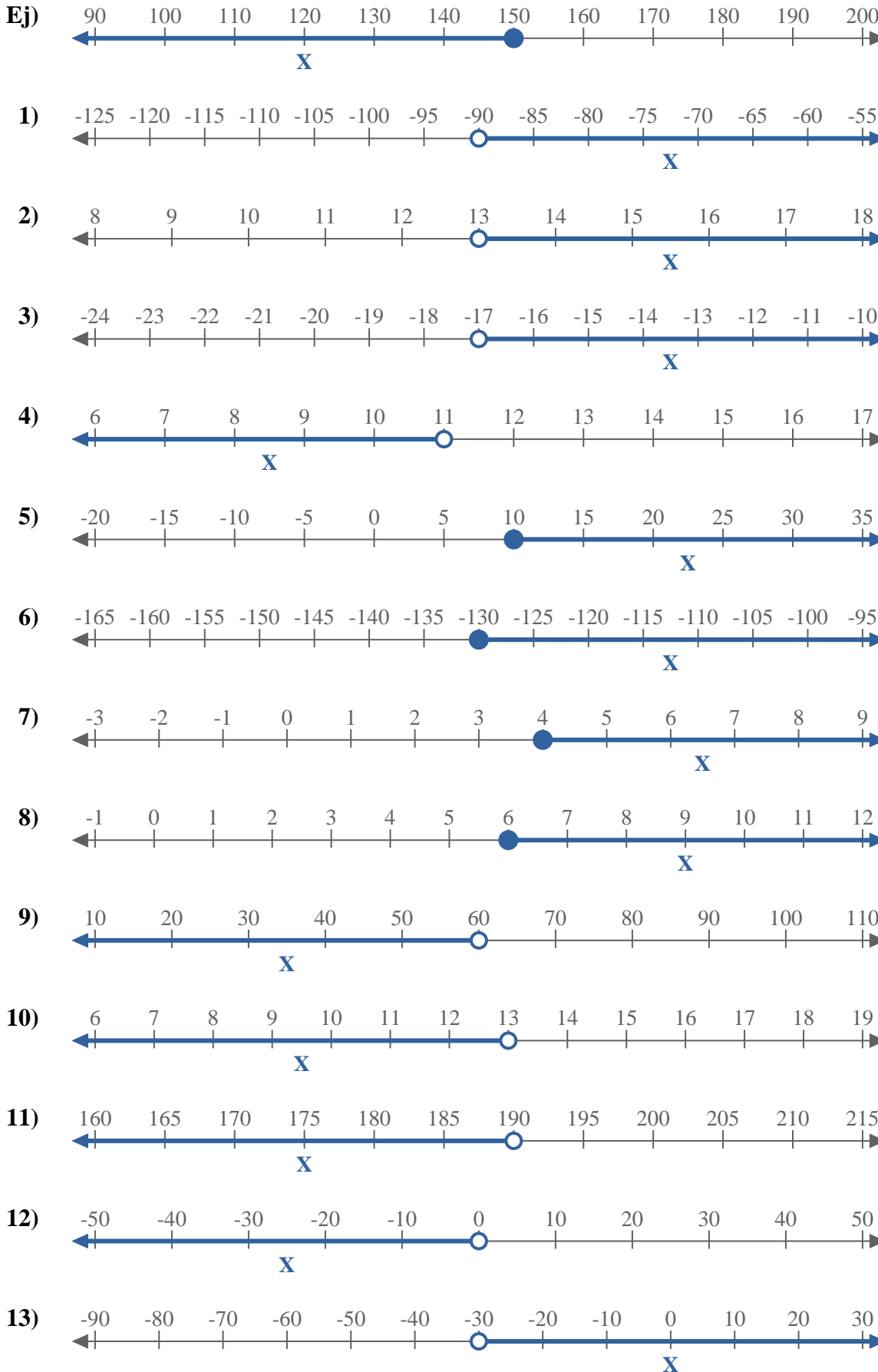
11. \_\_\_\_\_

12. \_\_\_\_\_

13. \_\_\_\_\_



Escribe una inigualdad para expresar la línea de número.



**Respuestas**

- Ej.  $X \leq 150$
- 1.  $X > -90$
- 2.  $X > 13$
- 3.  $X > -17$
- 4.  $X < 11$
- 5.  $X \geq 10$
- 6.  $X \geq -130$
- 7.  $X \geq 4$
- 8.  $X \geq 6$
- 9.  $X < 60$
- 10.  $X < 13$
- 11.  $X < 190$
- 12.  $X < 0$
- 13.  $X > -30$