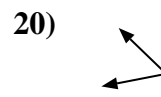
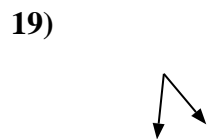
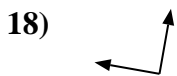
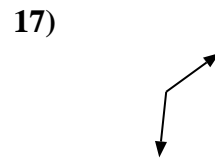
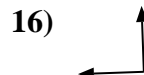
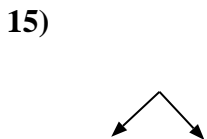
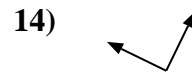
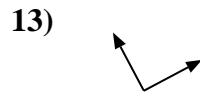
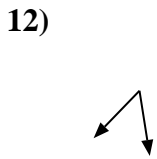
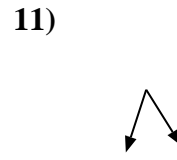
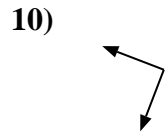

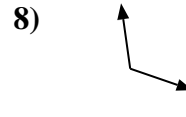
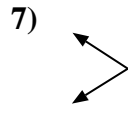
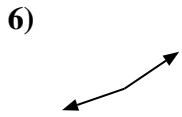
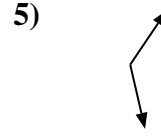
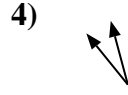
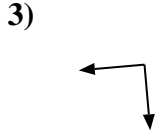
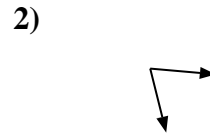
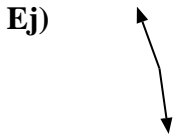




Determina si el ángulo mostrado es "mayor", "menor" o "igual" a 90°.



Respuestas

Ej. mayor

1. _____

2. _____

3. _____

4. _____

5. _____

6. _____

7. _____

8. _____

9. _____

10. _____

11. _____

12. _____

13. _____

14. _____

15. _____

16. _____

17. _____

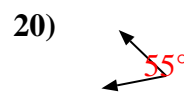
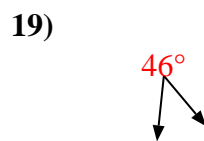
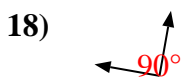
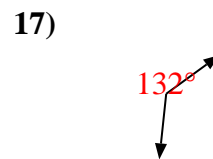
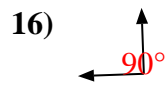
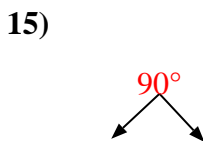
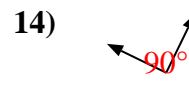
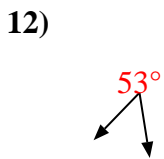
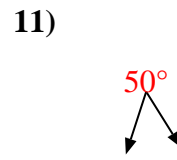
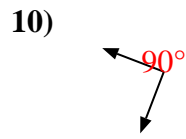
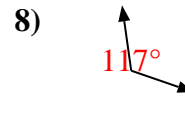
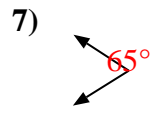
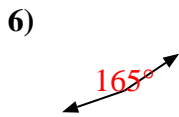
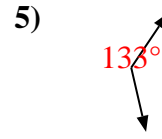
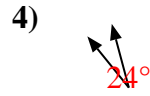
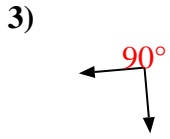
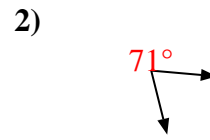
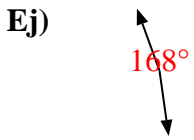
18. _____

19. _____

20. _____



Determina si el ángulo mostrado es "mayor", "menor" o "igual" a 90° .



Respuestas

Ej. mayor

1. mayor

2. menor

3. igual

4. menor

5. mayor

6. mayor

7. menor

8. mayor

9. menor

10. igual

11. menor

12. menor

13. igual

14. igual

15. igual

16. igual

17. mayor

18. igual

19. menor

20. menor