
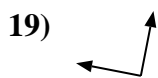
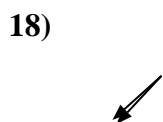
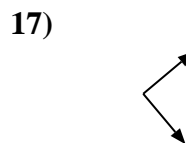
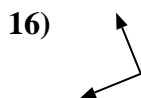
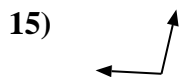
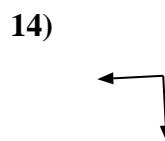
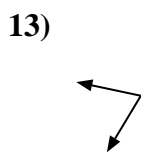
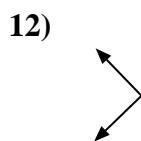
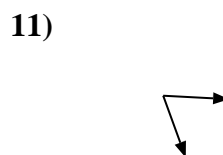
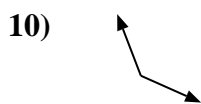
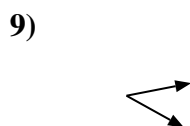
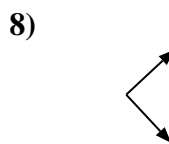
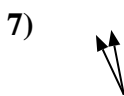
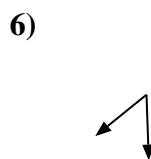
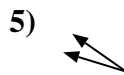
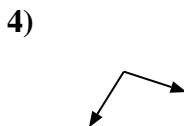
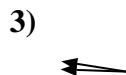
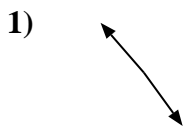
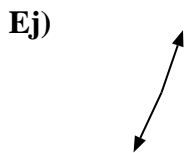




Determina si el ángulo mostrado es "mayor", "menor" o "igual" a 90°.



**Respuestas**

Ej. mayor

1. \_\_\_\_\_

2. \_\_\_\_\_

3. \_\_\_\_\_

4. \_\_\_\_\_

5. \_\_\_\_\_

6. \_\_\_\_\_

7. \_\_\_\_\_

8. \_\_\_\_\_

9. \_\_\_\_\_

10. \_\_\_\_\_

11. \_\_\_\_\_

12. \_\_\_\_\_

13. \_\_\_\_\_

14. \_\_\_\_\_

15. \_\_\_\_\_

16. \_\_\_\_\_

17. \_\_\_\_\_

18. \_\_\_\_\_

19. \_\_\_\_\_

20. \_\_\_\_\_



Determina si el ángulo mostrado es "mayor", "menor" o "igual" a  $90^\circ$ .

Ej)



1)



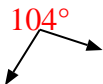
2)



3)



4)



5)



6)



7)



8)



9)



10)



11)



12)



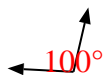
13)



14)



15)



16)



17)



18)



19)



20)



**Respuestas**

Ej. mayor

1. mayor

2. mayor

3. menor

4. mayor

5. menor

6. menor

7. menor

8. igual

9. menor

10. mayor

11. menor

12. igual

13. menor

14. igual

15. mayor

16. igual

17. igual

18. menor

19. igual

20. igual