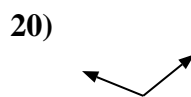
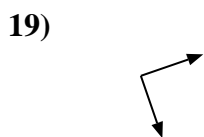
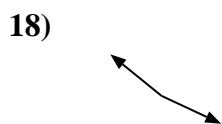
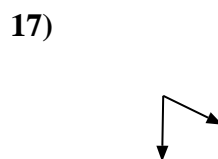

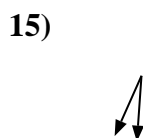

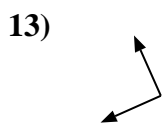
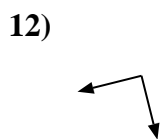
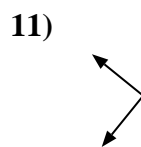
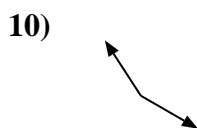
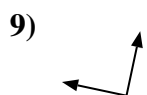
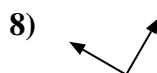
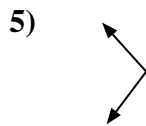
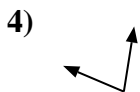
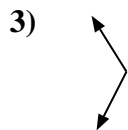
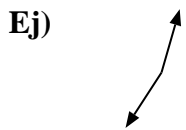




Determina si el ángulo mostrado es "mayor", "menor" o "igual" a 90°.



**Respuestas**

Ej. mayor

1. \_\_\_\_\_

2. \_\_\_\_\_

3. \_\_\_\_\_

4. \_\_\_\_\_

5. \_\_\_\_\_

6. \_\_\_\_\_

7. \_\_\_\_\_

8. \_\_\_\_\_

9. \_\_\_\_\_

10. \_\_\_\_\_

11. \_\_\_\_\_

12. \_\_\_\_\_

13. \_\_\_\_\_

14. \_\_\_\_\_

15. \_\_\_\_\_

16. \_\_\_\_\_

17. \_\_\_\_\_

18. \_\_\_\_\_

19. \_\_\_\_\_

20. \_\_\_\_\_



Determina si el ángulo mostrado es "mayor", "menor" o "igual" a  $90^\circ$ .

Ej)



1)



2)



3)



4)



5)



6)



7)



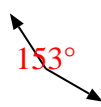
8)



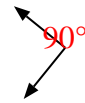
9)



10)



11)



12)



13)



14)



15)



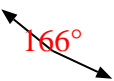
16)



17)



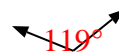
18)



19)



20)



**Respuestas**

Ej. mayor

1. menor

2. igual

3. mayor

4. menor

5. mayor

6. igual

7. menor

8. igual

9. igual

10. mayor

11. igual

12. igual

13. igual

14. menor

15. menor

16. menor

17. menor

18. mayor

19. igual

20. mayor