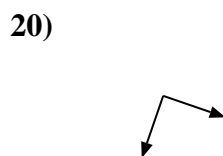
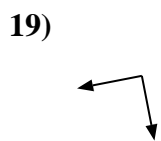
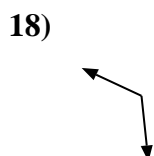
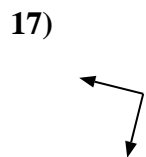
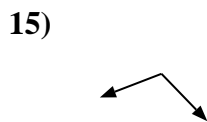
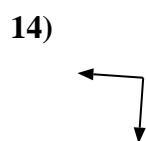
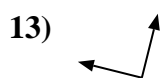
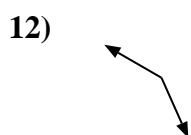
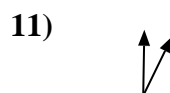
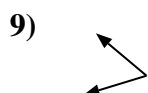
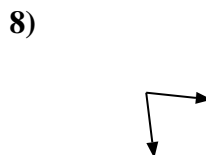

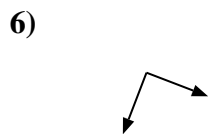
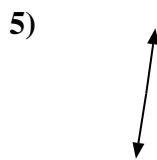
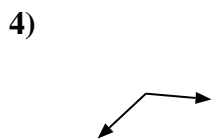
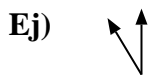




Determina si el ángulo mostrado es "mayor", "menor" o "igual" a 90°.



**Respuestas**

Ej. menor

1. \_\_\_\_\_

2. \_\_\_\_\_

3. \_\_\_\_\_

4. \_\_\_\_\_

5. \_\_\_\_\_

6. \_\_\_\_\_

7. \_\_\_\_\_

8. \_\_\_\_\_

9. \_\_\_\_\_

10. \_\_\_\_\_

11. \_\_\_\_\_

12. \_\_\_\_\_

13. \_\_\_\_\_

14. \_\_\_\_\_

15. \_\_\_\_\_

16. \_\_\_\_\_

17. \_\_\_\_\_

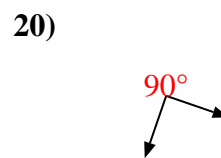
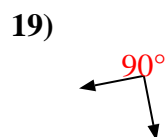
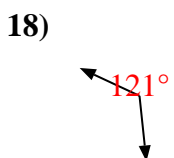
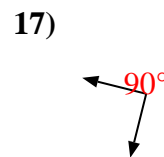
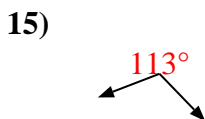
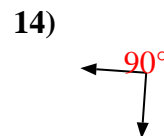
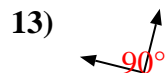
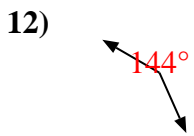
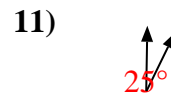
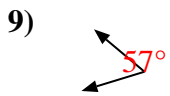
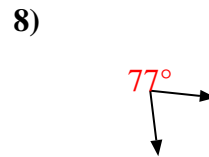
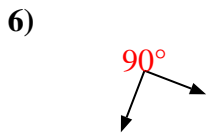
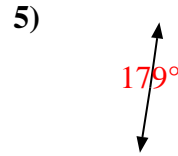
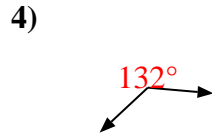
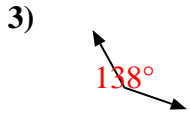
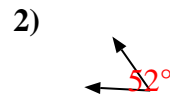
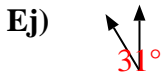
18. \_\_\_\_\_

19. \_\_\_\_\_

20. \_\_\_\_\_



Determina si el ángulo mostrado es "mayor", "menor" o "igual" a  $90^\circ$ .



**Respuestas**

Ej. menor

1. igual

2. menor

3. mayor

4. mayor

5. mayor

6. igual

7. menor

8. menor

9. menor

10. menor

11. menor

12. mayor

13. igual

14. igual

15. mayor

16. menor

17. igual

18. mayor

19. igual

20. igual