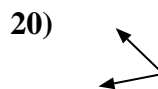
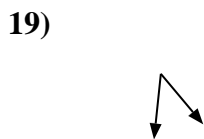
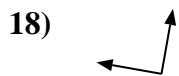
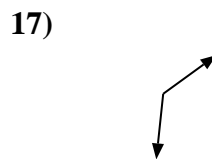
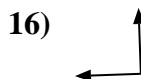
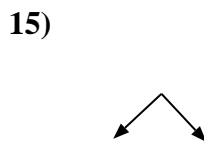
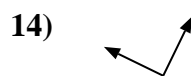
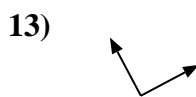
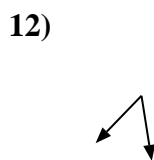
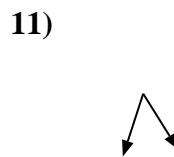
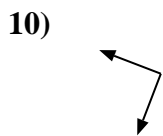
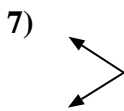
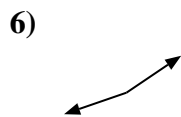
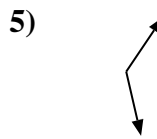
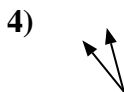
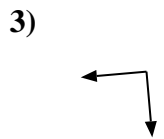
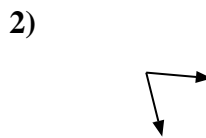
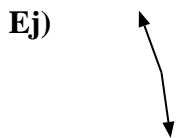




Determina si el ángulo mostrado es "mayor", "menor" o "igual" a 90°.



Respuestas

Ej. mayor

1. _____

2. _____

3. _____

4. _____

5. _____

6. _____

7. _____

8. _____

9. _____

10. _____

11. _____

12. _____

13. _____

14. _____

15. _____

16. _____

17. _____

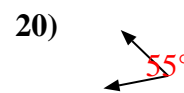
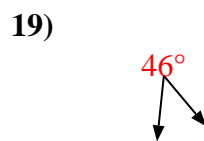
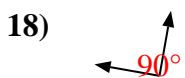
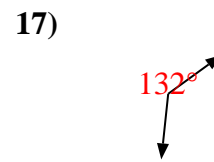
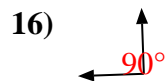
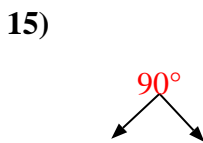
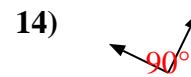
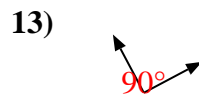
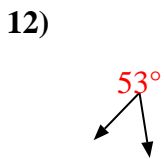
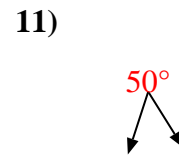
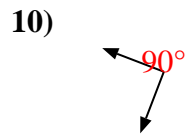
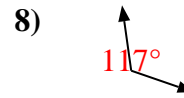
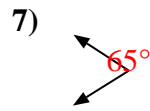
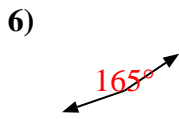
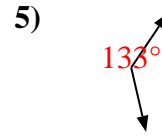
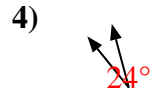
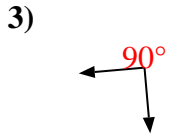
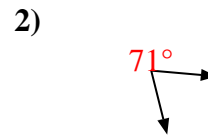
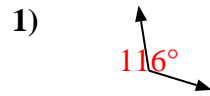
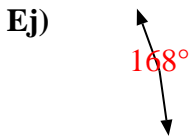
18. _____

19. _____

20. _____



Determina si el ángulo mostrado es "mayor", "menor" o "igual" a 90° .



Respuestas

Ej. mayor

1. mayor

2. menor

3. igual

4. menor

5. mayor

6. mayor

7. menor

8. mayor

9. menor

10. igual

11. menor

12. menor

13. igual

14. igual

15. igual

16. igual

17. mayor

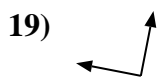
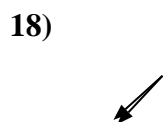
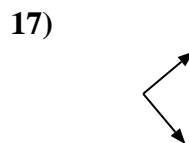
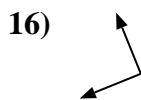
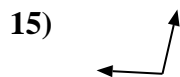
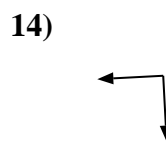
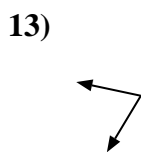
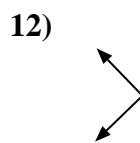
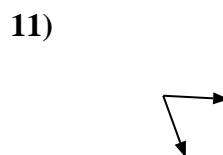
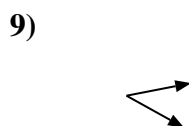
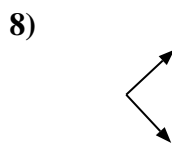
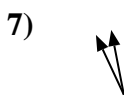
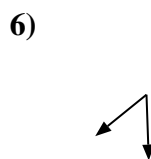
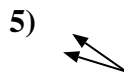
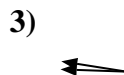
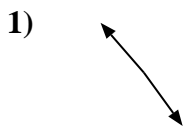
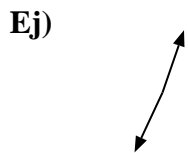
18. igual

19. menor

20. menor



Determina si el ángulo mostrado es "mayor", "menor" o "igual" a 90°.



Respuestas

Ej. mayor

1. _____

2. _____

3. _____

4. _____

5. _____

6. _____

7. _____

8. _____

9. _____

10. _____

11. _____

12. _____

13. _____

14. _____

15. _____

16. _____

17. _____

18. _____

19. _____

20. _____



Determina si el ángulo mostrado es "mayor", "menor" o "igual" a 90° .

Ej)



1)



2)



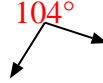
Respuestas

Ej. mayor

3)



4)



5)



1. mayor

6)



7)



8)



2. mayor

3. menor

4. mayor

5. menor

6. menor

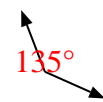
7. menor

8. igual

9)



10)



11)



9. menor

10. mayor

11. menor

12)



13)



14)

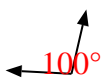


12. igual

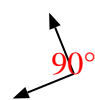
13. menor

14. igual

15)



16)



17)



15. mayor

16. igual

17. igual

18)



19)



20)



18. menor

19. igual

20. igual



Determina si el ángulo mostrado es "mayor", "menor" o "igual" a 90°.

Ej)



1)



2)



3)



4)



5)



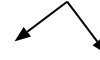
6)



7)



8)



9)



10)



11)



12)



13)



14)



15)



16)



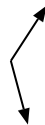
17)



18)



19)



20)



Respuestas

Ej. igual

1. _____

2. _____

3. _____

4. _____

5. _____

6. _____

7. _____

8. _____

9. _____

10. _____

11. _____

12. _____

13. _____

14. _____

15. _____

16. _____

17. _____

18. _____

19. _____

20. _____



Determina si el ángulo mostrado es "mayor", "menor" o "igual" a 90° .

Ej)



1)



2)



Respuestas

Ej. igual

3)



4)



5)



1. mayor

2. mayor

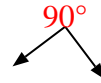
6)



7)



8)



3. igual

4. mayor

5. menor

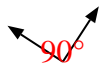
6. menor

7. igual

9)



10)



11)



8. igual

9. mayor

10. igual

11. menor

12)



13)



14)



12. menor

13. igual

14. menor

15)



16)



17)



15. igual

16. mayor

17. menor

18)



19)



20)



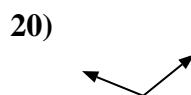
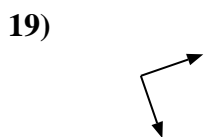
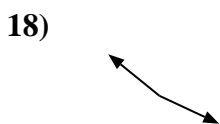
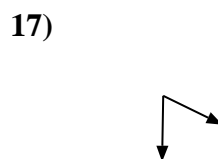

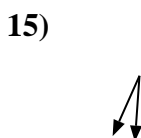

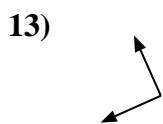
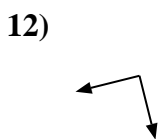
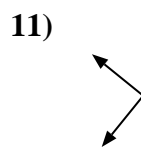
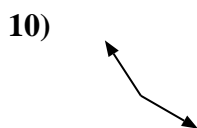
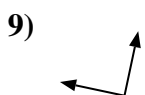
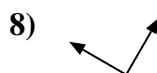
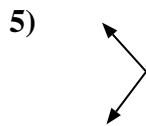
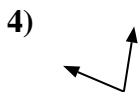
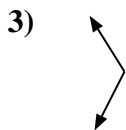
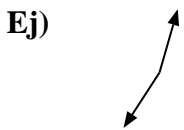
18. menor

19. mayor

20. menor



Determina si el ángulo mostrado es "mayor", "menor" o "igual" a 90°.



Respuestas

Ej. mayor

1. _____

2. _____

3. _____

4. _____

5. _____

6. _____

7. _____

8. _____

9. _____

10. _____

11. _____

12. _____

13. _____

14. _____

15. _____

16. _____

17. _____

18. _____

19. _____

20. _____



Determina si el ángulo mostrado es "mayor", "menor" o "igual" a 90° .

Ej)



1)



2)



3)



4)



5)



6)



7)



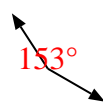
8)



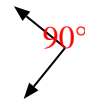
9)



10)



11)



12)



13)



14)



15)



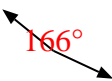
16)



17)



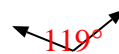
18)



19)



20)



Respuestas

Ej. mayor

1. menor

2. igual

3. mayor

4. menor

5. mayor

6. igual

7. menor

8. igual

9. igual

10. mayor

11. igual

12. igual

13. igual

14. menor

15. menor

16. menor

17. menor

18. mayor

19. igual

20. mayor

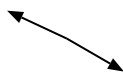


Determina si el ángulo mostrado es "mayor", "menor" o "igual" a 90°.

Ej)



1)



2)



Respuestas

Ej. menor

1. _____

2. _____

3)



4)



5)



3. _____

4. _____

6)



7)



8)



5. _____

6. _____

7. _____

9)



10)



11)



8. _____

9. _____

10. _____

12)



13)



14)



11. _____

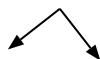
12. _____

13. _____

15)



16)



17)

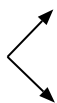


14. _____

15. _____

16. _____

18)



19)



20)



17. _____

18. _____

19. _____

20. _____

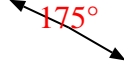


Determina si el ángulo mostrado es "mayor", "menor" o "igual" a 90° .

Ej)



1)



2)



Respuestas

Ej. menor

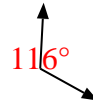
3)



4)



5)



1. mayor

2. mayor

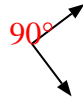
3. menor

4. menor

6)



7)



8)

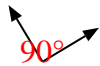


5. mayor

6. igual

7. igual

9)



10)



11)



8. menor

9. igual

10. mayor

12)



13)



14)



11. mayor

12. menor

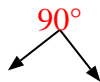
13. mayor

14. menor

15)



16)



17)



15. igual

16. igual

17. igual

18)



19)



20)



18. igual

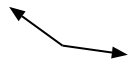
19. menor

20. igual



Determina si el ángulo mostrado es "mayor", "menor" o "igual" a 90°.

Ej)



1)



2)



3)



4)



5)



6)



7)



8)



9)



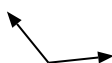
10)



11)



12)



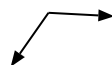
13)



14)



15)



16)



17)



18)



19)



20)



Respuestas

Ej. mayor

1. _____

2. _____

3. _____

4. _____

5. _____

6. _____

7. _____

8. _____

9. _____

10. _____

11. _____

12. _____

13. _____

14. _____

15. _____

16. _____

17. _____

18. _____

19. _____

20. _____



Determina si el ángulo mostrado es "mayor", "menor" o "igual" a 90° .

Ej)



1)



2)



3)



4)



5)



6)



7)



8)



9)



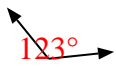
10)



11)



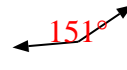
12)



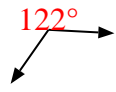
13)



14)



15)



16)



17)



18)



19)



20)



Respuestas

Ej. mayor

1. mayor

2. mayor

3. igual

4. igual

5. menor

6. menor

7. menor

8. menor

9. menor

10. menor

11. menor

12. mayor

13. mayor

14. mayor

15. mayor

16. igual

17. igual

18. igual

19. igual

20. igual



Determina si el ángulo mostrado es "mayor", "menor" o "igual" a 90°.

Ej)



1)



2)



3)



4)



5)



6)



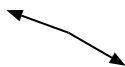
7)



8)



9)



10)



11)



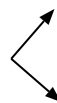
12)



13)



14)



15)



16)



17)



18)



19)



20)



Respuestas

Ej. menor

1. _____

2. _____

3. _____

4. _____

5. _____

6. _____

7. _____

8. _____

9. _____

10. _____

11. _____

12. _____

13. _____

14. _____

15. _____

16. _____

17. _____

18. _____

19. _____

20. _____

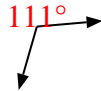


Determina si el ángulo mostrado es "mayor", "menor" o "igual" a 90° .

Ej)



1)



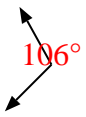
2)



Respuestas

Ej. menor

3)



4)



5)



1. mayor

2. igual

3. mayor

4. menor

5. igual

6)



7)



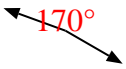
8)



6. igual

7. mayor

9)



10)



11)



8. menor

9. mayor

10. mayor

11. menor

12)



13)



14)



12. mayor

13. igual

14. igual

15)



16)



17)



15. menor

16. menor

17. mayor

18)



19)



20)



18. menor

19. menor

20. igual



Determina si el ángulo mostrado es "mayor", "menor" o "igual" a 90°.

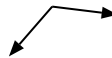
Ej)



1)



2)



Respuestas

Ej. menor

3)



4)



5)



1. _____

6)



7)



8)



2. _____

9)



10)



11)



3. _____

12)



13)



14)



4. _____

15)



16)



17)



5. _____

18)



19)



20)



6. _____

7. _____

8. _____

9. _____

10. _____

11. _____

12. _____

13. _____

14. _____

15. _____

16. _____

17. _____

18. _____

19. _____

20. _____



Determina si el ángulo mostrado es "mayor", "menor" o "igual" a 90° .

Ej)



1)



2)



Respuestas

Ej. menor

3)



4)



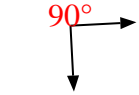
5)



1. menor

2. mayor

6)



7)



8)



3. igual

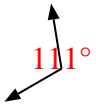
4. igual

5. mayor

6. igual

7. mayor

9)



10)



11)



8. menor

9. mayor

10. menor

11. menor

12)



13)



14)



12. igual

13. mayor

14. mayor

15)



16)



17)



15. igual

16. menor

17. igual

18)



19)



20)



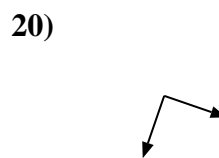
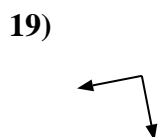
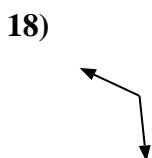
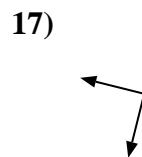
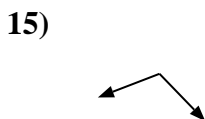
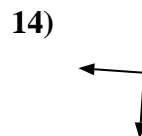
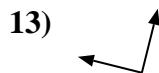
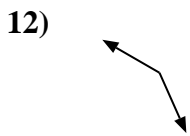
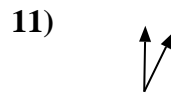

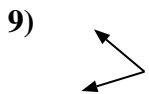
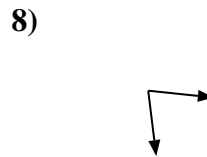
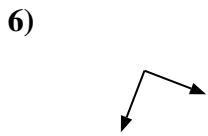
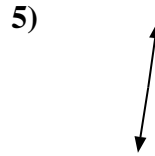
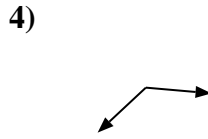
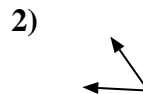
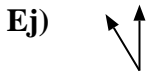
18. menor

19. igual

20. igual



Determina si el ángulo mostrado es "mayor", "menor" o "igual" a 90°.



Respuestas

Ej. menor

1. _____

2. _____

3. _____

4. _____

5. _____

6. _____

7. _____

8. _____

9. _____

10. _____

11. _____

12. _____

13. _____

14. _____

15. _____

16. _____

17. _____

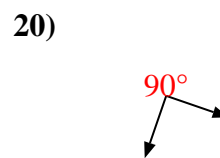
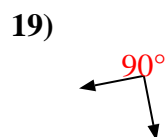
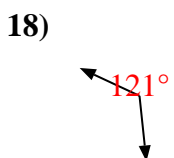
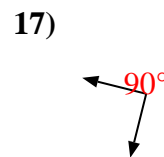
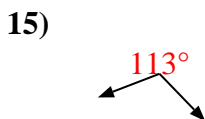
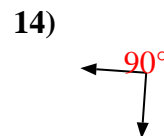
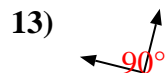
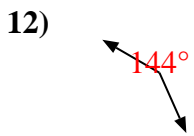
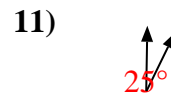
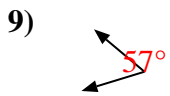
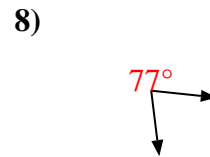
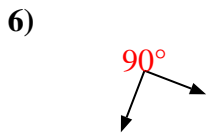
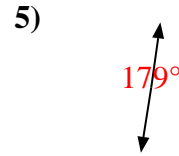
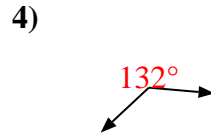
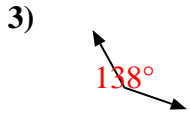
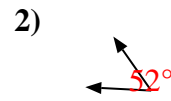
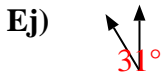
18. _____

19. _____

20. _____



Determina si el ángulo mostrado es "mayor", "menor" o "igual" a 90° .



Respuestas

Ej. menor

1. igual

2. menor

3. mayor

4. mayor

5. mayor

6. igual

7. menor

8. menor

9. menor

10. menor

11. menor

12. mayor

13. igual

14. igual

15. mayor

16. menor

17. igual

18. mayor

19. igual

20. igual



Determina si el ángulo mostrado es "mayor", "menor" o "igual" a 90°.

Ej)



1)



2)



3)



4)



5)



6)



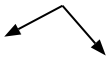
7)



8)



9)



10)



11)



12)



13)



14)



15)



16)



17)



18)



19)



20)



Respuestas

Ej. menor

1. _____

2. _____

3. _____

4. _____

5. _____

6. _____

7. _____

8. _____

9. _____

10. _____

11. _____

12. _____

13. _____

14. _____

15. _____

16. _____

17. _____

18. _____

19. _____

20. _____



Determina si el ángulo mostrado es "mayor", "menor" o "igual" a 90° .

Ej)



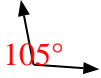
1)



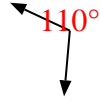
2)



3)



4)



5)



6)



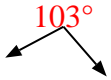
7)



8)



9)



10)



11)




12)



13)



14)



15)



16)



17)



18)



19)



20)



Respuestas

Ej. menor

1. igual

2. mayor

3. mayor

4. mayor

5. menor

6. igual

7. menor

8. igual

9. mayor

10. igual

11. mayor

12. menor

13. igual

14. mayor

15. menor

16. igual

17. igual

18. igual

19. menor

20. menor