



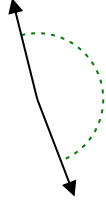
Determina si el ángulo mostrado es agudo, obtuso, derecho o recto.

Respuestas

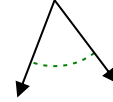
Ej)



1)



2)

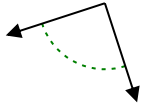


Ej. agudo

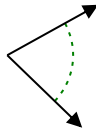
1. _____

2. _____

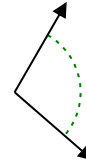
3)



4)



5)

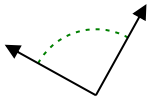


3. _____

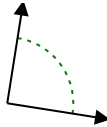
4. _____

5. _____

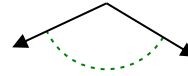
6)



7)



8)

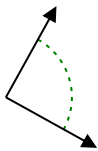


6. _____

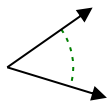
7. _____

8. _____

9)



10)



11)



9. _____

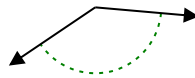
10. _____

11. _____

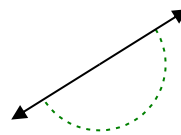
12)



13)



14)



12. _____

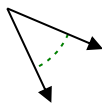
13. _____

14. _____

15)



16)



17)

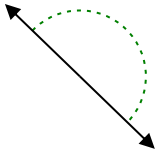


15. _____

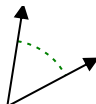
16. _____

17. _____

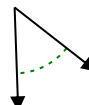
18)



19)



20)



18. _____

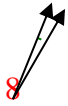
19. _____

20. _____

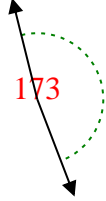


Determina si el ángulo mostrado es agudo, obtuso, derecho o recto.

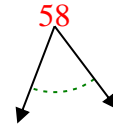
Ej)



1)



2)



Respuestas

Ej. agudo

1. obtuso

2. agudo

3. derecho

4. agudo

5. obtuso

6. derecho

7. derecho

8. obtuso

9. derecho

10. agudo

11. derecho

12. obtuso

13. obtuso

14. recto

15. obtuso

16. agudo

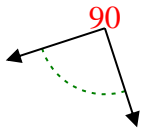
17. obtuso

18. recto

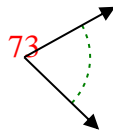
19. agudo

20. agudo

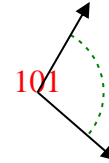
3)



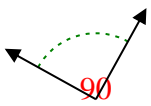
4)



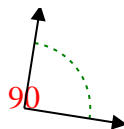
5)



6)



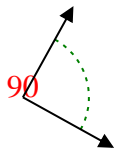
7)



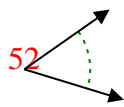
8)



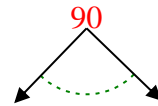
9)



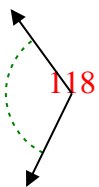
10)



11)



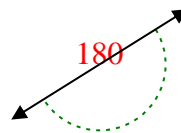
12)



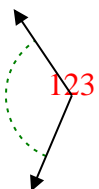
13)



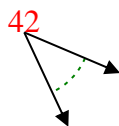
14)



15)



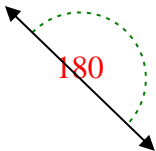
16)



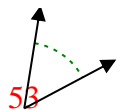
17)



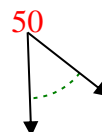
18)



19)



20)



1-10	95	90	85	80	75	70	65	60	55	50
11-20	45	40	35	30	25	20	15	10	5	0