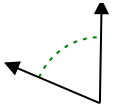




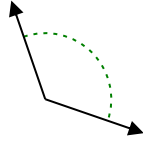
Determina si el ángulo mostrado es agudo, obtuso, derecho o recto.

**Respuestas**

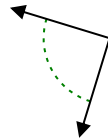
Ej)



1)



2)



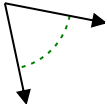
Ej.

**agudo**

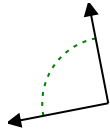
1.

2.

3)



4)



5)

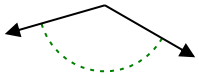


3.

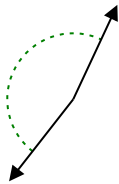
4.

5.

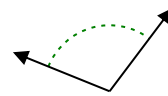
6)



7)



8)

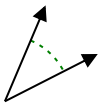


6.

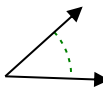
7.

8.

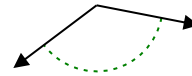
9)



10)



11)

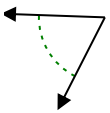


9.

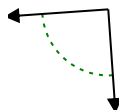
10.

11.

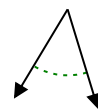
12)



13)



14)

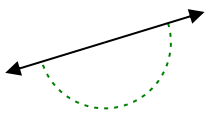


12.

13.

14.

15)



16)



17)

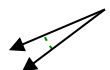


15.

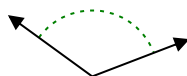
16.

17.

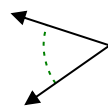
18)



19)



20)



18.

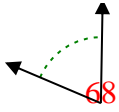
19.

20.

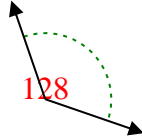


Determina si el ángulo mostrado es agudo, obtuso, derecho o recto.

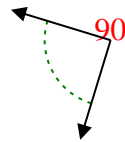
Ej)



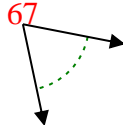
1)



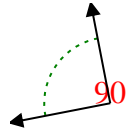
2)



3)



4)



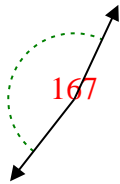
5)



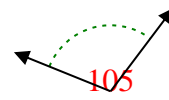
6)



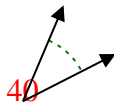
7)



8)



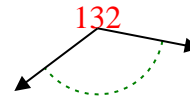
9)



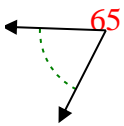
10)



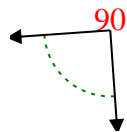
11)



12)



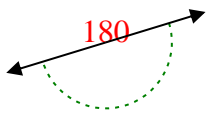
13)



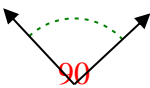
14)



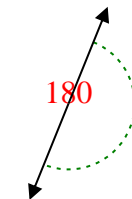
15)



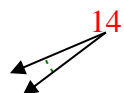
16)



17)



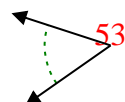
18)



19)



20)



Respuestas

Ej. agudo

1. obtuso

2. derecho

3. agudo

4. derecho

5. obtuso

6. obtuso

7. obtuso

8. obtuso

9. agudo

10. agudo

11. obtuso

12. agudo

13. derecho

14. agudo

15. recto

16. derecho

17. recto

18. agudo

19. obtuso

20. agudo