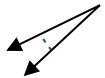




Determina si el ángulo mostrado es agudo, obtuso, derecho o recto.

Respuestas

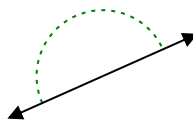
Ej)



1)



2)

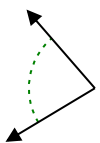


Ej. agudo

1. _____

2. _____

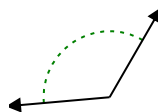
3)



4)



5)

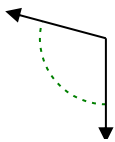


3. _____

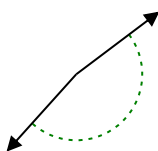
4. _____

5. _____

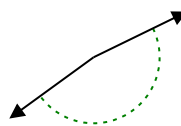
6)



7)



8)

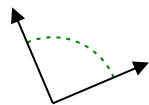


6. _____

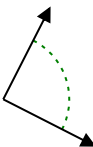
7. _____

8. _____

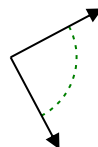
9)



10)



11)

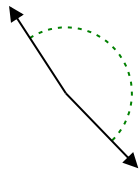


9. _____

10. _____

11. _____

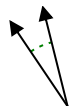
12)



13)



14)

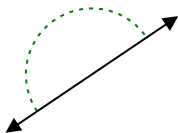


12. _____

13. _____

14. _____

15)



16)



17)

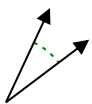


15. _____

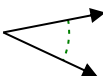
16. _____

17. _____

18)



19)



20)



18. _____

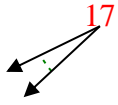
19. _____

20. _____

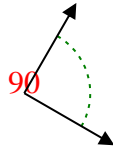


Determina si el ángulo mostrado es agudo, obtuso, derecho o recto.

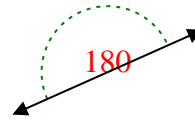
Ej)



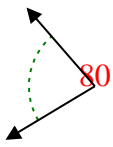
1)



2)



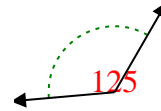
3)



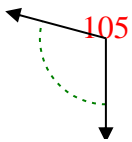
4)



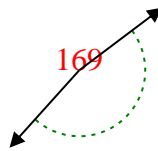
5)



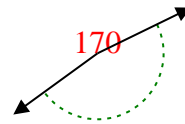
6)



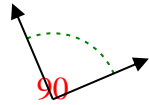
7)



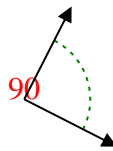
8)



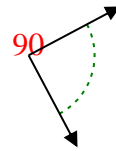
9)



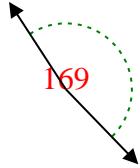
10)



11)



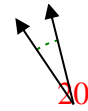
12)



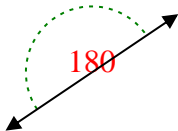
13)



14)



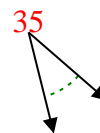
15)



16)



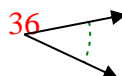
17)



18)



19)



20)



Respuestas

- Ej. agudo
- 1. derecho
- 2. recto
- 3. agudo
- 4. obtuso
- 5. obtuso
- 6. obtuso
- 7. obtuso
- 8. obtuso
- 9. derecho
- 10. derecho
- 11. derecho
- 12. obtuso
- 13. agudo
- 14. agudo
- 15. recto
- 16. agudo
- 17. agudo
- 18. agudo
- 19. agudo
- 20. obtuso