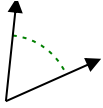




Determina si el ángulo mostrado es agudo, obtuso, derecho o recto.

Respuestas

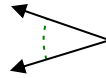
Ej)



1)



2)

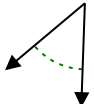


Ej. agudo

1. _____

2. _____

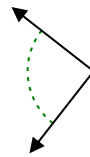
3)



4)



5)



3. _____

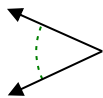
4. _____

5. _____

6)



7)



8)

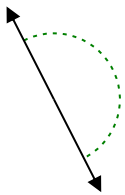


6. _____

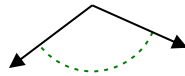
7. _____

8. _____

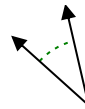
9)



10)



11)

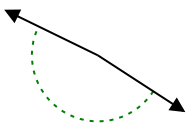


9. _____

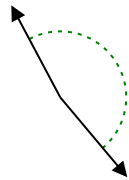
10. _____

11. _____

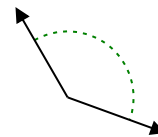
12)



13)



14)

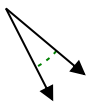


12. _____

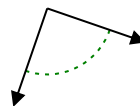
13. _____

14. _____

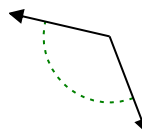
15)



16)



17)



15. _____

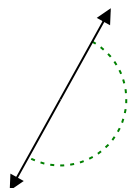
16. _____

17. _____

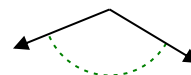
18)



19)



20)



18. _____

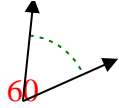
19. _____

20. _____



Determina si el ángulo mostrado es agudo, obtuso, derecho o recto.

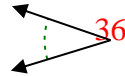
Ej)



1)



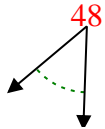
2)



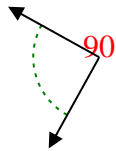
Ej.

agudo

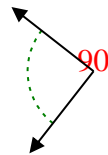
3)



4)



5)



1.

obtuso

2.

agudo

3.

agudo

4.

derecho

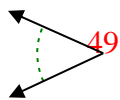
5.

derecho

6)



7)



8)



6.

agudo

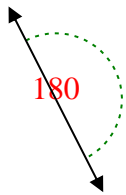
7.

agudo

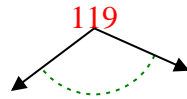
8.

derecho

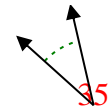
9)



10)



11)



9.

recto

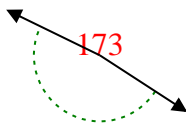
10.

obtuso

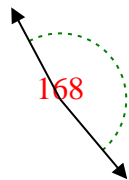
11.

agudo

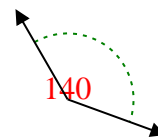
12)



13)



14)



12.

obtuso

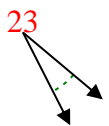
13.

obtuso

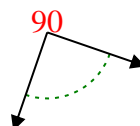
14.

obtuso

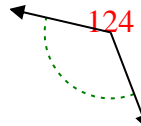
15)



16)



17)



15.

agudo

16.

derecho

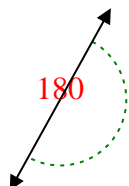
17.

obtuso

18)



19)



20)



18.

agudo

19.

recto

20.

obtuso