

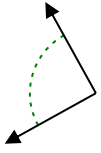


Determina si el ángulo mostrado es agudo, obtuso, derecho o recto.

Respuestas

derecho

Ej)



1)



2)

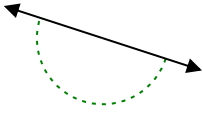


Ej. _____

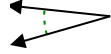
1. _____

2. _____

3)



4)



5)

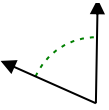


3. _____

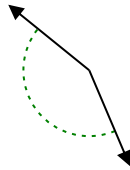
4. _____

5. _____

6)



7)



8)

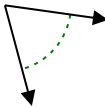


6. _____

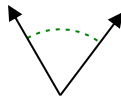
7. _____

8. _____

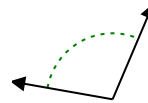
9)



10)



11)

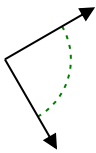


9. _____

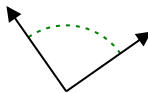
10. _____

11. _____

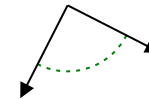
12)



13)



14)



12. _____

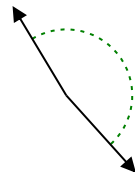
13. _____

14. _____

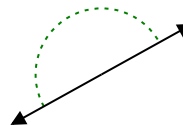
15)



16)



17)



15. _____

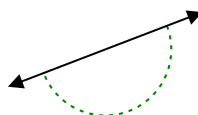
16. _____

17. _____

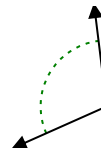
18)



19)



20)



18. _____

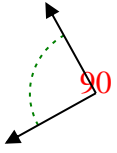
19. _____

20. _____

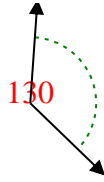


Determina si el ángulo mostrado es agudo, obtuso, derecho o recto.

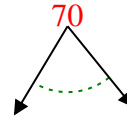
Ej)



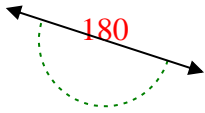
1)



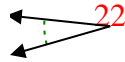
2)



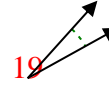
3)



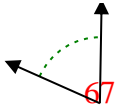
4)



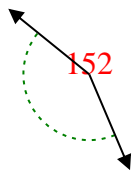
5)



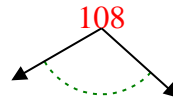
6)



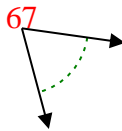
7)



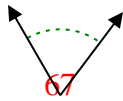
8)



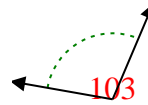
9)



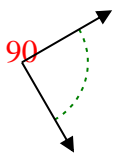
10)



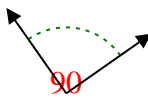
11)



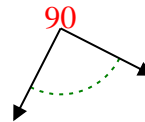
12)



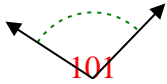
13)



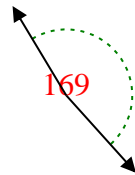
14)



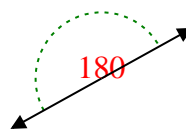
15)



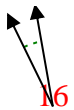
16)



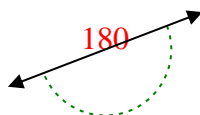
17)



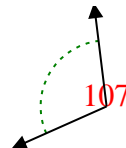
18)



19)



20)



Respuestas

Ej. derecho

1. obtuso

2. agudo

3. recto

4. agudo

5. agudo

6. agudo

7. obtuso

8. obtuso

9. agudo

10. agudo

11. obtuso

12. derecho

13. derecho

14. derecho

15. obtuso

16. obtuso

17. recto

18. agudo

19. recto

20. obtuso