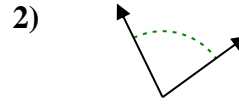
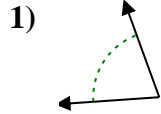
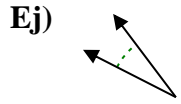




Determina si el ángulo mostrado es agudo, obtuso, derecho o recto.

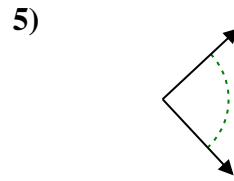
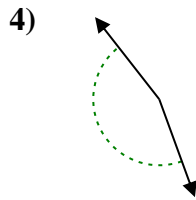
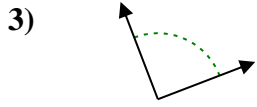
Respuestas



Ej. agudo

1. _____

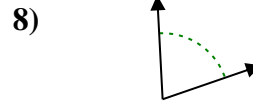
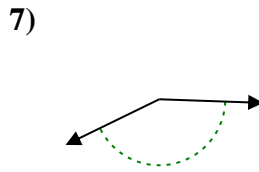
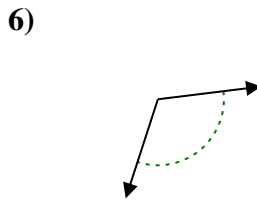
2. _____



3. _____

4. _____

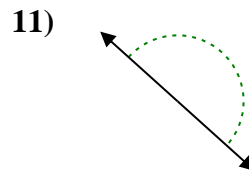
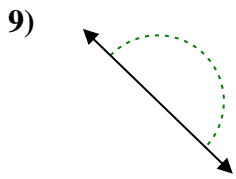
5. _____



6. _____

7. _____

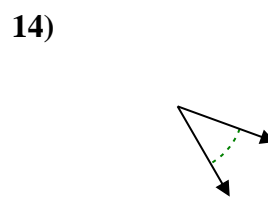
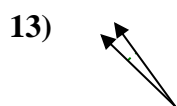
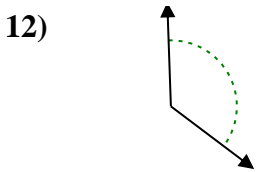
8. _____



9. _____

10. _____

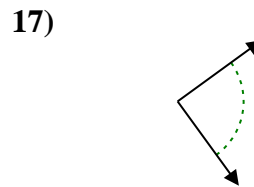
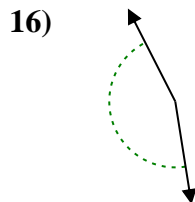
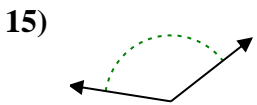
11. _____



12. _____

13. _____

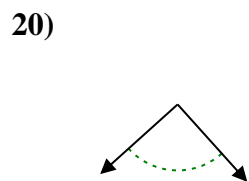
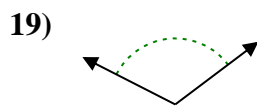
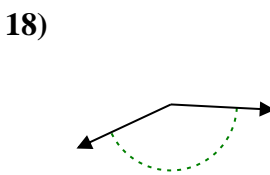
14. _____



15. _____

16. _____

17. _____



18. _____

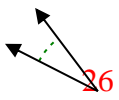
19. _____

20. _____

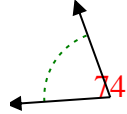


Determina si el ángulo mostrado es agudo, obtuso, derecho o recto.

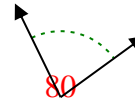
Ej)



1)



2)



Respuestas

Ej. agudo

1. agudo

2. agudo

3. derecho

4. obtuso

5. derecho

6. obtuso

7. obtuso

8. agudo

9. recto

10. agudo

11. recto

12. obtuso

13. agudo

14. agudo

15. obtuso

16. obtuso

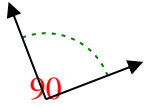
17. derecho

18. obtuso

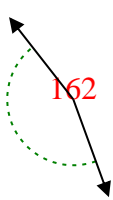
19. obtuso

20. derecho

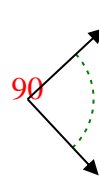
3)



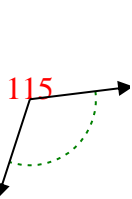
4)



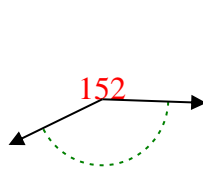
5)



6)



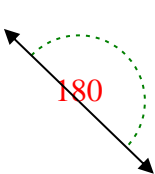
7)



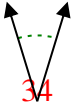
8)



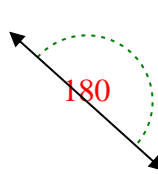
9)



10)



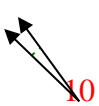
11)



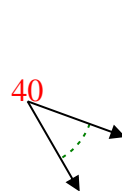
12)



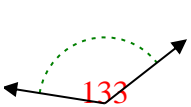
13)



14)



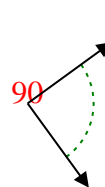
15)



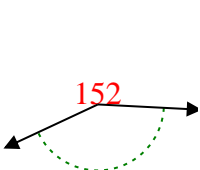
16)



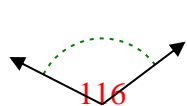
17)



18)



19)



20)

