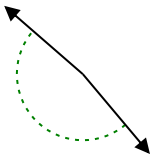




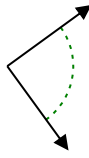
Determina si el ángulo mostrado es agudo, obtuso, derecho o recto.

Respuestas

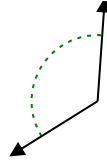
Ej)



1)



2)



Ej.

obtuso

1.

2.

3.

4.

5.

6.

7.

8.

9.

10.

11.

12.

13.

14.

15.

16.

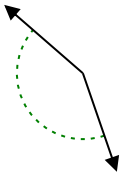
17.

18.

19.

20.

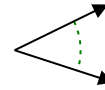
3)



4)



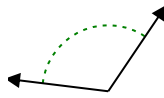
5)



6)



7)



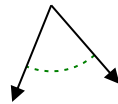
8)



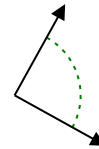
9)



10)



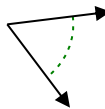
11)



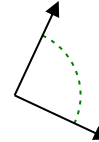
12)



13)



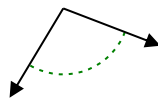
14)



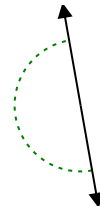
15)



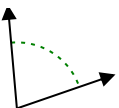
16)



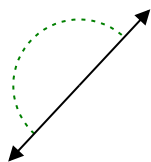
17)



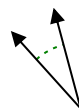
18)



19)



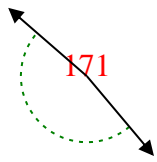
20)



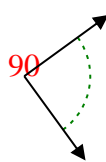


Determina si el ángulo mostrado es agudo, obtuso, derecho o recto.

Ej)



1)



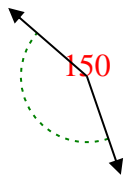
2)



Ej.

obtuso

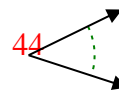
3)



4)



5)



1.

derecho

6)



7)



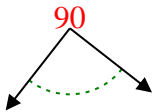
8)



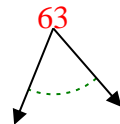
2.

obtuso

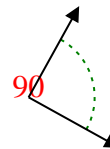
9)



10)



11)



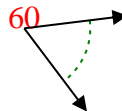
3.

obtuso

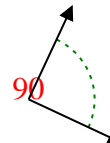
12)



13)



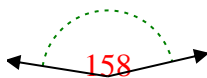
14)



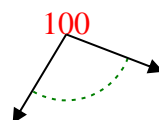
4.

agudo

15)



16)



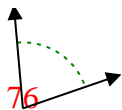
17)



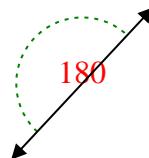
5.

agudo

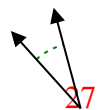
18)



19)



20)



6.

obtuso

7.

obtuso

8.

obtuso

9.

derecho

10.

agudo

11.

derecho

12.

agudo

13.

agudo

14.

derecho

15.

obtuso

16.

obtuso

17.

recto

18.

agudo

19.

recto

20.

agudo