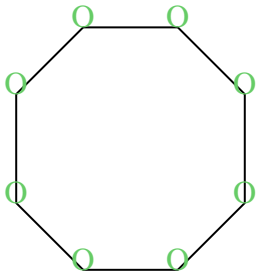


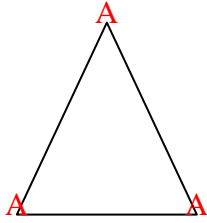


Cuenta el número de ángulos Agudos, Obtusos y Rectos dentro de cada figura

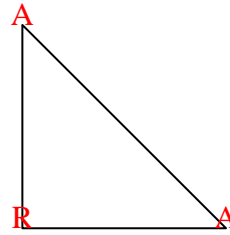
Ej)



1)



2)



Respuestas

A O R

Ej. 0 8 0

1. 3 0 0

2. 2 0 1

3. 2 2 0

4. 1 1 2

5. 1 4 0

6. 0 7 0

7. 0 4 1

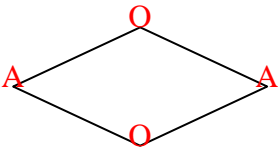
8. 0 6 0

9. 1 2 1

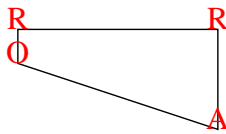
10. 0 0 4

11. 0 6 0

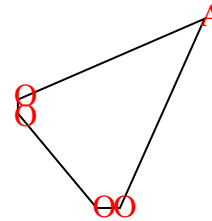
3)



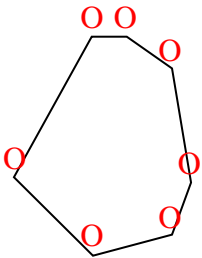
4)



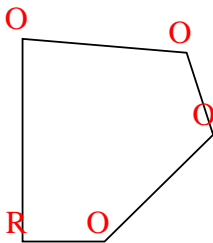
5)



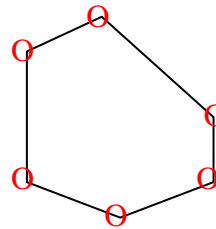
6)



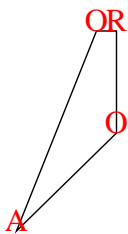
7)



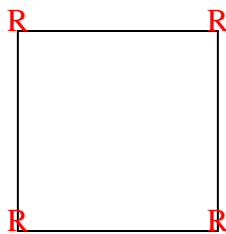
8)



9)



10)



11)

