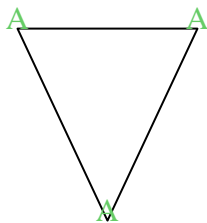


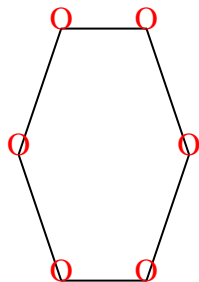


Cuenta el número de ángulos Agudos, Obtusos y Rectos dentro de cada figura

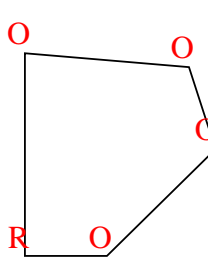
Ej)



1)



2)



Respuestas

A O R

Ej. 3 0 0

1. 0 6 0

2. 0 4 1

3. 1 4 0

4. 0 8 0

5. 0 0 4

6. 2 0 1

7. 0 2 3

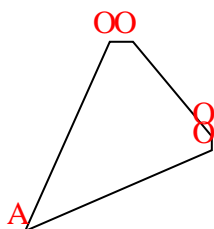
8. 1 1 2

9. 0 2 3

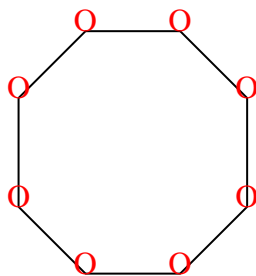
10. 0 3 2

11. 2 2 0

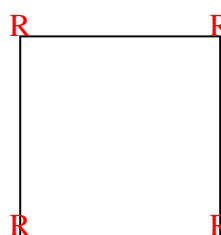
3)



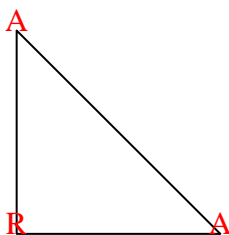
4)



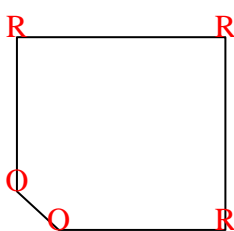
5)



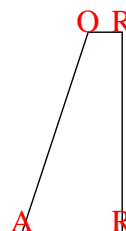
6)



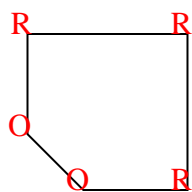
7)



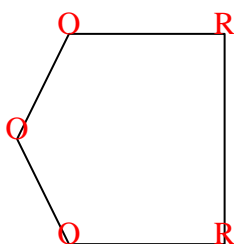
8)



9)



10)



11)

