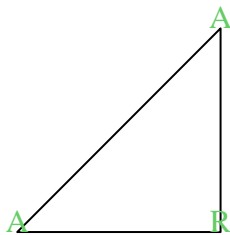







Cuenta el número de ángulos Agudos, Obtusos y Rectos dentro de cada figura

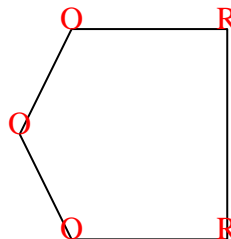
Ej)



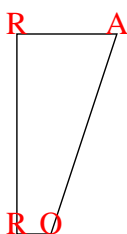
1)



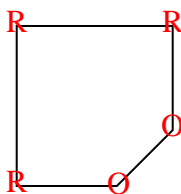
2)



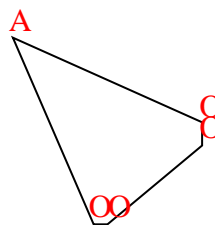
3)



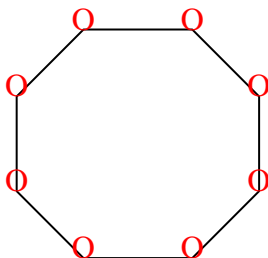
4)



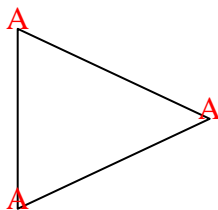
5)



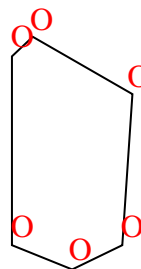
6)



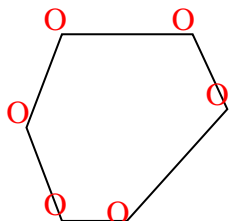
7)



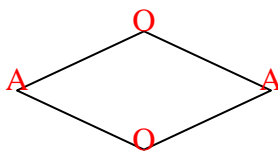
8)



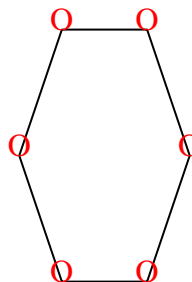
9)



10)



11)



**Respuestas**

	A	O	R
Ej.	2	0	1
1.	0	0	4
2.	0	3	2
3.	1	1	2
4.	0	2	3
5.	1	4	0
6.	0	8	0
7.	3	0	0
8.	0	6	0
9.	0	6	0
10.	2	2	0
11.	0	6	0