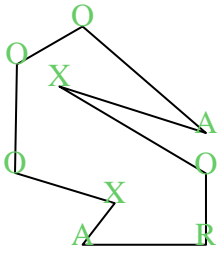


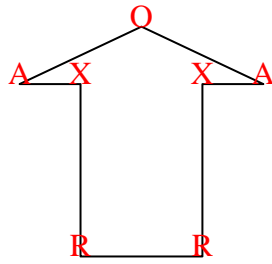


Cuenta el número de ángulos Agudos, Obtusos, Rectos y Reflejos dentro de cada figura.

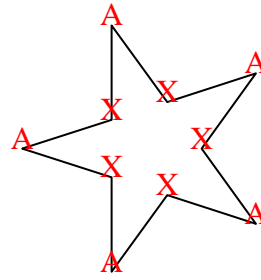
Ej)



1)



2)



Respuestas

A O R X

Ej. 2 4 1 2

1. 2 1 2 2

2. 5 0 0 5

3. 3 0 0 0

4. 4 0 0 3

5. 1 3 4 3

6. 2 2 1 1

7. 0 2 3 0

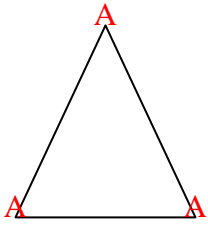
8. 2 2 0 1

9. 2 0 1 0

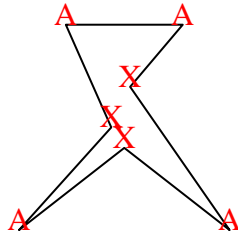
10. 2 1 4 4

11. 2 2 0 0

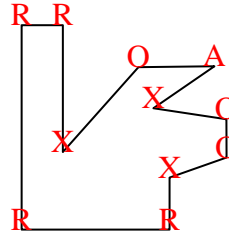
3)



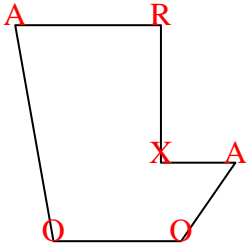
4)



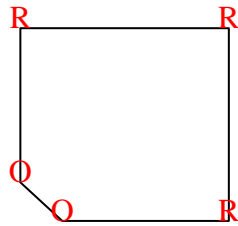
5)



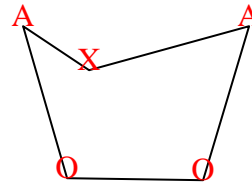
6)



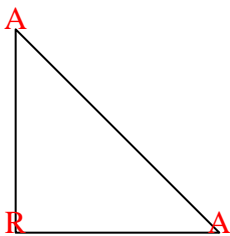
7)



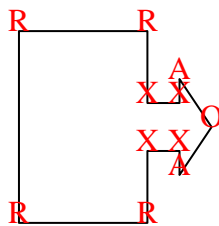
8)



9)



10)



11)

