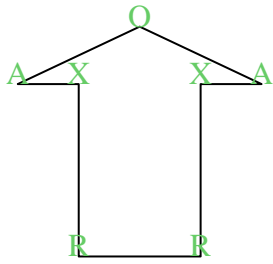


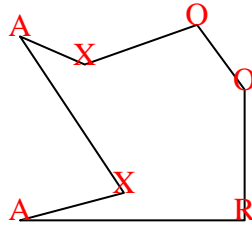


Cuenta el número de ángulos Agudos, Obtusos, Rectos y Reflejos dentro de cada figura.

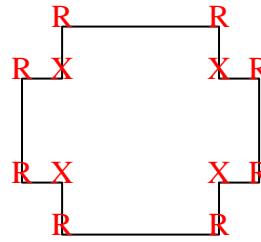
Ej)



1)



2)



Respuestas

A O R X

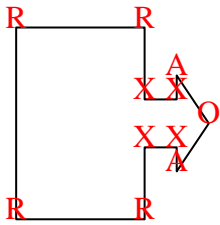
Ej. 2 1 2 2

1. 2 2 1 2

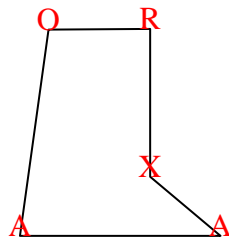
2. 0 0 8 4

3. 2 1 4 4

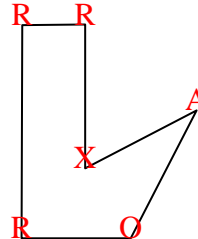
3)



4)



5)

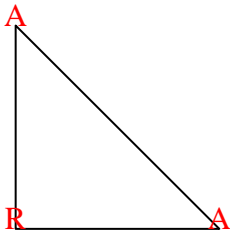


4. 2 1 1 1

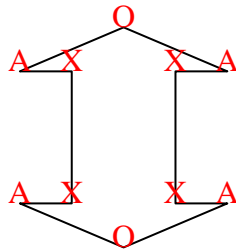
5. 1 1 3 1

6. 2 0 1 0

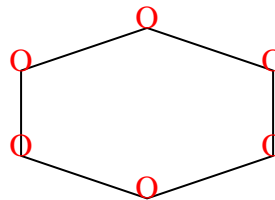
6)



7)



8)



7. 4 2 0 4

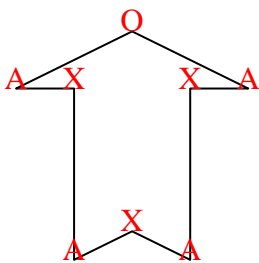
8. 0 6 0 0

9. 4 1 0 3

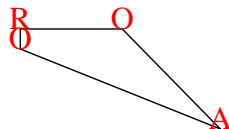
10. 1 2 1 0

11. 0 0 8 4

9)



10)



11)

