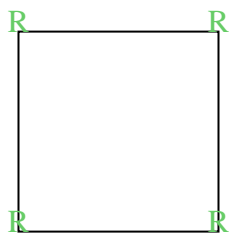


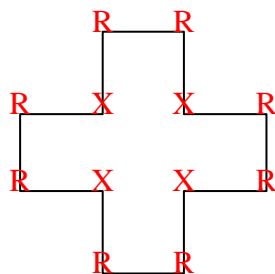


Cuenta el número de ángulos Agudos, Obtusos, Rectos y Reflejos dentro de cada figura.

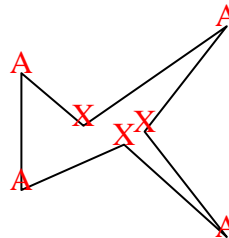
Ej)



1)



2)



Respuestas

A O R X

Ej. 0 0 4 0

1. 0 0 8 4

2. 4 0 0 3

3. 2 0 1 0

4. 2 2 0 1

5. 2 2 1 2

6. 1 2 4 2

7. 3 0 0 0

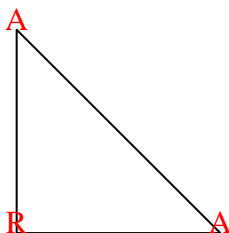
8. 2 4 1 2

9. 0 6 0 0

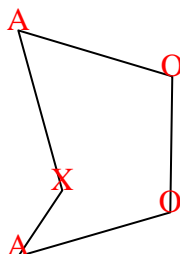
10. 0 2 3 0

11. 1 2 1 0

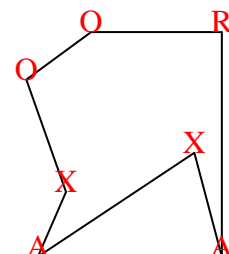
3)



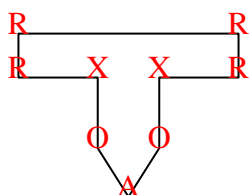
4)



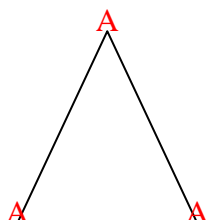
5)



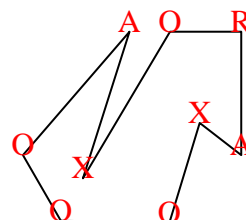
6)



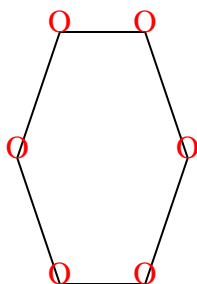
7)



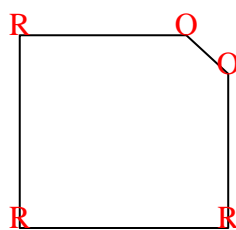
8)



9)



10)



11)

