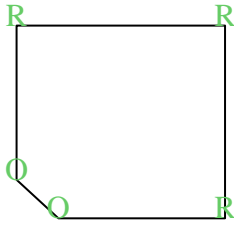


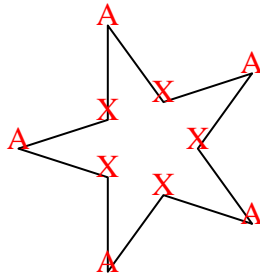


Cuenta el número de ángulos Agudos, Obtusos, Rectos y Reflejos dentro de cada figura.

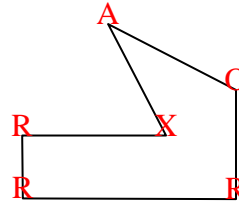
Ej)



1)



2)



Respuestas

A O R X

Ej. 0 2 3 0

1. 5 0 0 5

2. 1 1 3 1

3. 0 3 2 0

4. 2 2 0 1

5. 2 2 0 0

6. 0 0 4 0

7. 2 1 2 2

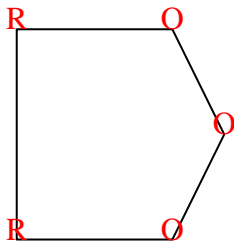
8. 2 2 1 2

9. 2 2 0 0

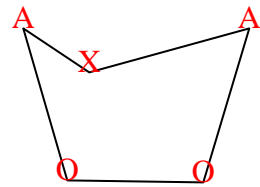
10. 1 2 4 2

11. 2 1 4 4

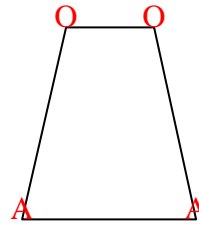
3)




4)



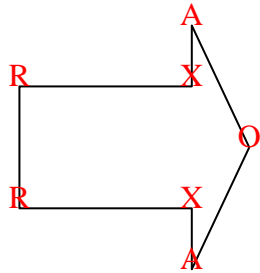
5)



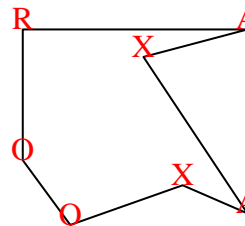
6)



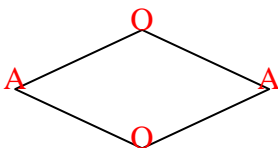
7)



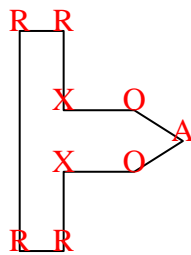
8)



9)



10)



11)

